

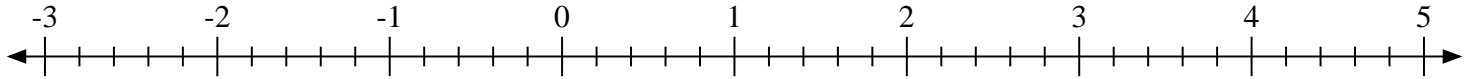


Scrivi la posizione di ogni frazione.

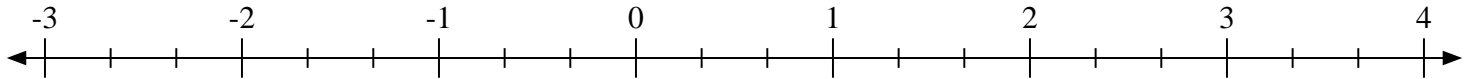
1) Indica la posizione di  $-2\frac{2}{3}$



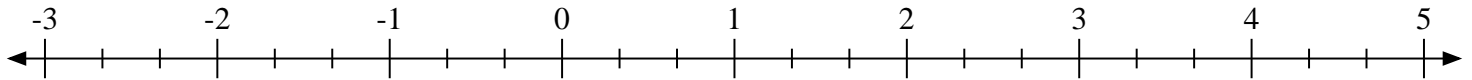
2) Indica la posizione di  $-2\frac{2}{5}$



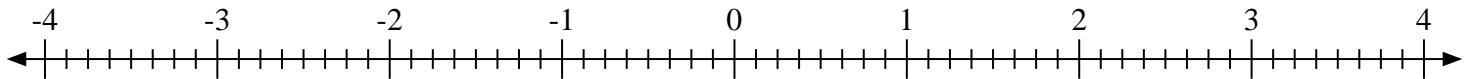
3) Indica la posizione di  $1\frac{2}{3}$



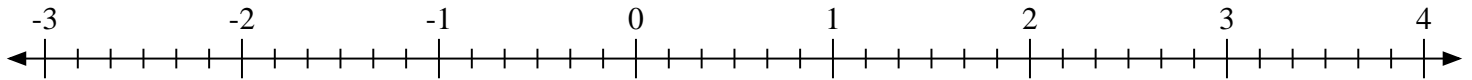
4) Indica la posizione di  $4\frac{2}{3}$



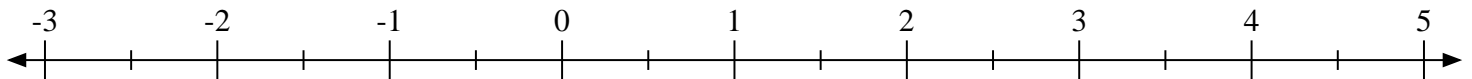
5) Indica la posizione di  $-1\frac{6}{8}$



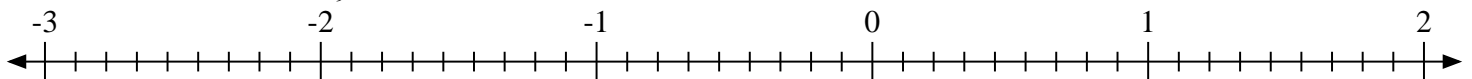
6) Indica la posizione di  $1\frac{5}{6}$



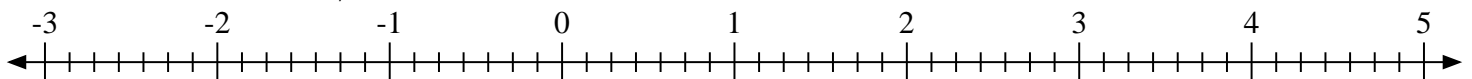
7) Indica la posizione di  $3\frac{1}{2}$



8) Indica la posizione di  $-2\frac{4}{9}$

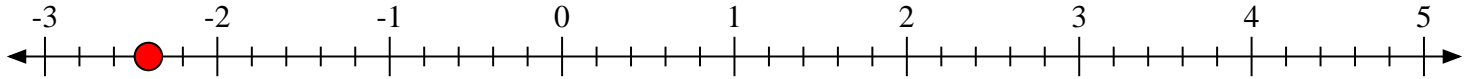
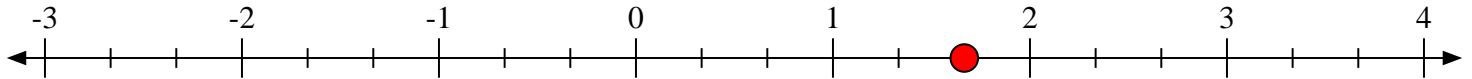
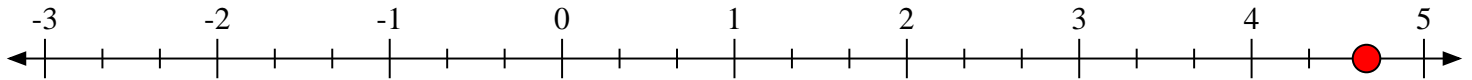
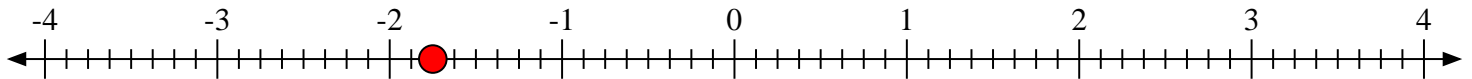
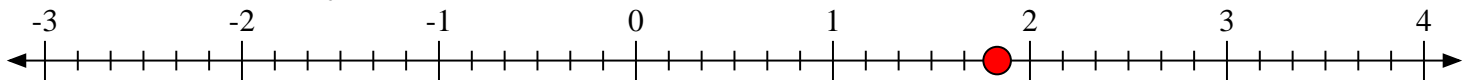
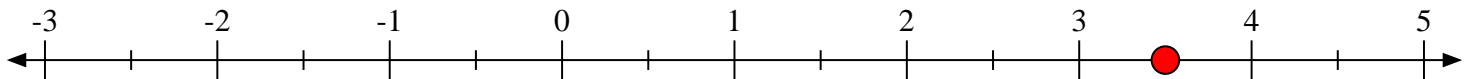
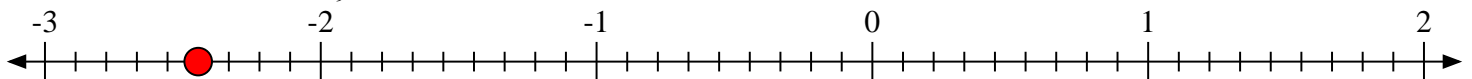


9) Indica la posizione di  $-2\frac{6}{7}$





Scrivi la posizione di ogni frazione.

1) Indica la posizione di  $-2\frac{2}{3}$ 2) Indica la posizione di  $-2\frac{2}{5}$ 3) Indica la posizione di  $1\frac{2}{3}$ 4) Indica la posizione di  $4\frac{2}{3}$ 5) Indica la posizione di  $-1\frac{6}{8}$ 6) Indica la posizione di  $1\frac{5}{6}$ 7) Indica la posizione di  $3\frac{1}{2}$ 8) Indica la posizione di  $-2\frac{4}{9}$ 9) Indica la posizione di  $-2\frac{6}{7}$ 