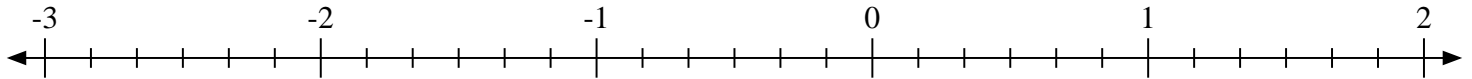


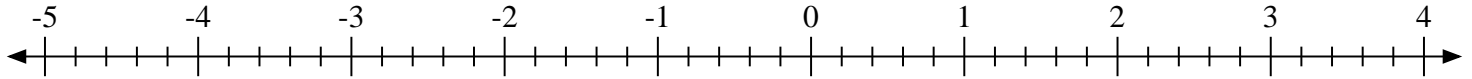


Scrivi la posizione di ogni frazione.

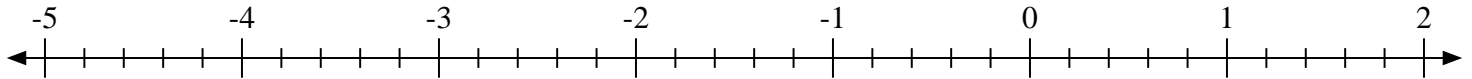
1) Indica la posizione di $-2\frac{4}{6}$



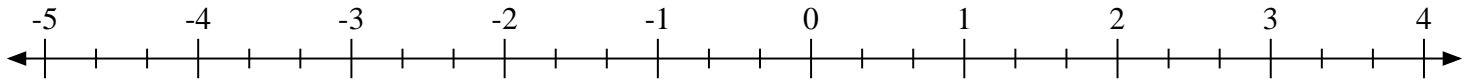
2) Indica la posizione di $-4\frac{2}{5}$



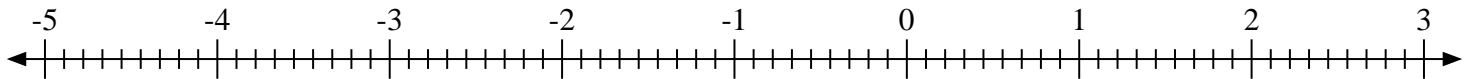
3) Indica la posizione di $-4\frac{2}{5}$



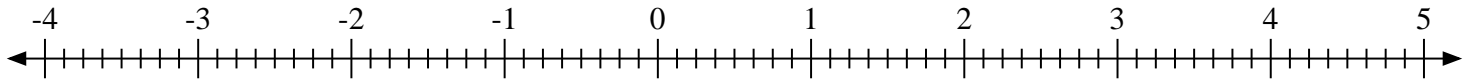
4) Indica la posizione di $-4\frac{2}{3}$



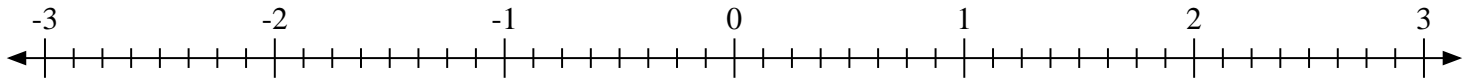
5) Indica la posizione di $0\frac{3}{9}$



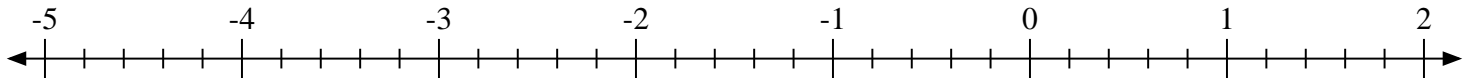
6) Indica la posizione di $4\frac{7}{8}$



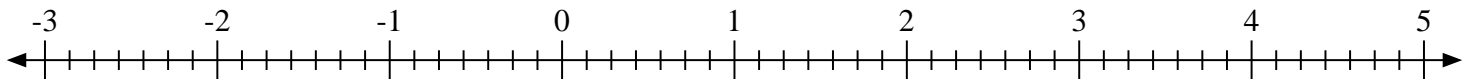
7) Indica la posizione di $1\frac{4}{8}$



8) Indica la posizione di $1\frac{2}{5}$

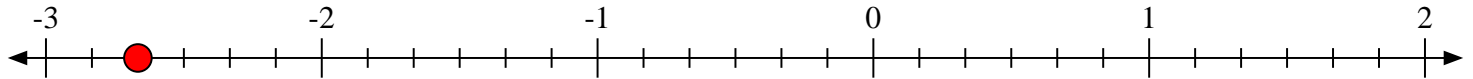
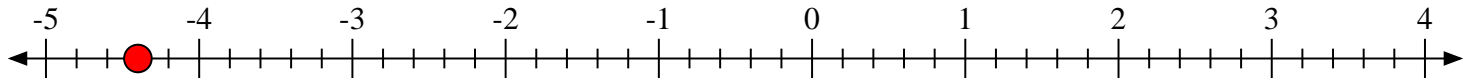
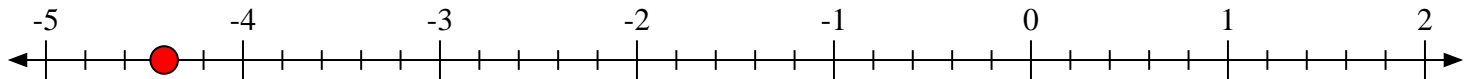
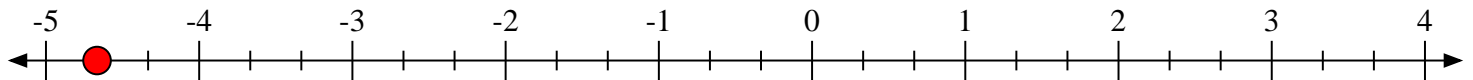
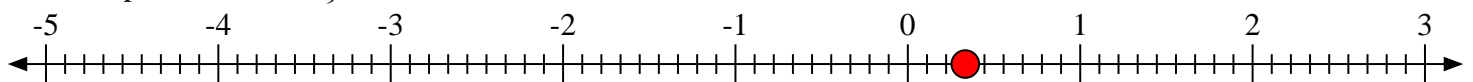
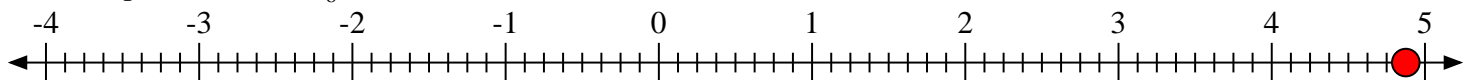
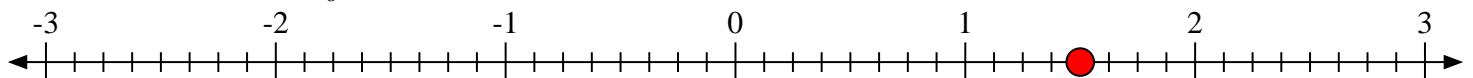
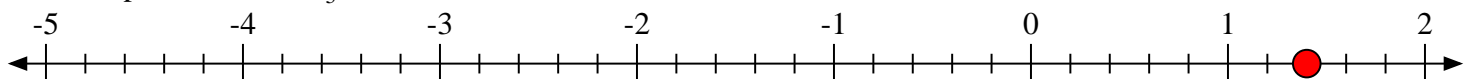


9) Indica la posizione di $3\frac{3}{7}$





Scrivi la posizione di ogni frazione.

1) Indica la posizione di $-2\frac{4}{6}$ 2) Indica la posizione di $-4\frac{2}{5}$ 3) Indica la posizione di $-4\frac{2}{5}$ 4) Indica la posizione di $-4\frac{2}{3}$ 5) Indica la posizione di $0\frac{3}{9}$ 6) Indica la posizione di $4\frac{7}{8}$ 7) Indica la posizione di $1\frac{4}{8}$ 8) Indica la posizione di $1\frac{2}{5}$ 9) Indica la posizione di $3\frac{3}{7}$ 