


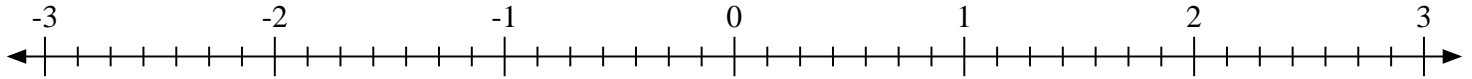


Scrivi la posizione di ogni frazione.

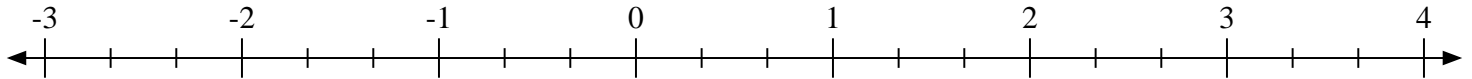
1) Indica la posizione di $-1\frac{1}{3}$



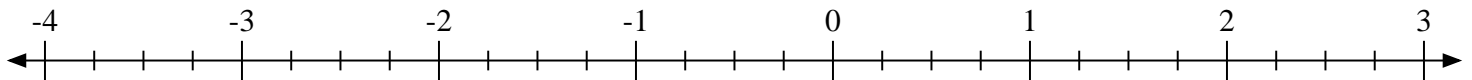
2) Indica la posizione di $1\frac{5}{7}$



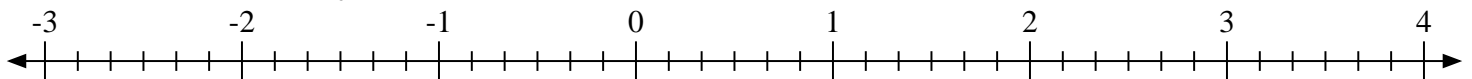
3) Indica la posizione di $3\frac{2}{3}$



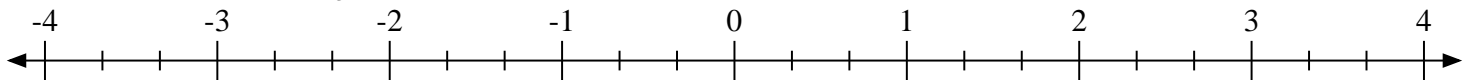
4) Indica la posizione di $-3\frac{1}{4}$



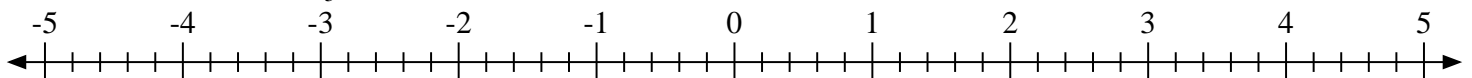
5) Indica la posizione di $-1\frac{2}{6}$



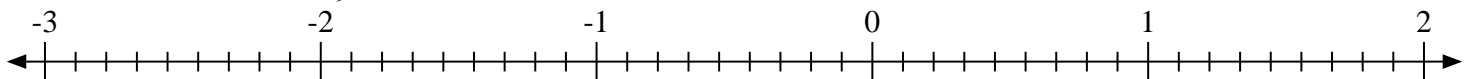
6) Indica la posizione di $-2\frac{2}{3}$



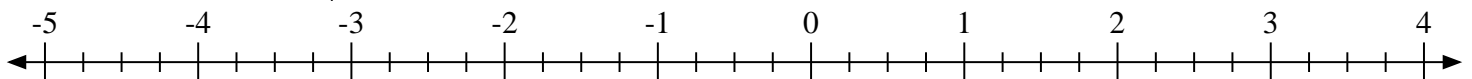
7) Indica la posizione di $4\frac{1}{5}$



8) Indica la posizione di $-1\frac{6}{9}$


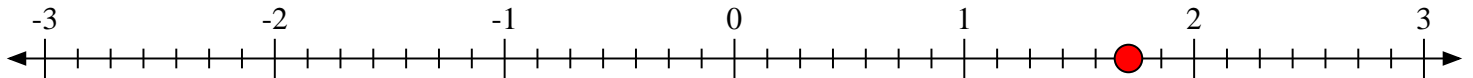
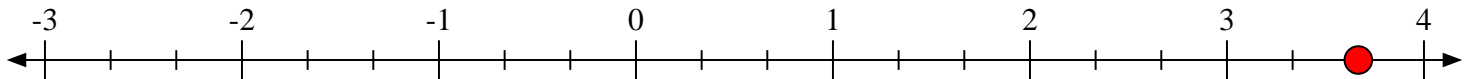
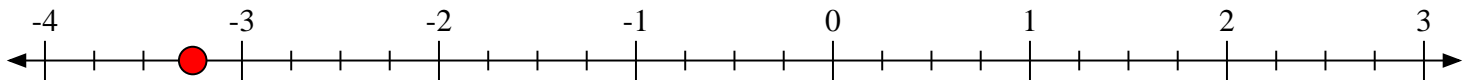
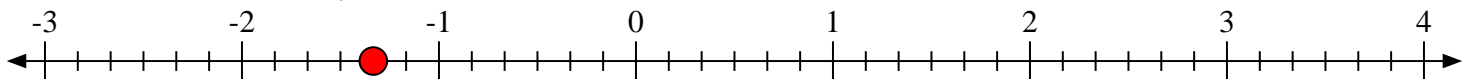
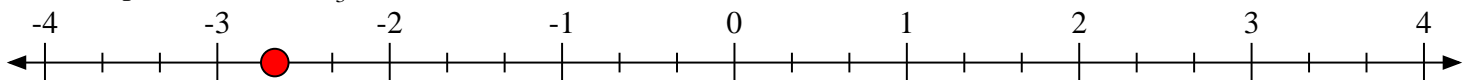
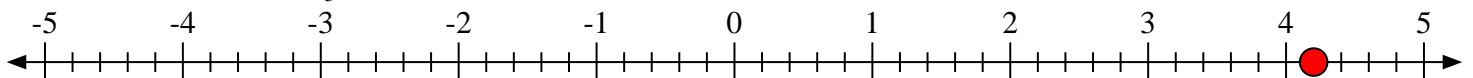
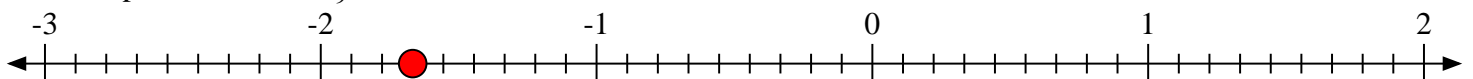


9) Indica la posizione di $2\frac{1}{4}$





Scrivi la posizione di ogni frazione.

1) Indica la posizione di $-1\frac{1}{3}$ 2) Indica la posizione di $1\frac{5}{7}$ 3) Indica la posizione di $3\frac{2}{3}$ 4) Indica la posizione di $-3\frac{1}{4}$ 5) Indica la posizione di $-1\frac{2}{6}$ 6) Indica la posizione di $-2\frac{2}{3}$ 7) Indica la posizione di $4\frac{1}{5}$ 8) Indica la posizione di $-1\frac{6}{9}$ 9) Indica la posizione di $2\frac{1}{4}$ 