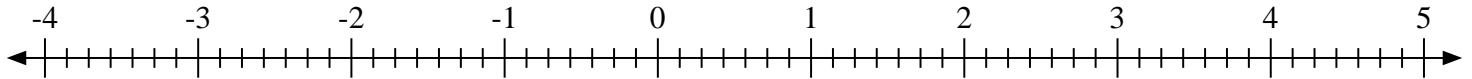





Scrivi la posizione di ogni frazione.

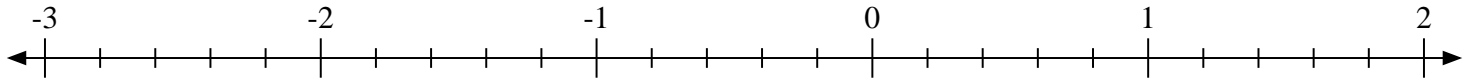
1) Indica la posizione di $4\frac{4}{7}$



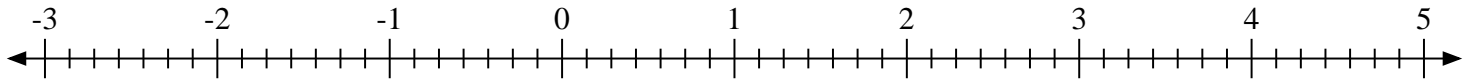
2) Indica la posizione di $1\frac{1}{3}$



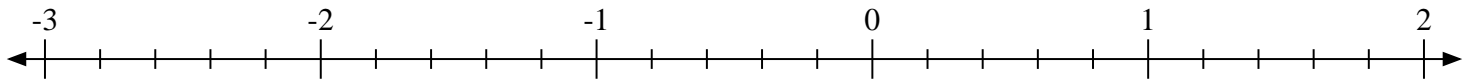
3) Indica la posizione di $-2\frac{2}{5}$



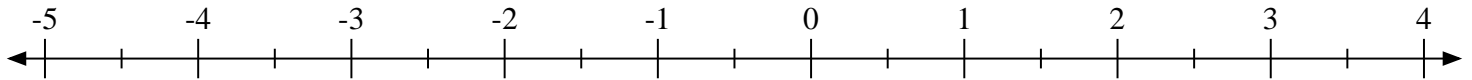
4) Indica la posizione di $1\frac{1}{7}$



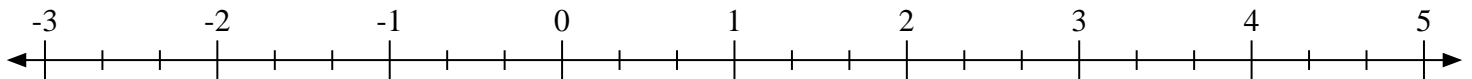
5) Indica la posizione di $0\frac{4}{5}$



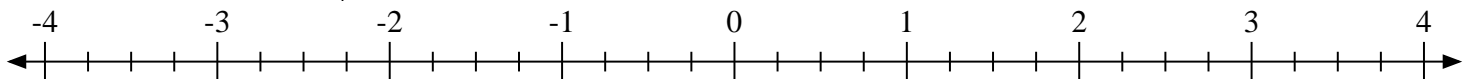
6) Indica la posizione di $-2\frac{1}{2}$



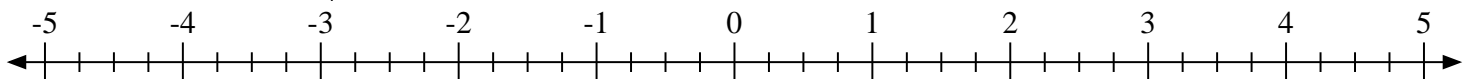
7) Indica la posizione di $-2\frac{1}{3}$



8) Indica la posizione di $-2\frac{3}{4}$

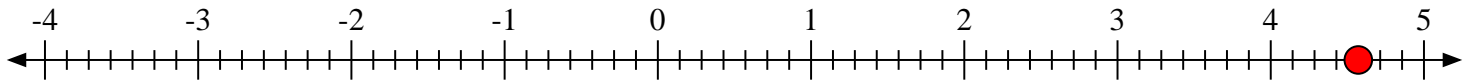

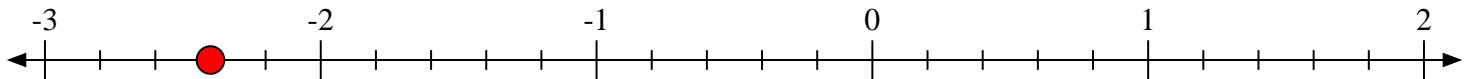
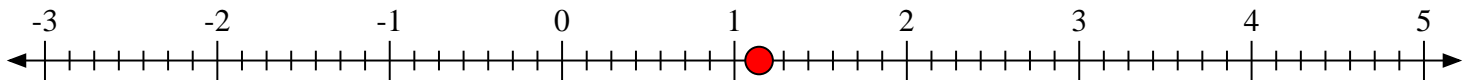
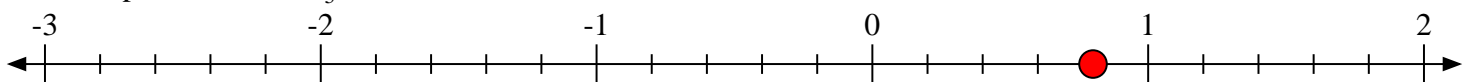
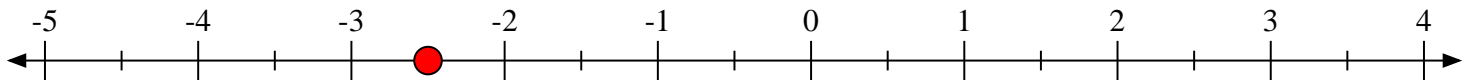
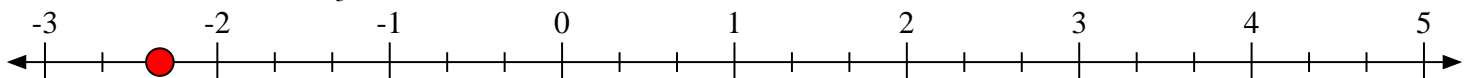
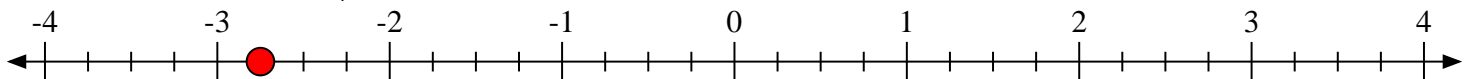


9) Indica la posizione di $0\frac{2}{4}$





Scrivi la posizione di ogni frazione.

1) Indica la posizione di $4\frac{4}{7}$ 2) Indica la posizione di $1\frac{1}{3}$ 3) Indica la posizione di $-2\frac{2}{5}$ 4) Indica la posizione di $1\frac{1}{7}$ 5) Indica la posizione di $0\frac{4}{5}$ 6) Indica la posizione di $-2\frac{1}{2}$ 7) Indica la posizione di $-2\frac{1}{3}$ 8) Indica la posizione di $-2\frac{3}{4}$ 9) Indica la posizione di $0\frac{2}{4}$ 