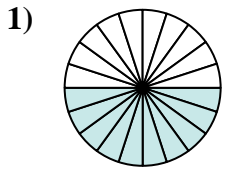
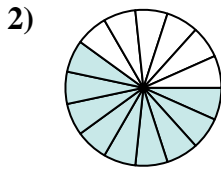




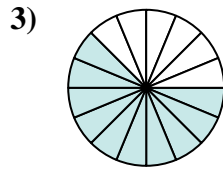
Determina quale lettera rappresenta la frazione equivalente.



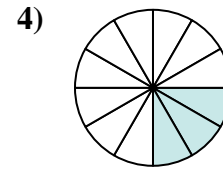
$$\frac{10}{20}$$



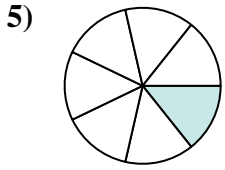
$$\frac{9}{15}$$



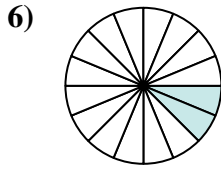
$$\frac{10}{16}$$



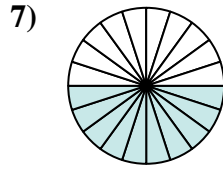
$$\frac{3}{12}$$



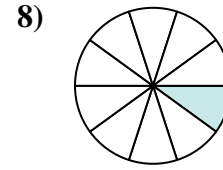
$$\frac{1}{7}$$



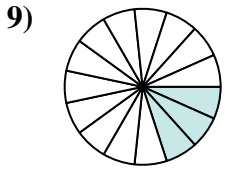
$$\frac{2}{16}$$



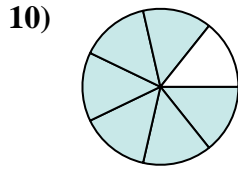
$$\frac{10}{20}$$



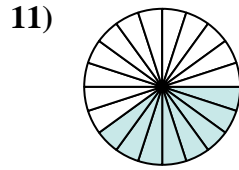
$$\frac{1}{10}$$



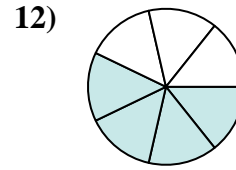
$$\frac{3}{15}$$



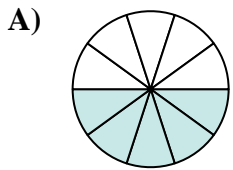
$$\frac{6}{7}$$



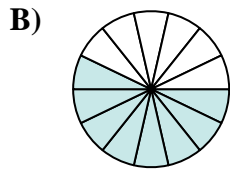
$$\frac{8}{20}$$



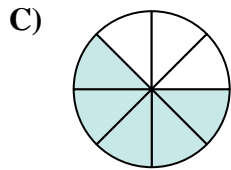
$$\frac{4}{7}$$



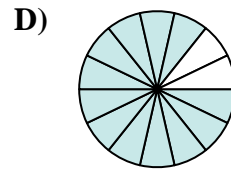
$$\frac{5}{10}$$



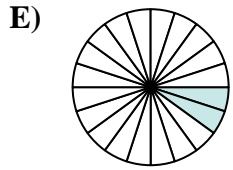
$$\frac{8}{14}$$



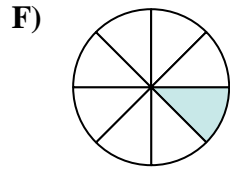
$$\frac{5}{8}$$



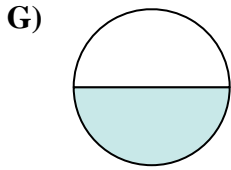
$$\frac{12}{14}$$



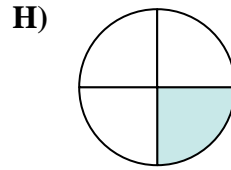
$$\frac{2}{20}$$



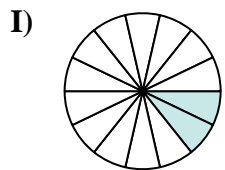
$$\frac{1}{8}$$



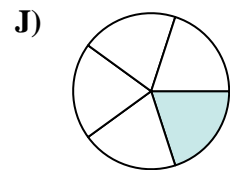
$$\frac{1}{2}$$



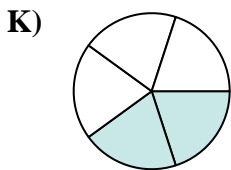
$$\frac{1}{4}$$



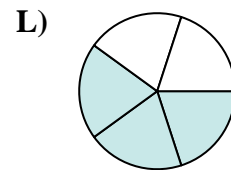
$$\frac{2}{14}$$



$$\frac{1}{5}$$



$$\frac{2}{5}$$



$$\frac{3}{5}$$

Risposte

1. _____

2. _____

3. _____

4. _____

5. _____

6. _____

7. _____

8. _____

9. _____

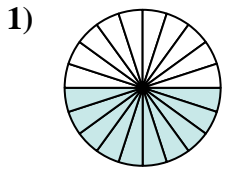
10. _____

11. _____

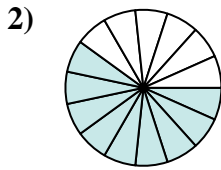
12. _____



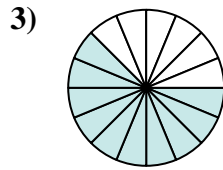
Determina quale lettera rappresenta la frazione equivalente.



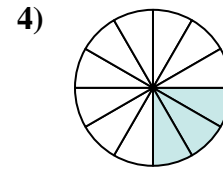
$$\frac{10}{20}$$



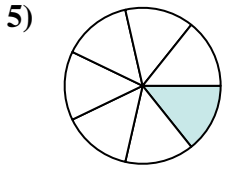
$$\frac{9}{15}$$



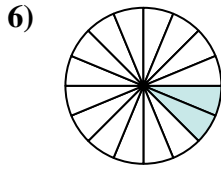
$$\frac{10}{16}$$



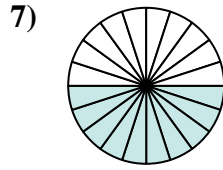
$$\frac{3}{12}$$



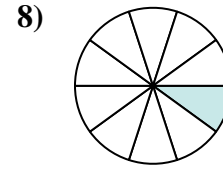
$$\frac{1}{7}$$



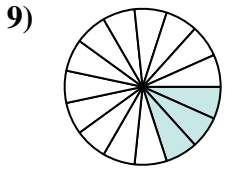
$$\frac{2}{16}$$



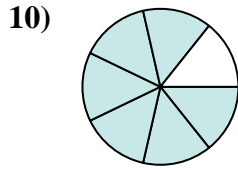
$$\frac{10}{20}$$



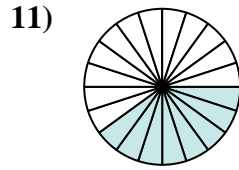
$$\frac{1}{10}$$



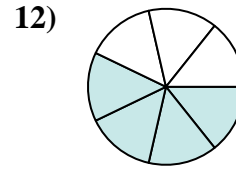
$$\frac{3}{15}$$



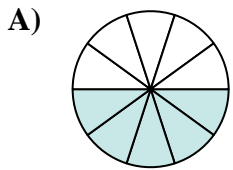
$$\frac{6}{7}$$



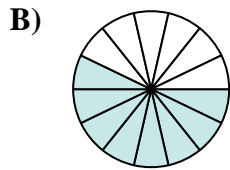
$$\frac{8}{20}$$



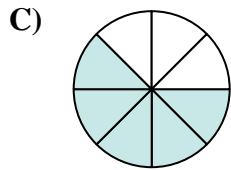
$$\frac{4}{7}$$



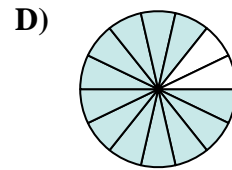
$$\frac{5}{10}$$



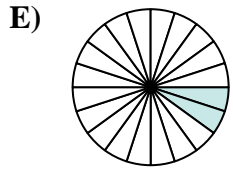
$$\frac{8}{14}$$



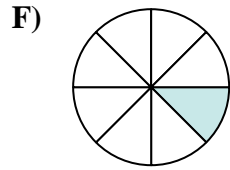
$$\frac{5}{8}$$



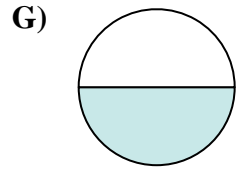
$$\frac{12}{14}$$



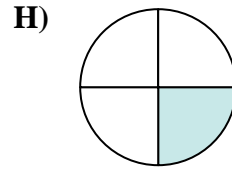
$$\frac{2}{20}$$



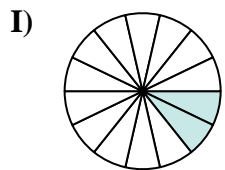
$$\frac{1}{8}$$



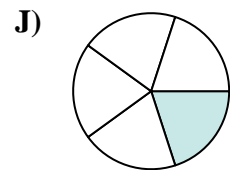
$$\frac{1}{2}$$



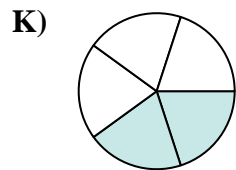
$$\frac{1}{4}$$



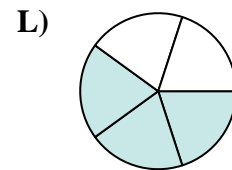
$$\frac{2}{14}$$



$$\frac{1}{5}$$



$$\frac{2}{5}$$

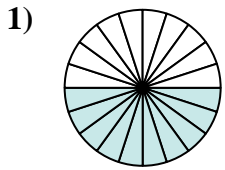


$$\frac{3}{5}$$

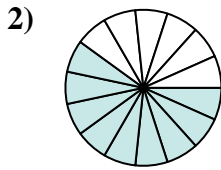
Risposte1. **G** 2. **L** 3. **C** 4. **H** 5. **I** 6. **F** 7. **A** 8. **E** 9. **J** 10. **D** 11. **K** 12. **B**



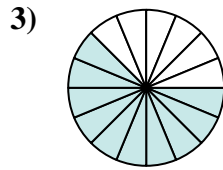
Determina quale lettera rappresenta la frazione equivalente.

Risposte

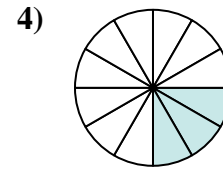
$$\frac{10}{20} : \frac{10}{10}$$



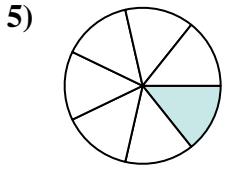
$$\frac{9}{15} : \frac{3}{3}$$



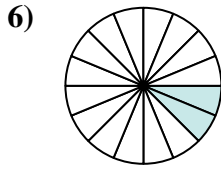
$$\frac{10}{16} : \frac{2}{2}$$



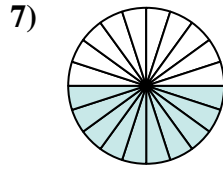
$$\frac{3}{12} : \frac{3}{3}$$



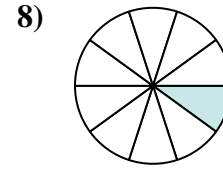
$$\frac{1}{7} \times 2$$



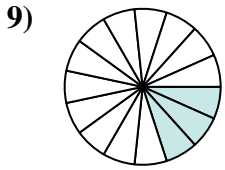
$$\frac{2}{16} : \frac{2}{2}$$



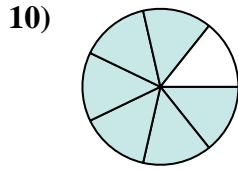
$$\frac{10}{20} : \frac{2}{2}$$



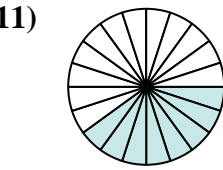
$$\frac{1}{10} \times 2$$



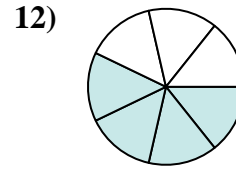
$$\frac{3}{15} : \frac{3}{3}$$



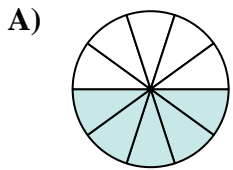
$$\frac{6}{7} \times 2$$



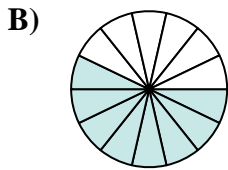
$$\frac{8}{20} : \frac{4}{4}$$



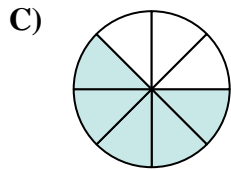
$$\frac{4}{7} \times 2$$



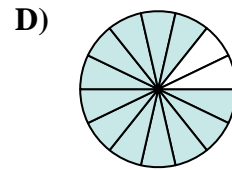
$$\frac{5}{10}$$



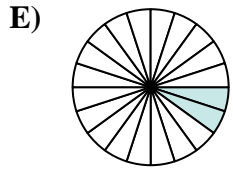
$$\frac{8}{14}$$



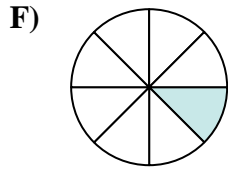
$$\frac{5}{8}$$



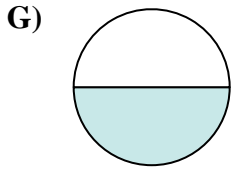
$$\frac{12}{14}$$



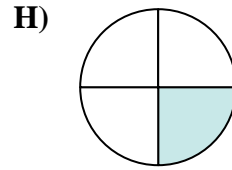
$$\frac{2}{20}$$



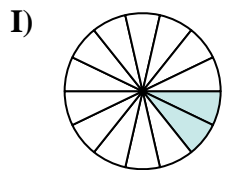
$$\frac{1}{8}$$



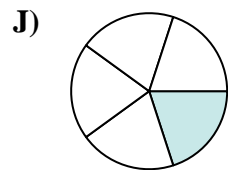
$$\frac{1}{2}$$



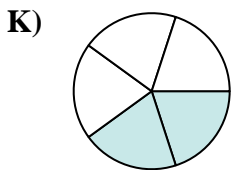
$$\frac{1}{4}$$



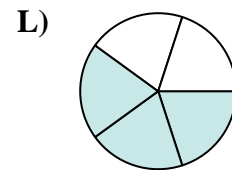
$$\frac{2}{14}$$



$$\frac{1}{5}$$



$$\frac{2}{5}$$



$$\frac{3}{5}$$

1. _____

2. _____

3. _____

4. _____

5. _____

6. _____

7. _____

8. _____

9. _____

10. _____

11. _____

12. _____