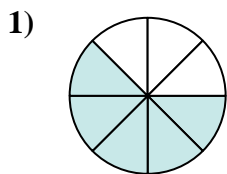
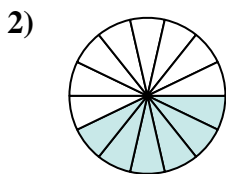




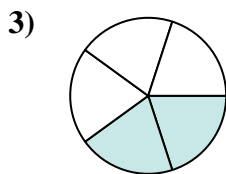
Determina quale lettera rappresenta la frazione equivalente.



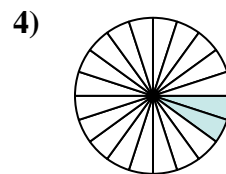
$$\frac{5}{8}$$



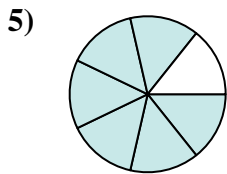
$$\frac{6}{14}$$



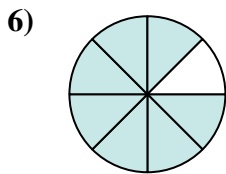
$$\frac{2}{5}$$



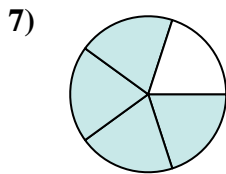
$$\frac{2}{20}$$



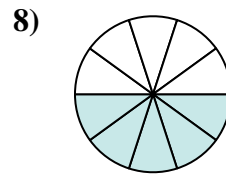
$$\frac{6}{7}$$



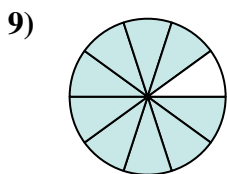
$$\frac{7}{8}$$



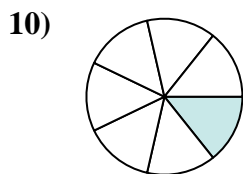
$$\frac{4}{5}$$



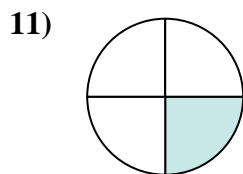
$$\frac{5}{10}$$



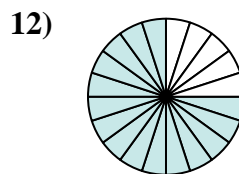
$$\frac{9}{10}$$



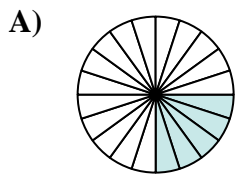
$$\frac{1}{7}$$



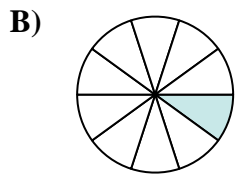
$$\frac{1}{4}$$



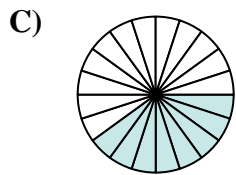
$$\frac{15}{20}$$



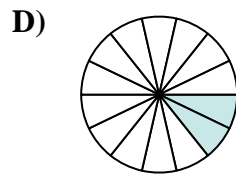
$$\frac{5}{20}$$



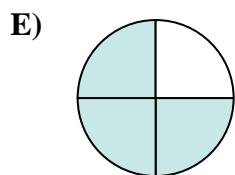
$$\frac{1}{10}$$



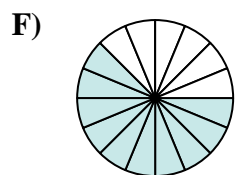
$$\frac{8}{20}$$



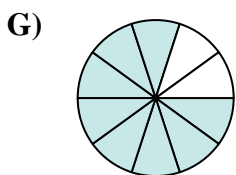
$$\frac{2}{14}$$



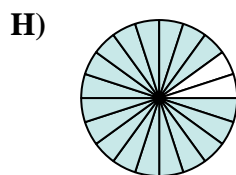
$$\frac{3}{4}$$



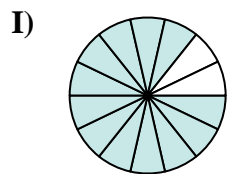
$$\frac{10}{16}$$



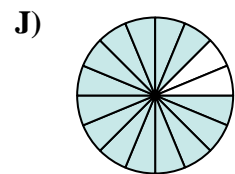
$$\frac{8}{10}$$



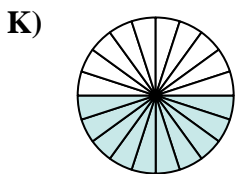
$$\frac{18}{20}$$



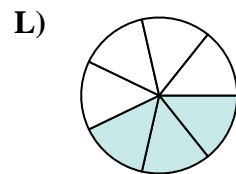
$$\frac{12}{14}$$



$$\frac{14}{16}$$



$$\frac{10}{20}$$



$$\frac{3}{7}$$

**Risposte**

1. \_\_\_\_\_

2. \_\_\_\_\_

3. \_\_\_\_\_

4. \_\_\_\_\_

5. \_\_\_\_\_

6. \_\_\_\_\_

7. \_\_\_\_\_

8. \_\_\_\_\_

9. \_\_\_\_\_

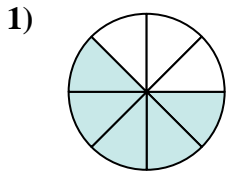
10. \_\_\_\_\_

11. \_\_\_\_\_

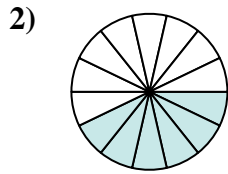
12. \_\_\_\_\_



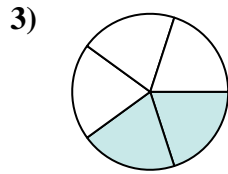
Determina quale lettera rappresenta la frazione equivalente.



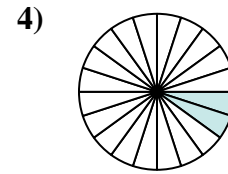
$$\frac{5}{8}$$



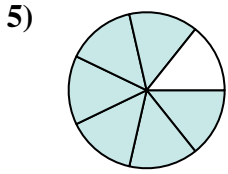
$$\frac{6}{14}$$



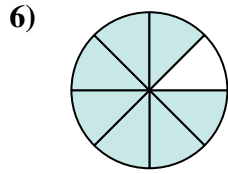
$$\frac{2}{5}$$



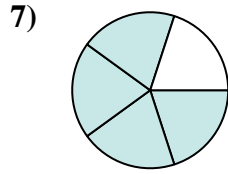
$$\frac{2}{20}$$



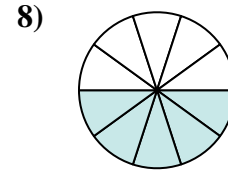
$$\frac{6}{7}$$



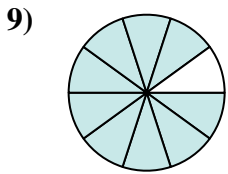
$$\frac{7}{8}$$



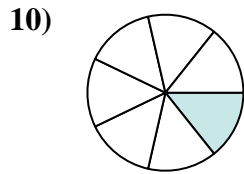
$$\frac{4}{5}$$



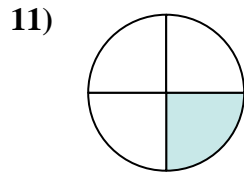
$$\frac{5}{10}$$



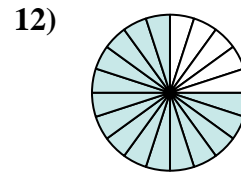
$$\frac{9}{10}$$



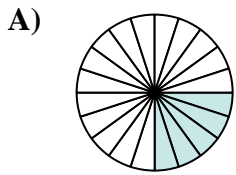
$$\frac{1}{7}$$



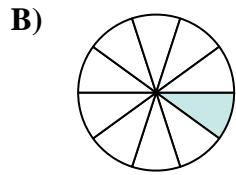
$$\frac{1}{4}$$



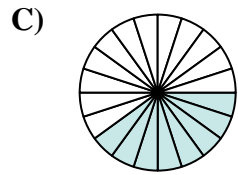
$$\frac{15}{20}$$



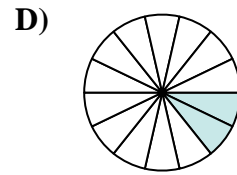
$$\frac{5}{20}$$



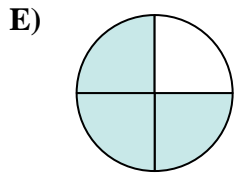
$$\frac{1}{10}$$



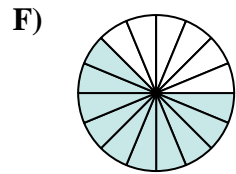
$$\frac{8}{20}$$



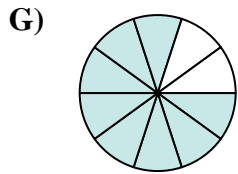
$$\frac{2}{14}$$



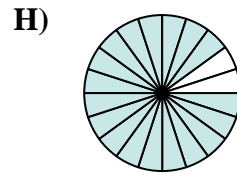
$$\frac{3}{4}$$



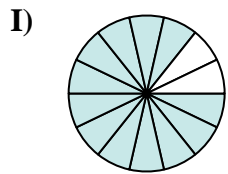
$$\frac{10}{16}$$



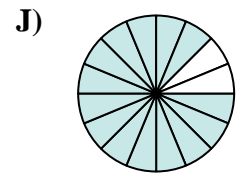
$$\frac{8}{10}$$



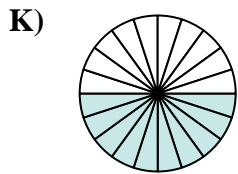
$$\frac{18}{20}$$



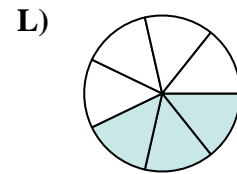
$$\frac{12}{14}$$



$$\frac{14}{16}$$



$$\frac{10}{20}$$

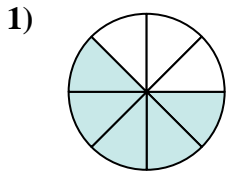


$$\frac{3}{7}$$

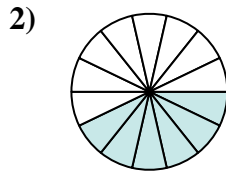
**Risposte**1.     **F**    2.     **L**    3.     **C**    4.     **B**    5.     **I**    6.     **J**    7.     **G**    8.     **K**    9.     **H**    10.     **D**    11.     **A**    12.     **E**



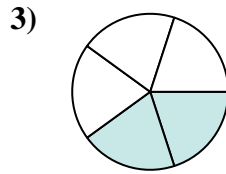
Determina quale lettera rappresenta la frazione equivalente.



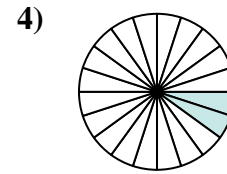
$$\frac{5 \times 2}{8 \times 2}$$



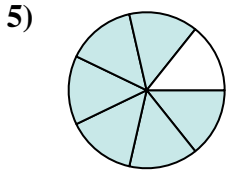
$$\frac{6 \div 2}{14 \div 2}$$



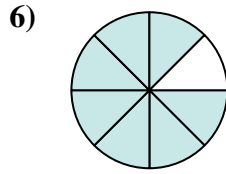
$$\frac{2 \times 4}{5 \times 4}$$



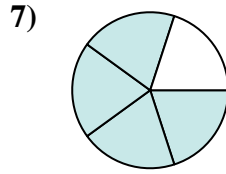
$$\frac{2 \div 2}{20 \div 2}$$



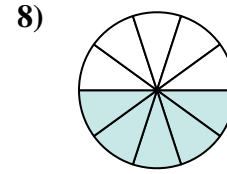
$$\frac{6 \times 2}{7 \times 2}$$



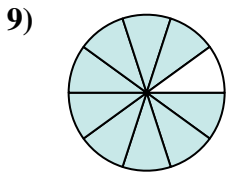
$$\frac{7 \times 2}{8 \times 2}$$



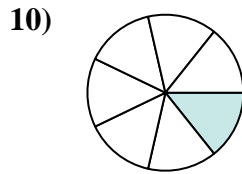
$$\frac{4 \times 2}{5 \times 2}$$



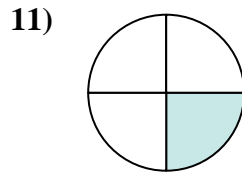
$$\frac{5 \times 2}{10 \times 2}$$



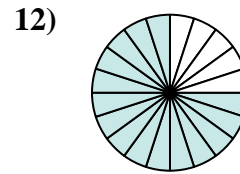
$$\frac{9 \times 2}{10 \times 2}$$



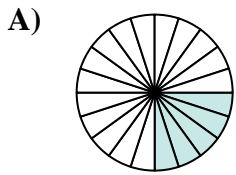
$$\frac{1 \times 2}{7 \times 2}$$



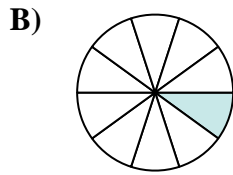
$$\frac{1 \times 5}{4 \times 5}$$



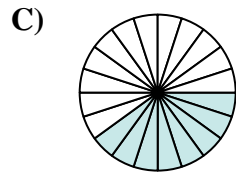
$$\frac{15 \div 5}{20 \div 5}$$



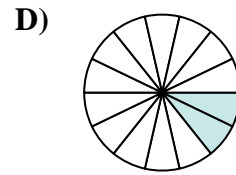
$$\frac{5}{20}$$



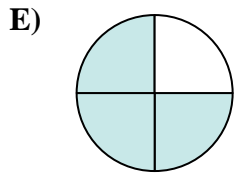
$$\frac{1}{10}$$



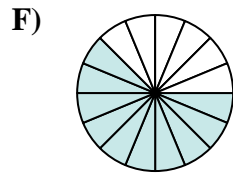
$$\frac{8}{20}$$



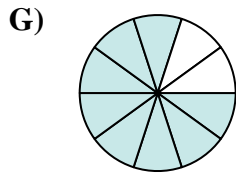
$$\frac{2}{14}$$



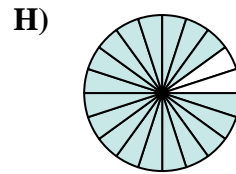
$$\frac{3}{4}$$



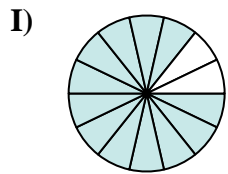
$$\frac{10}{16}$$



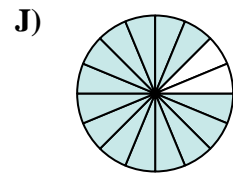
$$\frac{8}{10}$$



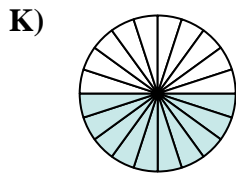
$$\frac{18}{20}$$



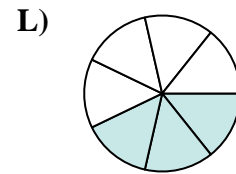
$$\frac{12}{14}$$



$$\frac{14}{16}$$



$$\frac{10}{20}$$



$$\frac{3}{7}$$

**Risposte**

Ex. \_\_\_\_\_

1. \_\_\_\_\_

2. \_\_\_\_\_

3. \_\_\_\_\_

4. \_\_\_\_\_

5. \_\_\_\_\_

6. \_\_\_\_\_

7. \_\_\_\_\_

8. \_\_\_\_\_

9. \_\_\_\_\_

10. \_\_\_\_\_

11. \_\_\_\_\_

12. \_\_\_\_\_