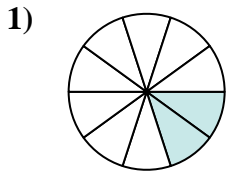
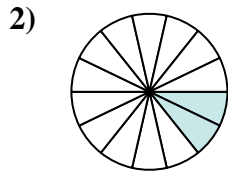




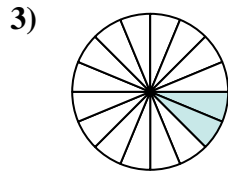
Determina quale lettera rappresenta la frazione equivalente.



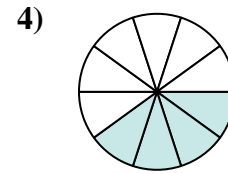
$$\frac{2}{10}$$



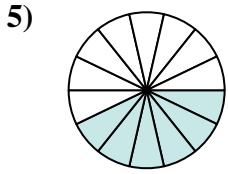
$$\frac{2}{14}$$



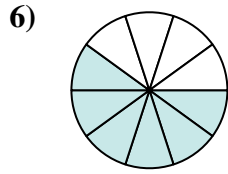
$$\frac{2}{16}$$



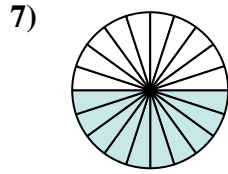
$$\frac{4}{10}$$



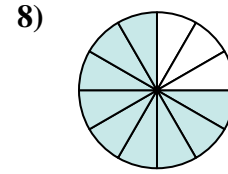
$$\frac{6}{14}$$



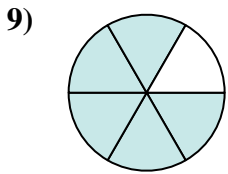
$$\frac{6}{10}$$



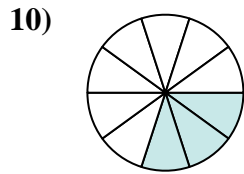
$$\frac{10}{20}$$



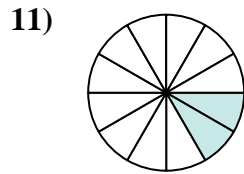
$$\frac{9}{12}$$



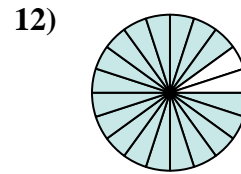
$$\frac{5}{6}$$



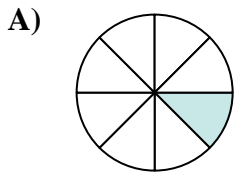
$$\frac{3}{10}$$



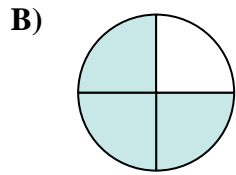
$$\frac{2}{12}$$



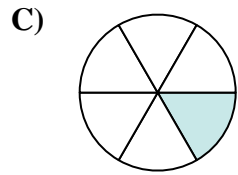
$$\frac{18}{20}$$



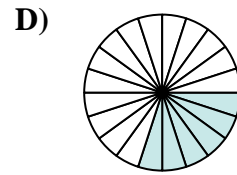
$$\frac{1}{8}$$



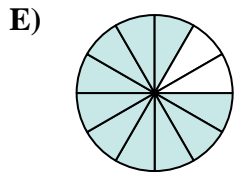
$$\frac{3}{4}$$



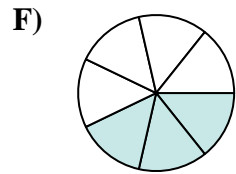
$$\frac{1}{6}$$



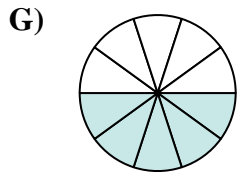
$$\frac{6}{20}$$



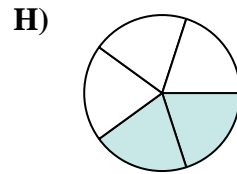
$$\frac{10}{12}$$



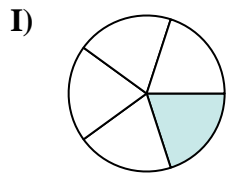
$$\frac{3}{7}$$



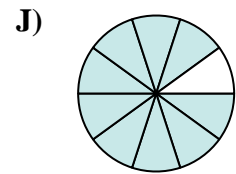
$$\frac{5}{10}$$



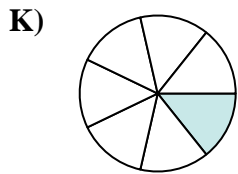
$$\frac{2}{5}$$



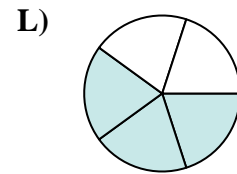
$$\frac{1}{5}$$



$$\frac{9}{10}$$



$$\frac{1}{7}$$



$$\frac{3}{5}$$

**Risposte**

1. \_\_\_\_\_

2. \_\_\_\_\_

3. \_\_\_\_\_

4. \_\_\_\_\_

5. \_\_\_\_\_

6. \_\_\_\_\_

7. \_\_\_\_\_

8. \_\_\_\_\_

9. \_\_\_\_\_

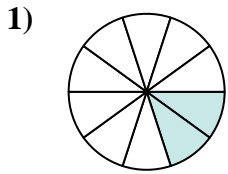
10. \_\_\_\_\_

11. \_\_\_\_\_

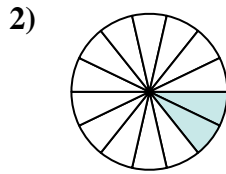
12. \_\_\_\_\_



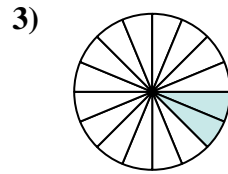
Determina quale lettera rappresenta la frazione equivalente.



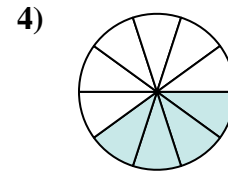
$$\frac{2}{10}$$



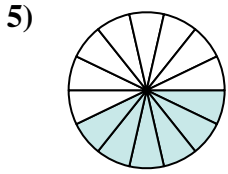
$$\frac{2}{14}$$



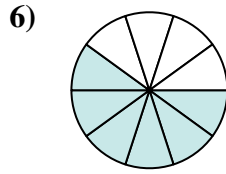
$$\frac{2}{16}$$



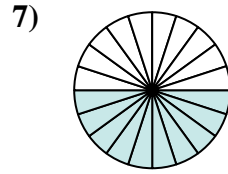
$$\frac{4}{10}$$



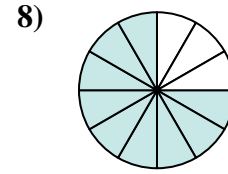
$$\frac{6}{14}$$



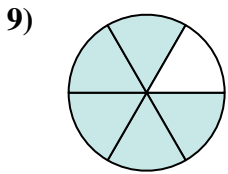
$$\frac{6}{10}$$



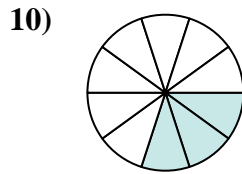
$$\frac{10}{20}$$



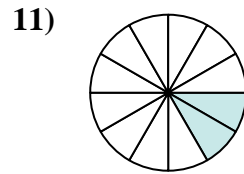
$$\frac{9}{12}$$



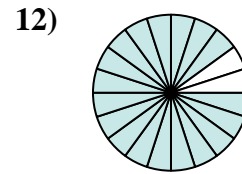
$$\frac{5}{6}$$



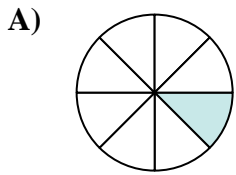
$$\frac{3}{10}$$



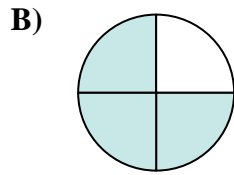
$$\frac{2}{12}$$



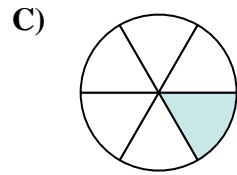
$$\frac{18}{20}$$



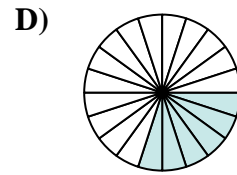
$$\frac{1}{8}$$



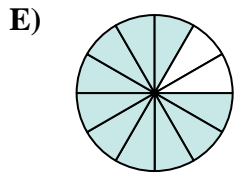
$$\frac{3}{4}$$



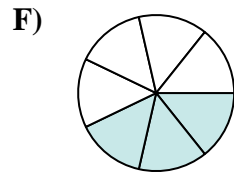
$$\frac{1}{6}$$



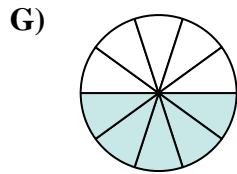
$$\frac{6}{20}$$



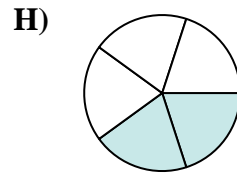
$$\frac{10}{12}$$



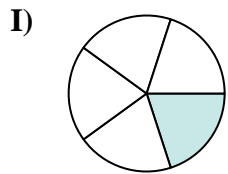
$$\frac{3}{7}$$



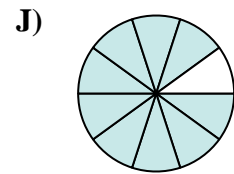
$$\frac{5}{10}$$



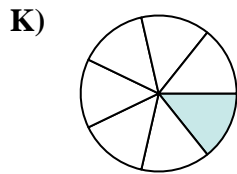
$$\frac{2}{5}$$



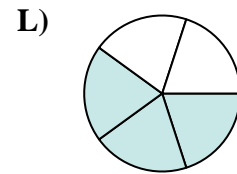
$$\frac{1}{5}$$



$$\frac{9}{10}$$



$$\frac{1}{7}$$

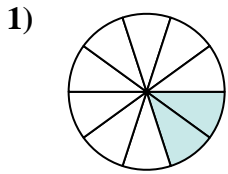


$$\frac{3}{5}$$

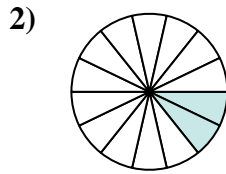
**Risposte**1.     **I**    2.     **K**    3.     **A**    4.     **H**    5.     **F**    6.     **L**    7.     **G**    8.     **B**    9.     **E**    10.     **D**    11.     **C**    12.     **J**



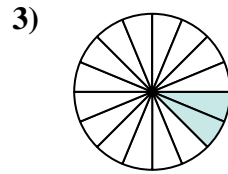
Determina quale lettera rappresenta la frazione equivalente.



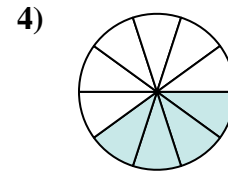
$$\frac{2 \div 2}{10 \div 2}$$



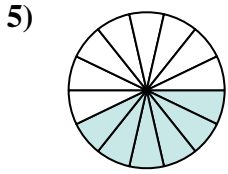
$$\frac{2 \div 2}{14 \div 2}$$



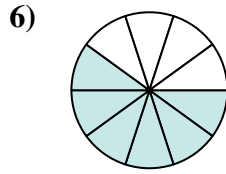
$$\frac{2 \div 2}{16 \div 2}$$



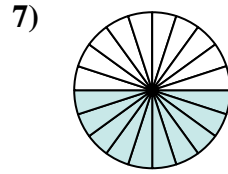
$$\frac{4 \div 2}{10 \div 2}$$



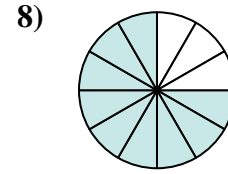
$$\frac{6 \div 2}{14 \div 2}$$



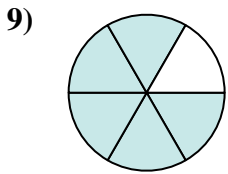
$$\frac{6 \div 2}{10 \div 2}$$



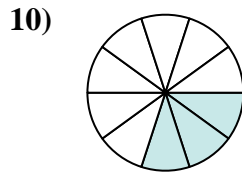
$$\frac{10 \div 2}{20 \div 2}$$



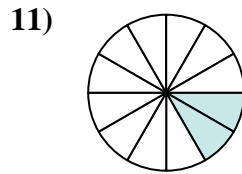
$$\frac{9 \div 3}{12 \div 3}$$



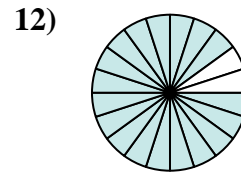
$$\frac{5 \times 2}{6 \times 2}$$



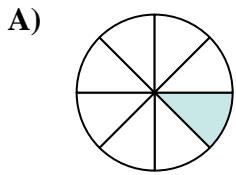
$$\frac{3 \times 2}{10 \times 2}$$



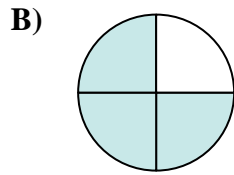
$$\frac{2 \div 2}{12 \div 2}$$



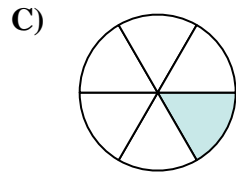
$$\frac{18 \div 2}{20 \div 2}$$



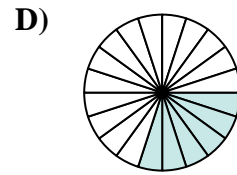
$$\frac{1}{8}$$



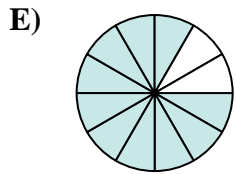
$$\frac{3}{4}$$



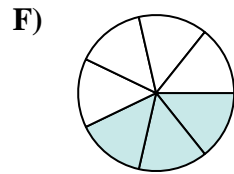
$$\frac{1}{6}$$



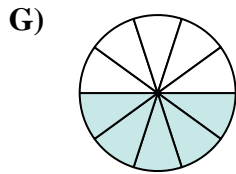
$$\frac{6}{20}$$



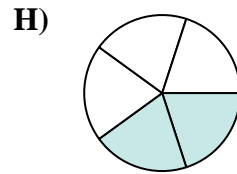
$$\frac{10}{12}$$



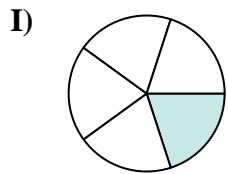
$$\frac{3}{7}$$



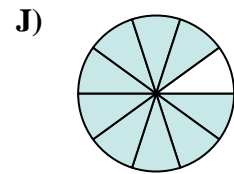
$$\frac{5}{10}$$



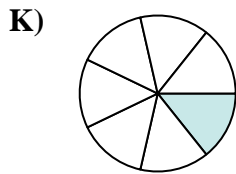
$$\frac{2}{5}$$



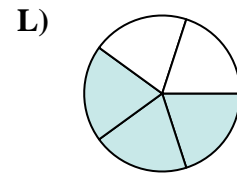
$$\frac{1}{5}$$



$$\frac{9}{10}$$



$$\frac{1}{7}$$



$$\frac{3}{5}$$

**Risposte**

Ex. \_\_\_\_\_

1. \_\_\_\_\_

2. \_\_\_\_\_

3. \_\_\_\_\_

4. \_\_\_\_\_

5. \_\_\_\_\_

6. \_\_\_\_\_

7. \_\_\_\_\_

8. \_\_\_\_\_

9. \_\_\_\_\_

10. \_\_\_\_\_

11. \_\_\_\_\_

12. \_\_\_\_\_