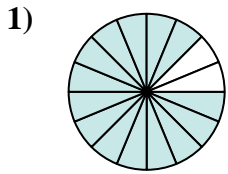
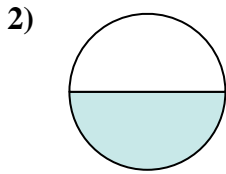




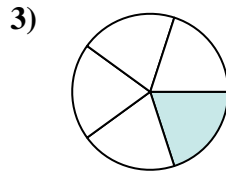
Determina quale lettera rappresenta la frazione equivalente.



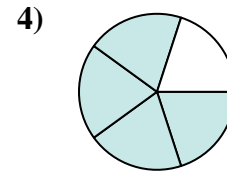
$$\frac{14}{16}$$



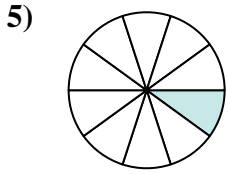
$$\frac{1}{2}$$



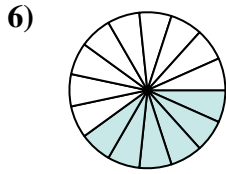
$$\frac{1}{5}$$



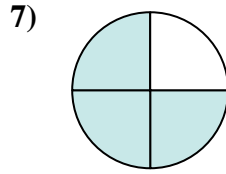
$$\frac{4}{5}$$



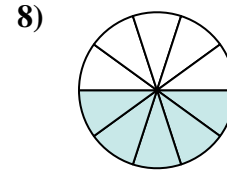
$$\frac{1}{10}$$



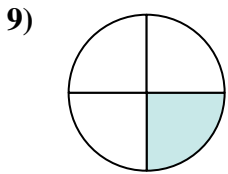
$$\frac{6}{15}$$



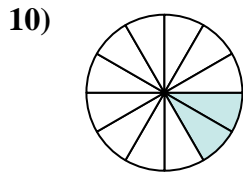
$$\frac{3}{4}$$



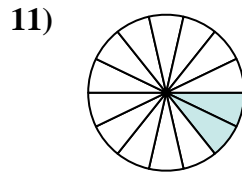
$$\frac{5}{10}$$



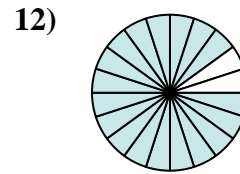
$$\frac{1}{4}$$



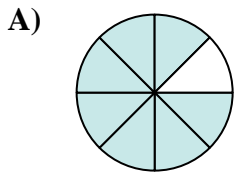
$$\frac{2}{12}$$



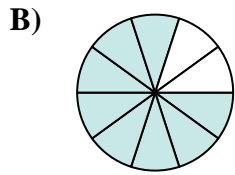
$$\frac{2}{14}$$



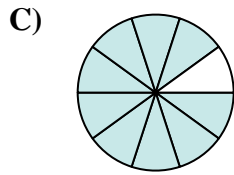
$$\frac{18}{20}$$



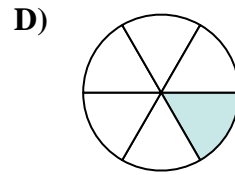
$$\frac{7}{8}$$



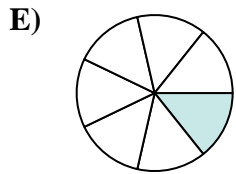
$$\frac{8}{10}$$




$$\frac{9}{10}$$



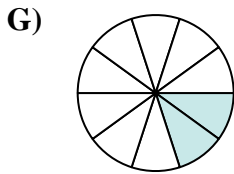
$$\frac{1}{6}$$



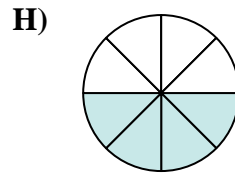
$$\frac{1}{7}$$



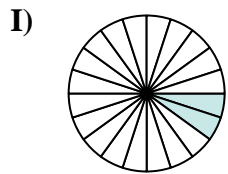
$$\frac{10}{20}$$



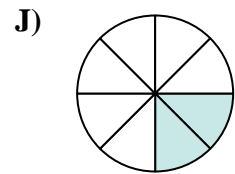
$$\frac{2}{10}$$



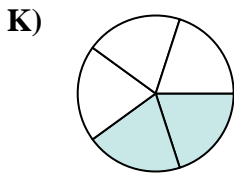
$$\frac{4}{8}$$



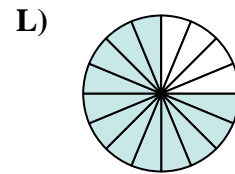
$$\frac{2}{20}$$



$$\frac{2}{8}$$



$$\frac{2}{5}$$



$$\frac{12}{16}$$

**Risposte**

1. \_\_\_\_\_

2. \_\_\_\_\_

3. \_\_\_\_\_

4. \_\_\_\_\_

5. \_\_\_\_\_

6. \_\_\_\_\_

7. \_\_\_\_\_

8. \_\_\_\_\_

9. \_\_\_\_\_

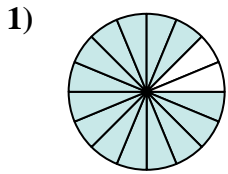
10. \_\_\_\_\_

11. \_\_\_\_\_

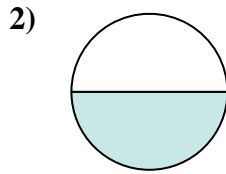
12. \_\_\_\_\_



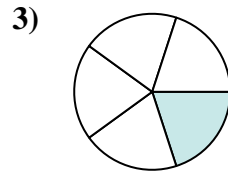
Determina quale lettera rappresenta la frazione equivalente.



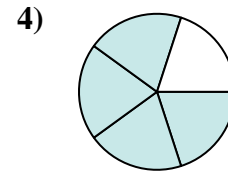
$$\frac{14}{16}$$



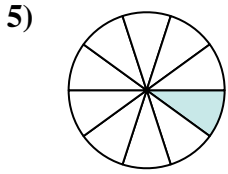
$$\frac{1}{2}$$



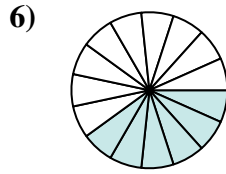
$$\frac{1}{5}$$



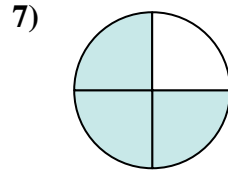
$$\frac{4}{5}$$



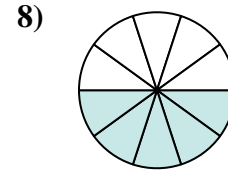
$$\frac{1}{10}$$



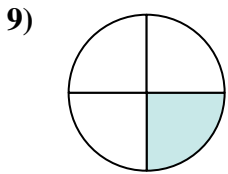
$$\frac{6}{15}$$



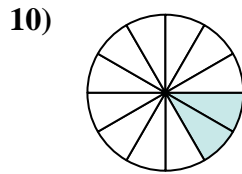
$$\frac{3}{4}$$



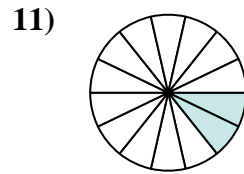
$$\frac{5}{10}$$



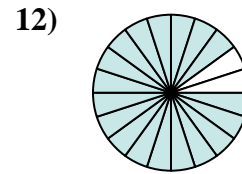
$$\frac{1}{4}$$



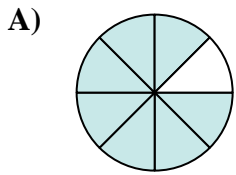
$$\frac{2}{12}$$



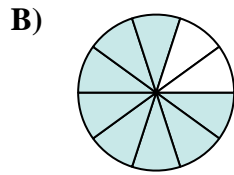
$$\frac{2}{14}$$



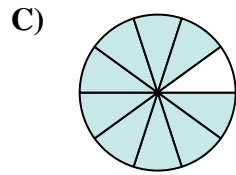
$$\frac{18}{20}$$



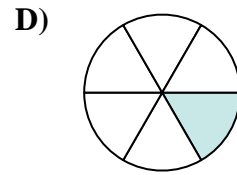
$$\frac{7}{8}$$



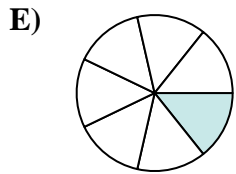
$$\frac{8}{10}$$



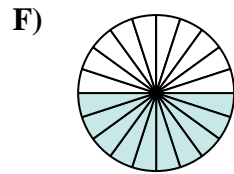
$$\frac{9}{10}$$



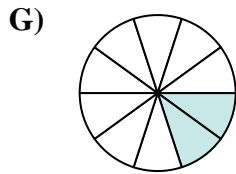
$$\frac{1}{6}$$



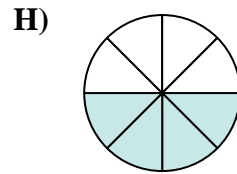
$$\frac{1}{7}$$



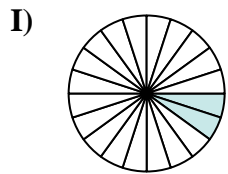
$$\frac{10}{20}$$



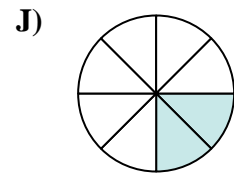
$$\frac{2}{10}$$



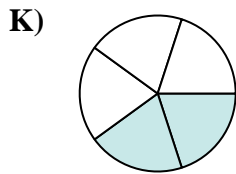
$$\frac{4}{8}$$



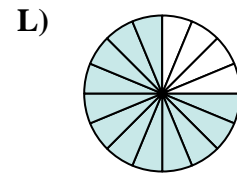
$$\frac{2}{20}$$



$$\frac{2}{8}$$



$$\frac{2}{5}$$

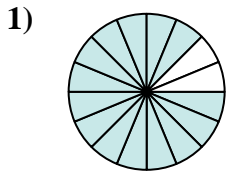


$$\frac{12}{16}$$

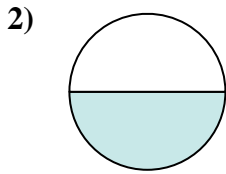
**Risposte**1.     **A**    2.     **H**    3.     **G**    4.     **B**    5.     **I**    6.     **K**    7.     **L**    8.     **F**    9.     **J**    10.     **D**    11.     **E**    12.     **C**



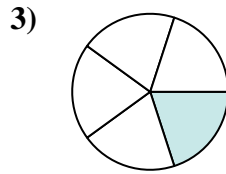
Determina quale lettera rappresenta la frazione equivalente.



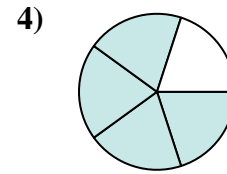
$$\frac{14 \div 2}{16 \div 2}$$



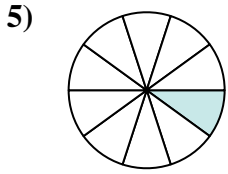
$$\frac{1 \times 4}{2 \times 4}$$



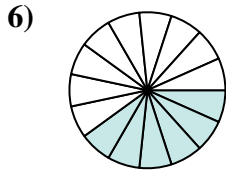
$$\frac{1 \times 2}{5 \times 2}$$



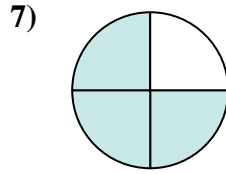
$$\frac{4 \times 2}{5 \times 2}$$



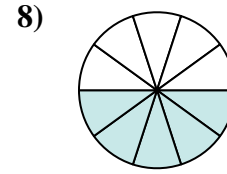
$$\frac{1 \times 2}{10 \times 2}$$



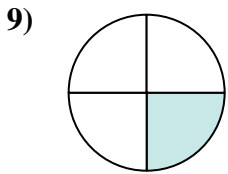
$$\frac{6 \div 3}{15 \div 3}$$



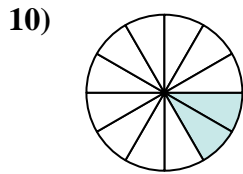
$$\frac{3 \times 4}{4 \times 4}$$



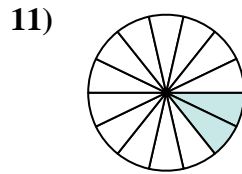
$$\frac{5 \times 2}{10 \times 2}$$



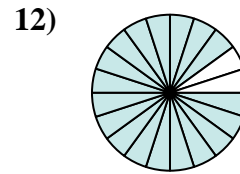
$$\frac{1 \times 2}{4 \times 2}$$



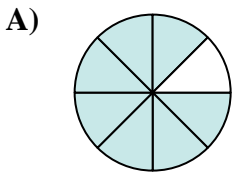
$$\frac{2 \div 2}{12 \div 2}$$



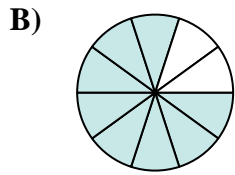
$$\frac{2 \div 2}{14 \div 2}$$



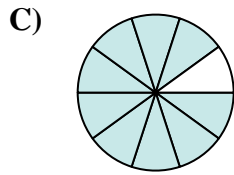
$$\frac{18 \div 2}{20 \div 2}$$



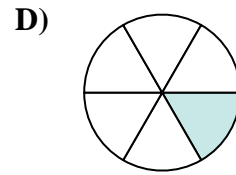
$$\frac{7}{8}$$



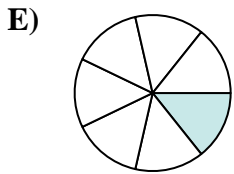
$$\frac{8}{10}$$




$$\frac{9}{10}$$



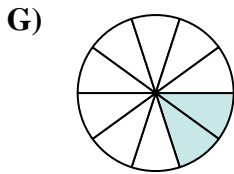
$$\frac{1}{6}$$



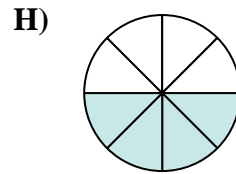
$$\frac{1}{7}$$



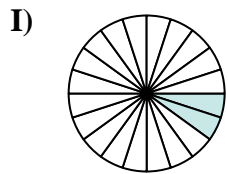
$$\frac{10}{20}$$



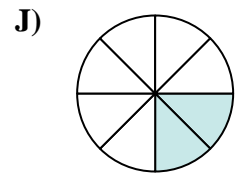
$$\frac{2}{10}$$



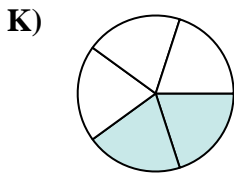
$$\frac{4}{8}$$



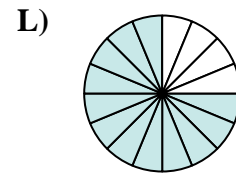
$$\frac{2}{20}$$



$$\frac{2}{8}$$



$$\frac{2}{5}$$



$$\frac{12}{16}$$

**Risposte**

Ex. \_\_\_\_\_

1. \_\_\_\_\_

2. \_\_\_\_\_

3. \_\_\_\_\_

4. \_\_\_\_\_

5. \_\_\_\_\_

6. \_\_\_\_\_

7. \_\_\_\_\_

8. \_\_\_\_\_

9. \_\_\_\_\_

10. \_\_\_\_\_

11. \_\_\_\_\_

12. \_\_\_\_\_