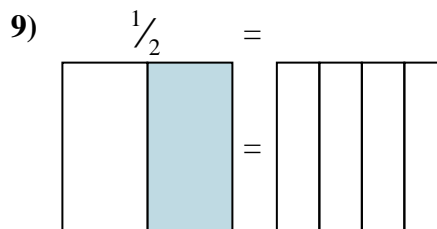
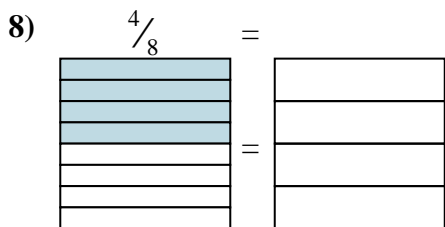
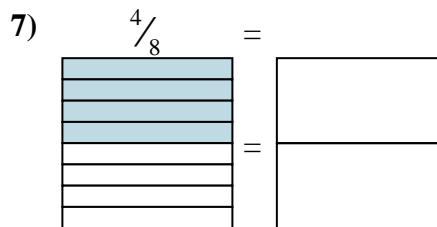
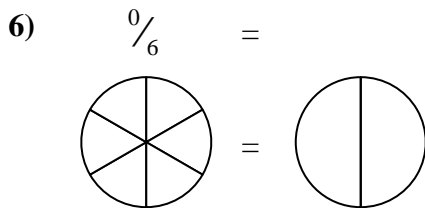
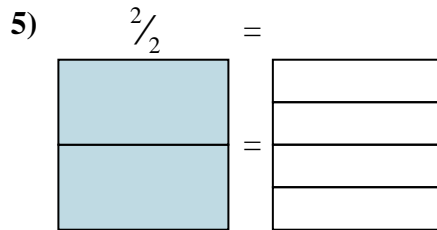
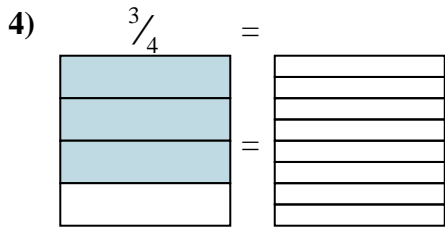
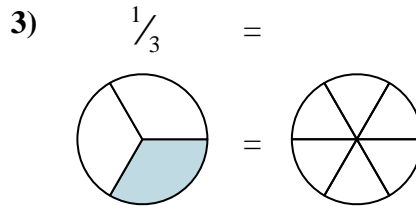
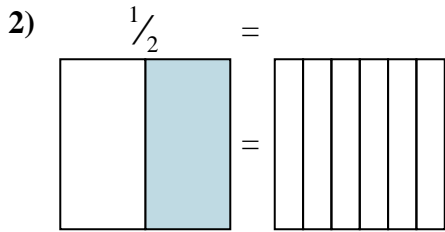
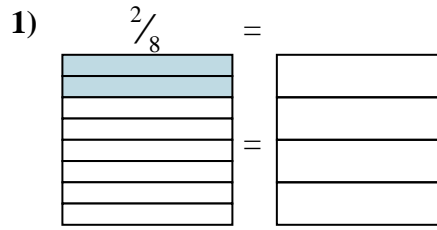
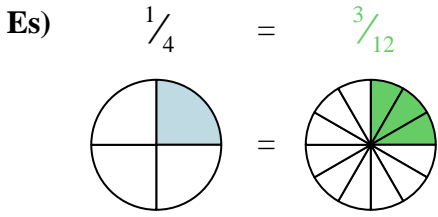




Colora la rappresentazione grafica per trovare la frazione equivalente.



**Risposte**

Es.  $\frac{3}{12}$

1. \_\_\_\_\_

2. \_\_\_\_\_

3. \_\_\_\_\_

4. \_\_\_\_\_

5. \_\_\_\_\_

6. \_\_\_\_\_

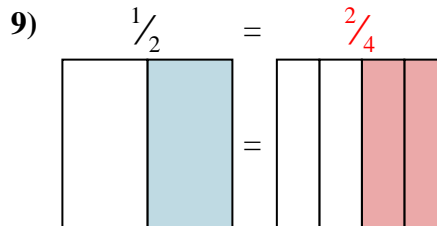
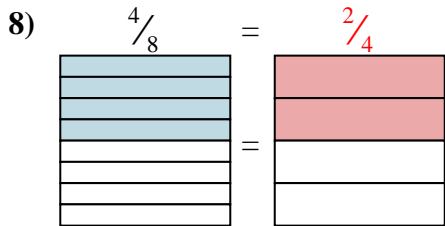
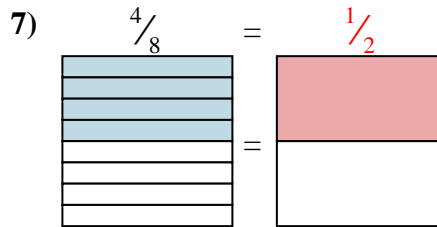
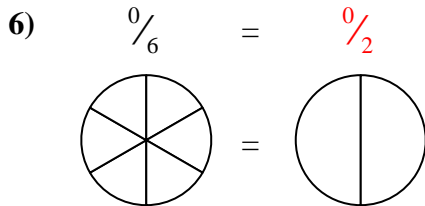
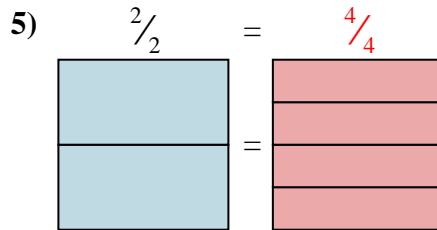
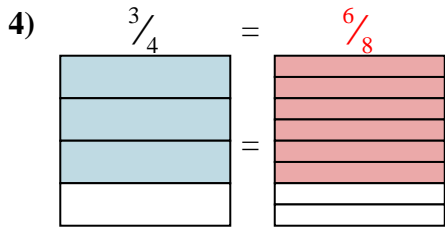
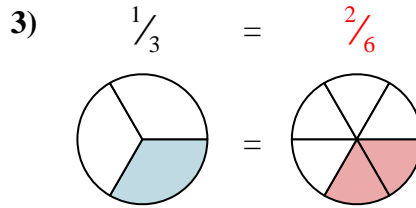
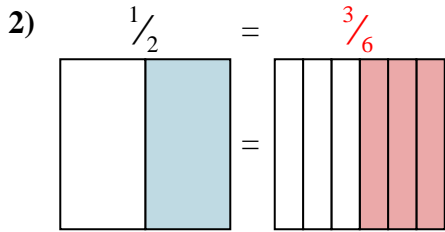
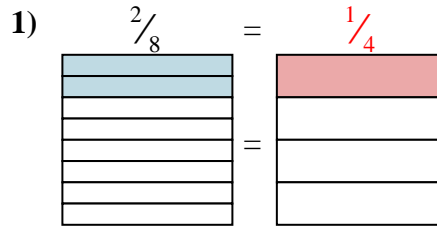
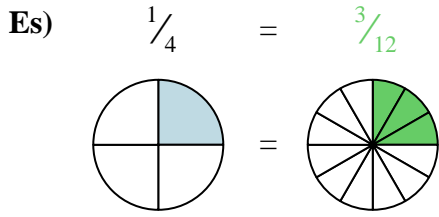
7. \_\_\_\_\_

8. \_\_\_\_\_

9. \_\_\_\_\_



Colora la rappresentazione grafica per trovare la frazione equivalente.



**Risposte**

Es.  $\frac{3}{12}$

1.  $\frac{1}{4}$

2.  $\frac{3}{6}$

3.  $\frac{2}{6}$

4.  $\frac{6}{8}$

5.  $\frac{4}{4}$

6.  $\frac{0}{2}$

7.  $\frac{1}{2}$

8.  $\frac{2}{4}$

9.  $\frac{2}{4}$