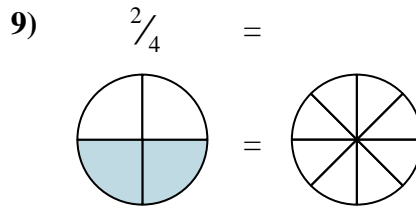
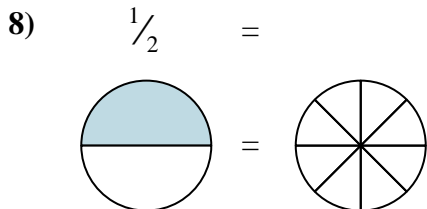
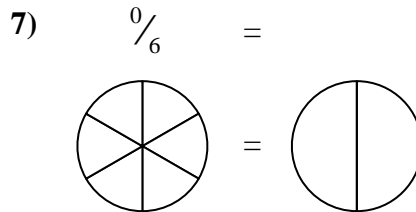
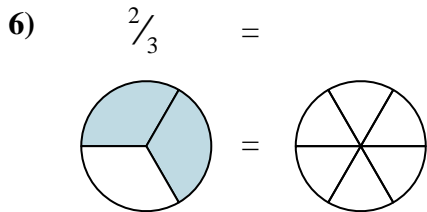
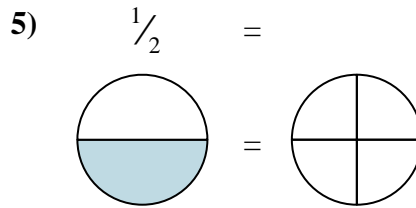
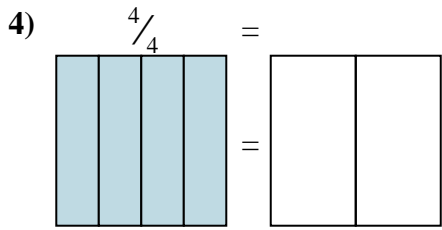
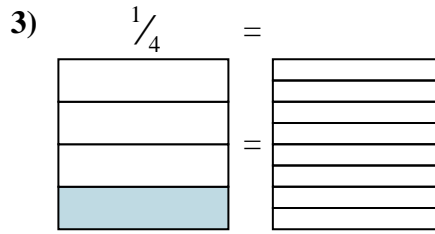
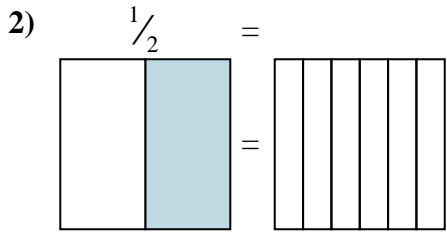
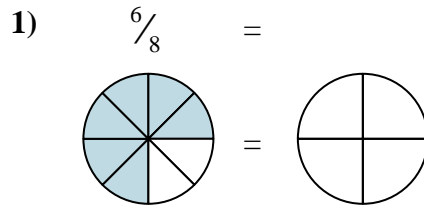
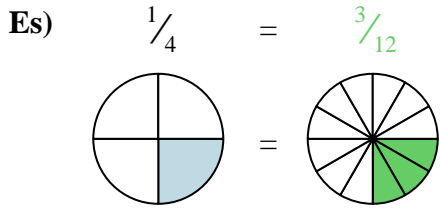




Colora la rappresentazione grafica per trovare la frazione equivalente.



**Risposte**

Es.            $\frac{3}{12}$           

1. \_\_\_\_\_

2. \_\_\_\_\_

3. \_\_\_\_\_

4. \_\_\_\_\_

5. \_\_\_\_\_

6. \_\_\_\_\_

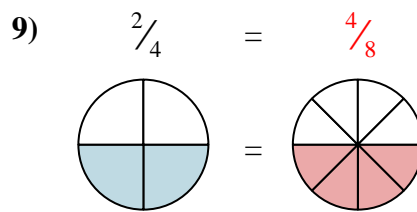
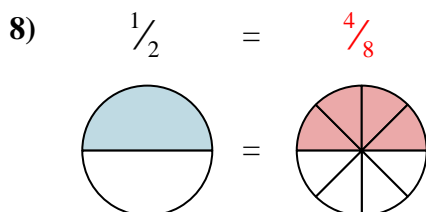
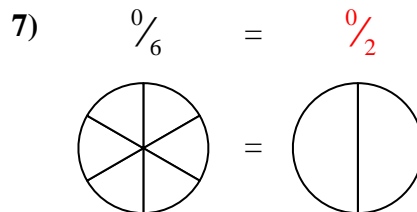
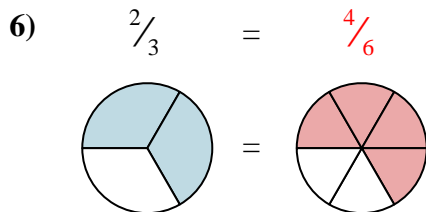
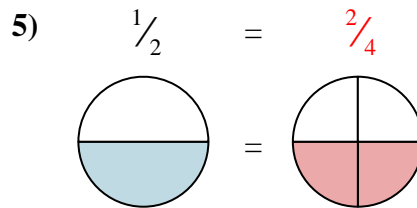
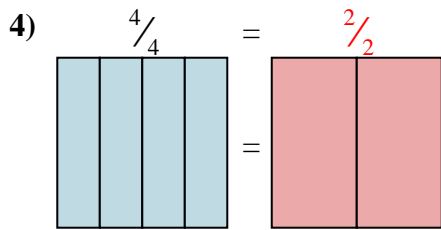
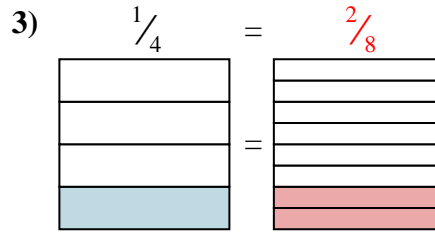
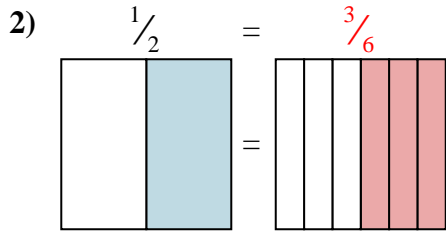
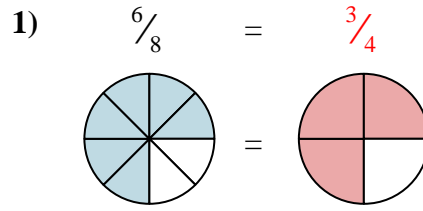
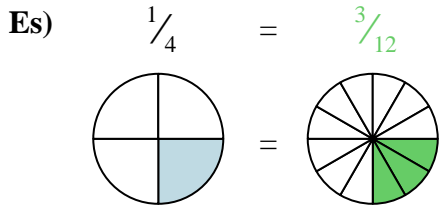
7. \_\_\_\_\_

8. \_\_\_\_\_

9. \_\_\_\_\_



Colora la rappresentazione grafica per trovare la frazione equivalente.

**Risposte**Es.  $\frac{3}{12}$ 1.  $\frac{3}{4}$ 2.  $\frac{3}{6}$ 3.  $\frac{2}{8}$ 4.  $\frac{2}{2}$ 5.  $\frac{2}{4}$ 6.  $\frac{4}{6}$ 7.  $\frac{0}{2}$ 8.  $\frac{4}{8}$ 9.  $\frac{4}{8}$