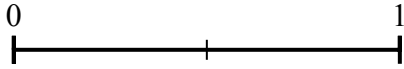
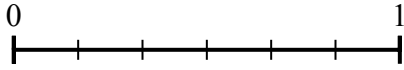


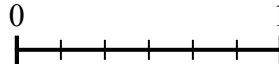
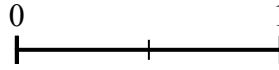


Usa le linee numerate per rispondere alle domande.

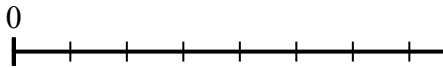
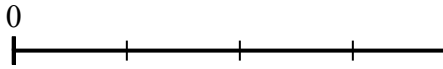
- 1) Usando la linea seguente, qual'è la frazione equivalente a  $\frac{6}{6}$ ?



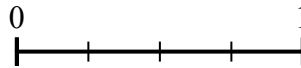
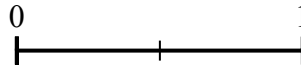
- 2) Usando la linea seguente, qual'è la frazione equivalente a  $\frac{0}{2}$ ?




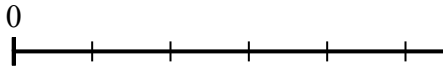
- 3) Usando la linea seguente, qual'è la frazione equivalente a  $\frac{4}{4}$ ?



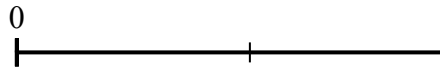
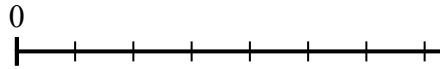
- 4) Usando la linea seguente, qual'è la frazione equivalente a  $\frac{2}{2}$ ?




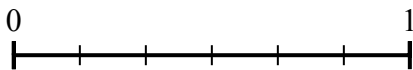
- 5) Usando la linea seguente, qual'è la frazione equivalente a  $\frac{2}{6}$ ?



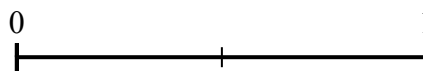
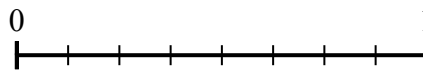
- 6) Usando la linea seguente, qual'è la frazione equivalente a  $\frac{4}{8}$ ?



- 7) Usando la linea seguente, qual'è la frazione equivalente a  $\frac{4}{6}$ ?



- 8) Usando la linea seguente, qual'è la frazione equivalente a  $\frac{8}{8}$ ?

**Risposte**

1. \_\_\_\_\_

2. \_\_\_\_\_

3. \_\_\_\_\_

4. \_\_\_\_\_

5. \_\_\_\_\_

6. \_\_\_\_\_

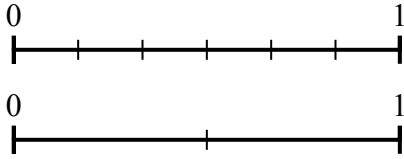
7. \_\_\_\_\_

8. \_\_\_\_\_



Usa le linee numerate per rispondere alle domande.

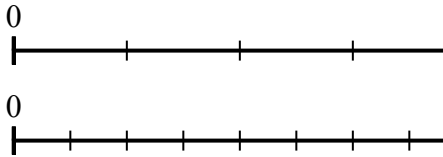
- 1) Usando la linea seguente, qual'è la frazione equivalente a  $\frac{6}{6}$ ?



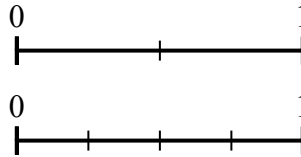
- 2) Usando la linea seguente, qual'è la frazione equivalente a  $\frac{0}{2}$ ?



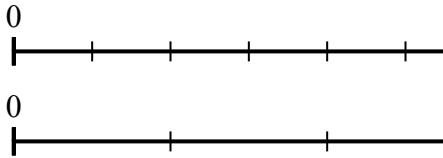
- 3) Usando la linea seguente, qual'è la frazione equivalente a  $\frac{4}{4}$ ?



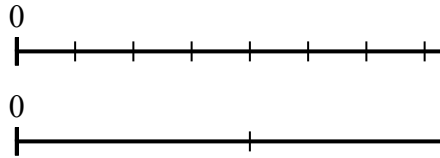
- 4) Usando la linea seguente, qual'è la frazione equivalente a  $\frac{2}{2}$ ?



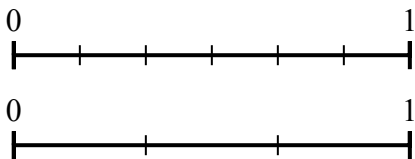
- 5) Usando la linea seguente, qual'è la frazione equivalente a  $\frac{2}{6}$ ?



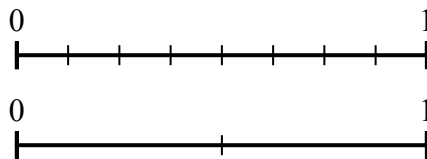
- 6) Usando la linea seguente, qual'è la frazione equivalente a  $\frac{4}{8}$ ?



- 7) Usando la linea seguente, qual'è la frazione equivalente a  $\frac{4}{6}$ ?



- 8) Usando la linea seguente, qual'è la frazione equivalente a  $\frac{8}{8}$ ?

**Risposte**

1.  $\frac{2}{2}$
2.  $\frac{0}{6}$
3.  $\frac{8}{8}$
4.  $\frac{4}{4}$
5.  $\frac{1}{3}$
6.  $\frac{1}{2}$
7.  $\frac{2}{3}$
8.  $\frac{2}{2}$