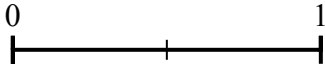
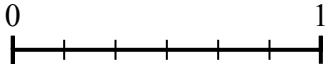


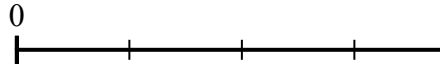
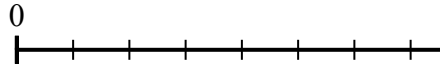


Usa le linee numerate per rispondere alle domande.

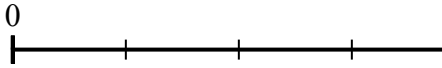
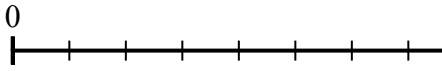
- 1) Usando la linea seguente, qual'è la frazione equivalente a $\frac{3}{6}$?



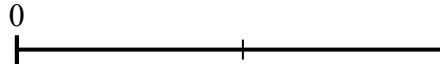
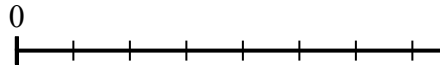
- 2) Usando la linea seguente, qual'è la frazione equivalente a $\frac{2}{8}$?



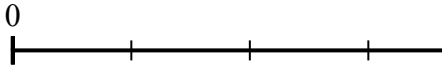
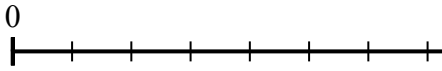
- 3) Usando la linea seguente, qual'è la frazione equivalente a $\frac{6}{8}$?



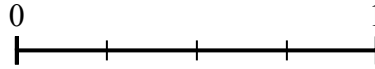
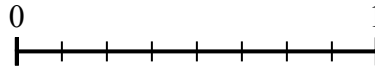
- 4) Usando la linea seguente, qual'è la frazione equivalente a $\frac{8}{8}$?



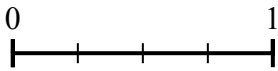
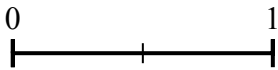
- 5) Usando la linea seguente, qual'è la frazione equivalente a $\frac{4}{8}$?



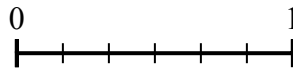

- 6) Usando la linea seguente, qual'è la frazione equivalente a $\frac{8}{8}$?



- 7) Usando la linea seguente, qual'è la frazione equivalente a $\frac{2}{2}$?



- 8) Usando la linea seguente, qual'è la frazione equivalente a $\frac{1}{3}$?

**Risposte**

1. _____

2. _____

3. _____

4. _____

5. _____

6. _____

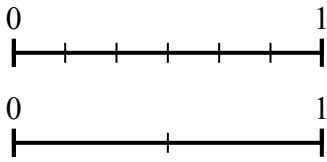
7. _____

8. _____

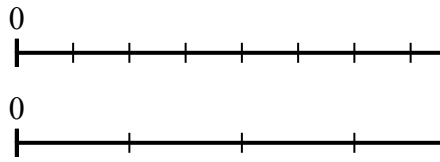


Usa le linee numerate per rispondere alle domande.

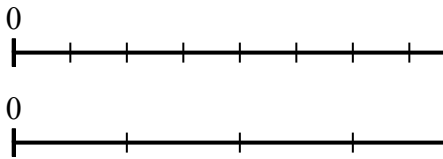
- 1) Usando la linea seguente, qual'è la frazione equivalente a $\frac{3}{6}$?



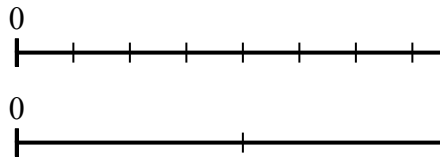
- 2) Usando la linea seguente, qual'è la frazione equivalente a $\frac{2}{8}$?



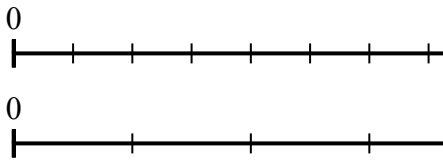
- 3) Usando la linea seguente, qual'è la frazione equivalente a $\frac{6}{8}$?



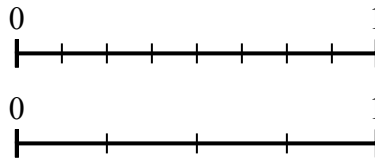
- 4) Usando la linea seguente, qual'è la frazione equivalente a $\frac{8}{8}$?



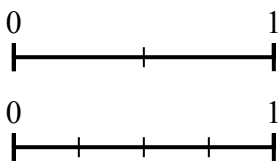
- 5) Usando la linea seguente, qual'è la frazione equivalente a $\frac{4}{8}$?



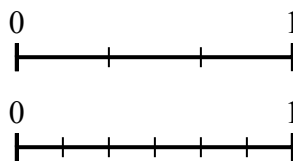
- 6) Usando la linea seguente, qual'è la frazione equivalente a $\frac{8}{8}$?



- 7) Usando la linea seguente, qual'è la frazione equivalente a $\frac{2}{2}$?



- 8) Usando la linea seguente, qual'è la frazione equivalente a $\frac{1}{3}$?

**Risposte**

1. $\frac{1}{2}$
2. $\frac{1}{4}$
3. $\frac{3}{4}$
4. $\frac{2}{2}$
5. $\frac{2}{4}$
6. $\frac{4}{4}$
7. $\frac{4}{4}$
8. $\frac{2}{6}$