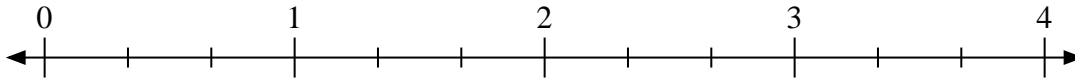


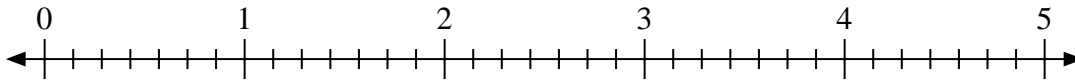


Usa la linea numerata per risolvere ogni problema.

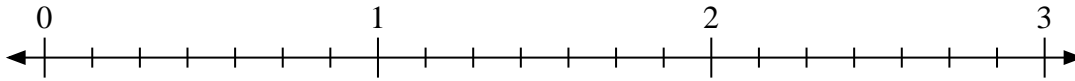
1) $4 : \frac{2}{3} =$



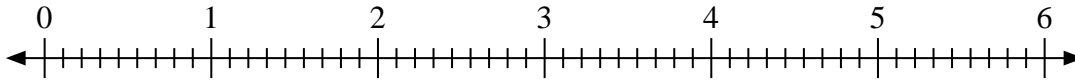
2) $4 : \frac{5}{7} =$



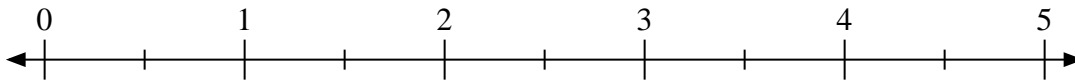
3) $2 : \frac{4}{7} =$



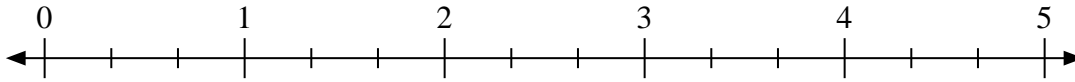
4) $6 : \frac{2}{9} =$



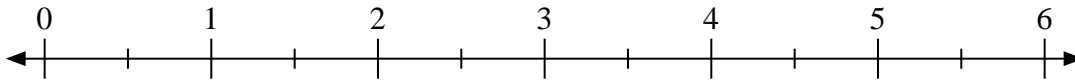
5) $5 : \frac{1}{2} =$



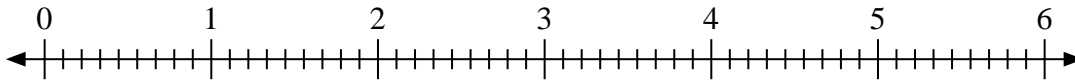
6) $2 : \frac{1}{3} =$



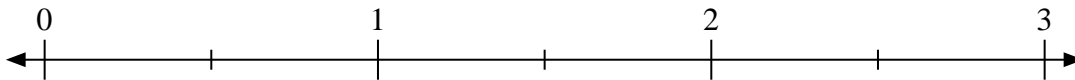
7) $5 : \frac{1}{2} =$



8) $3 : \frac{3}{9} =$



9) $2 : \frac{1}{2} =$

**Risposte**

1. _____

2. _____

3. _____

4. _____

5. _____

6. _____

7. _____

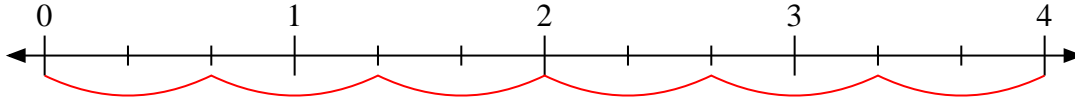
8. _____

9. _____

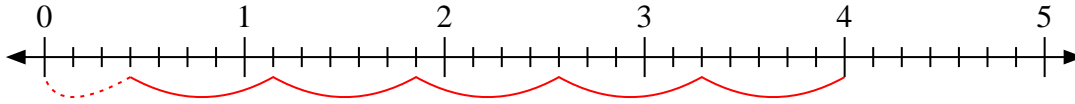


Usa la linea numerata per risolvere ogni problema.

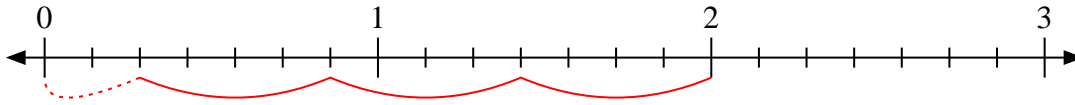
1) $4 : \frac{2}{3} =$



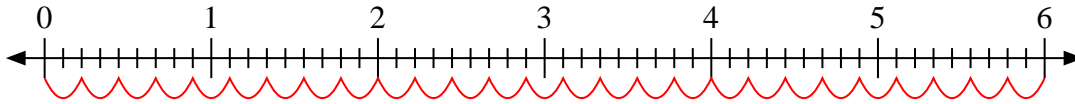
2) $4 : \frac{5}{7} =$



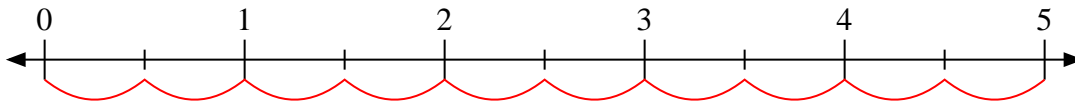
3) $2 : \frac{4}{7} =$



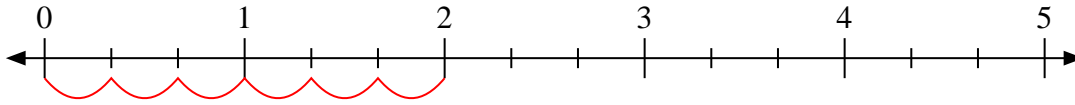
4) $6 : \frac{2}{9} =$



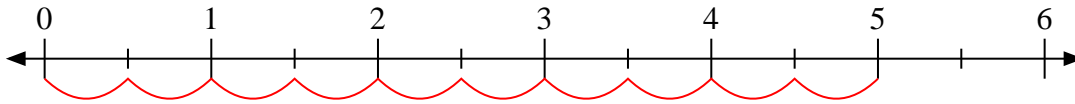
5) $5 : \frac{1}{2} =$



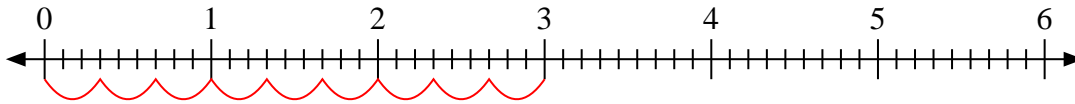
6) $2 : \frac{1}{3} =$



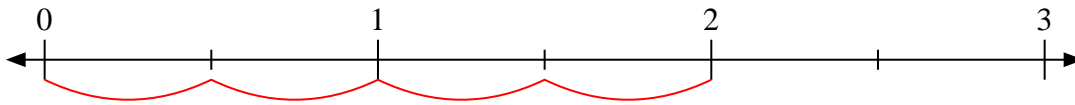
7) $5 : \frac{1}{2} =$



8) $3 : \frac{3}{9} =$



9) $2 : \frac{1}{2} =$

**Risposte**1. 62. $5 \frac{3}{5}$ 3. $3 \frac{2}{4}$ 4. 275. 106. 67. 108. 99. 4