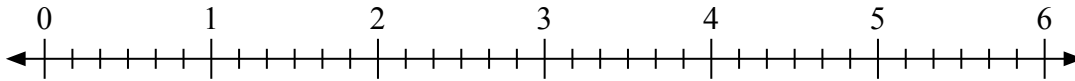




Usa la linea numerata per risolvere ogni problema.

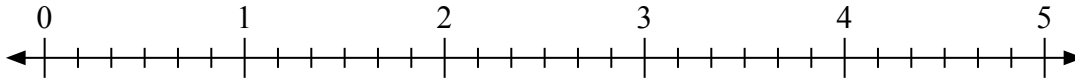
1)  $4 : \frac{2}{6} =$



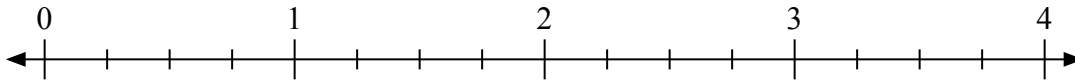
2)  $4 : \frac{3}{4} =$



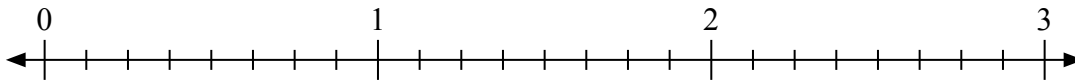
3)  $3 : \frac{5}{6} =$



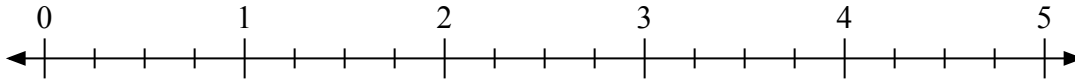
4)  $3 : \frac{2}{4} =$



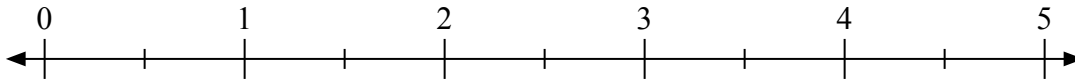
5)  $3 : \frac{5}{8} =$



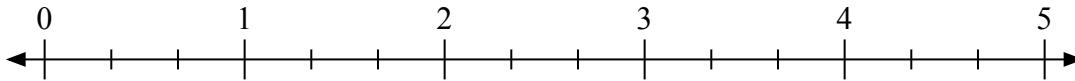
6)  $4 : \frac{1}{4} =$



7)  $3 : \frac{1}{2} =$



8)  $2 : \frac{1}{3} =$



9)  $4 : \frac{1}{2} =$

**Risposte**

1. \_\_\_\_\_

2. \_\_\_\_\_

3. \_\_\_\_\_

4. \_\_\_\_\_

5. \_\_\_\_\_

6. \_\_\_\_\_

7. \_\_\_\_\_

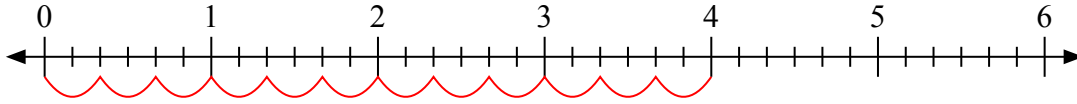
8. \_\_\_\_\_

9. \_\_\_\_\_

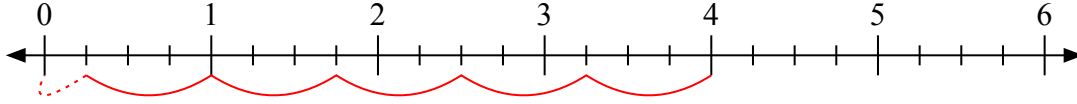


Usa la linea numerata per risolvere ogni problema.

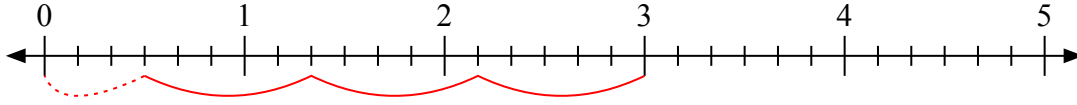
1)  $4 : \frac{2}{6} =$



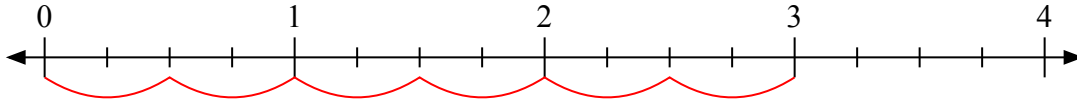
2)  $4 : \frac{3}{4} =$



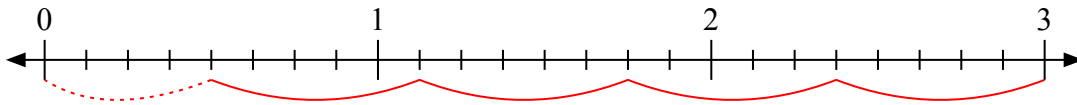
3)  $3 : \frac{5}{6} =$



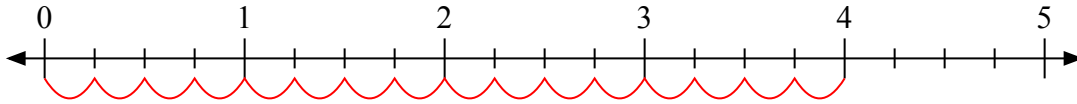
4)  $3 : \frac{2}{4} =$



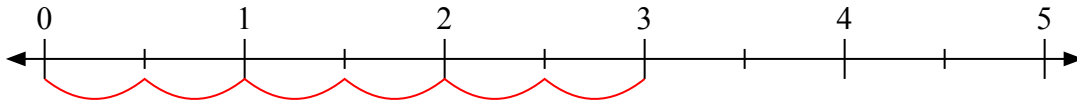
5)  $3 : \frac{5}{8} =$



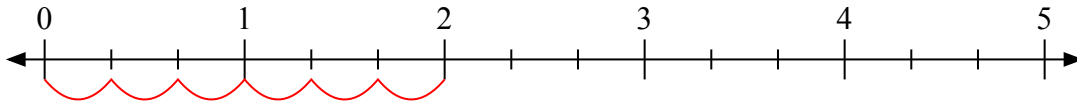
6)  $4 : \frac{1}{4} =$



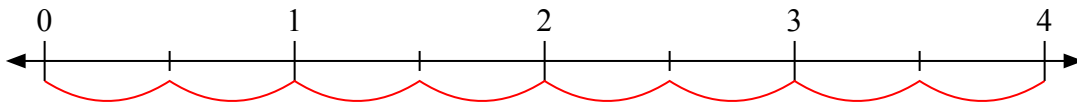
7)  $3 : \frac{1}{2} =$



8)  $2 : \frac{1}{3} =$



9)  $4 : \frac{1}{2} =$



**Risposte**

1. 12

2.  $5 \frac{1}{3}$

3.  $3 \frac{3}{5}$

4. 6

5.  $4 \frac{4}{5}$

6. 16

7. 6

8. 6

9. 8