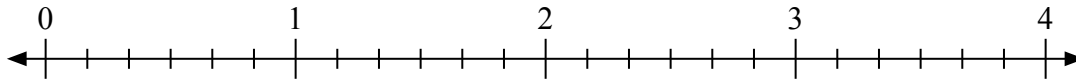


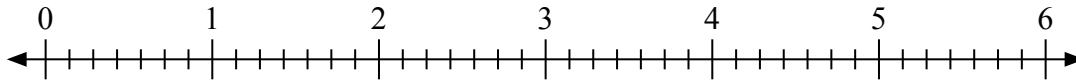


Usa la linea numerata per risolvere ogni problema.

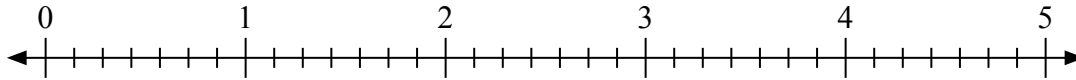
1) $3 : \frac{3}{6} =$



2) $3 : \frac{1}{7} =$



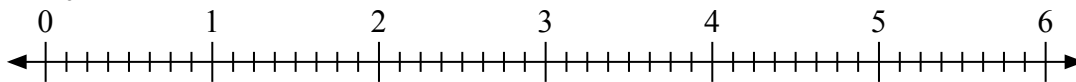
3) $2 : \frac{5}{7} =$



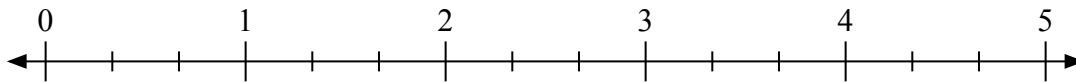
4) $5 : \frac{1}{2} =$



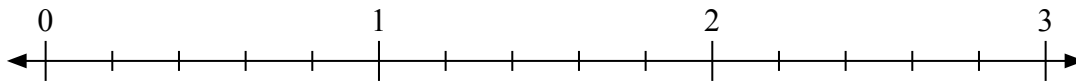
5) $2 : \frac{4}{8} =$



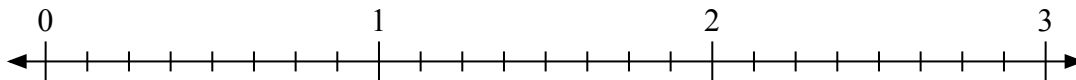
6) $5 : \frac{1}{3} =$



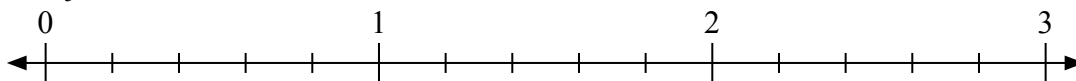
7) $3 : \frac{2}{5} =$



8) $3 : \frac{3}{8} =$



9) $2 : \frac{2}{5} =$

**Risposte**

1. _____

2. _____

3. _____

4. _____

5. _____

6. _____

7. _____

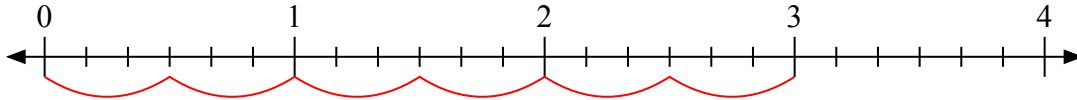
8. _____

9. _____

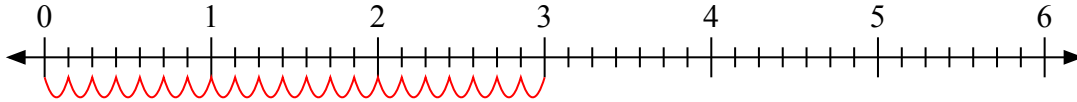


Usa la linea numerata per risolvere ogni problema.

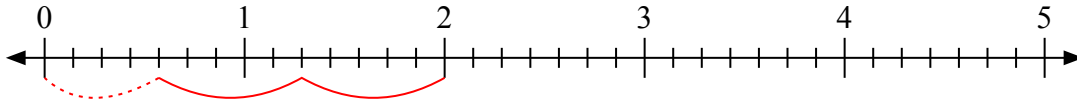
1) $3 : \frac{3}{6} =$



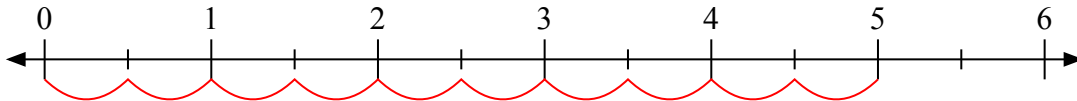
2) $3 : \frac{1}{7} =$



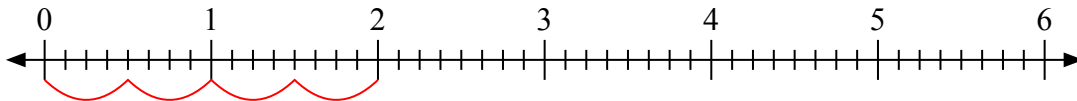
3) $2 : \frac{5}{7} =$



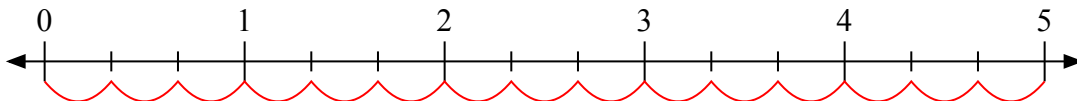
4) $5 : \frac{1}{2} =$



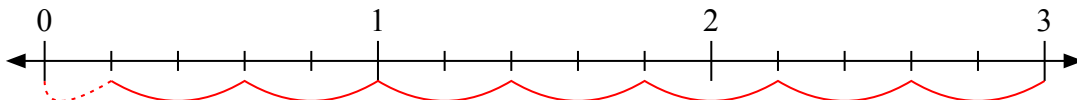
5) $2 : \frac{4}{8} =$



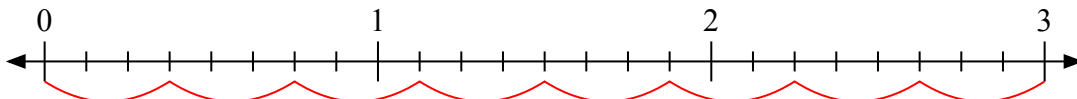
6) $5 : \frac{1}{3} =$



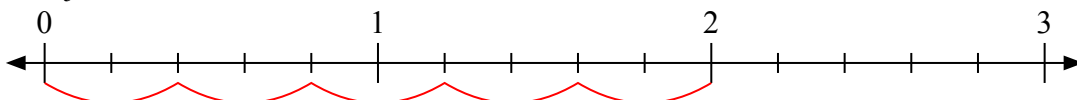
7) $3 : \frac{2}{5} =$



8) $3 : \frac{3}{8} =$



9) $2 : \frac{2}{5} =$



Risposte

1. 6

2. 21

3. $2 \frac{4}{5}$

4. 10

5. 4

6. 15

7. $7 \frac{1}{2}$

8. 8

9. 5