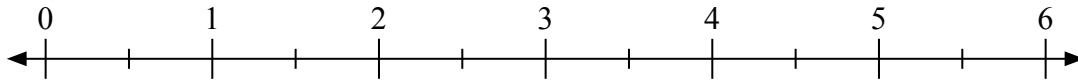


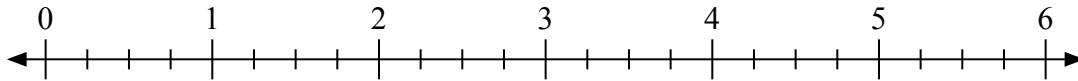


Usa la linea numerata per risolvere ogni problema.

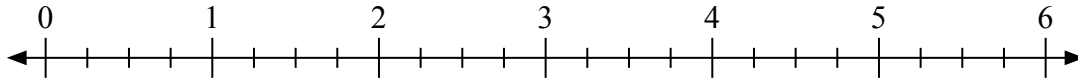
1) $6 : \frac{1}{2} =$



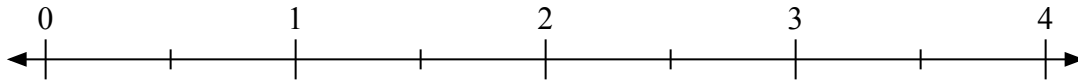
2) $2 : \frac{3}{4} =$



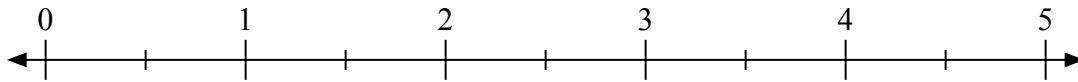
3) $5 : \frac{3}{4} =$



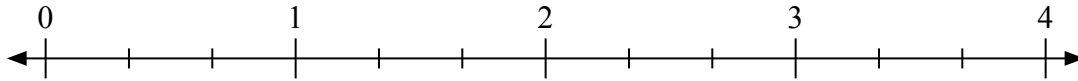
4) $2 : \frac{1}{2} =$



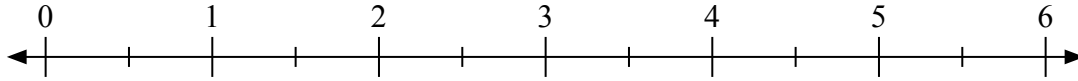
5) $3 : \frac{1}{2} =$



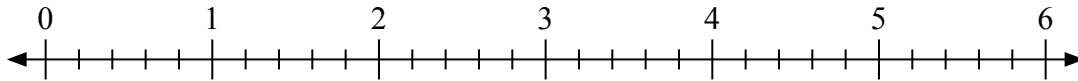
6) $3 : \frac{1}{3} =$



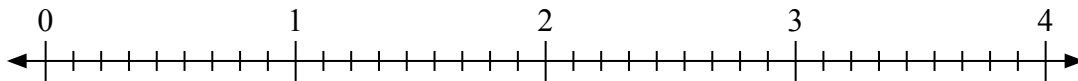
7) $3 : \frac{1}{2} =$



8) $4 : \frac{2}{5} =$



9) $3 : \frac{2}{9} =$



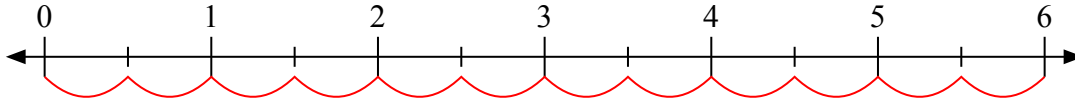
Risposte

1. _____
2. _____
3. _____
4. _____
5. _____
6. _____
7. _____
8. _____
9. _____

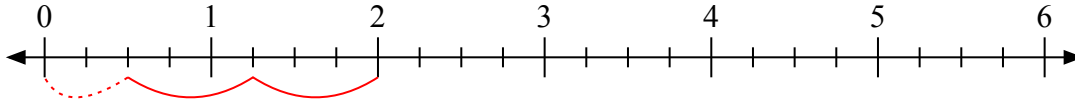


Usa la linea numerata per risolvere ogni problema.

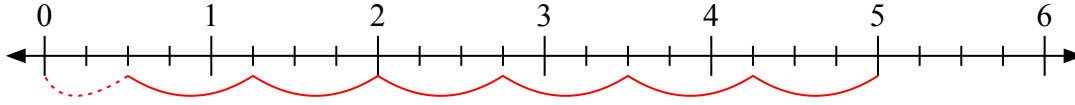
1) $6 : \frac{1}{2} =$



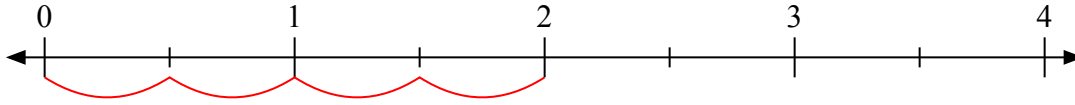
2) $2 : \frac{3}{4} =$



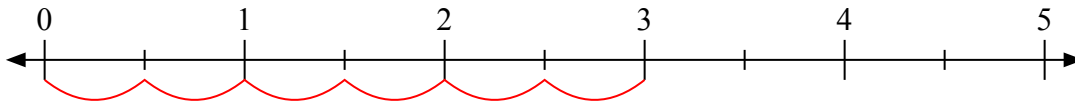
3) $5 : \frac{3}{4} =$



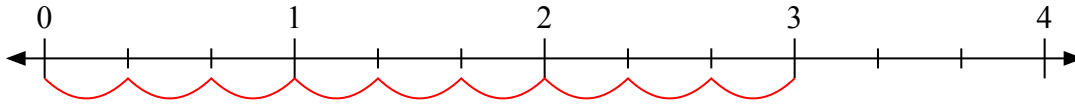
4) $2 : \frac{1}{2} =$



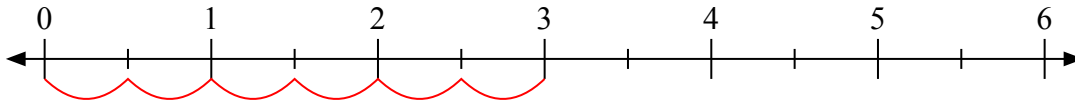
5) $3 : \frac{1}{2} =$



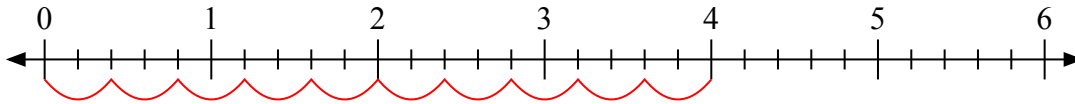
6) $3 : \frac{1}{3} =$



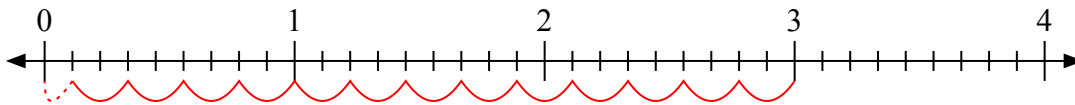
7) $3 : \frac{1}{2} =$



8) $4 : \frac{2}{5} =$



9) $3 : \frac{2}{9} =$



Risposte

1. 12

2. $2 \frac{2}{3}$

3. $6 \frac{2}{3}$

4. 4

5. 6

6. 9

7. 6

8. 10

9. $13 \frac{1}{2}$