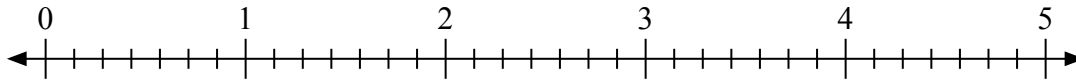


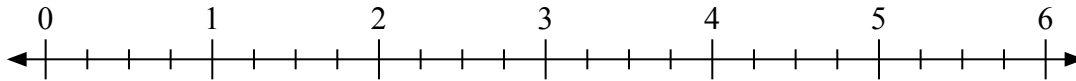


Usa la linea numerata per risolvere ogni problema.

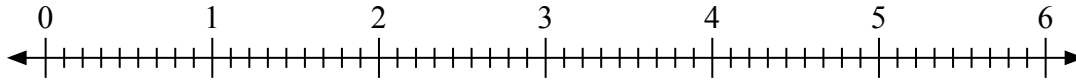
1) $5 : \frac{3}{7} =$



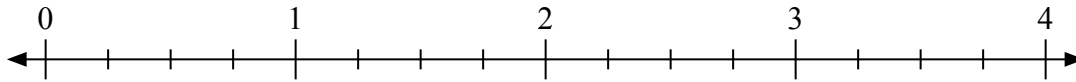
2) $5 : \frac{3}{4} =$



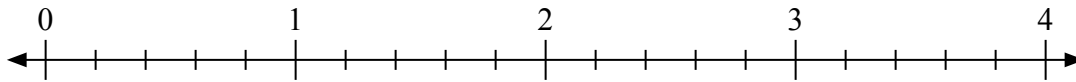
3) $5 : \frac{6}{9} =$



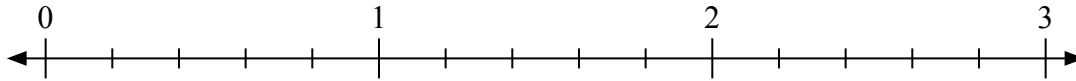
4) $3 : \frac{3}{4} =$



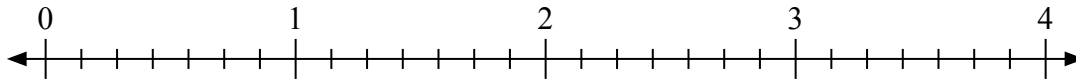
5) $3 : \frac{3}{5} =$



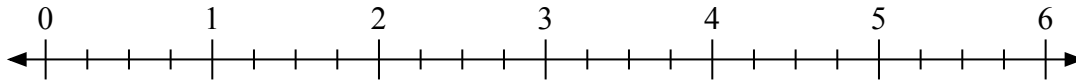
6) $2 : \frac{3}{5} =$



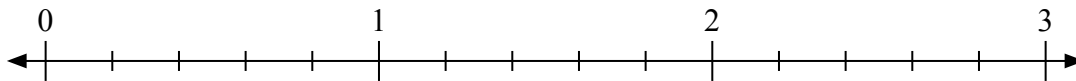
7) $4 : \frac{2}{7} =$



8) $2 : \frac{2}{4} =$



9) $2 : \frac{1}{5} =$

**Risposte**

1. _____

2. _____

3. _____

4. _____

5. _____

6. _____

7. _____

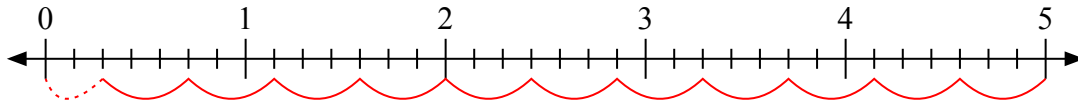
8. _____

9. _____

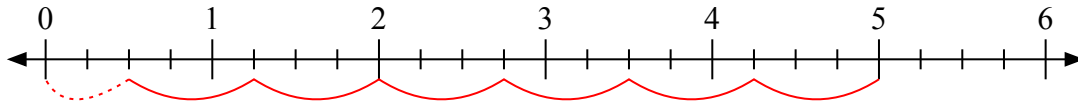


Usa la linea numerata per risolvere ogni problema.

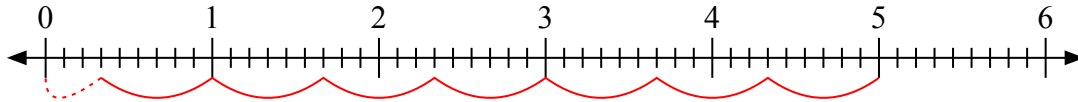
1) $5 : \frac{3}{7} =$



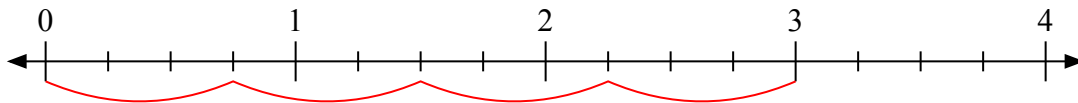
2) $5 : \frac{3}{4} =$



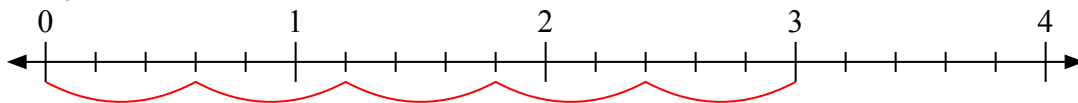
3) $5 : \frac{6}{9} =$



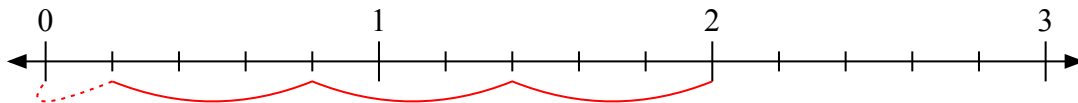
4) $3 : \frac{3}{4} =$



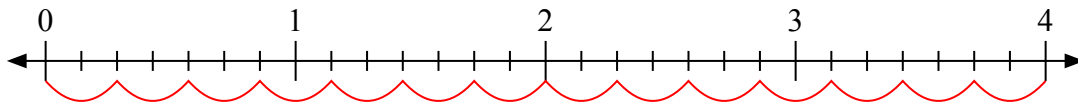
5) $3 : \frac{3}{5} =$



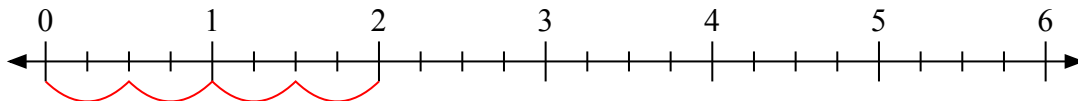
6) $2 : \frac{3}{5} =$



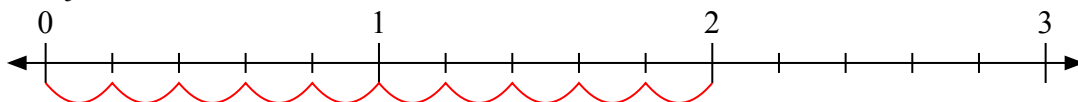
7) $4 : \frac{2}{7} =$



8) $2 : \frac{2}{4} =$



9) $2 : \frac{1}{5} =$



Risposte

1. 11 $\frac{2}{3}$

2. 6 $\frac{2}{3}$

3. 7 $\frac{3}{6}$

4. 4

5. 5

6. 3 $\frac{1}{3}$

7. 14

8. 4

9. 10