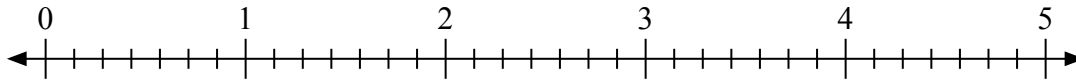


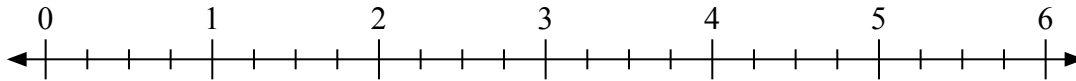


Usa la linea numerata per risolvere ogni problema.

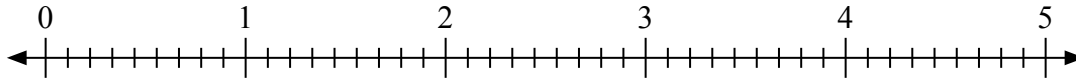
1)  $4 : \frac{4}{7} =$



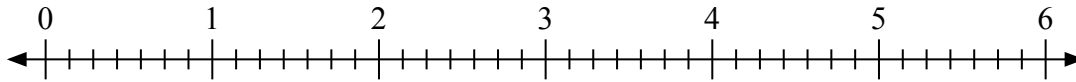
2)  $3 : \frac{3}{4} =$



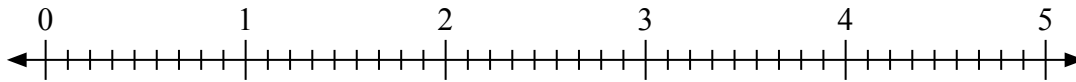
3)  $5 : \frac{2}{9} =$



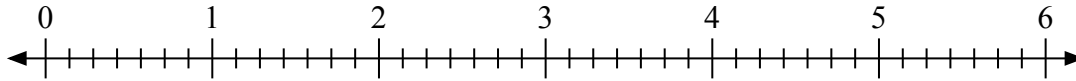
4)  $3 : \frac{1}{7} =$



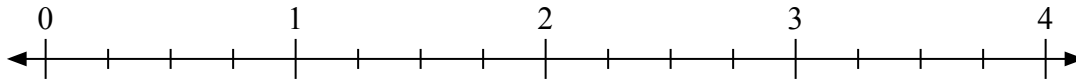
5)  $3 : \frac{6}{9} =$



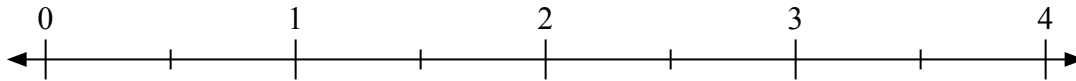
6)  $4 : \frac{4}{7} =$



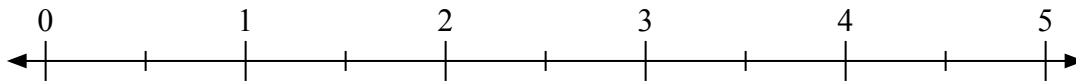
7)  $3 : \frac{3}{4} =$



8)  $4 : \frac{1}{2} =$



9)  $2 : \frac{1}{2} =$

**Risposte**

1. \_\_\_\_\_

2. \_\_\_\_\_

3. \_\_\_\_\_

4. \_\_\_\_\_

5. \_\_\_\_\_

6. \_\_\_\_\_

7. \_\_\_\_\_

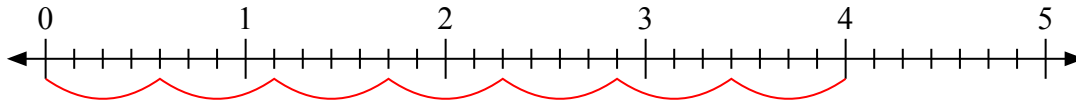
8. \_\_\_\_\_

9. \_\_\_\_\_

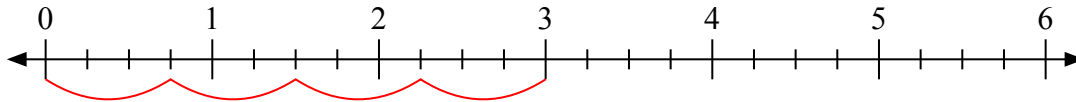


Usa la linea numerata per risolvere ogni problema.

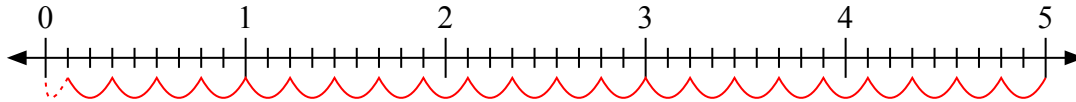
1)  $4 : \frac{4}{7} =$



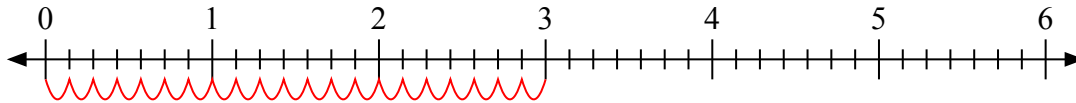
2)  $3 : \frac{3}{4} =$



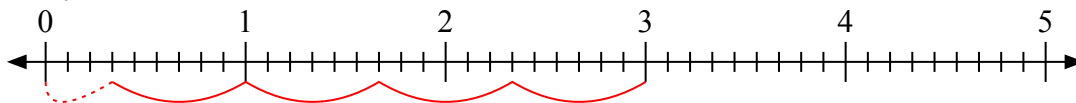
3)  $5 : \frac{2}{9} =$



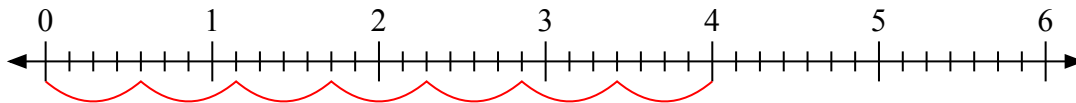
4)  $3 : \frac{1}{7} =$



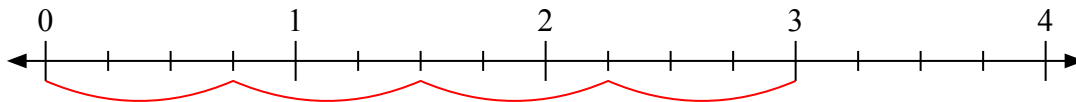
5)  $3 : \frac{6}{9} =$



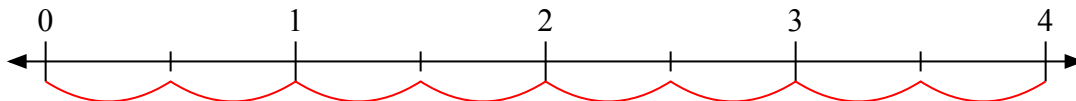
6)  $4 : \frac{4}{7} =$



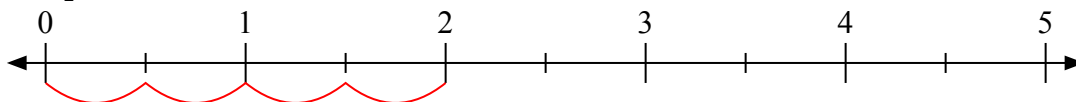
7)  $3 : \frac{3}{4} =$



8)  $4 : \frac{1}{2} =$



9)  $2 : \frac{1}{2} =$

**Risposte**1. 72. 43.  $22 \frac{1}{2}$ 4. 215.  $4 \frac{3}{6}$ 6. 77. 48. 89. 4