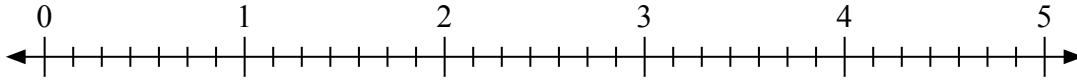


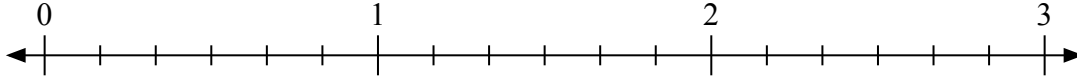


Usa la linea numerata per risolvere ogni problema.

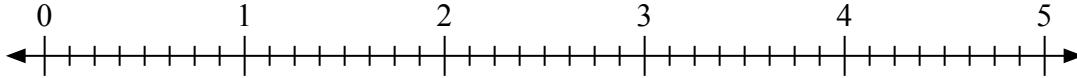
1) $5 : \frac{6}{7} =$



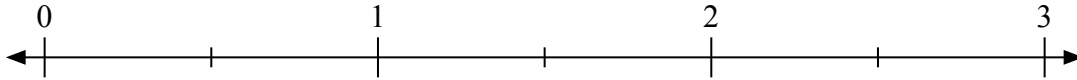
2) $3 : \frac{4}{6} =$



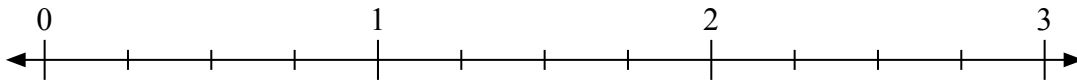
3) $4 : \frac{7}{8} =$



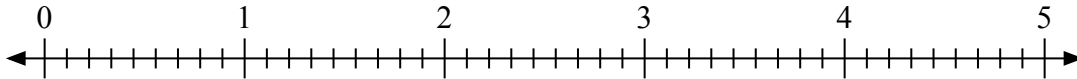
4) $3 : \frac{1}{2} =$



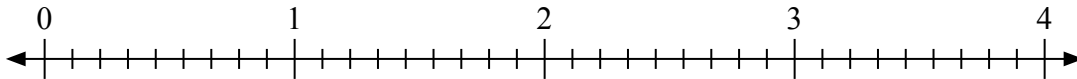
5) $3 : \frac{1}{4} =$



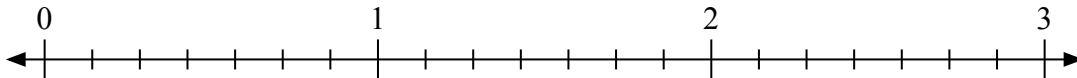
6) $5 : \frac{6}{9} =$



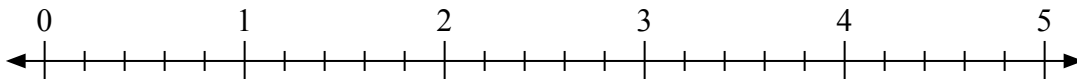
7) $2 : \frac{8}{9} =$



8) $2 : \frac{6}{7} =$



9) $4 : \frac{2}{5} =$



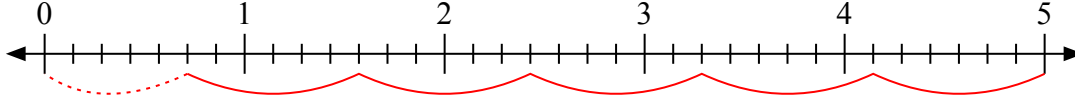
Risposte

1. _____
2. _____
3. _____
4. _____
5. _____
6. _____
7. _____
8. _____
9. _____

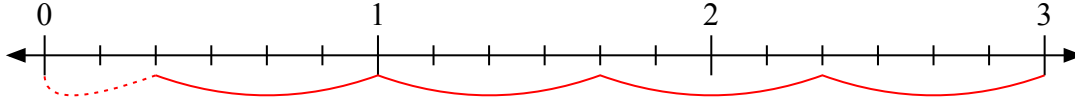


Usa la linea numerata per risolvere ogni problema.

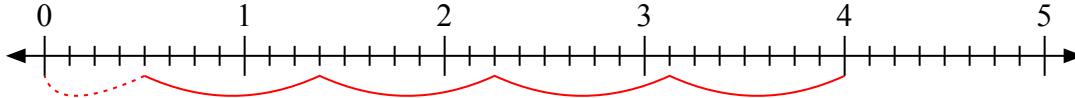
1) $5 : \frac{6}{7} =$



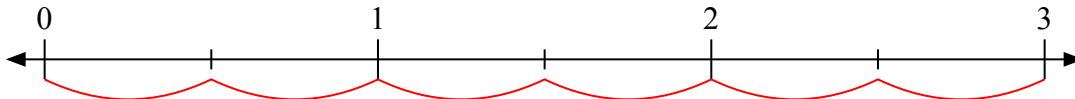
2) $3 : \frac{4}{6} =$



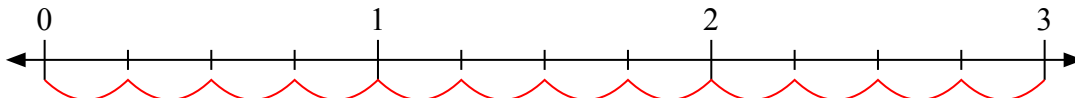
3) $4 : \frac{7}{8} =$



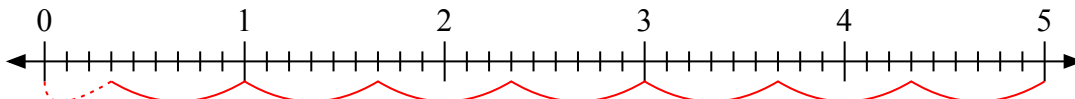
4) $3 : \frac{1}{2} =$



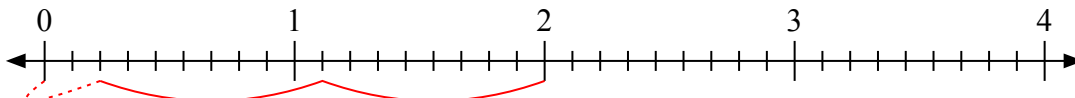
5) $3 : \frac{1}{4} =$



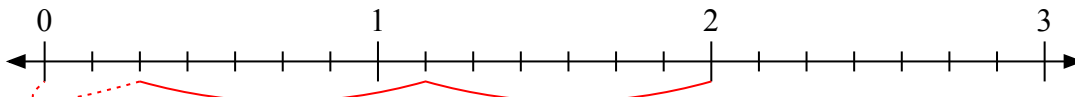
6) $5 : \frac{6}{9} =$



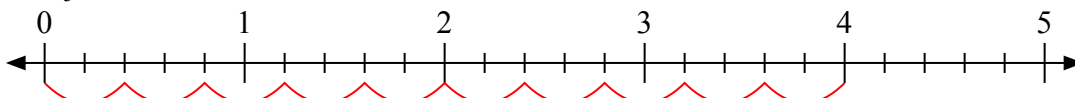
7) $2 : \frac{8}{9} =$



8) $2 : \frac{6}{7} =$



9) $4 : \frac{2}{5} =$



Risposte

1. 5 ⁵/₆

2. 4 ²/₄

3. 4 ⁴/₇

4. 6

5. 12

6. 7 ³/₆

7. 2 ²/₈

8. 2 ²/₆

9. 10