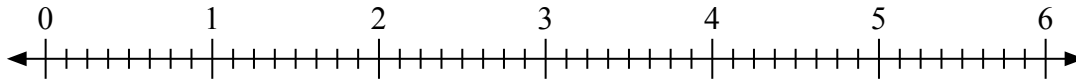


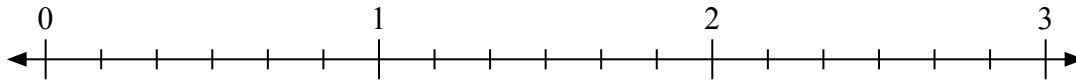


Usa la linea numerata per risolvere ogni problema.

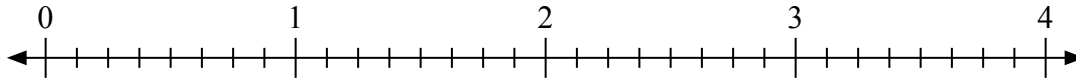
1) $4 : \frac{3}{8} =$



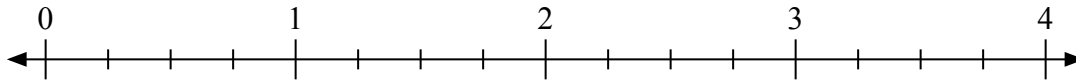
2) $2 : \frac{1}{6} =$



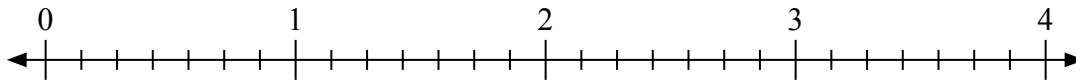
3) $3 : \frac{1}{8} =$



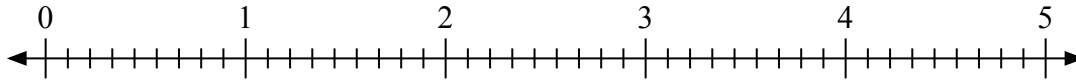
4) $4 : \frac{3}{4} =$



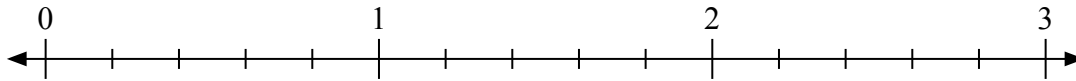
5) $3 : \frac{1}{7} =$



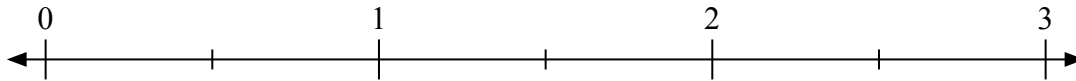
6) $4 : \frac{6}{9} =$



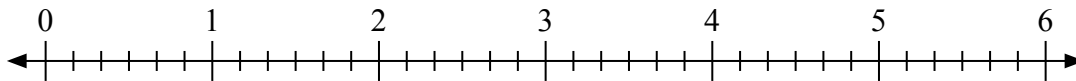
7) $2 : \frac{4}{5} =$



8) $3 : \frac{1}{2} =$



9) $3 : \frac{2}{6} =$

**Risposte**

1. _____

2. _____

3. _____

4. _____

5. _____

6. _____

7. _____

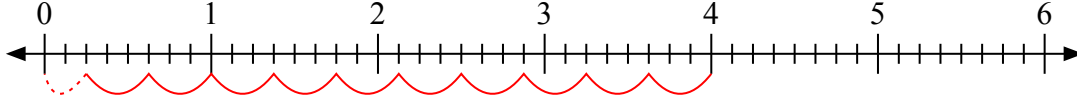
8. _____

9. _____

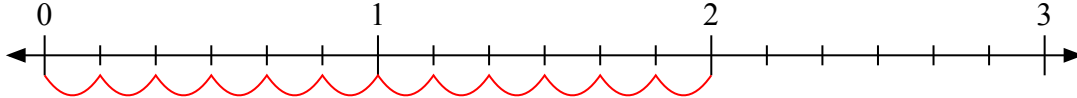


Usa la linea numerata per risolvere ogni problema.

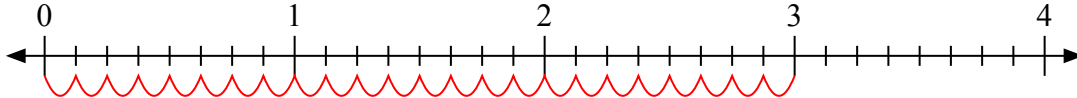
1) $4 : \frac{3}{8} =$



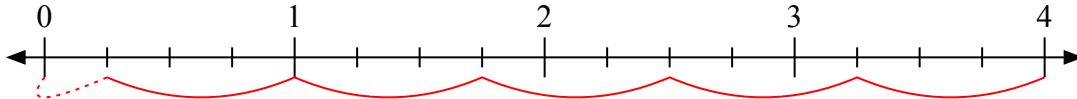
2) $2 : \frac{1}{6} =$



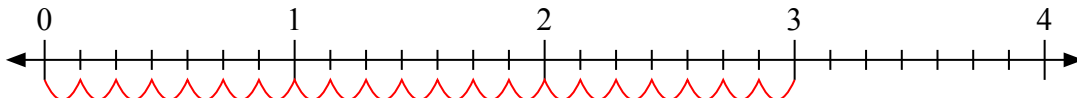
3) $3 : \frac{1}{8} =$



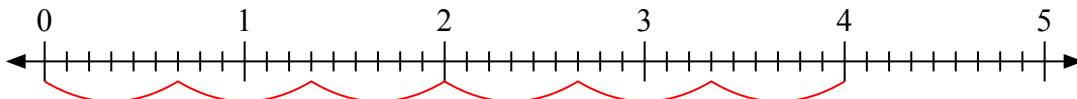
4) $4 : \frac{3}{4} =$



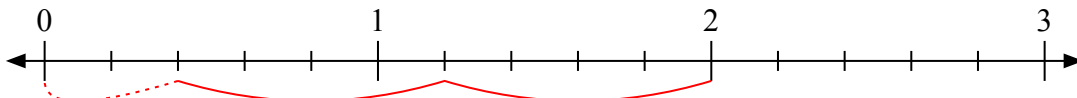
5) $3 : \frac{1}{7} =$



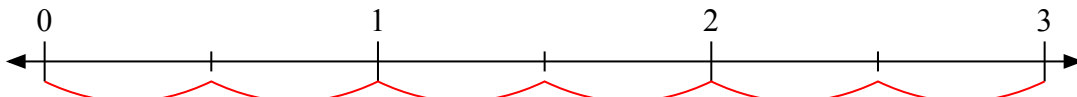
6) $4 : \frac{6}{9} =$



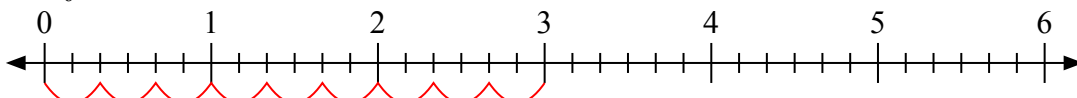
7) $2 : \frac{4}{5} =$



8) $3 : \frac{1}{2} =$



9) $3 : \frac{2}{6} =$



Risposte

1. 10 $\frac{2}{3}$

2. 12

3. 24

4. 5 $\frac{1}{3}$

5. 21

6. 6

7. 2 $\frac{2}{4}$

8. 6

9. 9