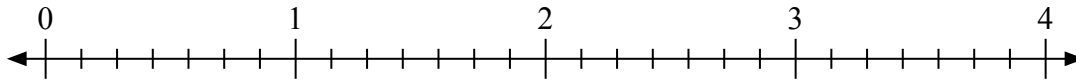


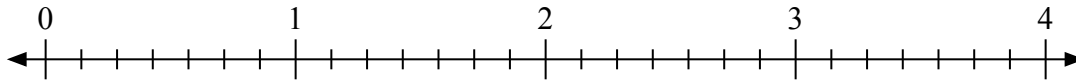


Usa la linea numerata per risolvere ogni problema.

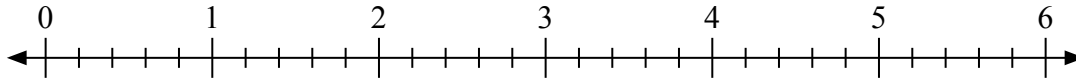
1) $2 : \frac{3}{7} =$



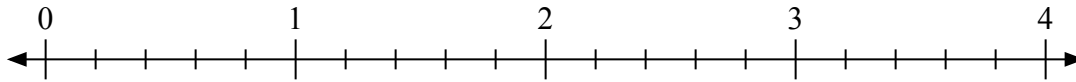
2) $4 : \frac{1}{7} =$



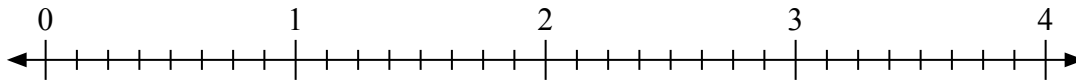
3) $5 : \frac{1}{5} =$



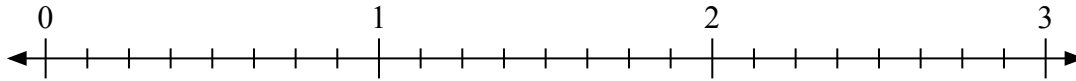
4) $3 : \frac{2}{5} =$



5) $3 : \frac{7}{8} =$



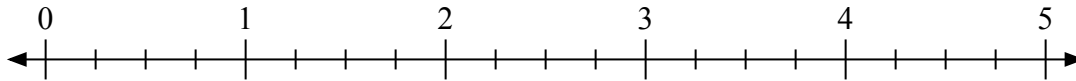
6) $3 : \frac{5}{8} =$



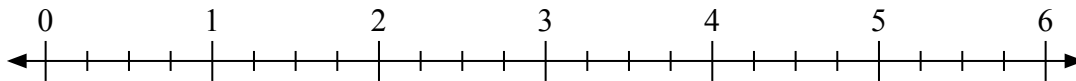
7) $3 : \frac{4}{5} =$



8) $4 : \frac{1}{4} =$



9) $4 : \frac{2}{4} =$

**Risposte**

1. _____

2. _____

3. _____

4. _____

5. _____

6. _____

7. _____

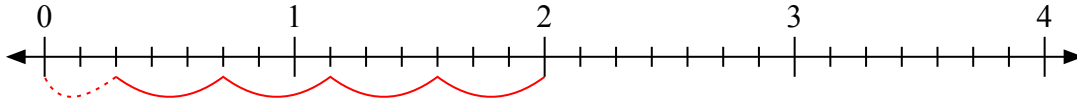
8. _____

9. _____

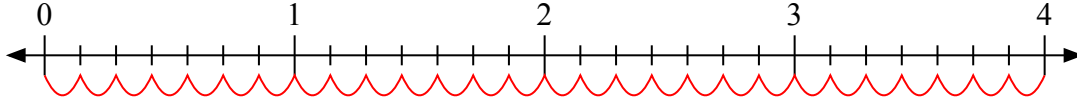


Usa la linea numerata per risolvere ogni problema.

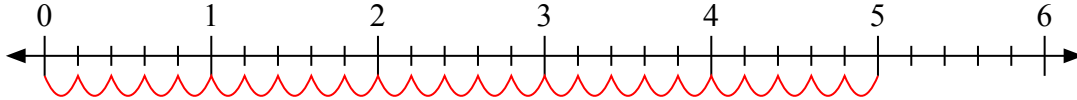
1) $2 : \frac{3}{7} =$



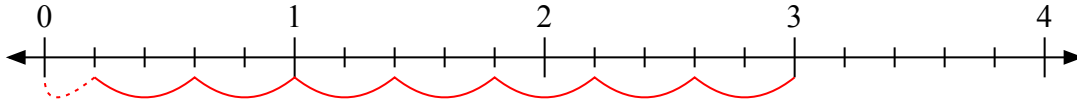
2) $4 : \frac{1}{7} =$



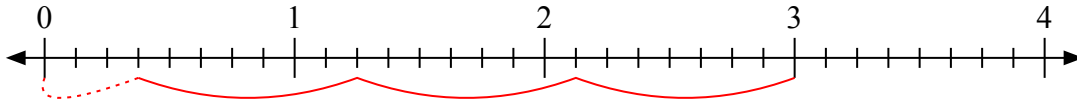
3) $5 : \frac{1}{5} =$



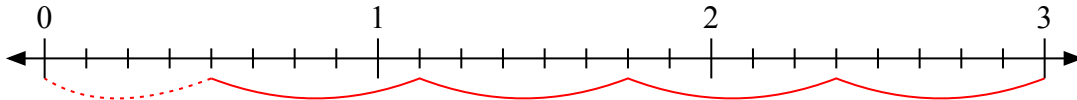
4) $3 : \frac{2}{5} =$



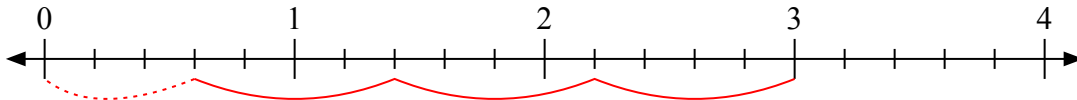
5) $3 : \frac{7}{8} =$



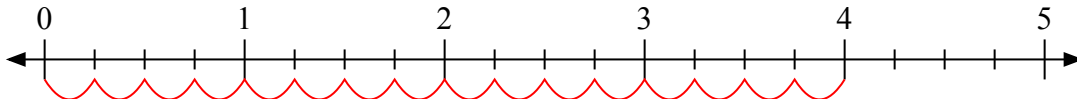
6) $3 : \frac{5}{8} =$



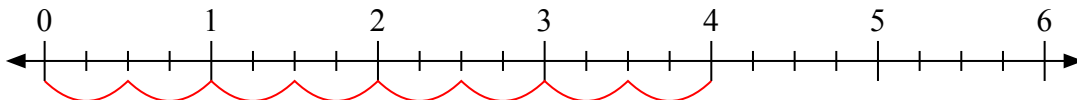
7) $3 : \frac{4}{5} =$



8) $4 : \frac{1}{4} =$



9) $4 : \frac{2}{4} =$



Risposte

1. 4 $\frac{2}{3}$

2. 28

3. 25

4. 7 $\frac{1}{2}$

5. 3 $\frac{3}{7}$

6. 4 $\frac{4}{5}$

7. 3 $\frac{3}{4}$

8. 16

9. 8