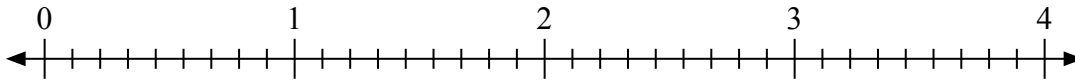


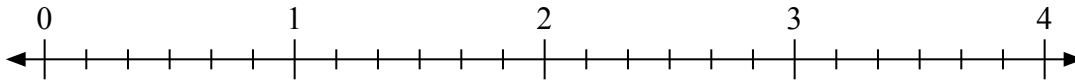


Usa la linea numerata per risolvere ogni problema.

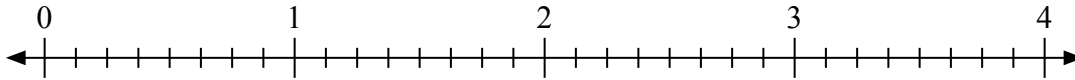
1) $4 : \frac{2}{9} =$



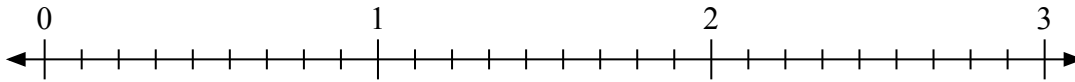
2) $3 : \frac{1}{6} =$



3) $4 : \frac{1}{8} =$



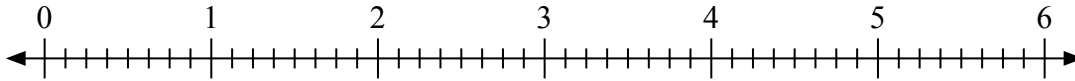
4) $2 : \frac{2}{9} =$



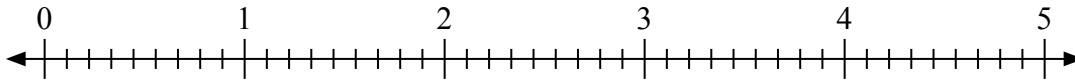
5) $2 : \frac{1}{3} =$



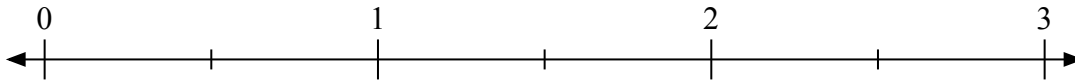
6) $3 : \frac{1}{8} =$



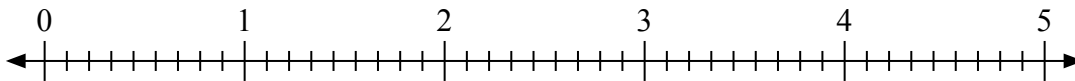
7) $5 : \frac{4}{9} =$



8) $2 : \frac{1}{2} =$



9) $2 : \frac{3}{9} =$

**Risposte**

1. _____

2. _____

3. _____

4. _____

5. _____

6. _____

7. _____

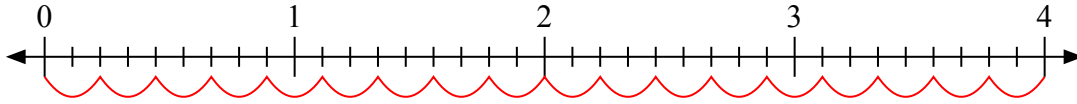
8. _____

9. _____

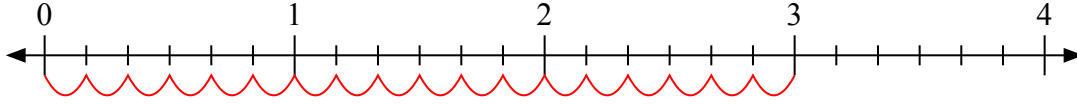


Usa la linea numerata per risolvere ogni problema.

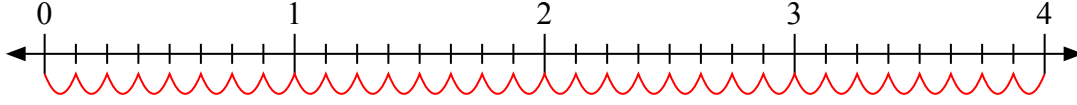
1) $4 : \frac{2}{9} =$



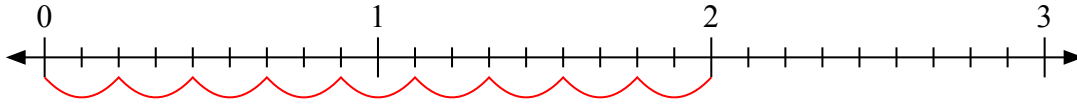
2) $3 : \frac{1}{6} =$



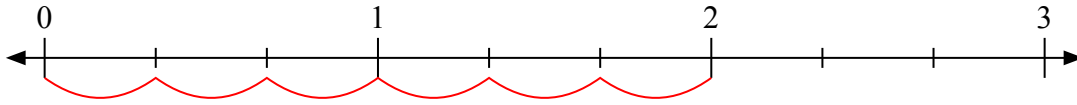
3) $4 : \frac{1}{8} =$



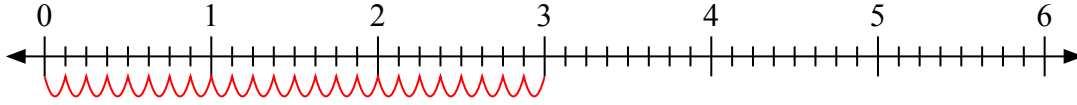
4) $2 : \frac{2}{9} =$



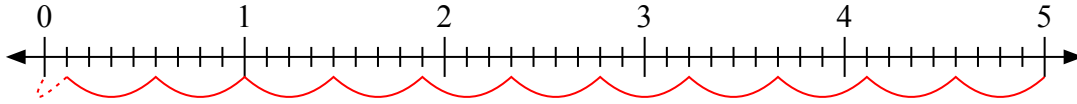
5) $2 : \frac{1}{3} =$



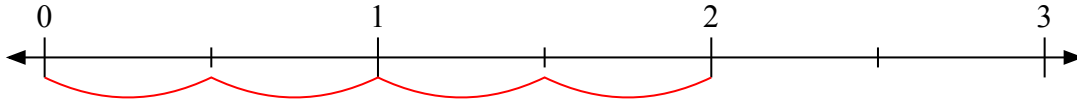
6) $3 : \frac{1}{8} =$



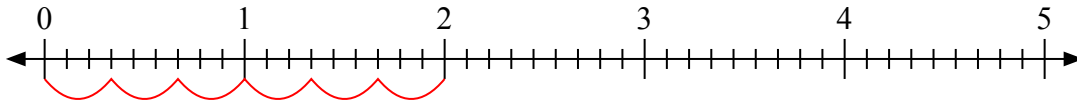
7) $5 : \frac{4}{9} =$



8) $2 : \frac{1}{2} =$



9) $2 : \frac{3}{9} =$



Risposte

1. 18

2. 18

3. 32

4. 9

5. 6

6. 24

7. 11 $\frac{1}{4}$

8. 4

9. 6