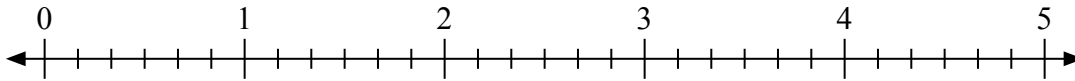


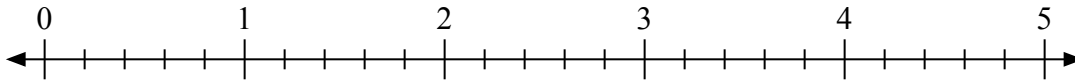


Usa la linea numerata per risolvere ogni problema.

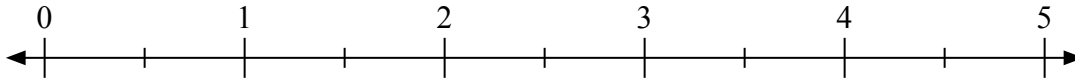
1) $2 : \frac{1}{6} =$



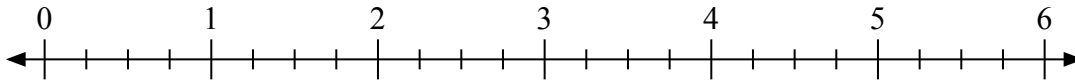
2) $3 : \frac{4}{5} =$



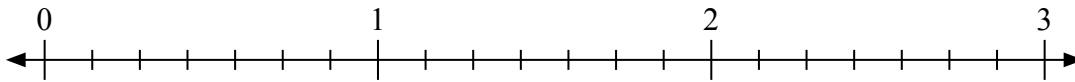
3) $2 : \frac{1}{2} =$



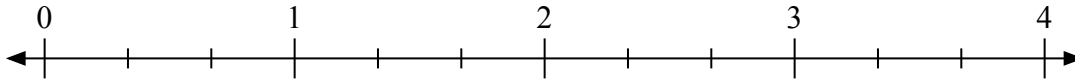
4) $6 : \frac{2}{4} =$



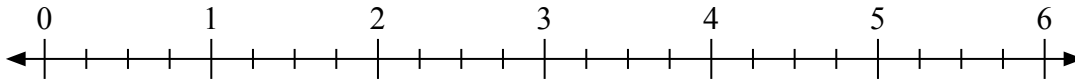
5) $3 : \frac{6}{7} =$



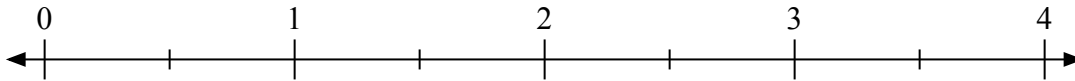
6) $3 : \frac{2}{3} =$



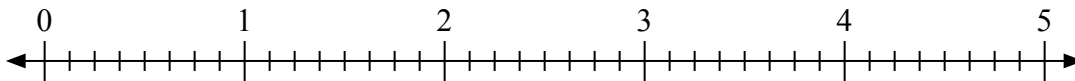
7) $3 : \frac{1}{4} =$



8) $3 : \frac{1}{2} =$



9) $5 : \frac{3}{8} =$

**Risposte**

1. _____

2. _____

3. _____

4. _____

5. _____

6. _____

7. _____

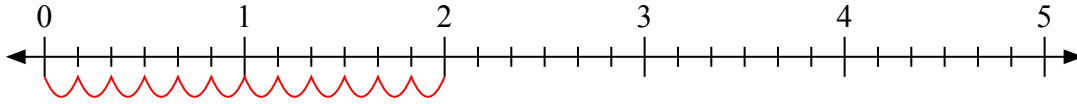
8. _____

9. _____

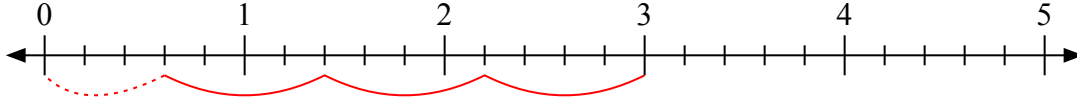


Usa la linea numerata per risolvere ogni problema.

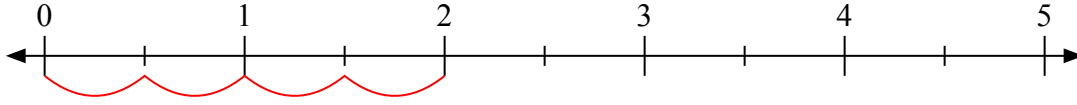
1) $2 : \frac{1}{6} =$



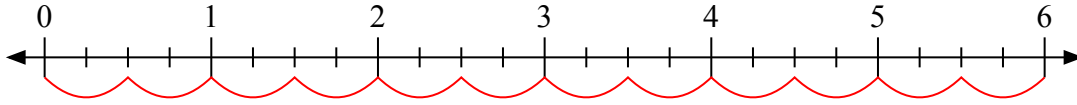
2) $3 : \frac{4}{5} =$



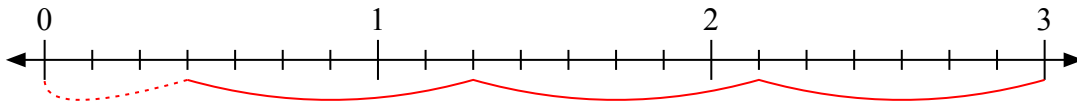
3) $2 : \frac{1}{2} =$



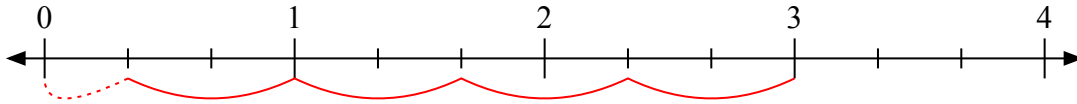
4) $6 : \frac{2}{4} =$



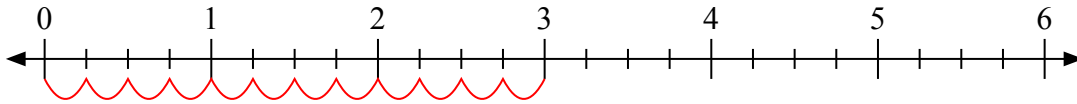
5) $3 : \frac{6}{7} =$



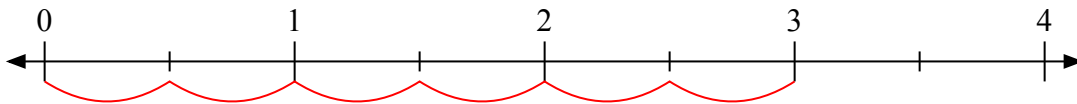
6) $3 : \frac{2}{3} =$



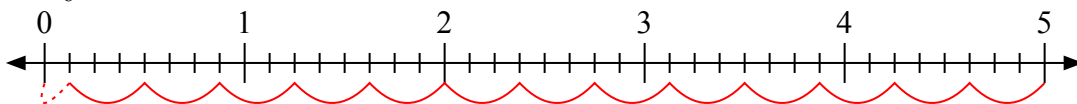
7) $3 : \frac{1}{4} =$



8) $3 : \frac{1}{2} =$



9) $5 : \frac{3}{8} =$



Risposte

1. 12

2. $3 \frac{3}{4}$

3. 4

4. 12

5. $3 \frac{3}{6}$

6. $4 \frac{1}{2}$

7. 12

8. 6

9. $13 \frac{1}{3}$