



Risolvi ogni problema, sciogliendo le frazioni. Il primo è un esempio.

Risposte

1) $6 : \frac{1}{5} = ?$ E' lo stesso di: Quanti $\frac{1}{5}$ ci sono in 6 interi?

| | | | | | |
|--------------------------|--------------------------|--------------------------|--------------------------|--------------------------|--------------------------|
| 1 interi | 1 interi | 1 interi | 1 interi | 1 interi | 1 interi |
| <input type="checkbox"/> | <input type="checkbox"/> | <input type="checkbox"/> | <input type="checkbox"/> | <input type="checkbox"/> | <input type="checkbox"/> |

2) $2 : \frac{1}{6} =$

| | |
|--------------------------|--------------------------|
| 1 interi | 1 interi |
| <input type="checkbox"/> | <input type="checkbox"/> |

3) $4 : \frac{1}{5} =$

| | | | |
|--------------------------|--------------------------|--------------------------|--------------------------|
| 1 interi | 1 interi | 1 interi | 1 interi |
| <input type="checkbox"/> | <input type="checkbox"/> | <input type="checkbox"/> | <input type="checkbox"/> |

4) $5 : \frac{1}{5} =$

| | | | | |
|--------------------------|--------------------------|--------------------------|--------------------------|--------------------------|
| 1 interi | 1 interi | 1 interi | 1 interi | 1 interi |
| <input type="checkbox"/> | <input type="checkbox"/> | <input type="checkbox"/> | <input type="checkbox"/> | <input type="checkbox"/> |

5) $6 : \frac{1}{2} =$

| | | | | | |
|--------------------------|--------------------------|--------------------------|--------------------------|--------------------------|--------------------------|
| 1 interi | 1 interi | 1 interi | 1 interi | 1 interi | 1 interi |
| <input type="checkbox"/> | <input type="checkbox"/> | <input type="checkbox"/> | <input type="checkbox"/> | <input type="checkbox"/> | <input type="checkbox"/> |

6) $6 : \frac{1}{4} =$

| | | | | | |
|--------------------------|--------------------------|--------------------------|--------------------------|--------------------------|--------------------------|
| 1 interi | 1 interi | 1 interi | 1 interi | 1 interi | 1 interi |
| <input type="checkbox"/> | <input type="checkbox"/> | <input type="checkbox"/> | <input type="checkbox"/> | <input type="checkbox"/> | <input type="checkbox"/> |

7) $4 : \frac{1}{6} =$

| | | | |
|--------------------------|--------------------------|--------------------------|--------------------------|
| 1 interi | 1 interi | 1 interi | 1 interi |
| <input type="checkbox"/> | <input type="checkbox"/> | <input type="checkbox"/> | <input type="checkbox"/> |

8) $4 : \frac{1}{4} =$

| | | | |
|--------------------------|--------------------------|--------------------------|--------------------------|
| 1 interi | 1 interi | 1 interi | 1 interi |
| <input type="checkbox"/> | <input type="checkbox"/> | <input type="checkbox"/> | <input type="checkbox"/> |

9) $2 : \frac{1}{3} =$

| | |
|--------------------------|--------------------------|
| 1 interi | 1 interi |
| <input type="checkbox"/> | <input type="checkbox"/> |

10) $2 : \frac{1}{5} =$

| | |
|--------------------------|--------------------------|
| 1 interi | 1 interi |
| <input type="checkbox"/> | <input type="checkbox"/> |


1. _____
2. _____
3. _____
4. _____
5. _____
6. _____
7. _____
8. _____
9. _____
10. _____



Risolvi ogni problema, sciogliendo le frazioni. Il primo è un esempio.

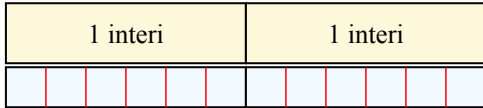
Risposte

1) $6 : \frac{1}{5} = ?$ E' lo stesso di: Quanti $\frac{1}{5}$ ci sono in 6 interi?



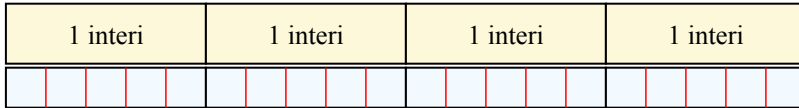
1. 30

2) $2 : \frac{1}{6} = ?$ E' lo stesso di: Quanti $\frac{1}{6}$ ci sono in 2 interi?



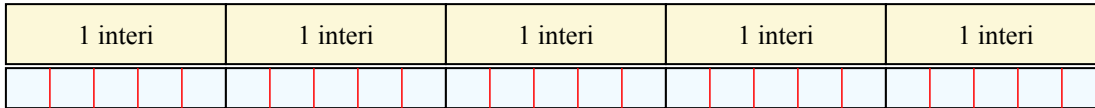
2. 12

3) $4 : \frac{1}{5} = ?$ E' lo stesso di: Quanti $\frac{1}{5}$ ci sono in 4 interi?



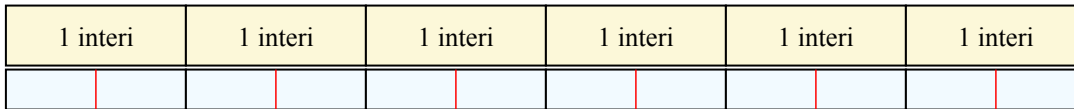
3. 20

4) $5 : \frac{1}{5} = ?$ E' lo stesso di: Quanti $\frac{1}{5}$ ci sono in 5 interi?




4. 25

5) $6 : \frac{1}{2} = ?$ E' lo stesso di: Quanti $\frac{1}{2}$ ci sono in 6 interi?




5. 12

6) $6 : \frac{1}{4} = ?$ E' lo stesso di: Quanti $\frac{1}{4}$ ci sono in 6 interi?




6. 24

7) $4 : \frac{1}{6} = ?$ E' lo stesso di: Quanti $\frac{1}{6}$ ci sono in 4 interi?




7. 24

8) $4 : \frac{1}{4} = ?$ E' lo stesso di: Quanti $\frac{1}{4}$ ci sono in 4 interi?




8. 16

9) $2 : \frac{1}{3} = ?$ E' lo stesso di: Quanti $\frac{1}{3}$ ci sono in 2 interi?



9. 6

10) $2 : \frac{1}{5} = ?$ E' lo stesso di: Quanti $\frac{1}{5}$ ci sono in 2 interi?



10. 10