
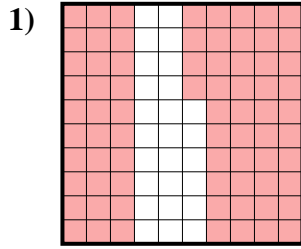




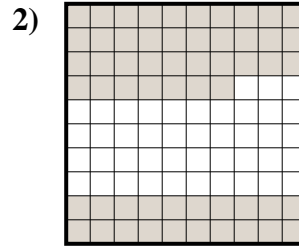
Determina il valore sotto forma di frazione, decimale e percentuale.



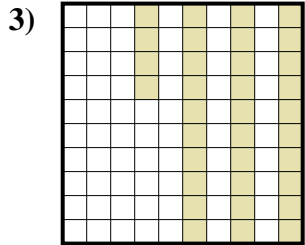
Frazione $\frac{1}{10}$
 Decimale 0,1
 Percentuale 10%



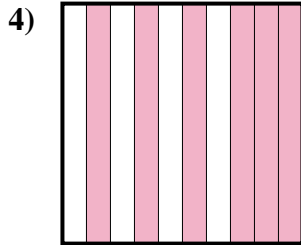
Frazione _____
 Decimale _____
 Percentuale _____



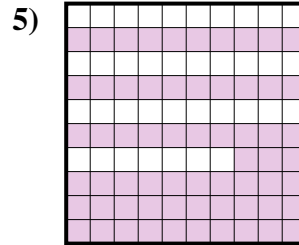
Frazione _____
 Decimale _____
 Percentuale _____



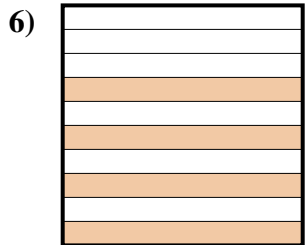
Frazione _____
 Decimale _____
 Percentuale _____



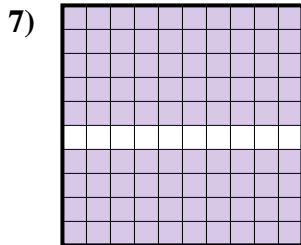
Frazione _____
 Decimale _____
 Percentuale _____



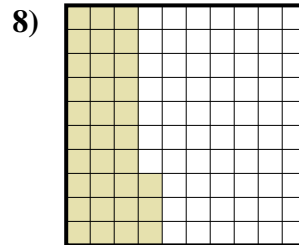
Frazione _____
 Decimale _____
 Percentuale _____



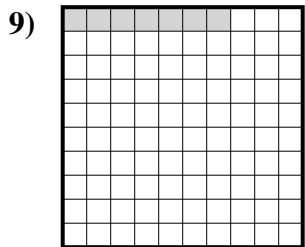
Frazione _____
 Decimale _____
 Percentuale _____



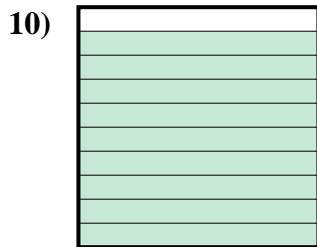
Frazione _____
 Decimale _____
 Percentuale _____



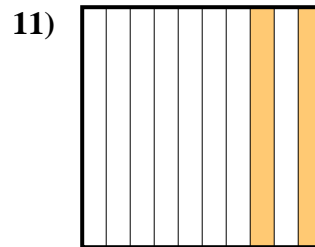
Frazione _____
 Decimale _____
 Percentuale _____



Frazione _____
 Decimale _____
 Percentuale _____



Frazione _____
 Decimale _____
 Percentuale _____



Frazione _____
 Decimale _____
 Percentuale _____

Risposte

Es. $\frac{1}{10}$ 0,1 10%

1. _____

2. _____

3. _____

4. _____

5. _____

6. _____

7. _____

8. _____


9. _____

10. _____

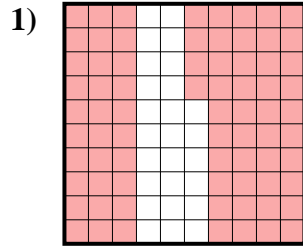
11. _____



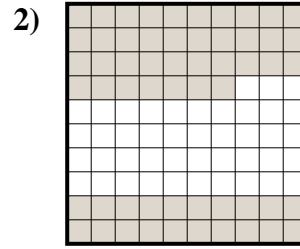
Determina il valore sotto forma di frazione, decimale e percentuale.



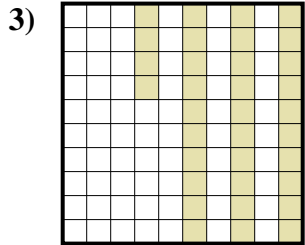
Frazione $\frac{1}{10}$
 Decimale $0,1$
 Percentuale 10%



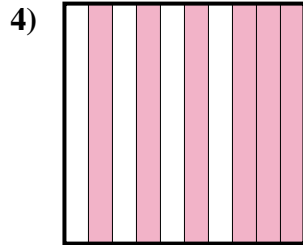
Frazione $\frac{74}{100}$
 Decimale $0,74$
 Percentuale 74%



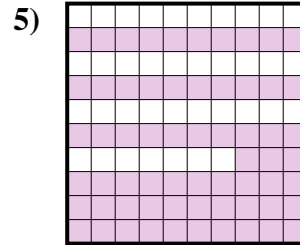
Frazione $\frac{57}{100}$
 Decimale $0,57$
 Percentuale 57%



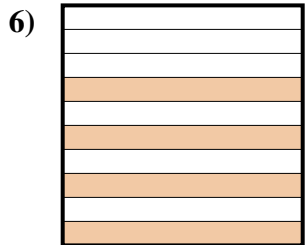
Frazione $\frac{34}{100}$
 Decimale $0,34$
 Percentuale 34%



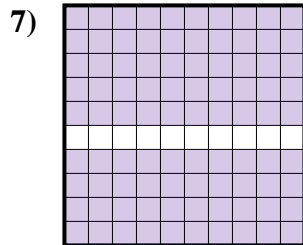
Frazione $\frac{6}{10}$
 Decimale $0,6$
 Percentuale 60%



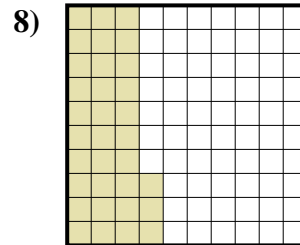
Frazione $\frac{63}{100}$
 Decimale $0,63$
 Percentuale 63%




Frazione $\frac{4}{10}$
 Decimale $0,4$
 Percentuale 40%




Frazione $\frac{90}{100}$
 Decimale $0,90$
 Percentuale 90%



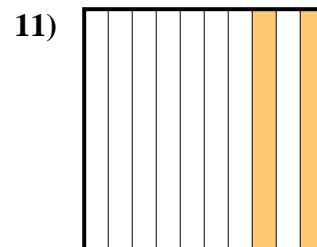
Frazione $\frac{33}{100}$
 Decimale $0,33$
 Percentuale 33%



Frazione $\frac{7}{100}$
 Decimale $0,07$
 Percentuale 7%



Frazione $\frac{9}{10}$
 Decimale $0,9$
 Percentuale 90%



Frazione $\frac{2}{10}$
 Decimale $0,2$
 Percentuale 20%

Risposte

Es. $\frac{1}{10}$ $0,1$ 10%
 ~~$\frac{74}{100}$~~
 1. $\frac{74}{100}$ $0,74$ 74%
 ~~$\frac{57}{100}$~~
 2. $\frac{57}{100}$ $0,57$ 57%
 ~~$\frac{34}{100}$~~
 3. $\frac{34}{100}$ $0,34$ 34%
 ~~$\frac{6}{10}$~~
 4. $\frac{6}{10}$ $0,6$ 60%
 ~~$\frac{63}{100}$~~
 5. $\frac{63}{100}$ $0,63$ 63%
 ~~$\frac{4}{10}$~~
 6. $\frac{4}{10}$ $0,4$ 40%
 ~~$\frac{90}{100}$~~
 7. $\frac{90}{100}$ $0,90$ 90%
 ~~$\frac{33}{100}$~~
 8. $\frac{33}{100}$ $0,33$ 33%
 ~~$\frac{7}{100}$~~
 9. $\frac{7}{100}$ $0,07$ 7%
 ~~$\frac{9}{10}$~~
 10. $\frac{9}{10}$ $0,9$ 90%
 ~~$\frac{2}{10}$~~
 11. $\frac{2}{10}$ $0,2$ 20%