
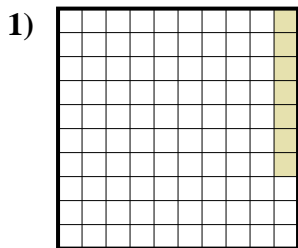




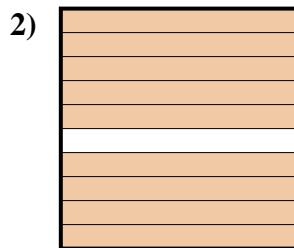
Determina il valore sotto forma di frazione, decimale e percentuale.



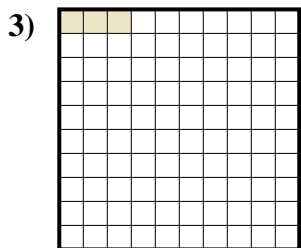
Frazione $\frac{6}{10}$
 Decimale 0,6
 Percentuale 60%



Frazione _____
 Decimale _____
 Percentuale _____



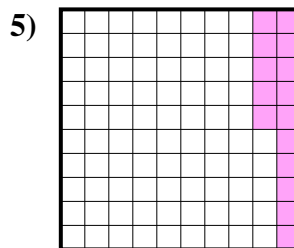
Frazione _____
 Decimale _____
 Percentuale _____



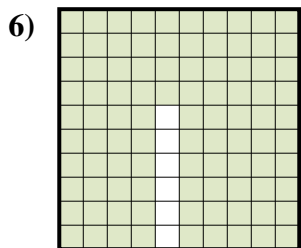
Frazione _____
 Decimale _____
 Percentuale _____



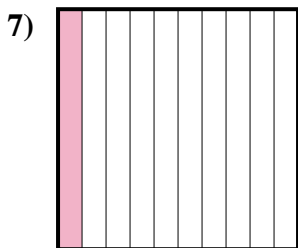
Frazione _____
 Decimale _____
 Percentuale _____



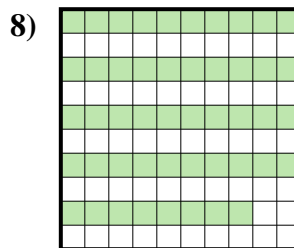
Frazione _____
 Decimale _____
 Percentuale _____




Frazione _____
 Decimale _____
 Percentuale _____



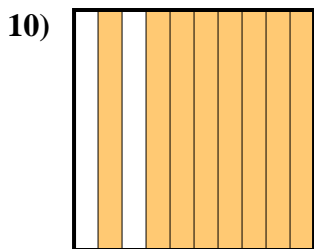
Frazione _____
 Decimale _____
 Percentuale _____



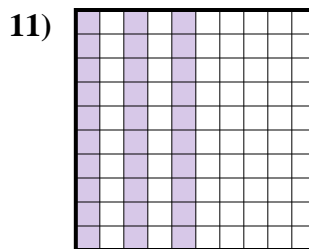
Frazione _____
 Decimale _____
 Percentuale _____



Frazione _____
 Decimale _____
 Percentuale _____



Frazione _____
 Decimale _____
 Percentuale _____



Frazione _____
 Decimale _____
 Percentuale _____

Risposte

Es. $\frac{6}{10}$ 0,6 60%

1. _____

2. _____

3. _____

4. _____

5. _____

6. _____

7. _____

8. _____


9. _____

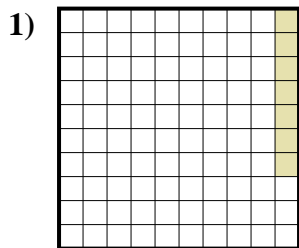
10. _____

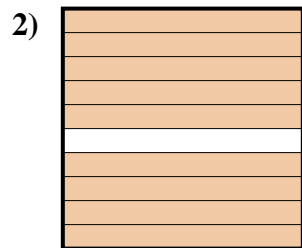
11. _____

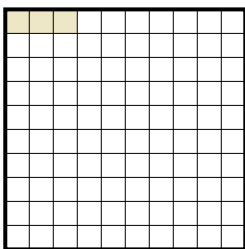



Determina il valore sotto forma di frazione, decimale e percentuale.

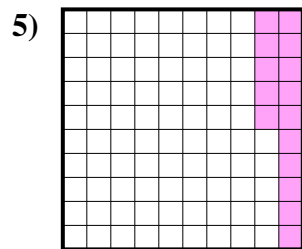
Es) 
 Frazione $\frac{6}{10}$
 Decimale $0,6$
 Percentuale 60%

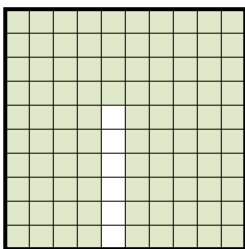
1) 
 Frazione $\frac{7}{100}$
 Decimale $0,07$
 Percentuale 7%

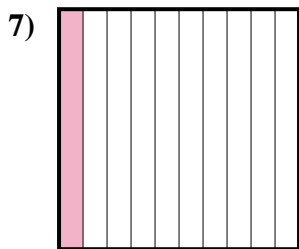
2) 
 Frazione $\frac{9}{10}$
 Decimale $0,9$
 Percentuale 90%

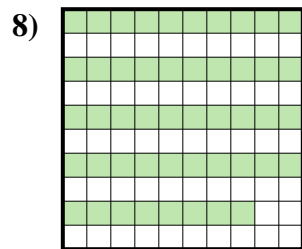
3) 
 Frazione $\frac{3}{100}$
 Decimale $0,03$
 Percentuale 3%


4) 
 Frazione $\frac{5}{10}$
 Decimale $0,5$
 Percentuale 50%

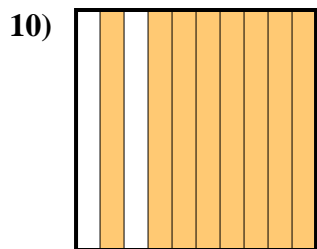
5) 
 Frazione $\frac{15}{100}$
 Decimale $0,15$
 Percentuale 15%

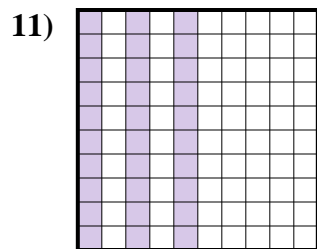
6) 
 Frazione $\frac{94}{100}$
 Decimale $0,94$
 Percentuale 94%

7) 
 Frazione $\frac{1}{10}$
 Decimale $0,1$
 Percentuale 10%

8) 
 Frazione $\frac{48}{100}$
 Decimale $0,48$
 Percentuale 48%

9) 
 Frazione $\frac{4}{10}$
 Decimale $0,4$
 Percentuale 40%

10) 
 Frazione $\frac{8}{10}$
 Decimale $0,8$
 Percentuale 80%

11) 
 Frazione $\frac{30}{100}$
 Decimale $0,30$
 Percentuale 30%

Risposte

Es. $\frac{6}{10}$ $0,6$ 60%

1. $\frac{7}{100}$ $0,07$ 7%

2. $\frac{9}{10}$ $0,9$ 90%

3. $\frac{3}{100}$ $0,03$ 3%

4. $\frac{5}{10}$ $0,5$ 50%

5. $\frac{15}{100}$ $0,15$ 15%

6. $\frac{94}{100}$ $0,94$ 94%

7. $\frac{1}{10}$ $0,1$ 10%

8. $\frac{48}{100}$ $0,48$ 48%

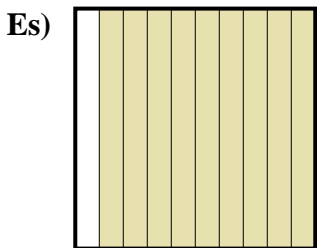
9. $\frac{4}{10}$ $0,4$ 40%

10. $\frac{8}{10}$ $0,8$ 80%


11. $\frac{30}{100}$ $0,30$ 30%



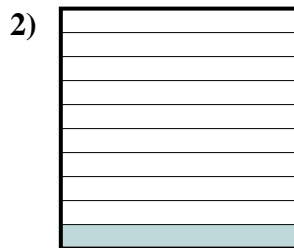
Determina il valore sotto forma di frazione, decimale e percentuale.



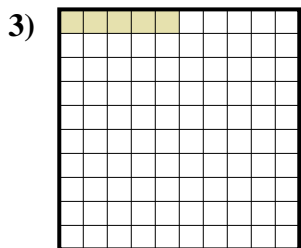
Frazione $\frac{9}{10}$
 Decimale 0,9
 Percentuale 90%



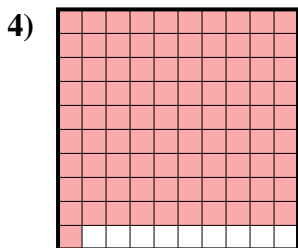
Frazione _____
 Decimale _____
 Percentuale _____




Frazione _____
 Decimale _____
 Percentuale _____



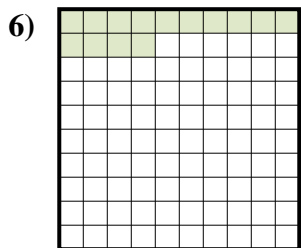
Frazione _____
 Decimale _____
 Percentuale _____



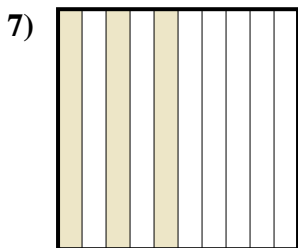
Frazione _____
 Decimale _____
 Percentuale _____



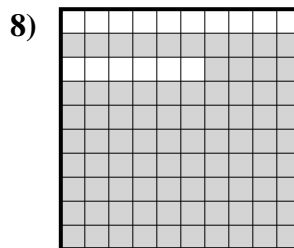
Frazione _____
 Decimale _____
 Percentuale _____



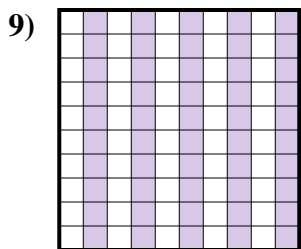
Frazione _____
 Decimale _____
 Percentuale _____



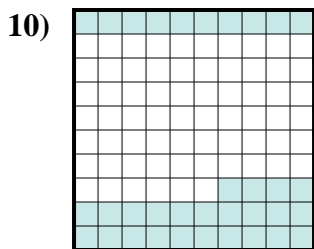
Frazione _____
 Decimale _____
 Percentuale _____



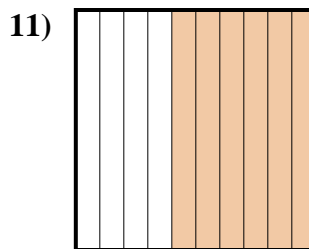
Frazione _____
 Decimale _____
 Percentuale _____



Frazione _____
 Decimale _____
 Percentuale _____



Frazione _____
 Decimale _____
 Percentuale _____



Frazione _____
 Decimale _____
 Percentuale _____

Risposte

Es. $\frac{9}{10}$ 0,9 90%

1. _____

2. _____

3. _____

4. _____

5. _____

6. _____

7. _____

8. _____

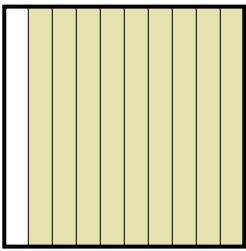
9. _____

10. _____


11. _____




Determina il valore sotto forma di frazione, decimale e percentuale.

Es) 

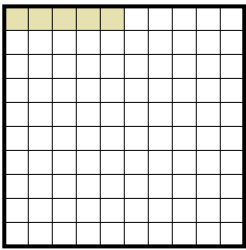
Frazione $\frac{9}{10}$
 Decimale $0,9$
 Percentuale 90%

1) 

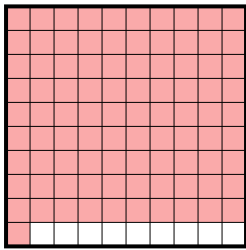
Frazione $\frac{7}{10}$
 Decimale $0,7$
 Percentuale 70%

2) 


Frazione $\frac{1}{10}$
 Decimale $0,1$
 Percentuale 10%

3) 

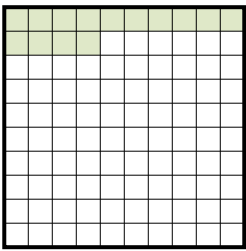
Frazione $\frac{5}{100}$
 Decimale $0,05$
 Percentuale 5%

4) 

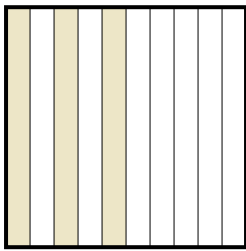
Frazione $\frac{91}{100}$
 Decimale $0,91$
 Percentuale 91%

5) 

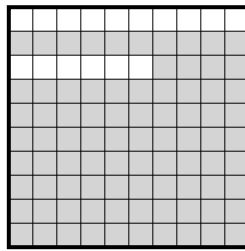
Frazione $\frac{8}{10}$
 Decimale $0,8$
 Percentuale 80%

6) 

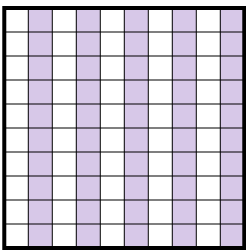
Frazione $\frac{14}{100}$
 Decimale $0,14$
 Percentuale 14%

7) 

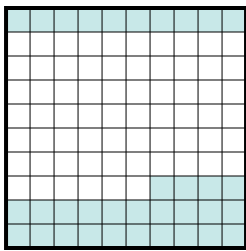
Frazione $\frac{3}{10}$
 Decimale $0,3$
 Percentuale 30%

8) 

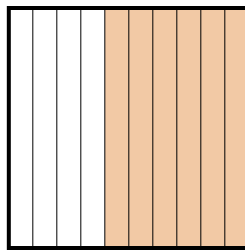
Frazione $\frac{84}{100}$
 Decimale $0,84$
 Percentuale 84%

9) 

Frazione $\frac{50}{100}$
 Decimale $0,50$
 Percentuale 50%

10) 

Frazione $\frac{34}{100}$
 Decimale $0,34$
 Percentuale 34%

11) 


Frazione $\frac{6}{10}$
 Decimale $0,6$
 Percentuale 60%

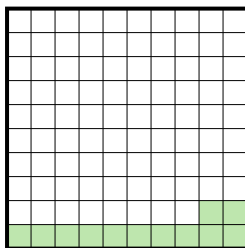
Risposte


- Es. $\frac{9}{10}$ **0,9** **90%**
 1. $\frac{7}{10}$ **0,7** **70%**
 2. $\frac{1}{10}$ **0,1** **10%**
 3. $\frac{5}{100}$ **0,05** **5%**
 4. $\frac{91}{100}$ **0,91** **91%**
 5. $\frac{8}{10}$ **0,8** **80%**
 6. $\frac{14}{100}$ **0,14** **14%**
 7. $\frac{3}{10}$ **0,3** **30%**
 8. $\frac{84}{100}$ **0,84** **84%**
 9. $\frac{50}{100}$ **0,50** **50%**
 10. $\frac{34}{100}$ **0,34** **34%**
 11. $\frac{6}{10}$ **0,6** **60%**




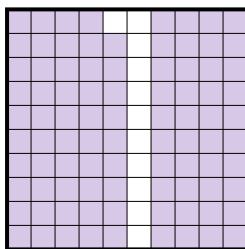
Determina il valore sotto forma di frazione, decimale e percentuale.

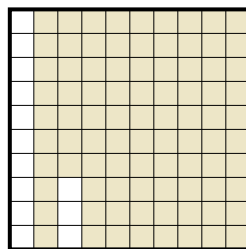
Es) 
 Frazione $\frac{2}{10}$
 Decimale $0,2$
 Percentuale 20%

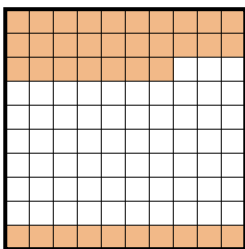
1) 
 Frazione $\frac{12}{100}$
 Decimale $0,12$
 Percentuale 12%


2) 
 Frazione $\frac{83}{100}$
 Decimale $0,83$
 Percentuale 83%


3) 
 Frazione $\frac{8}{10}$
 Decimale $0,8$
 Percentuale 80%

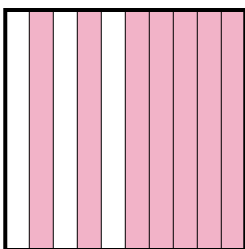
4) 
 Frazione $\frac{89}{100}$
 Decimale $0,89$
 Percentuale 89%


5) 
 Frazione $\frac{87}{100}$
 Decimale $0,87$
 Percentuale 87%


6) 
 Frazione $\frac{37}{100}$
 Decimale $0,37$
 Percentuale 37%

7) 
 Frazione $\frac{3}{10}$
 Decimale $0,3$
 Percentuale 30%

8) 
 Frazione $\frac{90}{100}$
 Decimale $0,90$
 Percentuale 90%

9) 
 Frazione $\frac{7}{10}$
 Decimale $0,7$
 Percentuale 70%

10) 
 Frazione $\frac{9}{10}$
 Decimale $0,9$
 Percentuale 90%

11) 
 Frazione $\frac{4}{10}$
 Decimale $0,4$
 Percentuale 40%

Risposte

Es. $\frac{2}{10}$ $0,2$ 20%

1. $\frac{12}{100}$ $0,12$ 12%

2. $\frac{83}{100}$ $0,83$ 83%

3. $\frac{8}{10}$ $0,8$ 80%

4. $\frac{89}{100}$ $0,89$ 89%

5. $\frac{87}{100}$ $0,87$ 87%

6. $\frac{37}{100}$ $0,37$ 37%

7. $\frac{3}{10}$ $0,3$ 30%

8. $\frac{90}{100}$ $0,90$ 90%

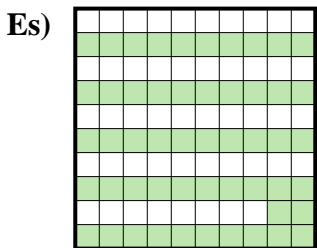
9. $\frac{7}{10}$ $0,7$ 70%

10. $\frac{9}{10}$ $0,9$ 90%


11. $\frac{4}{10}$ $0,4$ 40%



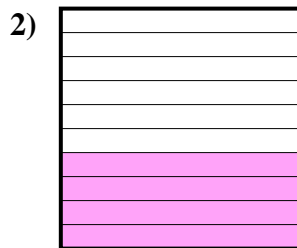
Determina il valore sotto forma di frazione, decimale e percentuale.



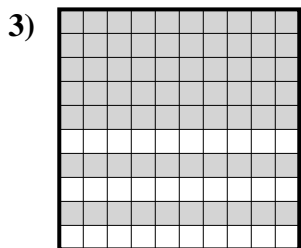
Frazione $\frac{52}{100}$
 Decimale 0,52
 Percentuale 52%



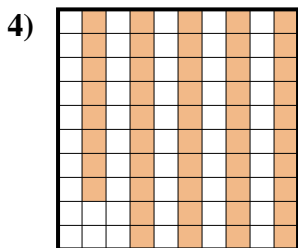
Frazione _____
 Decimale _____
 Percentuale _____



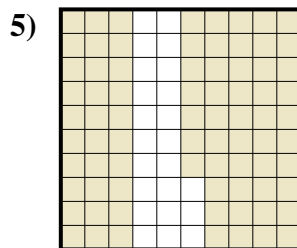
Frazione _____
 Decimale _____
 Percentuale _____



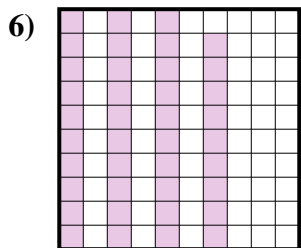
Frazione _____
 Decimale _____
 Percentuale _____




Frazione _____
 Decimale _____
 Percentuale _____



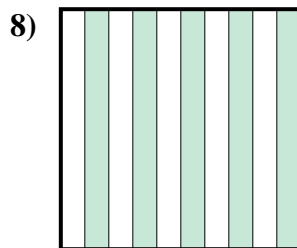
Frazione _____
 Decimale _____
 Percentuale _____




Frazione _____
 Decimale _____
 Percentuale _____



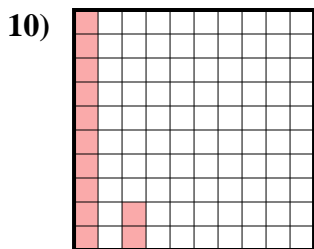
Frazione _____
 Decimale _____
 Percentuale _____



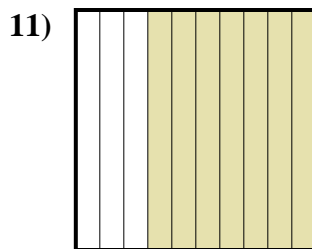
Frazione _____
 Decimale _____
 Percentuale _____



Frazione _____
 Decimale _____
 Percentuale _____



Frazione _____
 Decimale _____
 Percentuale _____



Frazione _____
 Decimale _____
 Percentuale _____

Risposte

Es. $\frac{52}{100}$ 0,52 52%

1. _____

2. _____

3. _____

4. _____

5. _____

6. _____

7. _____

8. _____

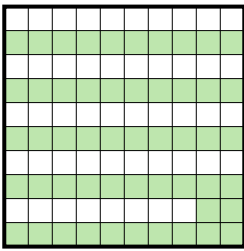
9. _____


10. _____


11. _____




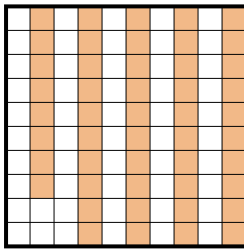
Determina il valore sotto forma di frazione, decimale e percentuale.

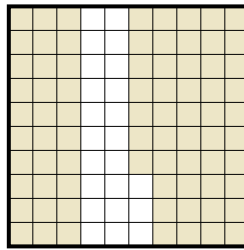
Es) 
 Frazione $\frac{52}{100}$
 Decimale $0,52$
 Percentuale 52%

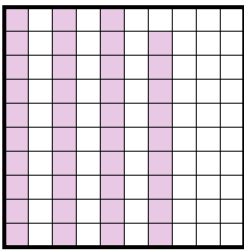
1) 
 Frazione $\frac{6}{10}$
 Decimale $0,6$
 Percentuale 60%


2) 
 Frazione $\frac{4}{10}$
 Decimale $0,4$
 Percentuale 40%

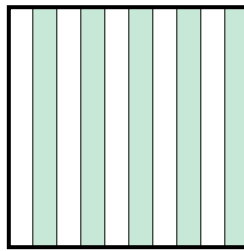
3) 
 Frazione $\frac{70}{100}$
 Decimale $0,70$
 Percentuale 70%


4) 
 Frazione $\frac{48}{100}$
 Decimale $0,48$
 Percentuale 48%

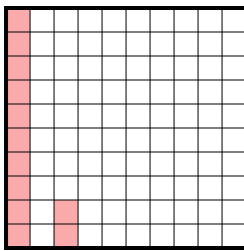
5) 
 Frazione $\frac{77}{100}$
 Decimale $0,77$
 Percentuale 77%

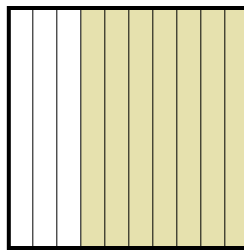
6) 
 Frazione $\frac{39}{100}$
 Decimale $0,39$
 Percentuale 39%

7) 
 Frazione $\frac{3}{10}$
 Decimale $0,3$
 Percentuale 30%

8) 
 Frazione $\frac{5}{10}$
 Decimale $0,5$
 Percentuale 50%

9) 
 Frazione $\frac{1}{10}$
 Decimale $0,1$
 Percentuale 10%

10) 
 Frazione $\frac{12}{100}$
 Decimale $0,12$
 Percentuale 12%

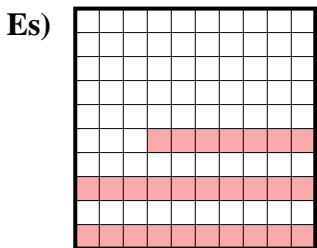
11) 
 Frazione $\frac{7}{10}$
 Decimale $0,7$
 Percentuale 70%

Risposte

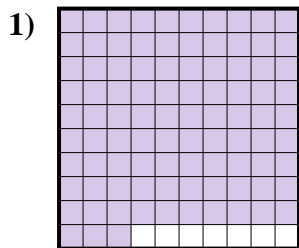
- Es. $\frac{52}{100}$ **0,52** **52%**
 1. $\frac{6}{10}$ **0,6** **60%**
 2. $\frac{4}{10}$ **0,4** **40%**
 3. $\frac{70}{100}$ **0,70** **70%**
 4. $\frac{48}{100}$ **0,48** **48%**
 5. $\frac{77}{100}$ **0,77** **77%**
 6. $\frac{39}{100}$ **0,39** **39%**
 7. $\frac{3}{10}$ **0,3** **30%**
 8. $\frac{5}{10}$ **0,5** **50%**
 9. $\frac{1}{10}$ **0,1** **10%**
 10. $\frac{12}{100}$ **0,12** **12%**
 11. $\frac{7}{10}$ **0,7** **70%**



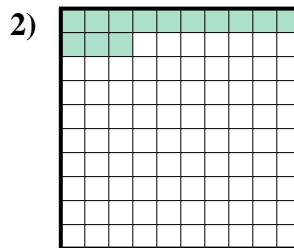
Determina il valore sotto forma di frazione, decimale e percentuale.



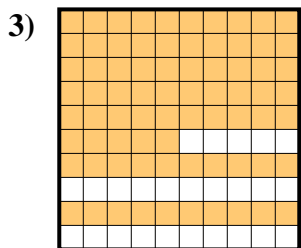
Frazione $\frac{27}{100}$
 Decimale 0,27
 Percentuale 27%



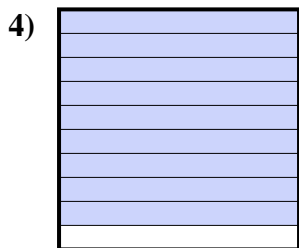
Frazione _____
 Decimale _____
 Percentuale _____




Frazione _____
 Decimale _____
 Percentuale _____



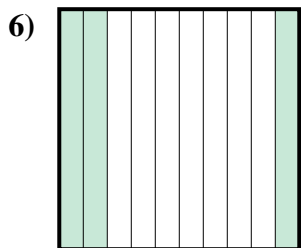
Frazione _____
 Decimale _____
 Percentuale _____



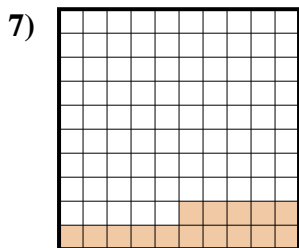
Frazione _____
 Decimale _____
 Percentuale _____




Frazione _____
 Decimale _____
 Percentuale _____



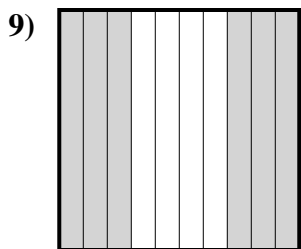
Frazione _____
 Decimale _____
 Percentuale _____




Frazione _____
 Decimale _____
 Percentuale _____



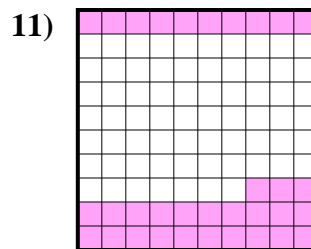
Frazione _____
 Decimale _____
 Percentuale _____



Frazione _____
 Decimale _____
 Percentuale _____



Frazione _____
 Decimale _____
 Percentuale _____



Frazione _____
 Decimale _____
 Percentuale _____

Risposte

Es. $\frac{27}{100}$ 0,27 27%

1. _____

2. _____

3. _____

4. _____

5. _____

6. _____

7. _____

8. _____

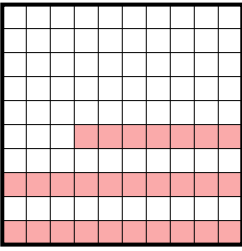
9. _____

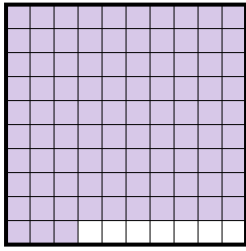
10. _____

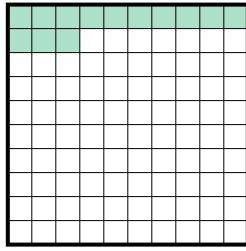
11. _____

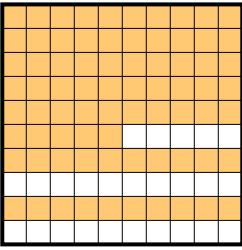



Determina il valore sotto forma di frazione, decimale e percentuale.


Es) 
 Frazione $\frac{27}{100}$
 Decimale $0,27$
 Percentuale 27%

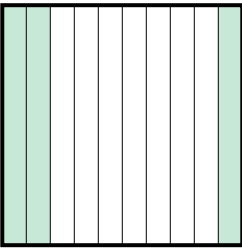
1) 
 Frazione $\frac{93}{100}$
 Decimale $0,93$
 Percentuale 93%

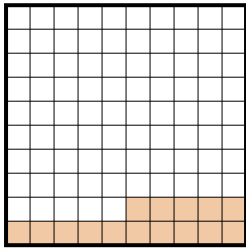
2) 
 Frazione $\frac{13}{100}$
 Decimale $0,13$
 Percentuale 13%


3) 
 Frazione $\frac{75}{100}$
 Decimale $0,75$
 Percentuale 75%

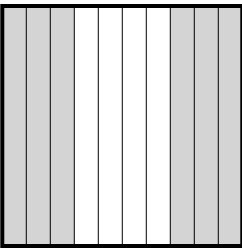
4) 
 Frazione $\frac{9}{10}$
 Decimale $0,9$
 Percentuale 90%


5) 
 Frazione $\frac{4}{10}$
 Decimale $0,4$
 Percentuale 40%

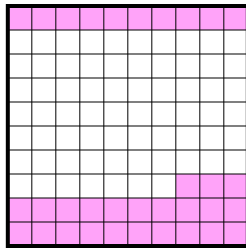
6) 
 Frazione $\frac{3}{10}$
 Decimale $0,3$
 Percentuale 30%

7) 
 Frazione $\frac{15}{100}$
 Decimale $0,15$
 Percentuale 15%

8) 
 Frazione $\frac{2}{10}$
 Decimale $0,2$
 Percentuale 20%

9) 
 Frazione $\frac{6}{10}$
 Decimale $0,6$
 Percentuale 60%

10) 
 Frazione $\frac{8}{10}$
 Decimale $0,8$
 Percentuale 80%

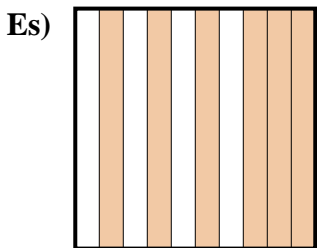
11) 
 Frazione $\frac{33}{100}$
 Decimale $0,33$
 Percentuale 33%

Risposte

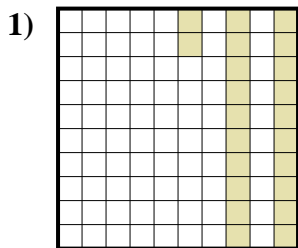
- Es. $\frac{27}{100}$ **0,27** **27%**
 1. $\frac{93}{100}$ **0,93** **93%**
 2. $\frac{13}{100}$ **0,13** **13%**
 3. $\frac{75}{100}$ **0,75** **75%**
 4. $\frac{9}{10}$ **0,9** **90%**
 5. $\frac{4}{10}$ **0,4** **40%**
 6. $\frac{3}{10}$ **0,3** **30%**
 7. $\frac{15}{100}$ **0,15** **15%**
 8. $\frac{2}{10}$ **0,2** **20%**
 9. $\frac{6}{10}$ **0,6** **60%**
 10. $\frac{8}{10}$ **0,8** **80%**
 11. $\frac{33}{100}$ **0,33** **33%**



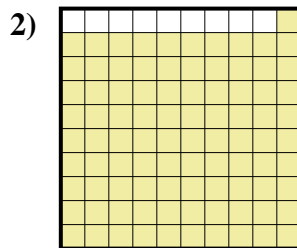
Determina il valore sotto forma di frazione, decimale e percentuale.



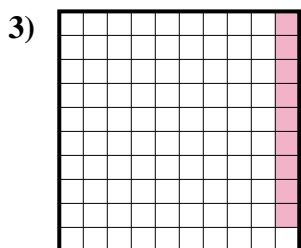
Frazione $\frac{6}{10}$
 Decimale 0,6
 Percentuale 60%



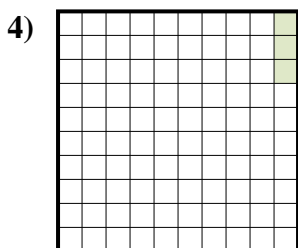
Frazione _____
 Decimale _____
 Percentuale _____



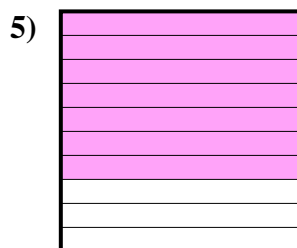
Frazione _____
 Decimale _____
 Percentuale _____




Frazione _____
 Decimale _____
 Percentuale _____



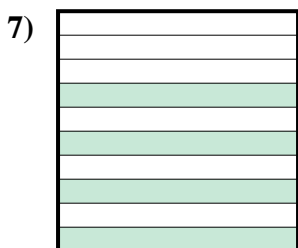
Frazione _____
 Decimale _____
 Percentuale _____




Frazione _____
 Decimale _____
 Percentuale _____



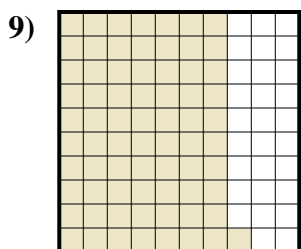
Frazione _____
 Decimale _____
 Percentuale _____



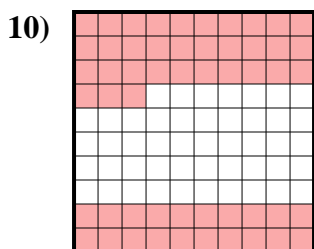
Frazione _____
 Decimale _____
 Percentuale _____



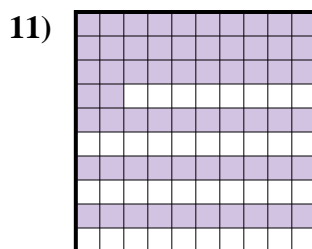
Frazione _____
 Decimale _____
 Percentuale _____



Frazione _____
 Decimale _____
 Percentuale _____



Frazione _____
 Decimale _____
 Percentuale _____



Frazione _____
 Decimale _____
 Percentuale _____

Risposte

Es. $\frac{6}{10}$ 0,6 60%

1. _____

2. _____

3. _____

4. _____

5. _____

6. _____

7. _____

8. _____

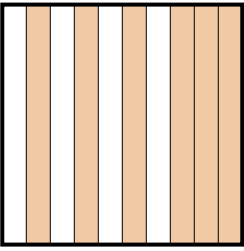
9. _____

10. _____

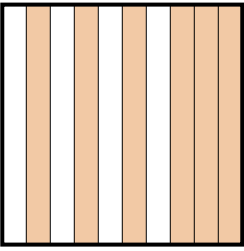
11. _____



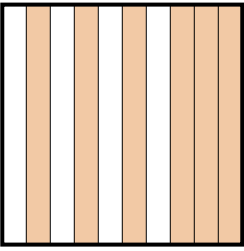
Determina il valore sotto forma di frazione, decimale e percentuale.

Es) 

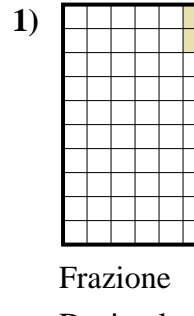
Frazione $\frac{6}{10}$
 Decimale $0,6$
 Percentuale 60%

1) 

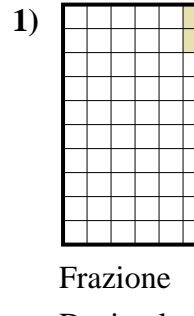
Frazione $\frac{22}{100}$
 Decimale $0,22$
 Percentuale 22%

2) 

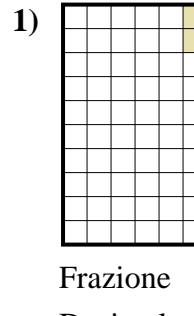
Frazione $\frac{91}{100}$
 Decimale $0,91$
 Percentuale 91%

3) 

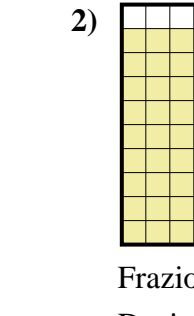
Frazione $\frac{9}{100}$
 Decimale $0,09$
 Percentuale 9%

4) 

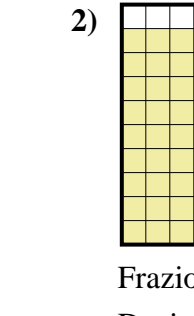
Frazione $\frac{3}{100}$
 Decimale $0,03$
 Percentuale 3%

5) 

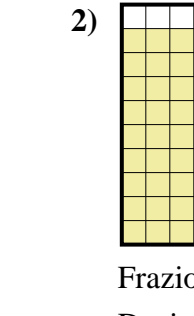
Frazione $\frac{7}{10}$
 Decimale $0,7$
 Percentuale 70%

6) 

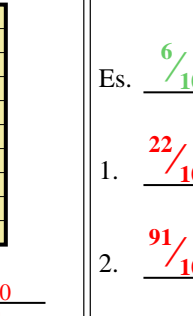
Frazione $\frac{8}{10}$
 Decimale $0,8$
 Percentuale 80%

7) 

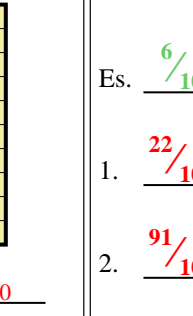
Frazione $\frac{4}{10}$
 Decimale $0,4$
 Percentuale 40%

8) 

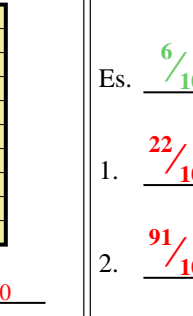
Frazione $\frac{1}{10}$
 Decimale $0,1$
 Percentuale 10%

9) 

Frazione $\frac{71}{100}$
 Decimale $0,71$
 Percentuale 71%

10) 

Frazione $\frac{53}{100}$
 Decimale $0,53$
 Percentuale 53%

11) 

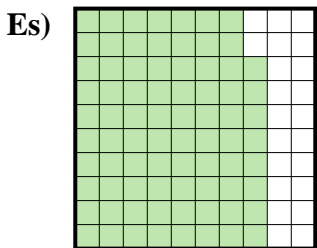
Frazione $\frac{62}{100}$
 Decimale $0,62$
 Percentuale 62%

Risposte

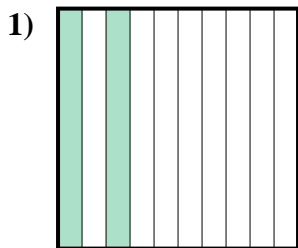
- Es. $\frac{6}{10}$ $0,6$ 60%
 1. $\frac{22}{100}$ $0,22$ 22%
 2. $\frac{91}{100}$ $0,91$ 91%
 3. $\frac{9}{100}$ $0,09$ 9%
 4. $\frac{3}{100}$ $0,03$ 3%
 5. $\frac{7}{10}$ $0,7$ 70%
 6. $\frac{8}{10}$ $0,8$ 80%
 7. $\frac{4}{10}$ $0,4$ 40%
 8. $\frac{1}{10}$ $0,1$ 10%
 9. $\frac{71}{100}$ $0,71$ 71%
 10. $\frac{53}{100}$ $0,53$ 53%
 11. $\frac{62}{100}$ $0,62$ 62%



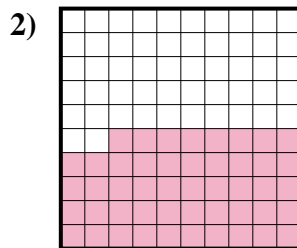
Determina il valore sotto forma di frazione, decimale e percentuale.



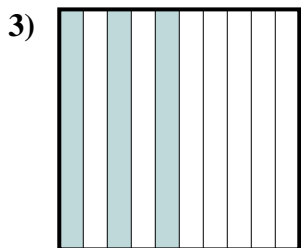
Frazione $\frac{78}{100}$
 Decimale 0,78
 Percentuale 78%



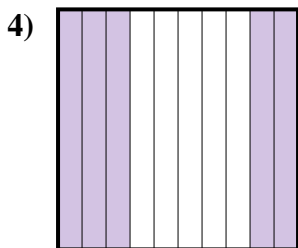
Frazione _____
 Decimale _____
 Percentuale _____



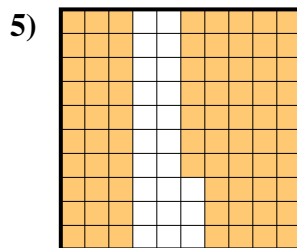
Frazione _____
 Decimale _____
 Percentuale _____



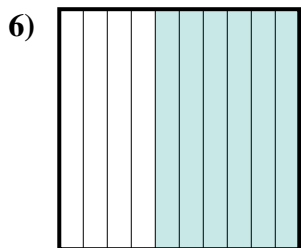
Frazione _____
 Decimale _____
 Percentuale _____



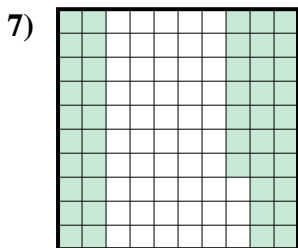
Frazione _____
 Decimale _____
 Percentuale _____



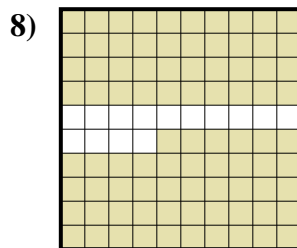
Frazione _____
 Decimale _____
 Percentuale _____




Frazione _____
 Decimale _____
 Percentuale _____




Frazione _____
 Decimale _____
 Percentuale _____



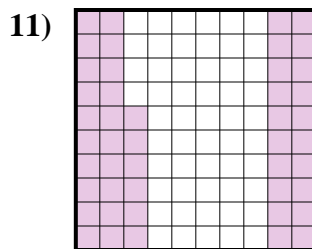
Frazione _____
 Decimale _____
 Percentuale _____



Frazione _____
 Decimale _____
 Percentuale _____



Frazione _____
 Decimale _____
 Percentuale _____



Frazione _____
 Decimale _____
 Percentuale _____

Risposte

Es. $\frac{78}{100}$ 0,78 78%

1. _____

2. _____

3. _____

4. _____

5. _____

6. _____

7. _____

8. _____

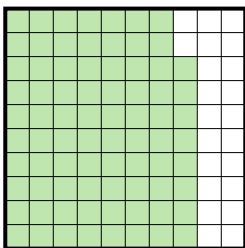
9. _____

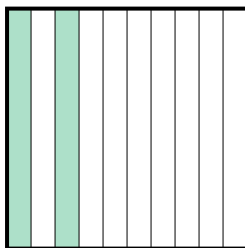
10. _____

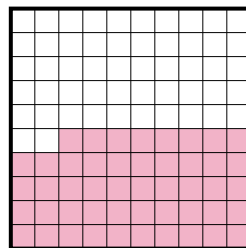
11. _____




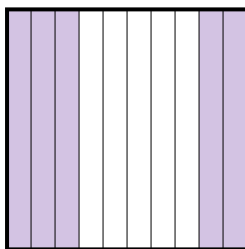
Determina il valore sotto forma di frazione, decimale e percentuale.

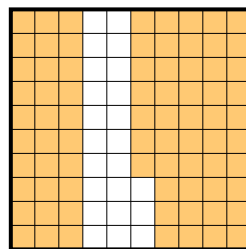
Es) 
 Frazione $\frac{78}{100}$
 Decimale $0,78$
 Percentuale 78%

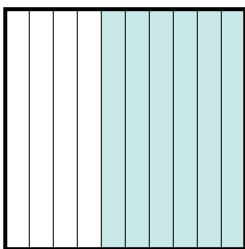
1) 
 Frazione $\frac{2}{10}$
 Decimale $0,2$
 Percentuale 20%

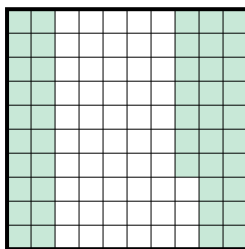
2) 
 Frazione $\frac{48}{100}$
 Decimale $0,48$
 Percentuale 48%

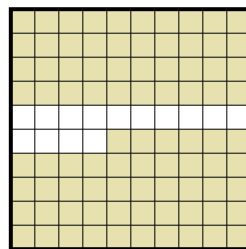
3) 
 Frazione $\frac{3}{10}$
 Decimale $0,3$
 Percentuale 30%


4) 
 Frazione $\frac{5}{10}$
 Decimale $0,5$
 Percentuale 50%


5) 
 Frazione $\frac{77}{100}$
 Decimale $0,77$
 Percentuale 77%

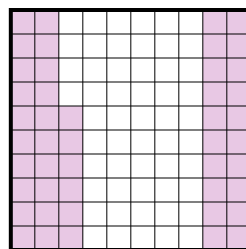
6) 
 Frazione $\frac{6}{10}$
 Decimale $0,6$
 Percentuale 60%

7) 
 Frazione $\frac{47}{100}$
 Decimale $0,47$
 Percentuale 47%

8) 
 Frazione $\frac{86}{100}$
 Decimale $0,86$
 Percentuale 86%

9) 
 Frazione $\frac{8}{10}$
 Decimale $0,8$
 Percentuale 80%

10) 
 Frazione $\frac{7}{10}$
 Decimale $0,7$
 Percentuale 70%

11) 
 Frazione $\frac{46}{100}$
 Decimale $0,46$
 Percentuale 46%

Risposte

Es. $\frac{78}{100}$ $0,78$ 78%

1. $\frac{2}{10}$ $0,2$ 20%

2. $\frac{48}{100}$ $0,48$ 48%

3. $\frac{3}{10}$ $0,3$ 30%

4. $\frac{5}{10}$ $0,5$ 50%

5. $\frac{77}{100}$ $0,77$ 77%

6. $\frac{6}{10}$ $0,6$ 60%

7. $\frac{47}{100}$ $0,47$ 47%

8. $\frac{86}{100}$ $0,86$ 86%

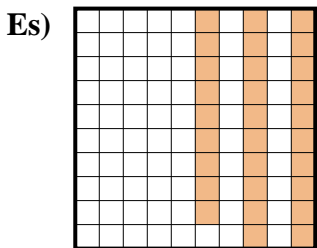
9. $\frac{8}{10}$ $0,8$ 80%

10. $\frac{7}{10}$ $0,7$ 70%

11. $\frac{46}{100}$ $0,46$ 46%



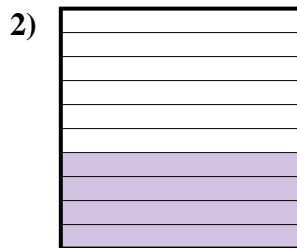
Determina il valore sotto forma di frazione, decimale e percentuale.




Frazione $\frac{29}{100}$
 Decimale 0,29
 Percentuale 29%



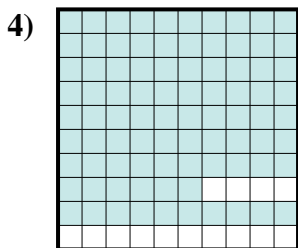
Frazione _____
 Decimale _____
 Percentuale _____



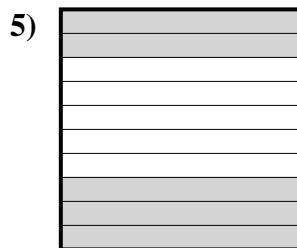
Frazione _____
 Decimale _____
 Percentuale _____



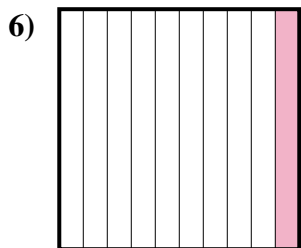
Frazione _____
 Decimale _____
 Percentuale _____



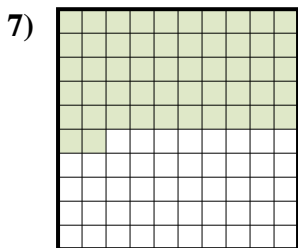
Frazione _____
 Decimale _____
 Percentuale _____



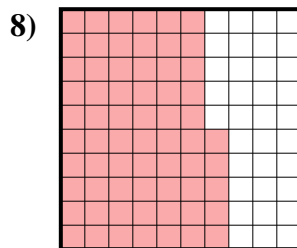
Frazione _____
 Decimale _____
 Percentuale _____



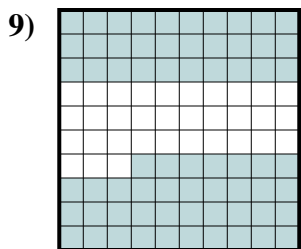
Frazione _____
 Decimale _____
 Percentuale _____



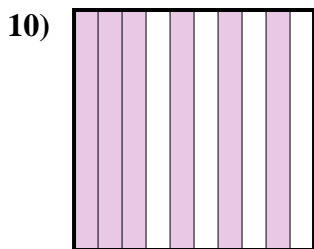
Frazione _____
 Decimale _____
 Percentuale _____



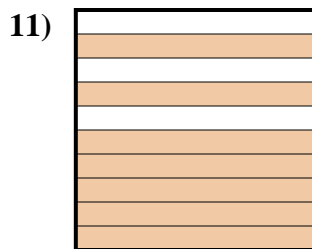
Frazione _____
 Decimale _____
 Percentuale _____



Frazione _____
 Decimale _____
 Percentuale _____



Frazione _____
 Decimale _____
 Percentuale _____



Frazione _____
 Decimale _____
 Percentuale _____

Risposte

Es. $\frac{29}{100}$ 0,29 29%

1. _____

2. _____

3. _____

4. _____

5. _____

6. _____

7. _____

8. _____

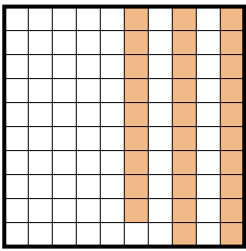
9. _____


10. _____


11. _____




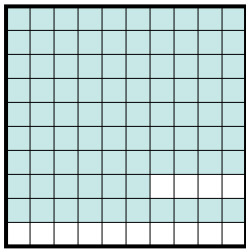
Determina il valore sotto forma di frazione, decimale e percentuale.


Es) 
 Frazione $\frac{29}{100}$
 Decimale $0,29$
 Percentuale 29%

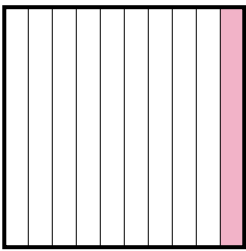
1) 
 Frazione $\frac{2}{10}$
 Decimale $0,2$
 Percentuale 20%

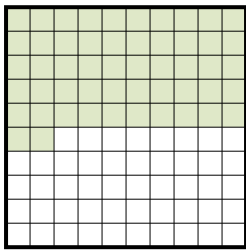
2) 
 Frazione $\frac{4}{10}$
 Decimale $0,4$
 Percentuale 40%

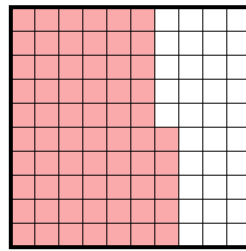
3) 
 Frazione $\frac{3}{10}$
 Decimale $0,3$
 Percentuale 30%

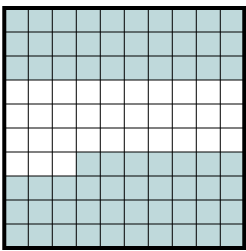
4) 
 Frazione $\frac{86}{100}$
 Decimale $0,86$
 Percentuale 86%

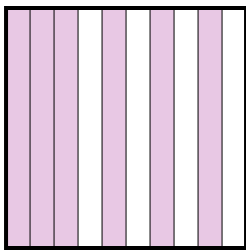
5) 
 Frazione $\frac{5}{10}$
 Decimale $0,5$
 Percentuale 50%

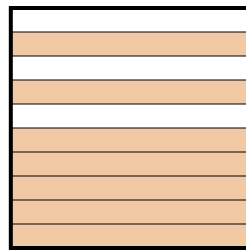
6) 
 Frazione $\frac{1}{10}$
 Decimale $0,1$
 Percentuale 10%

7) 
 Frazione $\frac{52}{100}$
 Decimale $0,52$
 Percentuale 52%

8) 
 Frazione $\frac{65}{100}$
 Decimale $0,65$
 Percentuale 65%

9) 
 Frazione $\frac{67}{100}$
 Decimale $0,67$
 Percentuale 67%

10) 
 Frazione $\frac{6}{10}$
 Decimale $0,6$
 Percentuale 60%

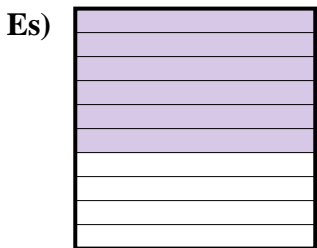
11) 
 Frazione $\frac{7}{10}$
 Decimale $0,7$
 Percentuale 70%

Risposte

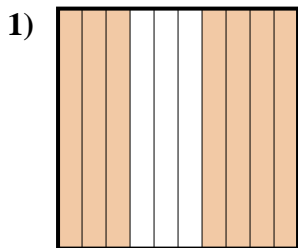
- Es. $\frac{29}{100}$ **0,29** **29%**
 1. $\frac{2}{10}$ **0,2** **20%**
 2. $\frac{4}{10}$ **0,4** **40%**
 3. $\frac{3}{10}$ **0,3** **30%**
 4. $\frac{86}{100}$ **0,86** **86%**
 5. $\frac{5}{10}$ **0,5** **50%**
 6. $\frac{1}{10}$ **0,1** **10%**
 7. $\frac{52}{100}$ **0,52** **52%**
 8. $\frac{65}{100}$ **0,65** **65%**
 9. $\frac{67}{100}$ **0,67** **67%**
 10. $\frac{6}{10}$ **0,6** **60%**
 11. $\frac{7}{10}$ **0,7** **70%**



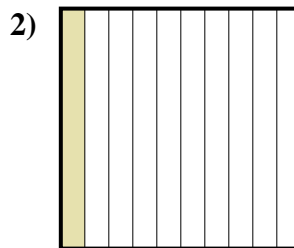
Determina il valore sotto forma di frazione, decimale e percentuale.



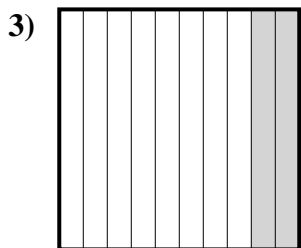
Frazione $\frac{6}{10}$
 Decimale 0,6
 Percentuale 60%



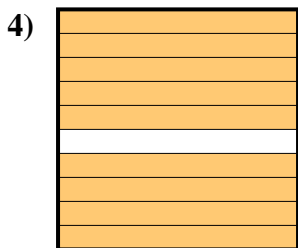
Frazione _____
 Decimale _____
 Percentuale _____



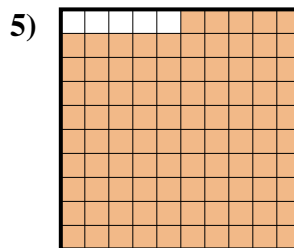
Frazione _____
 Decimale _____
 Percentuale _____



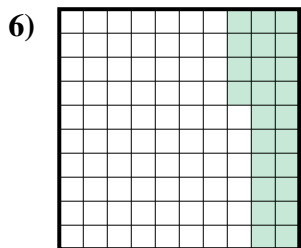
Frazione _____
 Decimale _____
 Percentuale _____



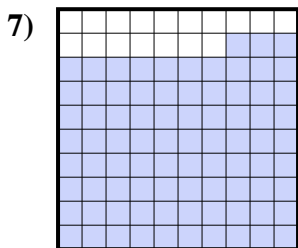
Frazione _____
 Decimale _____
 Percentuale _____



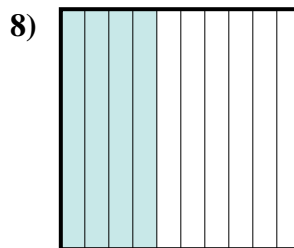
Frazione _____
 Decimale _____
 Percentuale _____



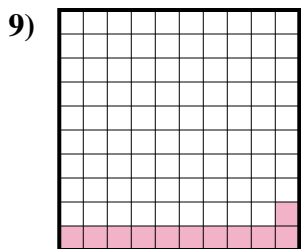
Frazione _____
 Decimale _____
 Percentuale _____



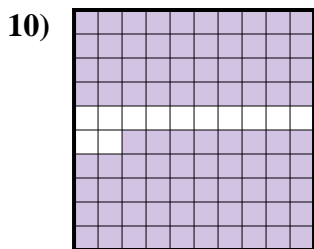
Frazione _____
 Decimale _____
 Percentuale _____



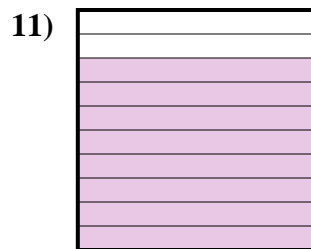
Frazione _____
 Decimale _____
 Percentuale _____



Frazione _____
 Decimale _____
 Percentuale _____



Frazione _____
 Decimale _____
 Percentuale _____



Frazione _____
 Decimale _____
 Percentuale _____

Risposte

Es. $\frac{6}{10}$ 0,6 60%

1. _____

2. _____

3. _____

4. _____

5. _____

6. _____

7. _____

8. _____


9. _____

10. _____

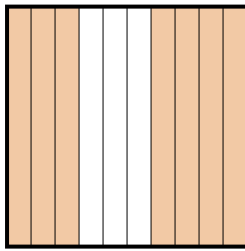
11. _____



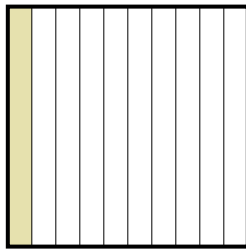
Determina il valore sotto forma di frazione, decimale e percentuale.

Es) 

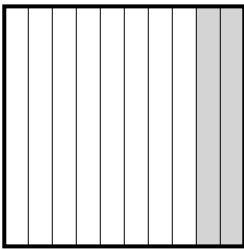
Frazione $\frac{6}{10}$
 Decimale $0,6$
 Percentuale 60%

1) 


Frazione $\frac{7}{10}$
 Decimale $0,7$
 Percentuale 70%

2) 

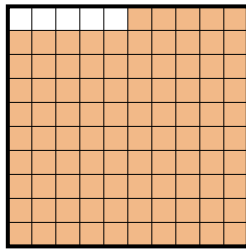
Frazione $\frac{1}{10}$
 Decimale $0,1$
 Percentuale 10%

3) 

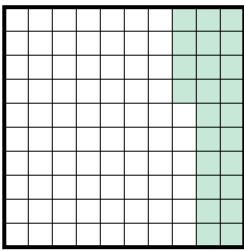
Frazione $\frac{2}{10}$
 Decimale $0,2$
 Percentuale 20%

4) 

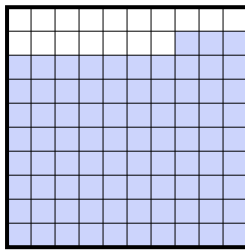
Frazione $\frac{9}{10}$
 Decimale $0,9$
 Percentuale 90%

5) 

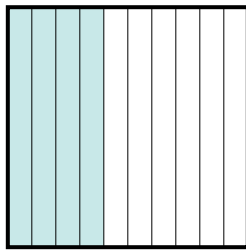
Frazione $\frac{95}{100}$
 Decimale $0,95$
 Percentuale 95%

6) 

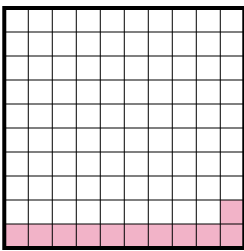
Frazione $\frac{24}{100}$
 Decimale $0,24$
 Percentuale 24%

7) 

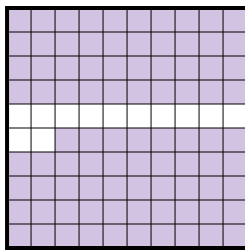
Frazione $\frac{83}{100}$
 Decimale $0,83$
 Percentuale 83%

8) 


Frazione $\frac{4}{10}$
 Decimale $0,4$
 Percentuale 40%

9) 

Frazione $\frac{11}{100}$
 Decimale $0,11$
 Percentuale 11%

10) 

Frazione $\frac{88}{100}$
 Decimale $0,88$
 Percentuale 88%

11) 

Frazione $\frac{8}{10}$
 Decimale $0,8$
 Percentuale 80%

Risposte

- Es. $\frac{6}{10}$ $0,6$ 60%
 1. $\frac{7}{10}$ $0,7$ 70%
 2. $\frac{1}{10}$ $0,1$ 10%
 3. $\frac{2}{10}$ $0,2$ 20%
 4. $\frac{9}{10}$ $0,9$ 90%
 5. $\frac{95}{100}$ $0,95$ 95%
 6. $\frac{24}{100}$ $0,24$ 24%
 7. $\frac{83}{100}$ $0,83$ 83%
 8. $\frac{4}{10}$ $0,4$ 40%
 9. $\frac{11}{100}$ $0,11$ 11%
 10. $\frac{88}{100}$ $0,88$ 88%
 11. $\frac{8}{10}$ $0,8$ 80%