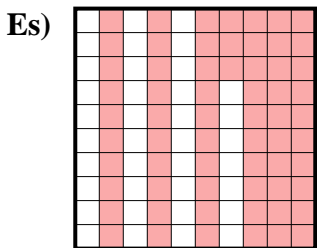
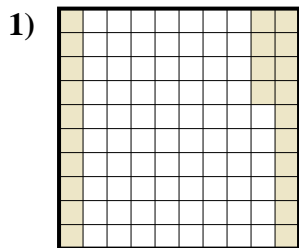




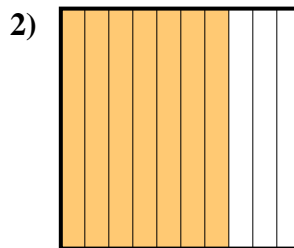
Determina il valore sotto forma di frazione, decimale e percentuale.



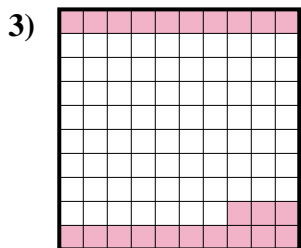
Frazione $\frac{63}{100}$
 Decimale 0,63
 Percentuale 63%



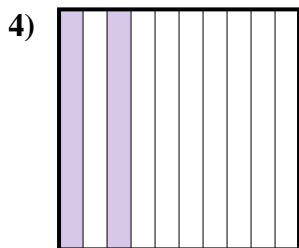
Frazione _____
 Decimale _____
 Percentuale _____




Frazione _____
 Decimale _____
 Percentuale _____




Frazione _____
 Decimale _____
 Percentuale _____



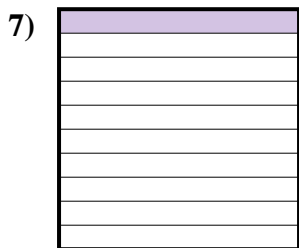
Frazione _____
 Decimale _____
 Percentuale _____



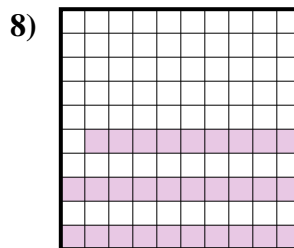
Frazione _____
 Decimale _____
 Percentuale _____



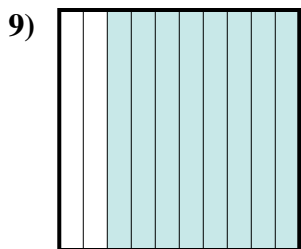
Frazione _____
 Decimale _____
 Percentuale _____



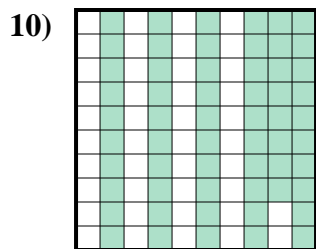
Frazione _____
 Decimale _____
 Percentuale _____



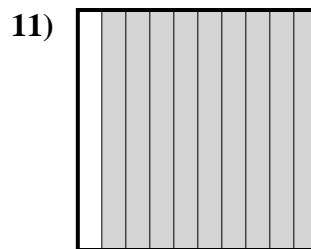
Frazione _____
 Decimale _____
 Percentuale _____



Frazione _____
 Decimale _____
 Percentuale _____



Frazione _____
 Decimale _____
 Percentuale _____



Frazione _____
 Decimale _____
 Percentuale _____

Risposte

Es. $\frac{63}{100}$ 0,63 63%

1. _____

2. _____

3. _____

4. _____

5. _____

6. _____

7. _____

8. _____

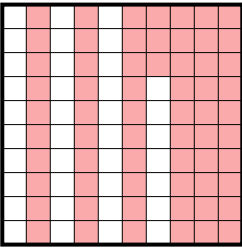
9. _____

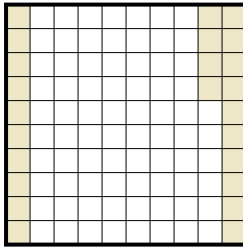
10. _____

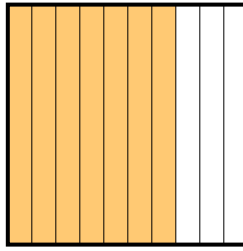
11. _____




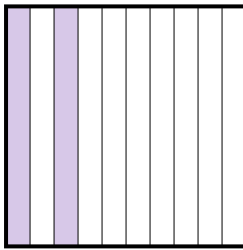
Determina il valore sotto forma di frazione, decimale e percentuale.

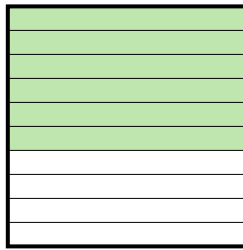
Es) 
 Frazione $\frac{63}{100}$
 Decimale $0,63$
 Percentuale 63%


1) 
 Frazione $\frac{24}{100}$
 Decimale $0,24$
 Percentuale 24%

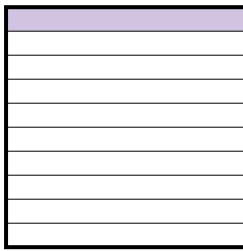
2) 
 Frazione $\frac{7}{10}$
 Decimale $0,7$
 Percentuale 70%

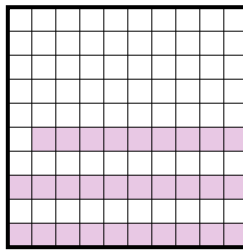
3) 
 Frazione $\frac{23}{100}$
 Decimale $0,23$
 Percentuale 23%


4) 
 Frazione $\frac{2}{10}$
 Decimale $0,2$
 Percentuale 20%

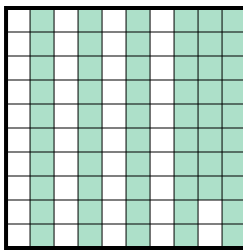
5) 
 Frazione $\frac{6}{10}$
 Decimale $0,6$
 Percentuale 60%

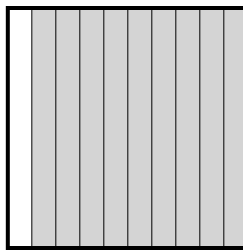
6) 
 Frazione $\frac{4}{10}$
 Decimale $0,4$
 Percentuale 40%

7) 
 Frazione $\frac{1}{10}$
 Decimale $0,1$
 Percentuale 10%

8) 
 Frazione $\frac{29}{100}$
 Decimale $0,29$
 Percentuale 29%

9) 
 Frazione $\frac{8}{10}$
 Decimale $0,8$
 Percentuale 80%

10) 
 Frazione $\frac{58}{100}$
 Decimale $0,58$
 Percentuale 58%

11) 
 Frazione $\frac{9}{10}$
 Decimale $0,9$
 Percentuale 90%

Risposte

- Es. $\frac{63}{100}$ **0,63** **63%**
 1. $\frac{24}{100}$ **0,24** **24%**
 2. $\frac{7}{10}$ **0,7** **70%**
 3. $\frac{23}{100}$ **0,23** **23%**
 4. $\frac{2}{10}$ **0,2** **20%**
 5. $\frac{6}{10}$ **0,6** **60%**
 6. $\frac{4}{10}$ **0,4** **40%**
 7. $\frac{1}{10}$ **0,1** **10%**
 8. $\frac{29}{100}$ **0,29** **29%**
 9. $\frac{8}{10}$ **0,8** **80%**
 10. $\frac{58}{100}$ **0,58** **58%**
 11. $\frac{9}{10}$ **0,9** **90%**