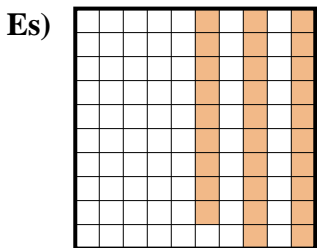




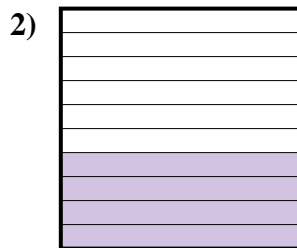
Determina il valore sotto forma di frazione, decimale e percentuale.




Frazione $\frac{29}{100}$
 Decimale 0,29
 Percentuale 29%



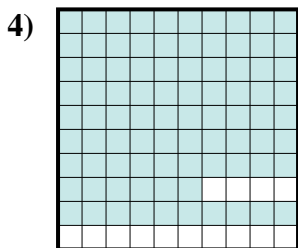
Frazione _____
 Decimale _____
 Percentuale _____



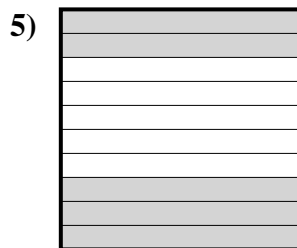
Frazione _____
 Decimale _____
 Percentuale _____



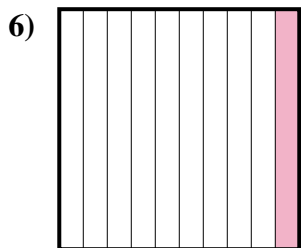
Frazione _____
 Decimale _____
 Percentuale _____



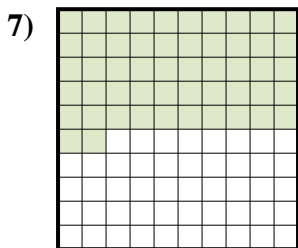
Frazione _____
 Decimale _____
 Percentuale _____



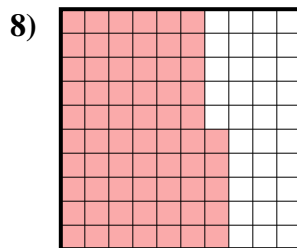
Frazione _____
 Decimale _____
 Percentuale _____



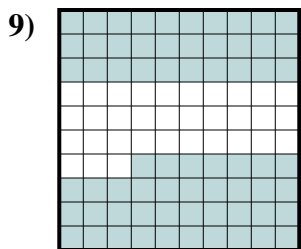
Frazione _____
 Decimale _____
 Percentuale _____



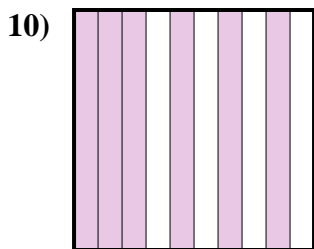
Frazione _____
 Decimale _____
 Percentuale _____



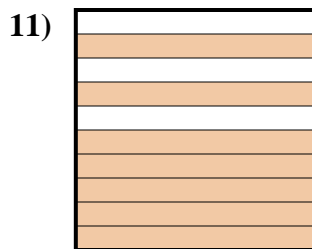
Frazione _____
 Decimale _____
 Percentuale _____



Frazione _____
 Decimale _____
 Percentuale _____



Frazione _____
 Decimale _____
 Percentuale _____



Frazione _____
 Decimale _____
 Percentuale _____

Risposte

Es. $\frac{29}{100}$ 0,29 29%

1. _____

2. _____

3. _____

4. _____

5. _____

6. _____

7. _____

8. _____

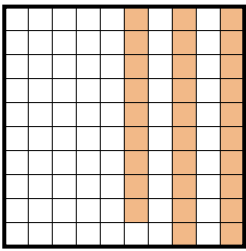
9. _____


10. _____


11. _____




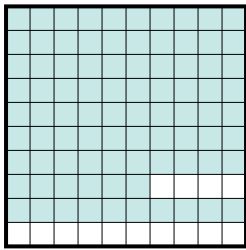
Determina il valore sotto forma di frazione, decimale e percentuale.


Es) 
 Frazione $\frac{29}{100}$
 Decimale $0,29$
 Percentuale 29%

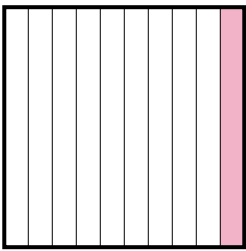
1) 
 Frazione $\frac{2}{10}$
 Decimale $0,2$
 Percentuale 20%

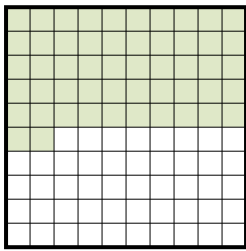
2) 
 Frazione $\frac{4}{10}$
 Decimale $0,4$
 Percentuale 40%

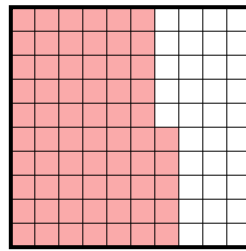
3) 
 Frazione $\frac{3}{10}$
 Decimale $0,3$
 Percentuale 30%

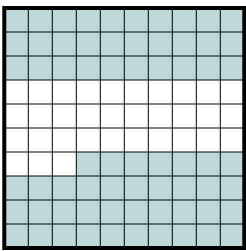
4) 
 Frazione $\frac{86}{100}$
 Decimale $0,86$
 Percentuale 86%

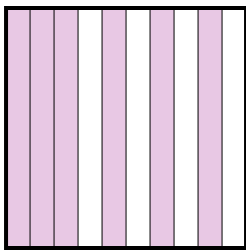
5) 
 Frazione $\frac{5}{10}$
 Decimale $0,5$
 Percentuale 50%

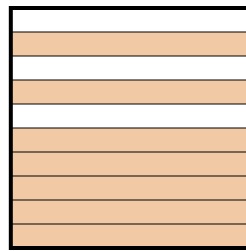
6) 
 Frazione $\frac{1}{10}$
 Decimale $0,1$
 Percentuale 10%

7) 
 Frazione $\frac{52}{100}$
 Decimale $0,52$
 Percentuale 52%

8) 
 Frazione $\frac{65}{100}$
 Decimale $0,65$
 Percentuale 65%

9) 
 Frazione $\frac{67}{100}$
 Decimale $0,67$
 Percentuale 67%

10) 
 Frazione $\frac{6}{10}$
 Decimale $0,6$
 Percentuale 60%

11) 
 Frazione $\frac{7}{10}$
 Decimale $0,7$
 Percentuale 70%

Risposte

- Es. $\frac{29}{100}$ $0,29$ 29%
 1. $\frac{2}{10}$ $0,2$ 20%
 2. $\frac{4}{10}$ $0,4$ 40%
 3. $\frac{3}{10}$ $0,3$ 30%
 4. $\frac{86}{100}$ $0,86$ 86%
 5. $\frac{5}{10}$ $0,5$ 50%
 6. $\frac{1}{10}$ $0,1$ 10%
 7. $\frac{52}{100}$ $0,52$ 52%
 8. $\frac{65}{100}$ $0,65$ 65%
 9. $\frac{67}{100}$ $0,67$ 67%
 10. $\frac{6}{10}$ $0,6$ 60%
 11. $\frac{7}{10}$ $0,7$ 70%