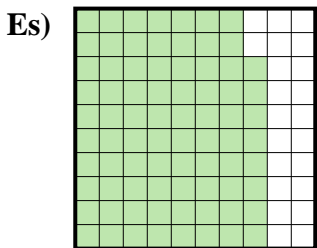
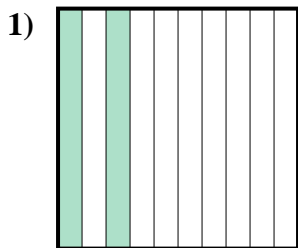




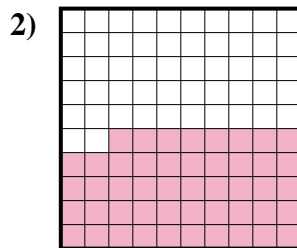
Determina il valore sotto forma di frazione, decimale e percentuale.



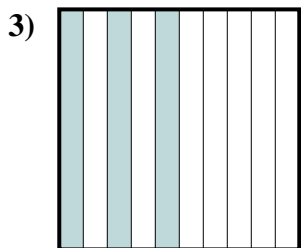
Frazione $\frac{78}{100}$
 Decimale 0,78
 Percentuale 78%



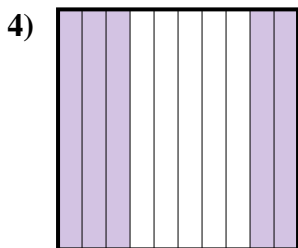
Frazione _____
 Decimale _____
 Percentuale _____



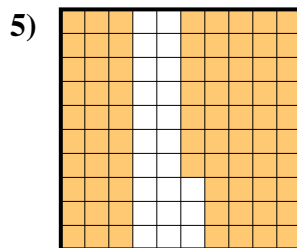
Frazione _____
 Decimale _____
 Percentuale _____



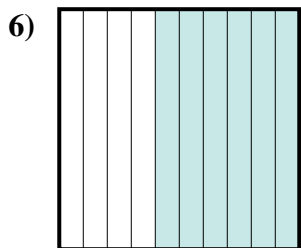
Frazione _____
 Decimale _____
 Percentuale _____



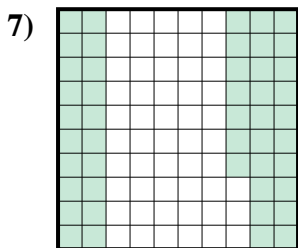
Frazione _____
 Decimale _____
 Percentuale _____



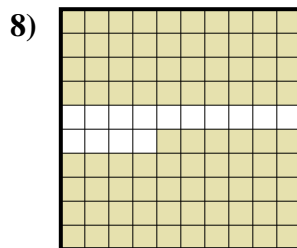
Frazione _____
 Decimale _____
 Percentuale _____




Frazione _____
 Decimale _____
 Percentuale _____




Frazione _____
 Decimale _____
 Percentuale _____



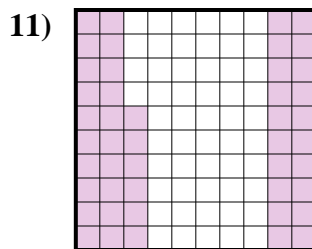
Frazione _____
 Decimale _____
 Percentuale _____



Frazione _____
 Decimale _____
 Percentuale _____



Frazione _____
 Decimale _____
 Percentuale _____



Frazione _____
 Decimale _____
 Percentuale _____

Risposte

Es. $\frac{78}{100}$ 0,78 78%

1. _____

2. _____

3. _____

4. _____

5. _____

6. _____

7. _____

8. _____

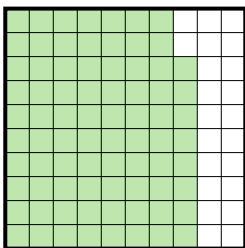
9. _____

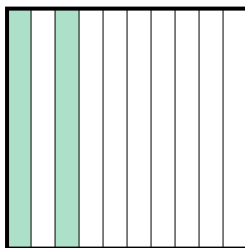
10. _____

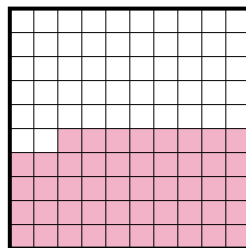
11. _____




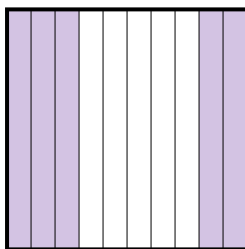
Determina il valore sotto forma di frazione, decimale e percentuale.

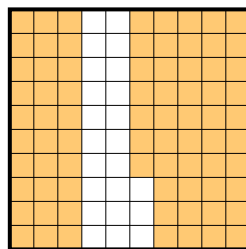
Es) 
 Frazione $\frac{78}{100}$
 Decimale $0,78$
 Percentuale 78%

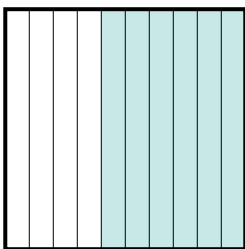
1) 
 Frazione $\frac{2}{10}$
 Decimale $0,2$
 Percentuale 20%

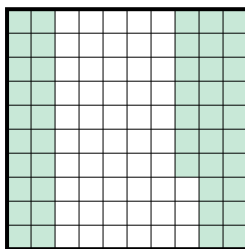
2) 
 Frazione $\frac{48}{100}$
 Decimale $0,48$
 Percentuale 48%

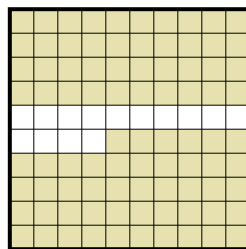
3) 
 Frazione $\frac{3}{10}$
 Decimale $0,3$
 Percentuale 30%


4) 
 Frazione $\frac{5}{10}$
 Decimale $0,5$
 Percentuale 50%


5) 
 Frazione $\frac{77}{100}$
 Decimale $0,77$
 Percentuale 77%

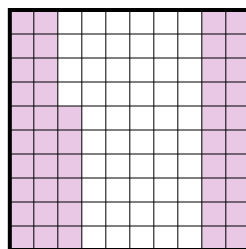
6) 
 Frazione $\frac{6}{10}$
 Decimale $0,6$
 Percentuale 60%

7) 
 Frazione $\frac{47}{100}$
 Decimale $0,47$
 Percentuale 47%

8) 
 Frazione $\frac{86}{100}$
 Decimale $0,86$
 Percentuale 86%

9) 
 Frazione $\frac{8}{10}$
 Decimale $0,8$
 Percentuale 80%

10) 
 Frazione $\frac{7}{10}$
 Decimale $0,7$
 Percentuale 70%

11) 
 Frazione $\frac{46}{100}$
 Decimale $0,46$
 Percentuale 46%

Risposte

Es. $\frac{78}{100}$ $0,78$ 78%

1. $\frac{2}{10}$ $0,2$ 20%

2. $\frac{48}{100}$ $0,48$ 48%

3. $\frac{3}{10}$ $0,3$ 30%

4. $\frac{5}{10}$ $0,5$ 50%

5. $\frac{77}{100}$ $0,77$ 77%

6. $\frac{6}{10}$ $0,6$ 60%

7. $\frac{47}{100}$ $0,47$ 47%

8. $\frac{86}{100}$ $0,86$ 86%

9. $\frac{8}{10}$ $0,8$ 80%

10. $\frac{7}{10}$ $0,7$ 70%

11. $\frac{46}{100}$ $0,46$ 46%