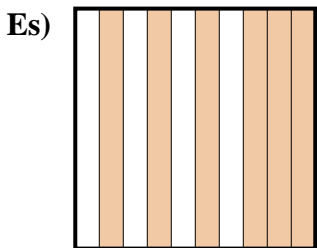
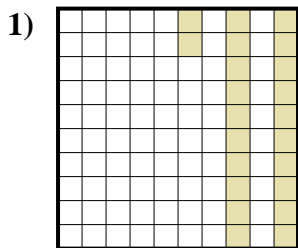




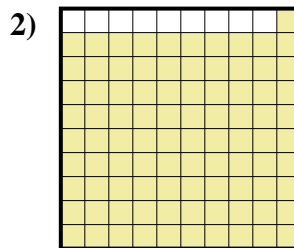
Determina il valore sotto forma di frazione, decimale e percentuale.



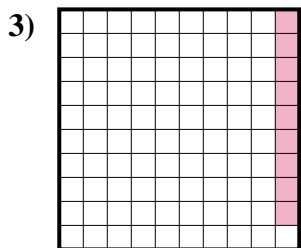
Frazione  $\frac{6}{10}$   
 Decimale 0,6  
 Percentuale 60%



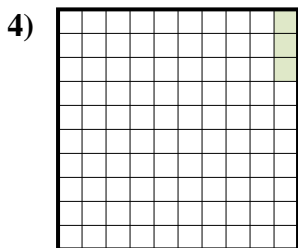
Frazione \_\_\_\_\_  
 Decimale \_\_\_\_\_  
 Percentuale \_\_\_\_\_



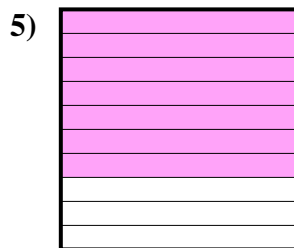
Frazione \_\_\_\_\_  
 Decimale \_\_\_\_\_  
 Percentuale \_\_\_\_\_




Frazione \_\_\_\_\_  
 Decimale \_\_\_\_\_  
 Percentuale \_\_\_\_\_




Frazione \_\_\_\_\_  
 Decimale \_\_\_\_\_  
 Percentuale \_\_\_\_\_




Frazione \_\_\_\_\_  
 Decimale \_\_\_\_\_  
 Percentuale \_\_\_\_\_



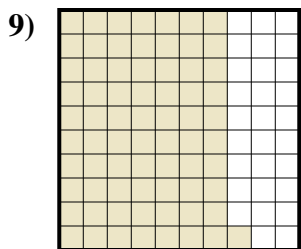
Frazione \_\_\_\_\_  
 Decimale \_\_\_\_\_  
 Percentuale \_\_\_\_\_



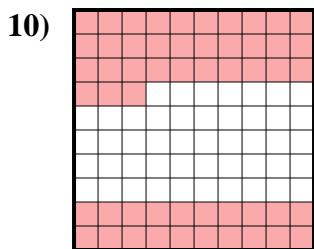
Frazione \_\_\_\_\_  
 Decimale \_\_\_\_\_  
 Percentuale \_\_\_\_\_



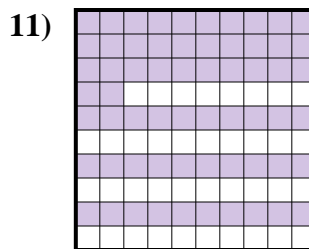
Frazione \_\_\_\_\_  
 Decimale \_\_\_\_\_  
 Percentuale \_\_\_\_\_



Frazione \_\_\_\_\_  
 Decimale \_\_\_\_\_  
 Percentuale \_\_\_\_\_



Frazione \_\_\_\_\_  
 Decimale \_\_\_\_\_  
 Percentuale \_\_\_\_\_



Frazione \_\_\_\_\_  
 Decimale \_\_\_\_\_  
 Percentuale \_\_\_\_\_

**Risposte**

Es.  $\frac{6}{10}$  0,6 60%

1. \_\_\_\_\_

2. \_\_\_\_\_

3. \_\_\_\_\_

4. \_\_\_\_\_

5. \_\_\_\_\_

6. \_\_\_\_\_

7. \_\_\_\_\_

8. \_\_\_\_\_

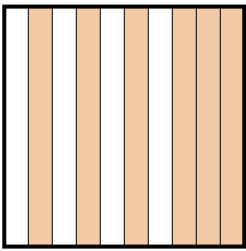
9. \_\_\_\_\_

10. \_\_\_\_\_

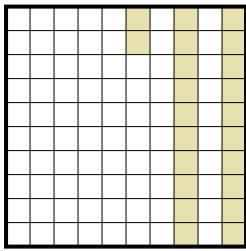
11. \_\_\_\_\_



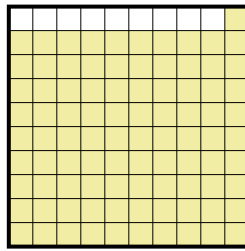
Determina il valore sotto forma di frazione, decimale e percentuale.

Es) 

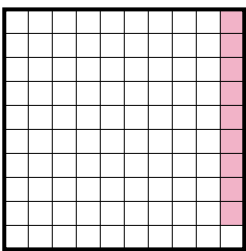
Frazione  $\frac{6}{10}$   
 Decimale  $0,6$   
 Percentuale  $60\%$

1) 

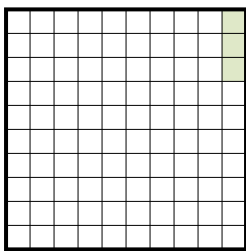
Frazione  $\frac{22}{100}$   
 Decimale  $0,22$   
 Percentuale  $22\%$

2) 


Frazione  $\frac{91}{100}$   
 Decimale  $0,91$   
 Percentuale  $91\%$

3) 


Frazione  $\frac{9}{100}$   
 Decimale  $0,09$   
 Percentuale  $9\%$

4) 


Frazione  $\frac{3}{100}$   
 Decimale  $0,03$   
 Percentuale  $3\%$

5) 


Frazione  $\frac{7}{10}$   
 Decimale  $0,7$   
 Percentuale  $70\%$

6) 

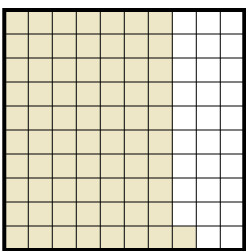
Frazione  $\frac{8}{10}$   
 Decimale  $0,8$   
 Percentuale  $80\%$

7) 

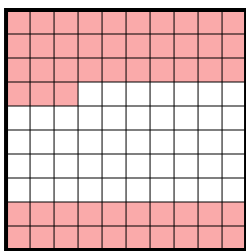
Frazione  $\frac{4}{10}$   
 Decimale  $0,4$   
 Percentuale  $40\%$

8) 

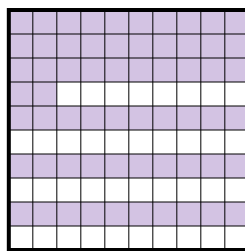
Frazione  $\frac{1}{10}$   
 Decimale  $0,1$   
 Percentuale  $10\%$

9) 

Frazione  $\frac{71}{100}$   
 Decimale  $0,71$   
 Percentuale  $71\%$

10) 

Frazione  $\frac{53}{100}$   
 Decimale  $0,53$   
 Percentuale  $53\%$

11) 

Frazione  $\frac{62}{100}$   
 Decimale  $0,62$   
 Percentuale  $62\%$

**Risposte**

- Es.  $\frac{6}{10}$   $0,6$   $60\%$   
 1.  $\frac{22}{100}$   $0,22$   $22\%$   
 2.  $\frac{91}{100}$   $0,91$   $91\%$   
 3.  $\frac{9}{100}$   $0,09$   $9\%$   
 4.  $\frac{3}{100}$   $0,03$   $3\%$   
 5.  $\frac{7}{10}$   $0,7$   $70\%$   
 6.  $\frac{8}{10}$   $0,8$   $80\%$   
 7.  $\frac{4}{10}$   $0,4$   $40\%$   
 8.  $\frac{1}{10}$   $0,1$   $10\%$   
 9.  $\frac{71}{100}$   $0,71$   $71\%$   
 10.  $\frac{53}{100}$   $0,53$   $53\%$   
 11.  $\frac{62}{100}$   $0,62$   $62\%$