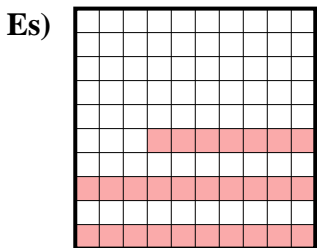
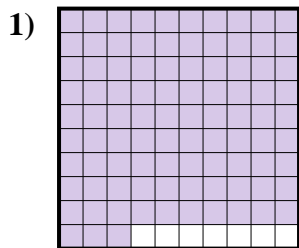




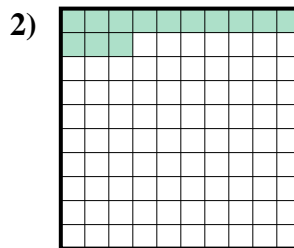
Determina il valore sotto forma di frazione, decimale e percentuale.



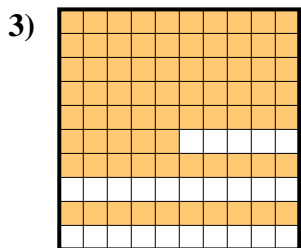
Frazione $\frac{27}{100}$
 Decimale 0,27
 Percentuale 27%



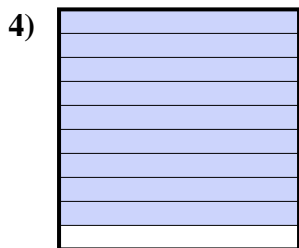
Frazione _____
 Decimale _____
 Percentuale _____




Frazione _____
 Decimale _____
 Percentuale _____



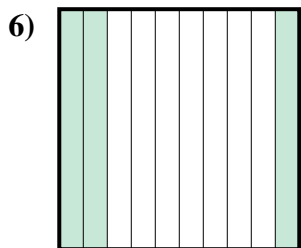
Frazione _____
 Decimale _____
 Percentuale _____



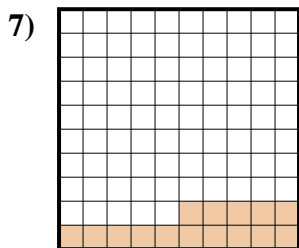
Frazione _____
 Decimale _____
 Percentuale _____




Frazione _____
 Decimale _____
 Percentuale _____



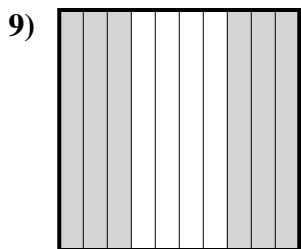
Frazione _____
 Decimale _____
 Percentuale _____




Frazione _____
 Decimale _____
 Percentuale _____



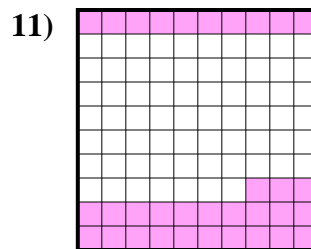
Frazione _____
 Decimale _____
 Percentuale _____



Frazione _____
 Decimale _____
 Percentuale _____



Frazione _____
 Decimale _____
 Percentuale _____



Frazione _____
 Decimale _____
 Percentuale _____

Risposte

Es. $\frac{27}{100}$ 0,27 27%

1. _____

2. _____

3. _____

4. _____

5. _____

6. _____

7. _____

8. _____

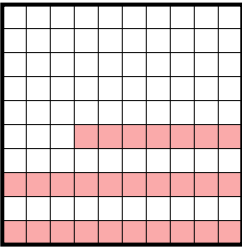
9. _____

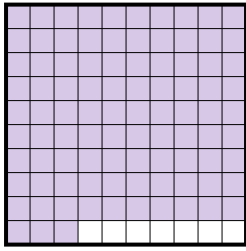
10. _____

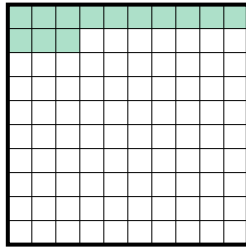
11. _____

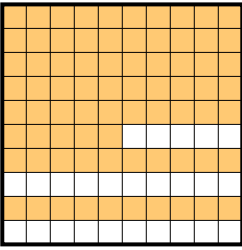



Determina il valore sotto forma di frazione, decimale e percentuale.


Es) 
 Frazione $\frac{27}{100}$
 Decimale $0,27$
 Percentuale 27%

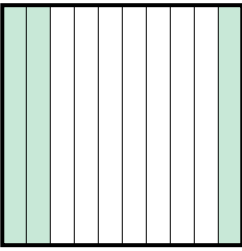
1) 
 Frazione $\frac{93}{100}$
 Decimale $0,93$
 Percentuale 93%

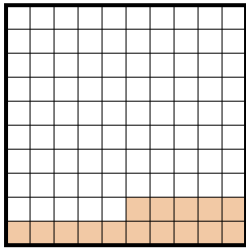
2) 
 Frazione $\frac{13}{100}$
 Decimale $0,13$
 Percentuale 13%


3) 
 Frazione $\frac{75}{100}$
 Decimale $0,75$
 Percentuale 75%

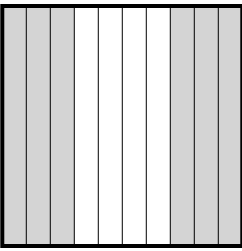
4) 
 Frazione $\frac{9}{10}$
 Decimale $0,9$
 Percentuale 90%


5) 
 Frazione $\frac{4}{10}$
 Decimale $0,4$
 Percentuale 40%

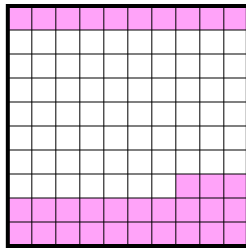
6) 
 Frazione $\frac{3}{10}$
 Decimale $0,3$
 Percentuale 30%

7) 
 Frazione $\frac{15}{100}$
 Decimale $0,15$
 Percentuale 15%

8) 
 Frazione $\frac{2}{10}$
 Decimale $0,2$
 Percentuale 20%

9) 
 Frazione $\frac{6}{10}$
 Decimale $0,6$
 Percentuale 60%

10) 
 Frazione $\frac{8}{10}$
 Decimale $0,8$
 Percentuale 80%

11) 
 Frazione $\frac{33}{100}$
 Decimale $0,33$
 Percentuale 33%

Risposte

- Es. $\frac{27}{100}$ **0,27** **27%**
 1. $\frac{93}{100}$ **0,93** **93%**
 2. $\frac{13}{100}$ **0,13** **13%**
 3. $\frac{75}{100}$ **0,75** **75%**
 4. $\frac{9}{10}$ **0,9** **90%**
 5. $\frac{4}{10}$ **0,4** **40%**
 6. $\frac{3}{10}$ **0,3** **30%**
 7. $\frac{15}{100}$ **0,15** **15%**
 8. $\frac{2}{10}$ **0,2** **20%**
 9. $\frac{6}{10}$ **0,6** **60%**
 10. $\frac{8}{10}$ **0,8** **80%**
 11. $\frac{33}{100}$ **0,33** **33%**