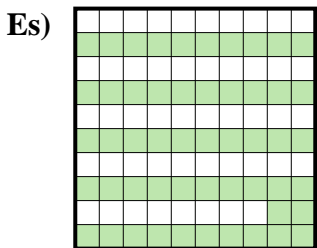





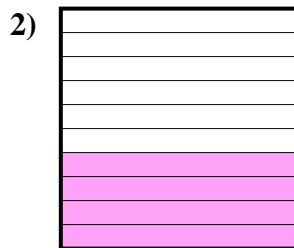
Determina il valore sotto forma di frazione, decimale e percentuale.



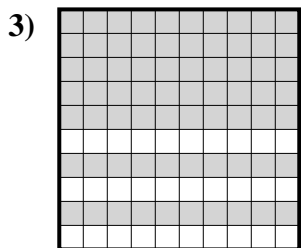
Frazione $\frac{52}{100}$
 Decimale 0,52
 Percentuale 52%



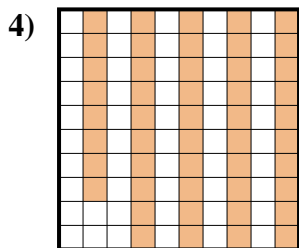
Frazione _____
 Decimale _____
 Percentuale _____



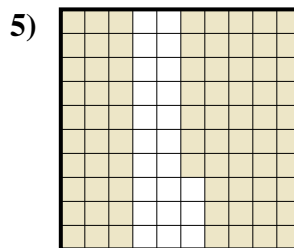
Frazione _____
 Decimale _____
 Percentuale _____



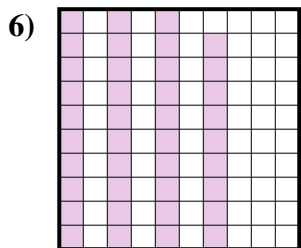
Frazione _____
 Decimale _____
 Percentuale _____




Frazione _____
 Decimale _____
 Percentuale _____



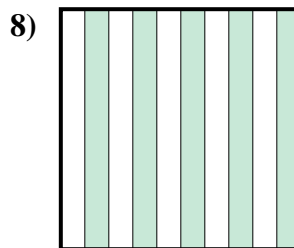
Frazione _____
 Decimale _____
 Percentuale _____




Frazione _____
 Decimale _____
 Percentuale _____



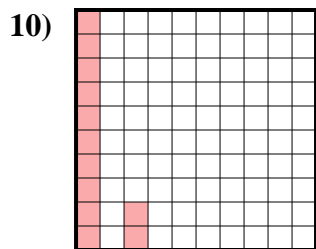
Frazione _____
 Decimale _____
 Percentuale _____



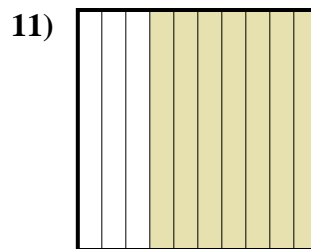
Frazione _____
 Decimale _____
 Percentuale _____



Frazione _____
 Decimale _____
 Percentuale _____



Frazione _____
 Decimale _____
 Percentuale _____



Frazione _____
 Decimale _____
 Percentuale _____

Risposte

Es. $\frac{52}{100}$ 0,52 52%

1. _____

2. _____

3. _____

4. _____

5. _____

6. _____

7. _____

8. _____

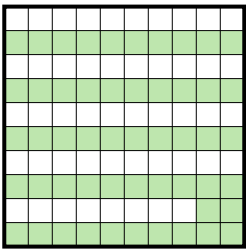
9. _____


10. _____


11. _____




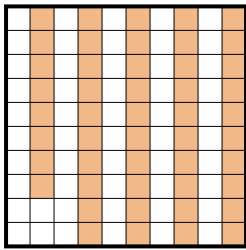
Determina il valore sotto forma di frazione, decimale e percentuale.

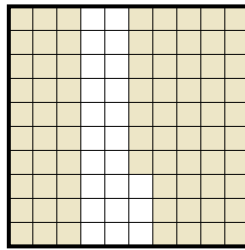
Es) 
 Frazione $\frac{52}{100}$
 Decimale $0,52$
 Percentuale 52%

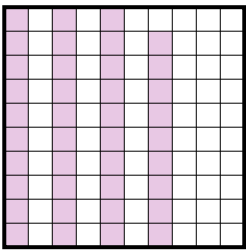
1) 
 Frazione $\frac{6}{10}$
 Decimale $0,6$
 Percentuale 60%

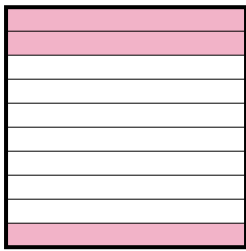
2) 
 Frazione $\frac{4}{10}$
 Decimale $0,4$
 Percentuale 40%

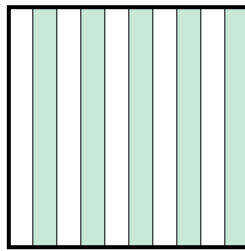
3) 
 Frazione $\frac{70}{100}$
 Decimale $0,70$
 Percentuale 70%


4) 
 Frazione $\frac{48}{100}$
 Decimale $0,48$
 Percentuale 48%

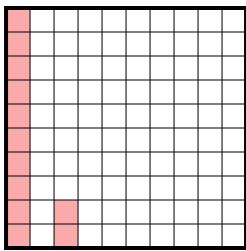
5) 
 Frazione $\frac{77}{100}$
 Decimale $0,77$
 Percentuale 77%

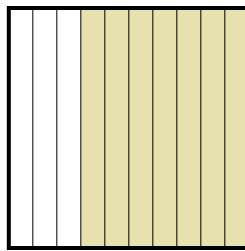
6) 
 Frazione $\frac{39}{100}$
 Decimale $0,39$
 Percentuale 39%

7) 
 Frazione $\frac{3}{10}$
 Decimale $0,3$
 Percentuale 30%

8) 
 Frazione $\frac{5}{10}$
 Decimale $0,5$
 Percentuale 50%

9) 
 Frazione $\frac{1}{10}$
 Decimale $0,1$
 Percentuale 10%

10) 
 Frazione $\frac{12}{100}$
 Decimale $0,12$
 Percentuale 12%

11) 
 Frazione $\frac{7}{10}$
 Decimale $0,7$
 Percentuale 70%

Risposte

- Es. $\frac{52}{100}$ **0,52** **52%**
 1. $\frac{6}{10}$ **0,6** **60%**
 2. $\frac{4}{10}$ **0,4** **40%**
 3. $\frac{70}{100}$ **0,70** **70%**
 4. $\frac{48}{100}$ **0,48** **48%**
 5. $\frac{77}{100}$ **0,77** **77%**
 6. $\frac{39}{100}$ **0,39** **39%**
 7. $\frac{3}{10}$ **0,3** **30%**
 8. $\frac{5}{10}$ **0,5** **50%**
 9. $\frac{1}{10}$ **0,1** **10%**
 10. $\frac{12}{100}$ **0,12** **12%**
 11. $\frac{7}{10}$ **0,7** **70%**