



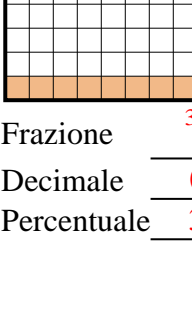


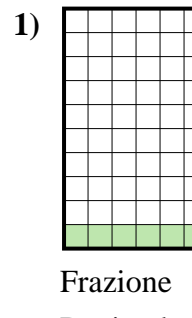



Determina il valore sotto forma di frazione, decimale e percentuale.

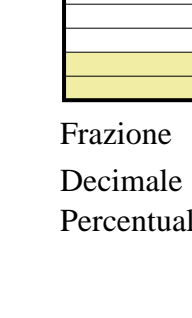
Es)   
 Frazione  $\frac{2}{10}$   
 Decimale  $0,2$   
 Percentuale  $20\%$

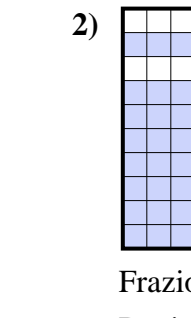
1)   
 Frazione  $\frac{12}{100}$   
 Decimale  $0,12$   
 Percentuale  $12\%$


2)   
 Frazione  $\frac{83}{100}$   
 Decimale  $0,83$   
 Percentuale  $83\%$


3)   
 Frazione  $\frac{8}{10}$   
 Decimale  $0,8$   
 Percentuale  $80\%$

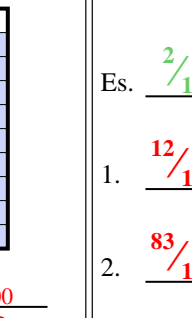
4)   
 Frazione  $\frac{89}{100}$   
 Decimale  $0,89$   
 Percentuale  $89\%$

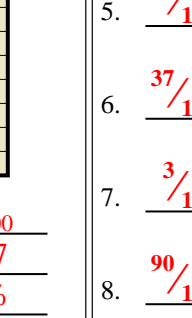
5)   
 Frazione  $\frac{87}{100}$   
 Decimale  $0,87$   
 Percentuale  $87\%$

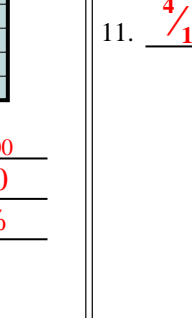
6)   
 Frazione  $\frac{37}{100}$   
 Decimale  $0,37$   
 Percentuale  $37\%$

7)   
 Frazione  $\frac{3}{10}$   
 Decimale  $0,3$   
 Percentuale  $30\%$

8)   
 Frazione  $\frac{90}{100}$   
 Decimale  $0,90$   
 Percentuale  $90\%$

9)   
 Frazione  $\frac{7}{10}$   
 Decimale  $0,7$   
 Percentuale  $70\%$

10)   
 Frazione  $\frac{9}{10}$   
 Decimale  $0,9$   
 Percentuale  $90\%$

11)   
 Frazione  $\frac{4}{10}$   
 Decimale  $0,4$   
 Percentuale  $40\%$

**Risposte**

Es.  $\frac{2}{10}$   $0,2$   $20\%$

1.  $\frac{12}{100}$   $0,12$   $12\%$

2.  $\frac{83}{100}$   $0,83$   $83\%$

3.  $\frac{8}{10}$   $0,8$   $80\%$

4.  $\frac{89}{100}$   $0,89$   $89\%$

5.  $\frac{87}{100}$   $0,87$   $87\%$

6.  $\frac{37}{100}$   $0,37$   $37\%$

7.  $\frac{3}{10}$   $0,3$   $30\%$

8.  $\frac{90}{100}$   $0,90$   $90\%$

9.  $\frac{7}{10}$   $0,7$   $70\%$

10.  $\frac{9}{10}$   $0,9$   $90\%$

11.  $\frac{4}{10}$   $0,4$   $40\%$