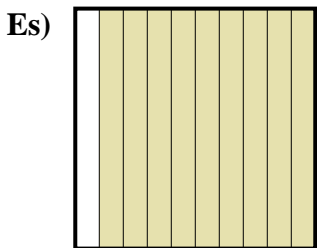





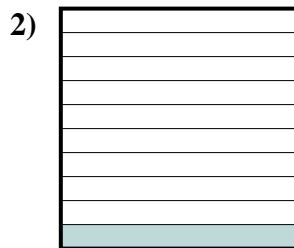
Determina il valore sotto forma di frazione, decimale e percentuale.



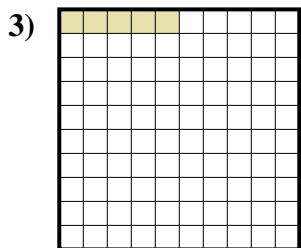
Frazione  $\frac{9}{10}$   
 Decimale 0,9  
 Percentuale 90%



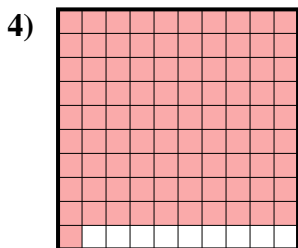
Frazione \_\_\_\_\_  
 Decimale \_\_\_\_\_  
 Percentuale \_\_\_\_\_




Frazione \_\_\_\_\_  
 Decimale \_\_\_\_\_  
 Percentuale \_\_\_\_\_



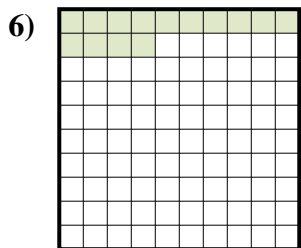
Frazione \_\_\_\_\_  
 Decimale \_\_\_\_\_  
 Percentuale \_\_\_\_\_



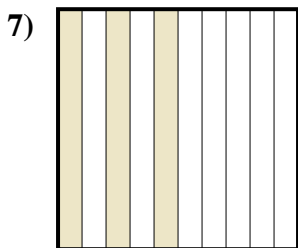
Frazione \_\_\_\_\_  
 Decimale \_\_\_\_\_  
 Percentuale \_\_\_\_\_



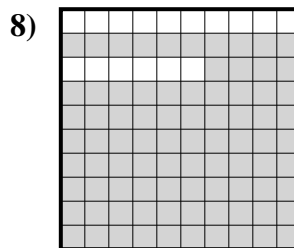
Frazione \_\_\_\_\_  
 Decimale \_\_\_\_\_  
 Percentuale \_\_\_\_\_



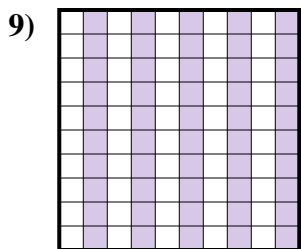
Frazione \_\_\_\_\_  
 Decimale \_\_\_\_\_  
 Percentuale \_\_\_\_\_



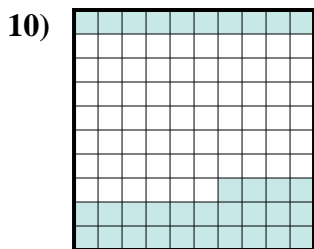
Frazione \_\_\_\_\_  
 Decimale \_\_\_\_\_  
 Percentuale \_\_\_\_\_



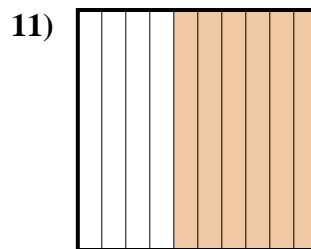
Frazione \_\_\_\_\_  
 Decimale \_\_\_\_\_  
 Percentuale \_\_\_\_\_



Frazione \_\_\_\_\_  
 Decimale \_\_\_\_\_  
 Percentuale \_\_\_\_\_



Frazione \_\_\_\_\_  
 Decimale \_\_\_\_\_  
 Percentuale \_\_\_\_\_



Frazione \_\_\_\_\_  
 Decimale \_\_\_\_\_  
 Percentuale \_\_\_\_\_

**Risposte**

Es.  $\frac{9}{10}$  0,9 90%

1. \_\_\_\_\_

2. \_\_\_\_\_

3. \_\_\_\_\_

4. \_\_\_\_\_

5. \_\_\_\_\_

6. \_\_\_\_\_

7. \_\_\_\_\_

8. \_\_\_\_\_


9. \_\_\_\_\_


10. \_\_\_\_\_


11. \_\_\_\_\_

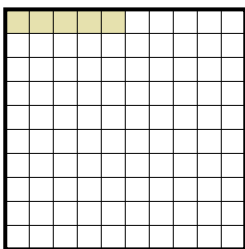


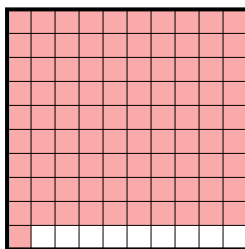
Determina il valore sotto forma di frazione, decimale e percentuale.


Es)   
 Frazione  $\frac{9}{10}$   
 Decimale  $0,9$   
 Percentuale  $90\%$

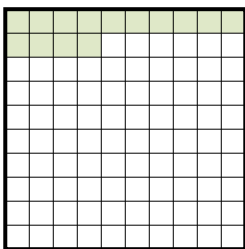
1)   
 Frazione  $\frac{7}{10}$   
 Decimale  $0,7$   
 Percentuale  $70\%$

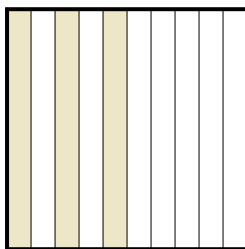
2)   
 Frazione  $\frac{1}{10}$   
 Decimale  $0,1$   
 Percentuale  $10\%$

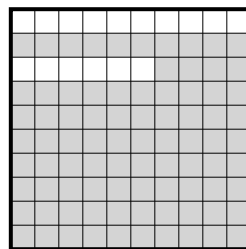
3)   
 Frazione  $\frac{5}{100}$   
 Decimale  $0,05$   
 Percentuale  $5\%$

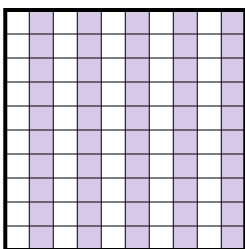
4)   
 Frazione  $\frac{91}{100}$   
 Decimale  $0,91$   
 Percentuale  $91\%$

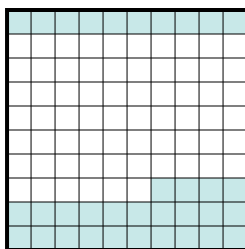
5)   
 Frazione  $\frac{8}{10}$   
 Decimale  $0,8$   
 Percentuale  $80\%$

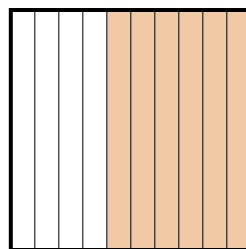
6)   
 Frazione  $\frac{14}{100}$   
 Decimale  $0,14$   
 Percentuale  $14\%$

7)   
 Frazione  $\frac{3}{10}$   
 Decimale  $0,3$   
 Percentuale  $30\%$

8)   
 Frazione  $\frac{84}{100}$   
 Decimale  $0,84$   
 Percentuale  $84\%$

9)   
 Frazione  $\frac{50}{100}$   
 Decimale  $0,50$   
 Percentuale  $50\%$

10)   
 Frazione  $\frac{34}{100}$   
 Decimale  $0,34$   
 Percentuale  $34\%$

11)   
 Frazione  $\frac{6}{10}$   
 Decimale  $0,6$   
 Percentuale  $60\%$

**Risposte**

Es.  $\frac{9}{10}$  **0,9** **90%**

1.  $\frac{7}{10}$  **0,7** **70%**

2.  $\frac{1}{10}$  **0,1** **10%**

3.  $\frac{5}{100}$  **0,05** **5%**

4.  $\frac{91}{100}$  **0,91** **91%**

5.  $\frac{8}{10}$  **0,8** **80%**

6.  $\frac{14}{100}$  **0,14** **14%**

7.  $\frac{3}{10}$  **0,3** **30%**

8.  $\frac{84}{100}$  **0,84** **84%**

9.  $\frac{50}{100}$  **0,50** **50%**

10.  $\frac{34}{100}$  **0,34** **34%**

11.  $\frac{6}{10}$  **0,6** **60%**