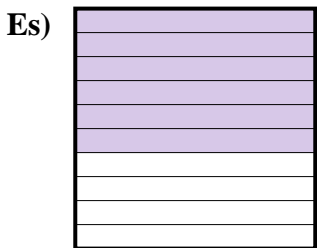
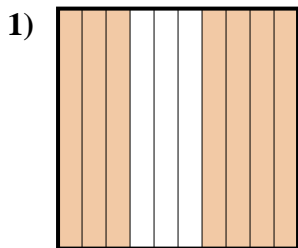




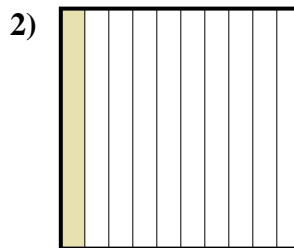
Determina il valore sotto forma di frazione, decimale e percentuale.



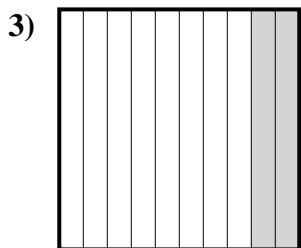
Frazione $\frac{6}{10}$
 Decimale 0,6
 Percentuale 60%



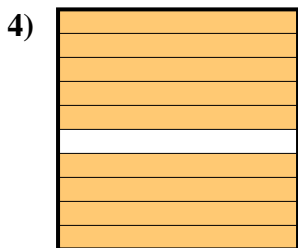
Frazione _____
 Decimale _____
 Percentuale _____



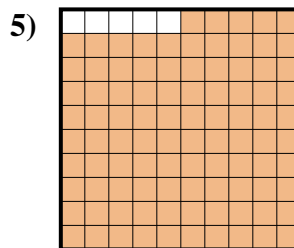
Frazione _____
 Decimale _____
 Percentuale _____



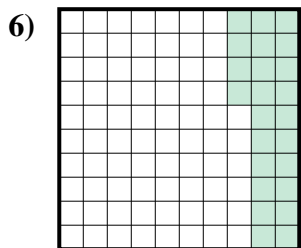
Frazione _____
 Decimale _____
 Percentuale _____



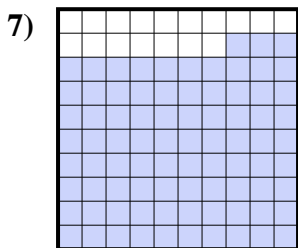
Frazione _____
 Decimale _____
 Percentuale _____



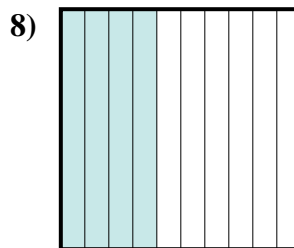
Frazione _____
 Decimale _____
 Percentuale _____



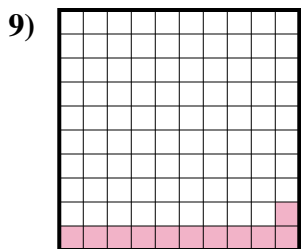
Frazione _____
 Decimale _____
 Percentuale _____



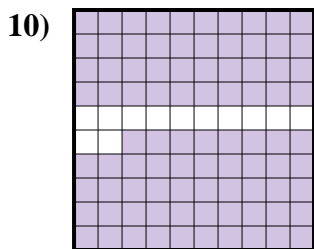
Frazione _____
 Decimale _____
 Percentuale _____



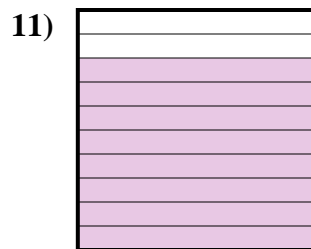
Frazione _____
 Decimale _____
 Percentuale _____



Frazione _____
 Decimale _____
 Percentuale _____



Frazione _____
 Decimale _____
 Percentuale _____



Frazione _____
 Decimale _____
 Percentuale _____

Risposte

Es. $\frac{6}{10}$ 0,6 60%

1. _____

2. _____

3. _____

4. _____

5. _____

6. _____

7. _____

8. _____


9. _____

10. _____

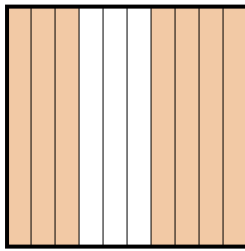
11. _____



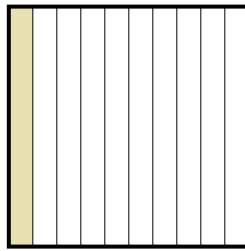
Determina il valore sotto forma di frazione, decimale e percentuale.

Es) 

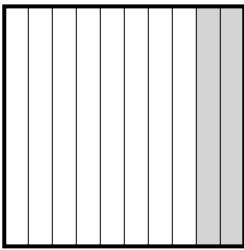
Frazione $\frac{6}{10}$
 Decimale $0,6$
 Percentuale 60%

1) 


Frazione $\frac{7}{10}$
 Decimale $0,7$
 Percentuale 70%

2) 

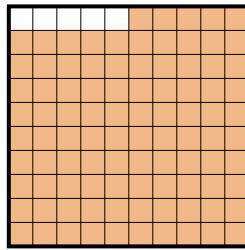
Frazione $\frac{1}{10}$
 Decimale $0,1$
 Percentuale 10%

3) 

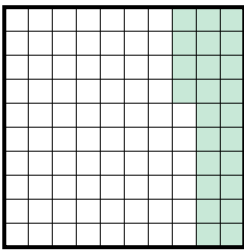
Frazione $\frac{2}{10}$
 Decimale $0,2$
 Percentuale 20%

4) 

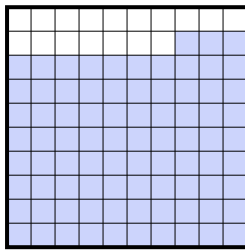
Frazione $\frac{9}{10}$
 Decimale $0,9$
 Percentuale 90%

5) 

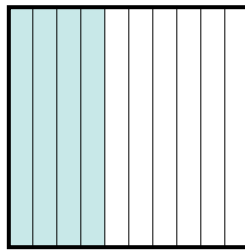
Frazione $\frac{95}{100}$
 Decimale $0,95$
 Percentuale 95%

6) 

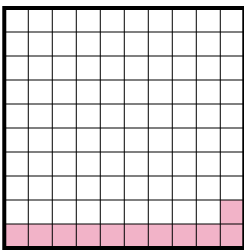
Frazione $\frac{24}{100}$
 Decimale $0,24$
 Percentuale 24%

7) 

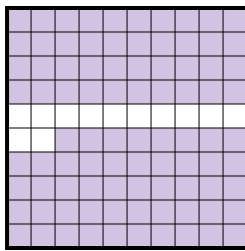
Frazione $\frac{83}{100}$
 Decimale $0,83$
 Percentuale 83%

8) 


Frazione $\frac{4}{10}$
 Decimale $0,4$
 Percentuale 40%

9) 

Frazione $\frac{11}{100}$
 Decimale $0,11$
 Percentuale 11%

10) 

Frazione $\frac{88}{100}$
 Decimale $0,88$
 Percentuale 88%

11) 

Frazione $\frac{8}{10}$
 Decimale $0,8$
 Percentuale 80%

Risposte

- Es. $\frac{6}{10}$ $0,6$ 60%
 1. $\frac{7}{10}$ $0,7$ 70%
 2. $\frac{1}{10}$ $0,1$ 10%
 3. $\frac{2}{10}$ $0,2$ 20%
 4. $\frac{9}{10}$ $0,9$ 90%
 5. $\frac{95}{100}$ $0,95$ 95%
 6. $\frac{24}{100}$ $0,24$ 24%
 7. $\frac{83}{100}$ $0,83$ 83%
 8. $\frac{4}{10}$ $0,4$ 40%
 9. $\frac{11}{100}$ $0,11$ 11%
 10. $\frac{88}{100}$ $0,88$ 88%
 11. $\frac{8}{10}$ $0,8$ 80%