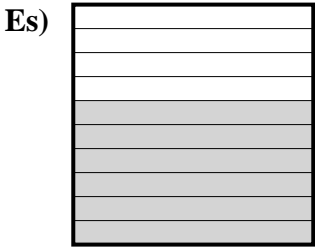
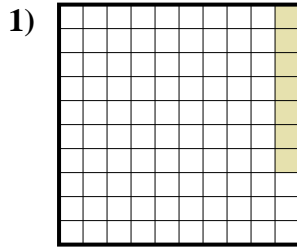




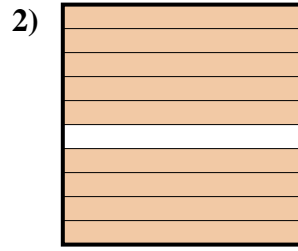
Determina il valore sotto forma di frazione, decimale e percentuale.



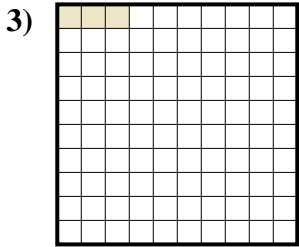
Frazione $\frac{6}{10}$
 Decimale 0,6
 Percentuale 60%



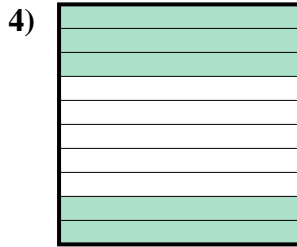
Frazione _____
 Decimale _____
 Percentuale _____



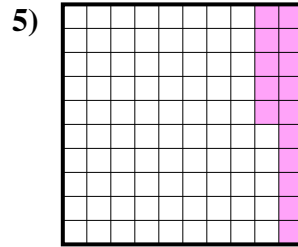
Frazione _____
 Decimale _____
 Percentuale _____



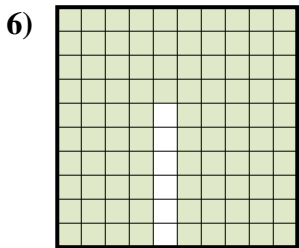
Frazione _____
 Decimale _____
 Percentuale _____



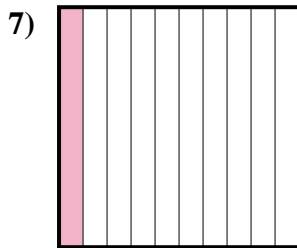
Frazione _____
 Decimale _____
 Percentuale _____



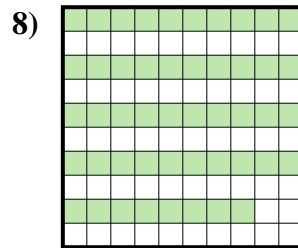
Frazione _____
 Decimale _____
 Percentuale _____




Frazione _____
 Decimale _____
 Percentuale _____



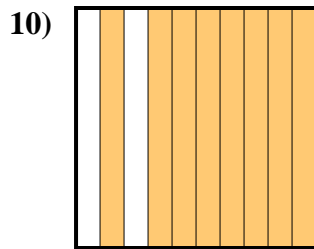
Frazione _____
 Decimale _____
 Percentuale _____



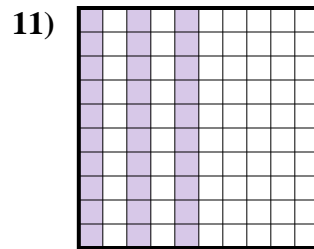
Frazione _____
 Decimale _____
 Percentuale _____



Frazione _____
 Decimale _____
 Percentuale _____



Frazione _____
 Decimale _____
 Percentuale _____



Frazione _____
 Decimale _____
 Percentuale _____


Risposte

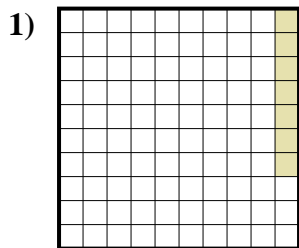
Es. $\frac{6}{10}$ 0,6 60%

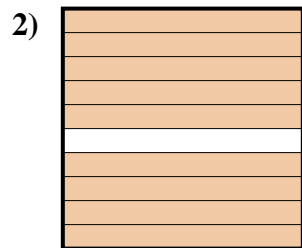
1. _____
2. _____
3. _____
4. _____
5. _____
6. _____
7. _____
8. _____
9. _____
10. _____
11. _____

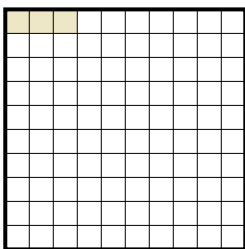



Determina il valore sotto forma di frazione, decimale e percentuale.

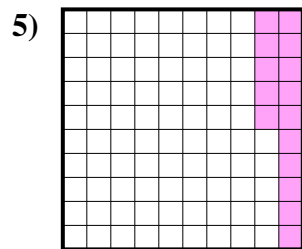
Es) 
 Frazione $\frac{6}{10}$
 Decimale $0,6$
 Percentuale 60%

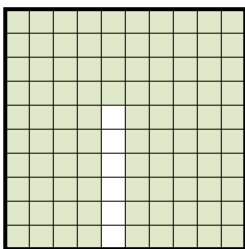
1) 
 Frazione $\frac{7}{100}$
 Decimale $0,07$
 Percentuale 7%

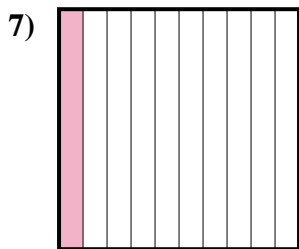
2) 
 Frazione $\frac{9}{10}$
 Decimale $0,9$
 Percentuale 90%

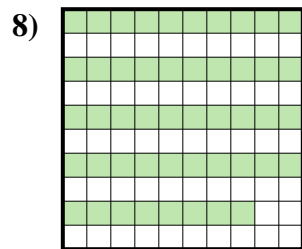
3) 
 Frazione $\frac{3}{100}$
 Decimale $0,03$
 Percentuale 3%


4) 
 Frazione $\frac{5}{10}$
 Decimale $0,5$
 Percentuale 50%

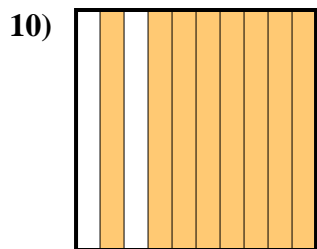
5) 
 Frazione $\frac{15}{100}$
 Decimale $0,15$
 Percentuale 15%

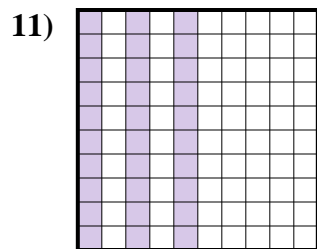
6) 
 Frazione $\frac{94}{100}$
 Decimale $0,94$
 Percentuale 94%

7) 
 Frazione $\frac{1}{10}$
 Decimale $0,1$
 Percentuale 10%

8) 
 Frazione $\frac{48}{100}$
 Decimale $0,48$
 Percentuale 48%

9) 
 Frazione $\frac{4}{10}$
 Decimale $0,4$
 Percentuale 40%

10) 
 Frazione $\frac{8}{10}$
 Decimale $0,8$
 Percentuale 80%

11) 
 Frazione $\frac{30}{100}$
 Decimale $0,30$
 Percentuale 30%

Risposte

Es. $\frac{6}{10}$ $0,6$ 60%

1. $\frac{7}{100}$ $0,07$ 7%

2. $\frac{9}{10}$ $0,9$ 90%

3. $\frac{3}{100}$ $0,03$ 3%

4. $\frac{5}{10}$ $0,5$ 50%

5. $\frac{15}{100}$ $0,15$ 15%

6. $\frac{94}{100}$ $0,94$ 94%

7. $\frac{1}{10}$ $0,1$ 10%

8. $\frac{48}{100}$ $0,48$ 48%

9. $\frac{4}{10}$ $0,4$ 40%

10. $\frac{8}{10}$ $0,8$ 80%

11. $\frac{30}{100}$ $0,30$ 30%