



Determina quale lettera risponde correttamente ad ogni domanda

Risposte

1) Quale delle seguenti figure rappresenta $\frac{6}{10}$?





2) Quale delle seguenti figure rappresenta $\frac{5}{10}$?



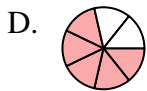
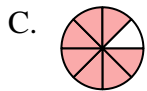
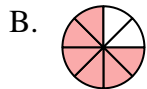
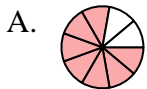
3) Quale delle seguenti figure rappresenta $\frac{5}{7}$?



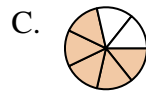
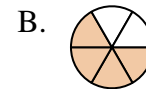
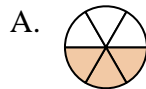
4) Quale delle seguenti figure rappresenta $\frac{2}{7}$?



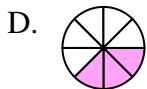
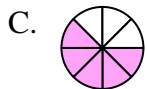
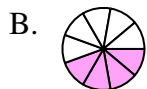
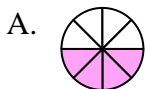
5) Quale delle seguenti figure rappresenta $\frac{6}{8}$?



6) Quale delle seguenti figure rappresenta $\frac{4}{6}$?



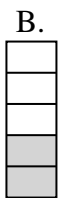
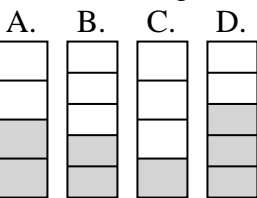
7) Quale delle seguenti figure rappresenta $\frac{4}{8}$?




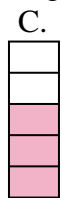
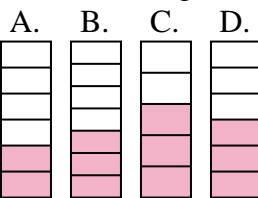
8) Quale delle seguenti figure rappresenta $\frac{4}{10}$?



9) Quale delle seguenti figure rappresenta $\frac{2}{5}$?



10) Quale delle seguenti figure rappresenta $\frac{3}{6}$?



1. _____

2. _____

3. _____

4. _____

5. _____

6. _____

7. _____

8. _____

9. _____

10. _____



Determina quale lettera risponde correttamente ad ogni domanda

1) Quale delle seguenti figure rappresenta $\frac{6}{10}$?




2) Quale delle seguenti figure rappresenta $\frac{5}{10}$?



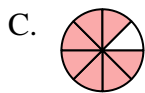
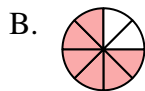
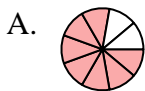
3) Quale delle seguenti figure rappresenta $\frac{5}{7}$?



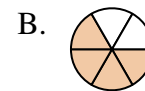
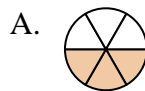
4) Quale delle seguenti figure rappresenta $\frac{2}{7}$?



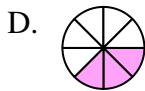
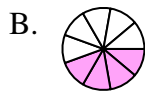
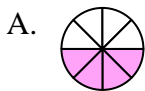
5) Quale delle seguenti figure rappresenta $\frac{6}{8}$?



6) Quale delle seguenti figure rappresenta $\frac{4}{6}$?



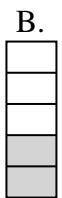
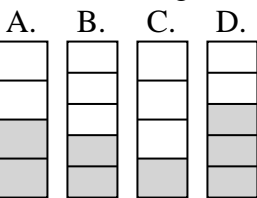
7) Quale delle seguenti figure rappresenta $\frac{4}{8}$?




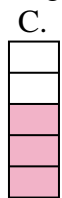
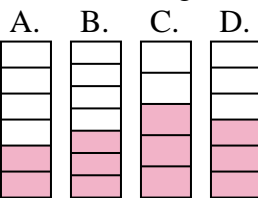
8) Quale delle seguenti figure rappresenta $\frac{4}{10}$?



9) Quale delle seguenti figure rappresenta $\frac{2}{5}$?



10) Quale delle seguenti figure rappresenta $\frac{3}{6}$?



Risposte

1. **D**

2. **A**

3. **A**

4. **A**

5. **B**

6. **B**

7. **A**

8. **B**

9. **B**

10. **D**

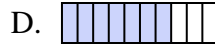
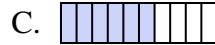
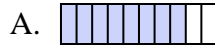


Determina quale lettera risponde correttamente ad ogni domanda





1) Quale delle seguenti figure rappresenta $\frac{5}{10}$?



2) Quale delle seguenti figure rappresenta $\frac{7}{10}$?



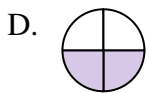
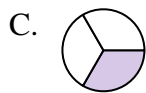
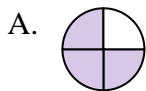
3) Quale delle seguenti figure rappresenta $\frac{3}{5}$?



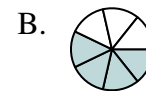
4) Quale delle seguenti figure rappresenta $\frac{8}{10}$?



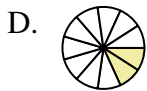
5) Quale delle seguenti figure rappresenta $\frac{2}{4}$?



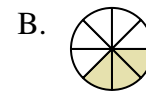
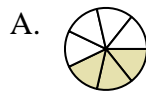
6) Quale delle seguenti figure rappresenta $\frac{4}{8}$?




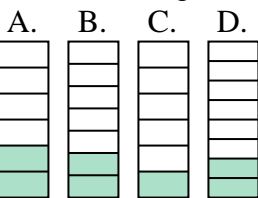
7) Quale delle seguenti figure rappresenta $\frac{2}{10}$?




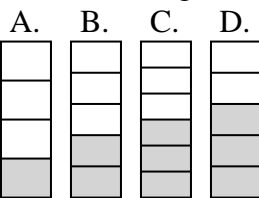
8) Quale delle seguenti figure rappresenta $\frac{3}{7}$?



9) Quale delle seguenti figure rappresenta $\frac{2}{7}$?



10) Quale delle seguenti figure rappresenta $\frac{2}{5}$?



Risposte

1. _____
2. _____
3. _____
4. _____
5. _____
6. _____
7. _____
8. _____
9. _____
10. _____

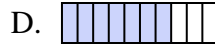
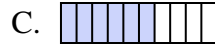
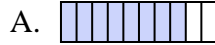


Determina quale lettera risponde correttamente ad ogni domanda





1) Quale delle seguenti figure rappresenta $\frac{5}{10}$?



2) Quale delle seguenti figure rappresenta $\frac{7}{10}$?



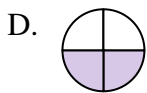
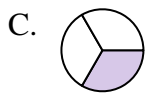
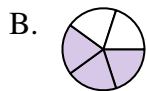
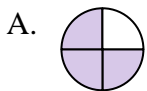
3) Quale delle seguenti figure rappresenta $\frac{3}{5}$?



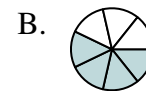
4) Quale delle seguenti figure rappresenta $\frac{8}{10}$?



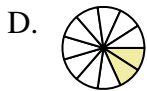
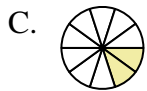
5) Quale delle seguenti figure rappresenta $\frac{2}{4}$?



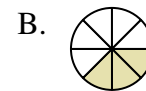
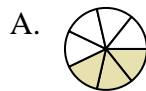
6) Quale delle seguenti figure rappresenta $\frac{4}{8}$?



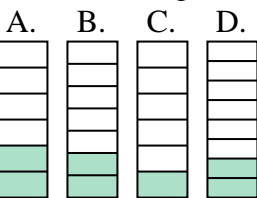
7) Quale delle seguenti figure rappresenta $\frac{2}{10}$?




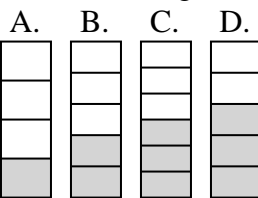
8) Quale delle seguenti figure rappresenta $\frac{3}{7}$?



9) Quale delle seguenti figure rappresenta $\frac{2}{7}$?



10) Quale delle seguenti figure rappresenta $\frac{2}{5}$?



Risposte

1. **C**

2. **D**

3. **B**

4. **C**

5. **D**

6. **D**

7. **C**

8. **A**

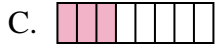

9. **B**

10. **B**





Determina quale lettera risponde correttamente ad ogni domanda

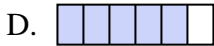
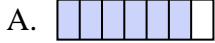
1) Quale delle seguenti figure rappresenta $\frac{3}{8}$?



2) Quale delle seguenti figure rappresenta $\frac{4}{10}$?



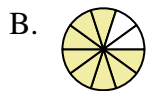
3) Quale delle seguenti figure rappresenta $\frac{5}{7}$?



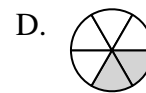
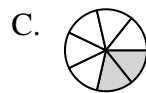
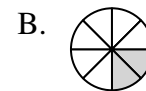
4) Quale delle seguenti figure rappresenta $\frac{6}{8}$?



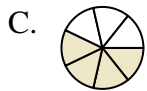
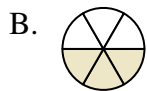
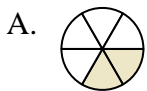
5) Quale delle seguenti figure rappresenta $\frac{8}{10}$?



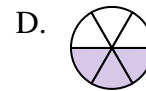
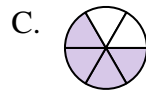
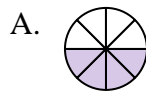
6) Quale delle seguenti figure rappresenta $\frac{2}{7}$?






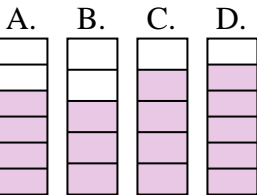
7) Quale delle seguenti figure rappresenta $\frac{3}{6}$?





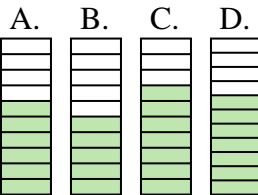
8) Quale delle seguenti figure rappresenta $\frac{4}{7}$?



9) Quale delle seguenti figure rappresenta $\frac{4}{6}$?



10) Quale delle seguenti figure rappresenta $\frac{6}{10}$?



Risposte

1. _____

2. _____

3. _____

4. _____

5. _____

6. _____

7. _____

8. _____

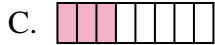
9. _____

10. _____






Determina quale lettera risponde correttamente ad ogni domanda

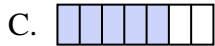
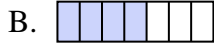
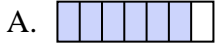
1) Quale delle seguenti figure rappresenta $\frac{3}{8}$?



2) Quale delle seguenti figure rappresenta $\frac{4}{10}$?



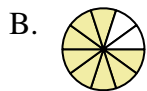
3) Quale delle seguenti figure rappresenta $\frac{5}{7}$?



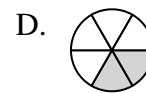
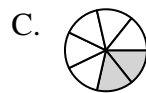
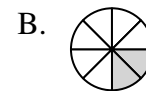
4) Quale delle seguenti figure rappresenta $\frac{6}{8}$?



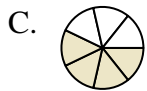
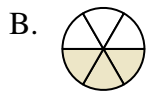
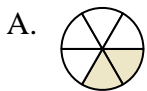
5) Quale delle seguenti figure rappresenta $\frac{8}{10}$?



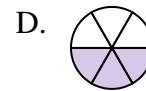
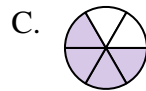
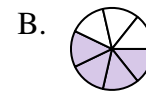
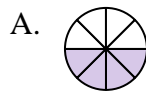
6) Quale delle seguenti figure rappresenta $\frac{2}{7}$?




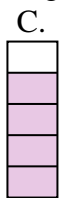

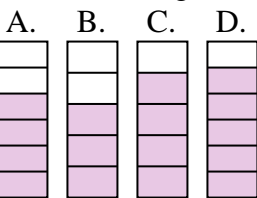
7) Quale delle seguenti figure rappresenta $\frac{3}{6}$?






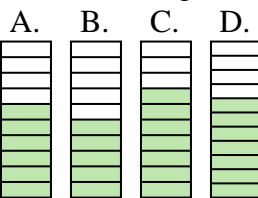
8) Quale delle seguenti figure rappresenta $\frac{4}{7}$?



9) Quale delle seguenti figure rappresenta $\frac{4}{6}$?



10) Quale delle seguenti figure rappresenta $\frac{6}{10}$?



Risposte

1. **C**

2. **D**

3. **C**

4. **C**

5. **B**

6. **C**

7. **B**

8. **B**


9. **A**

10. **A**



Determina quale lettera risponde correttamente ad ogni domanda

1) Quale delle seguenti figure rappresenta $\frac{2}{10}$?




2) Quale delle seguenti figure rappresenta $\frac{6}{10}$?



3) Quale delle seguenti figure rappresenta $\frac{8}{10}$?



4) Quale delle seguenti figure rappresenta $\frac{3}{6}$?



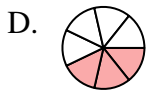
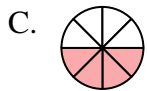
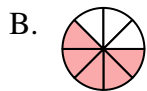
5) Quale delle seguenti figure rappresenta $\frac{3}{8}$?



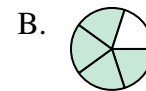
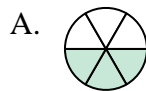
6) Quale delle seguenti figure rappresenta $\frac{3}{10}$?



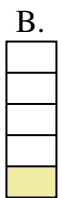
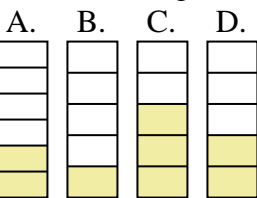
7) Quale delle seguenti figure rappresenta $\frac{4}{7}$?



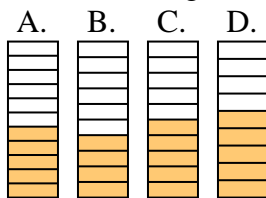
8) Quale delle seguenti figure rappresenta $\frac{3}{5}$?



9) Quale delle seguenti figure rappresenta $\frac{2}{5}$?



10) Quale delle seguenti figure rappresenta $\frac{5}{10}$?



Risposte

1. _____
2. _____
3. _____
4. _____
5. _____
6. _____
7. _____
8. _____
9. _____
10. _____



Determina quale lettera risponde correttamente ad ogni domanda

1) Quale delle seguenti figure rappresenta $\frac{2}{10}$?




2) Quale delle seguenti figure rappresenta $\frac{6}{10}$?



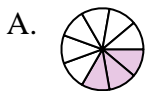
3) Quale delle seguenti figure rappresenta $\frac{8}{10}$?



4) Quale delle seguenti figure rappresenta $\frac{3}{6}$?



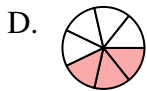
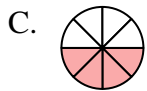
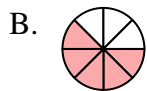
5) Quale delle seguenti figure rappresenta $\frac{3}{8}$?



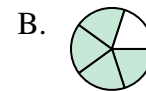
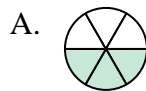
6) Quale delle seguenti figure rappresenta $\frac{3}{10}$?



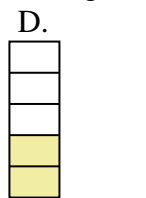
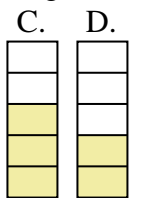
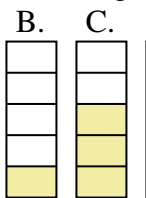
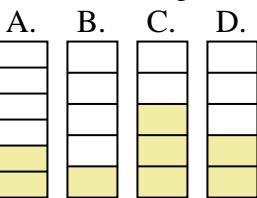
7) Quale delle seguenti figure rappresenta $\frac{4}{7}$?




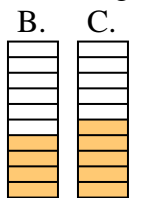
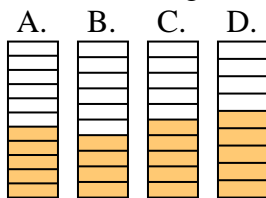
8) Quale delle seguenti figure rappresenta $\frac{3}{5}$?



9) Quale delle seguenti figure rappresenta $\frac{2}{5}$?



10) Quale delle seguenti figure rappresenta $\frac{5}{10}$?



Risposte

1. **D**

2. **D**

3. **C**

4. **C**

5. **C**

6. **A**

7. **A**

8. **C**

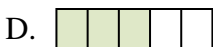



9. **D**

10. **C**

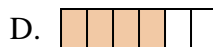
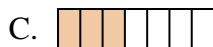
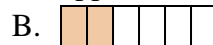


Determina quale lettera risponde correttamente ad ogni domanda




1) Quale delle seguenti figure rappresenta $\frac{2}{4}$?







2) Quale delle seguenti figure rappresenta $\frac{3}{6}$?



3) Quale delle seguenti figure rappresenta $\frac{4}{7}$?



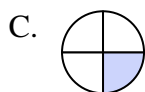
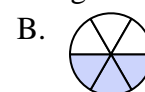
4) Quale delle seguenti figure rappresenta $\frac{3}{8}$?



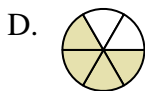
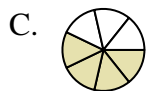
5) Quale delle seguenti figure rappresenta $\frac{7}{10}$?



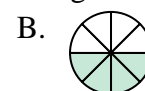
6) Quale delle seguenti figure rappresenta $\frac{2}{5}$?




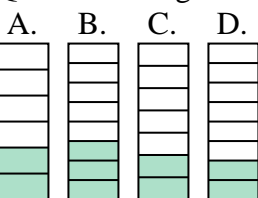
7) Quale delle seguenti figure rappresenta $\frac{4}{6}$?





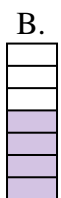
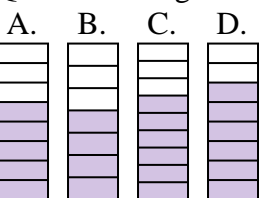
8) Quale delle seguenti figure rappresenta $\frac{4}{8}$?



9) Quale delle seguenti figure rappresenta $\frac{2}{7}$?



10) Quale delle seguenti figure rappresenta $\frac{5}{8}$?



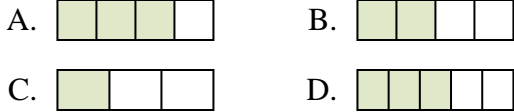
Risposte

1. _____
2. _____
3. _____
4. _____
5. _____
6. _____
7. _____
8. _____
9. _____
10. _____

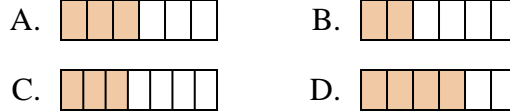


Determina quale lettera risponde correttamente ad ogni domanda

1) Quale delle seguenti figure rappresenta $\frac{2}{4}$?



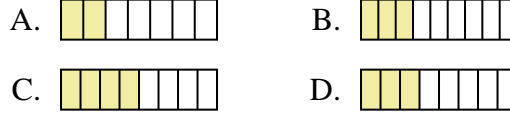
2) Quale delle seguenti figure rappresenta $\frac{3}{6}$?



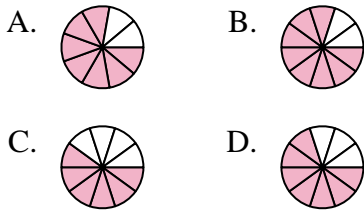
3) Quale delle seguenti figure rappresenta $\frac{4}{7}$?



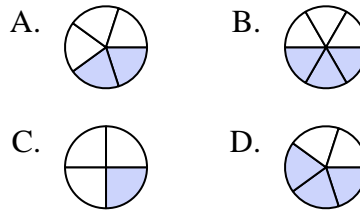
4) Quale delle seguenti figure rappresenta $\frac{3}{8}$?



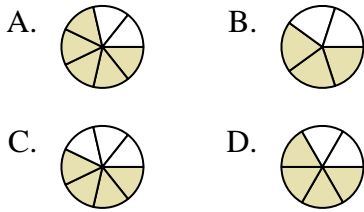
5) Quale delle seguenti figure rappresenta $\frac{7}{10}$?



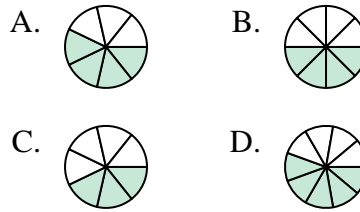
6) Quale delle seguenti figure rappresenta $\frac{2}{5}$?



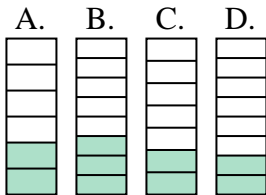
7) Quale delle seguenti figure rappresenta $\frac{4}{6}$?



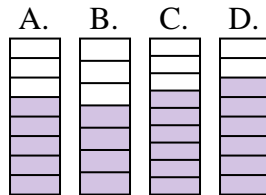
8) Quale delle seguenti figure rappresenta $\frac{4}{8}$?



9) Quale delle seguenti figure rappresenta $\frac{2}{7}$?



10) Quale delle seguenti figure rappresenta $\frac{5}{8}$?



Risposte

1. **B**
2. **A**
3. **A**
4. **D**
5. **D**
6. **A**
7. **D**
8. **B**
9. **C**
10. **A**



Determina quale lettera risponde correttamente ad ogni domanda

1) Quale delle seguenti figure rappresenta $7/10$?




2) Quale delle seguenti figure rappresenta $3/6$?



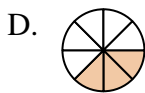
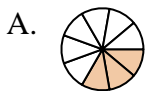
3) Quale delle seguenti figure rappresenta $8/10$?



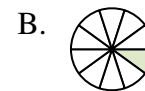
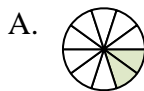
4) Quale delle seguenti figure rappresenta $2/8$?



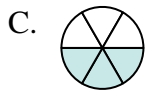
5) Quale delle seguenti figure rappresenta $3/8$?



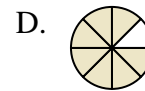
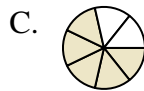
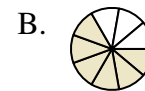
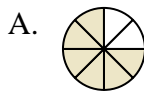
6) Quale delle seguenti figure rappresenta $2/10$?



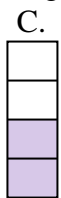
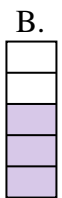
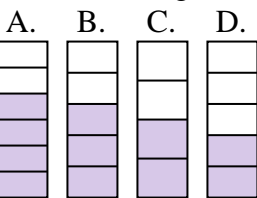
7) Quale delle seguenti figure rappresenta $3/7$?




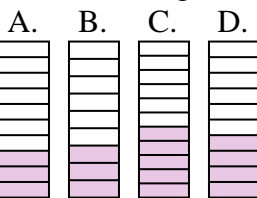
8) Quale delle seguenti figure rappresenta $6/8$?



9) Quale delle seguenti figure rappresenta $3/5$?



10) Quale delle seguenti figure rappresenta $4/10$?



Risposte

1. _____

2. _____

3. _____

4. _____

5. _____

6. _____

7. _____

8. _____

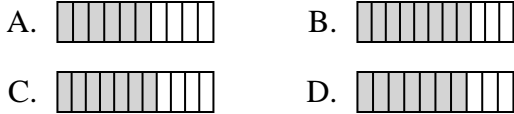
9. _____

10. _____

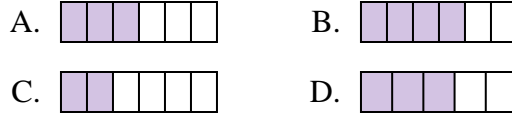


Determina quale lettera risponde correttamente ad ogni domanda

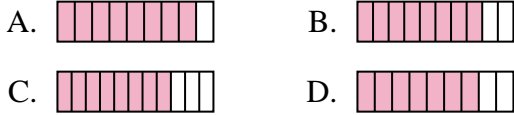
1) Quale delle seguenti figure rappresenta $\frac{7}{10}$?



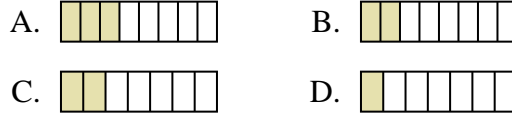
2) Quale delle seguenti figure rappresenta $\frac{3}{6}$?



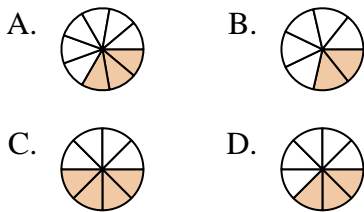
3) Quale delle seguenti figure rappresenta $\frac{8}{10}$?



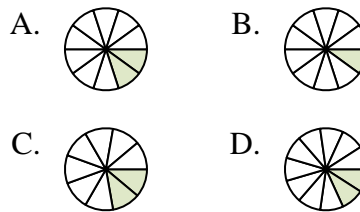
4) Quale delle seguenti figure rappresenta $\frac{2}{8}$?



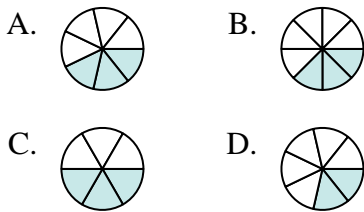
5) Quale delle seguenti figure rappresenta $\frac{3}{8}$?



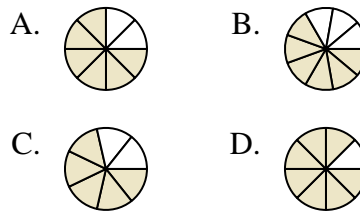
6) Quale delle seguenti figure rappresenta $\frac{2}{10}$?



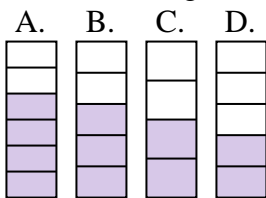
7) Quale delle seguenti figure rappresenta $\frac{3}{7}$?



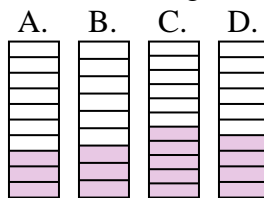
8) Quale delle seguenti figure rappresenta $\frac{6}{8}$?



9) Quale delle seguenti figure rappresenta $\frac{3}{5}$?



10) Quale delle seguenti figure rappresenta $\frac{4}{10}$?




Risposte

1. **D**
2. **A**
3. **B**
4. **B**
5. **D**
6. **A**
7. **A**
8. **A**
9. **B**
10. **D**

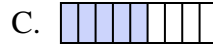


Determina quale lettera risponde correttamente ad ogni domanda


1) Quale delle seguenti figure rappresenta $\frac{3}{6}$?



2) Quale delle seguenti figure rappresenta $\frac{5}{8}$?



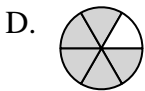
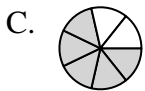
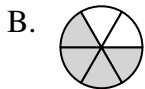
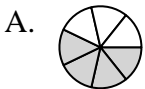
3) Quale delle seguenti figure rappresenta $\frac{3}{8}$?



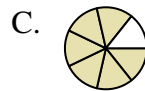
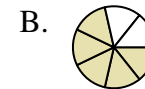
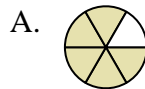
4) Quale delle seguenti figure rappresenta $\frac{8}{10}$?



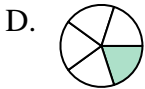
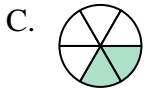
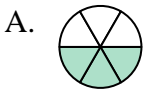
5) Quale delle seguenti figure rappresenta $\frac{4}{6}$?



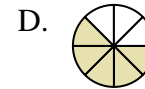
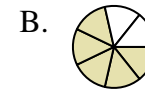
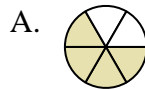
6) Quale delle seguenti figure rappresenta $\frac{5}{7}$?



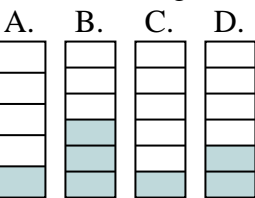
7) Quale delle seguenti figure rappresenta $\frac{2}{5}$?



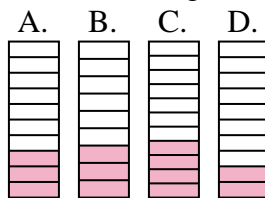
8) Quale delle seguenti figure rappresenta $\frac{4}{7}$?



9) Quale delle seguenti figure rappresenta $\frac{2}{6}$?



10) Quale delle seguenti figure rappresenta $\frac{3}{10}$?



Risposte

1. _____
2. _____
3. _____
4. _____
5. _____
6. _____
7. _____
8. _____
9. _____
10. _____



Determina quale lettera risponde correttamente ad ogni domanda



1) Quale delle seguenti figure rappresenta $\frac{3}{6}$?



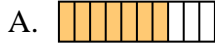
2) Quale delle seguenti figure rappresenta $\frac{5}{8}$?



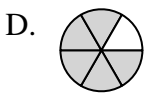
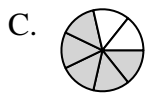
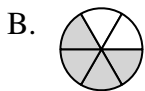
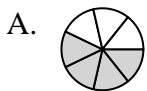
3) Quale delle seguenti figure rappresenta $\frac{3}{8}$?



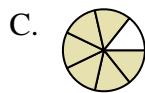
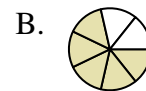
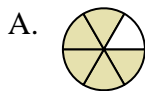
4) Quale delle seguenti figure rappresenta $\frac{8}{10}$?



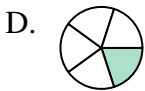
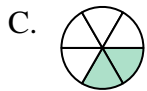
5) Quale delle seguenti figure rappresenta $\frac{4}{6}$?



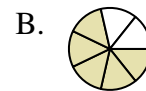
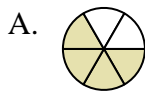
6) Quale delle seguenti figure rappresenta $\frac{5}{7}$?



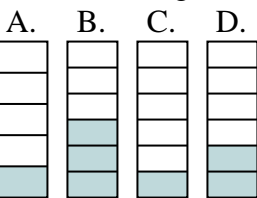
7) Quale delle seguenti figure rappresenta $\frac{2}{5}$?



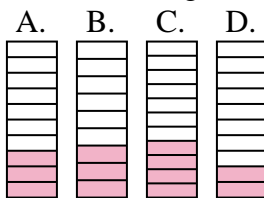
8) Quale delle seguenti figure rappresenta $\frac{4}{7}$?



9) Quale delle seguenti figure rappresenta $\frac{2}{6}$?



10) Quale delle seguenti figure rappresenta $\frac{3}{10}$?



Risposte

1. **D**

2. **B**

3. **B**

4. **D**

5. **B**

6. **B**

7. **B**

8. **C**

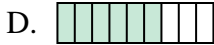
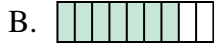
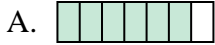
9. **D**

10. **A**

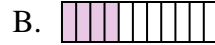
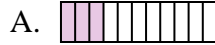


Determina quale lettera risponde correttamente ad ogni domanda

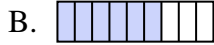
1) Quale delle seguenti figure rappresenta $\frac{6}{8}$?



2) Quale delle seguenti figure rappresenta $\frac{3}{10}$?



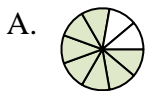
3) Quale delle seguenti figure rappresenta $\frac{5}{8}$?



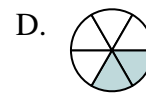
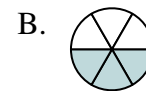
4) Quale delle seguenti figure rappresenta $\frac{4}{6}$?



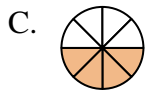
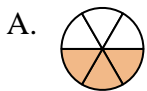
5) Quale delle seguenti figure rappresenta $\frac{8}{10}$?



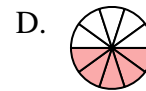
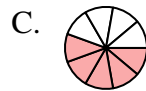
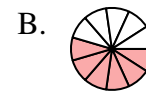
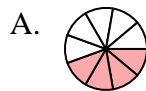
6) Quale delle seguenti figure rappresenta $\frac{3}{6}$?




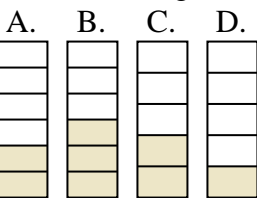
7) Quale delle seguenti figure rappresenta $\frac{3}{7}$?




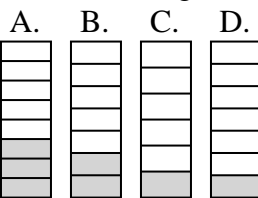
8) Quale delle seguenti figure rappresenta $\frac{5}{10}$?



9) Quale delle seguenti figure rappresenta $\frac{2}{5}$?



10) Quale delle seguenti figure rappresenta $\frac{2}{7}$?



Risposte

1. _____

2. _____

3. _____

4. _____

5. _____

6. _____

7. _____

8. _____

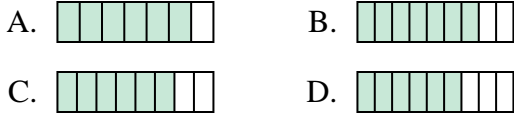
9. _____

10. _____

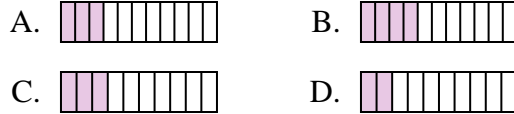


Determina quale lettera risponde correttamente ad ogni domanda

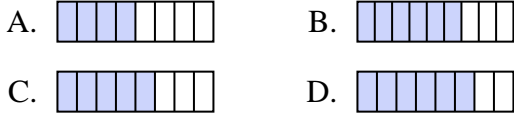
1) Quale delle seguenti figure rappresenta $\frac{6}{8}$?



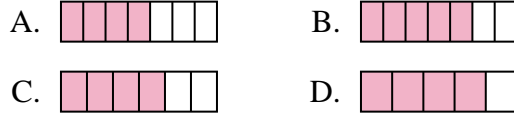
2) Quale delle seguenti figure rappresenta $\frac{3}{10}$?



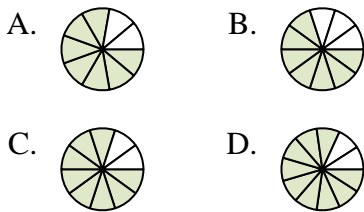
3) Quale delle seguenti figure rappresenta $\frac{5}{8}$?



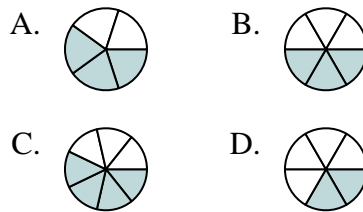
4) Quale delle seguenti figure rappresenta $\frac{4}{6}$?



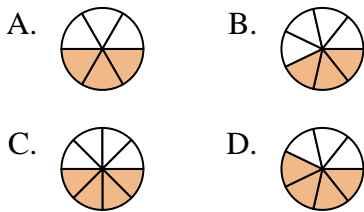
5) Quale delle seguenti figure rappresenta $\frac{8}{10}$?



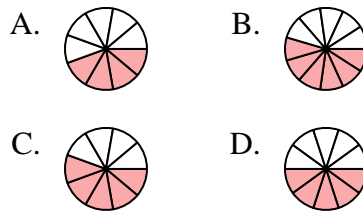
6) Quale delle seguenti figure rappresenta $\frac{3}{6}$?



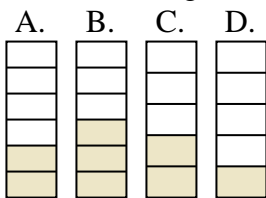
7) Quale delle seguenti figure rappresenta $\frac{3}{7}$?



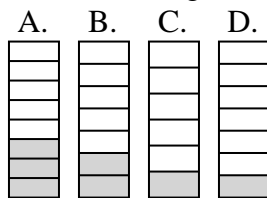
8) Quale delle seguenti figure rappresenta $\frac{5}{10}$?



9) Quale delle seguenti figure rappresenta $\frac{2}{5}$?



10) Quale delle seguenti figure rappresenta $\frac{2}{7}$?



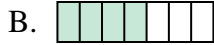
Risposte

1. **C**
2. **C**
3. **C**
4. **C**
5. **C**
6. **B**
7. **B**
8. **D**
9. **C**
10. **B**



Determina quale lettera risponde correttamente ad ogni domanda

1) Quale delle seguenti figure rappresenta $\frac{5}{7}$?



2) Quale delle seguenti figure rappresenta $\frac{5}{8}$?



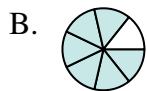
3) Quale delle seguenti figure rappresenta $\frac{7}{10}$?



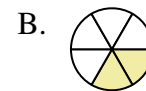
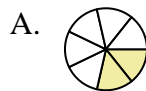
4) Quale delle seguenti figure rappresenta $\frac{8}{10}$?



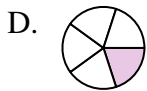
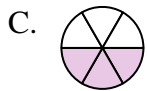
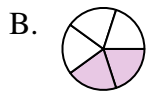
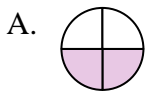
5) Quale delle seguenti figure rappresenta $\frac{6}{8}$?



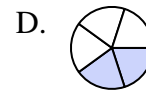
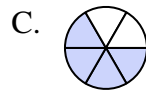
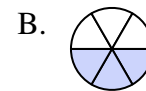
6) Quale delle seguenti figure rappresenta $\frac{2}{7}$?



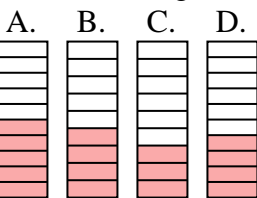
7) Quale delle seguenti figure rappresenta $\frac{2}{5}$?



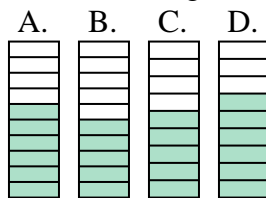
8) Quale delle seguenti figure rappresenta $\frac{3}{6}$?



9) Quale delle seguenti figure rappresenta $\frac{4}{10}$?



10) Quale delle seguenti figure rappresenta $\frac{6}{10}$?



Risposte

1. _____

2. _____

3. _____

4. _____

5. _____

6. _____

7. _____

8. _____

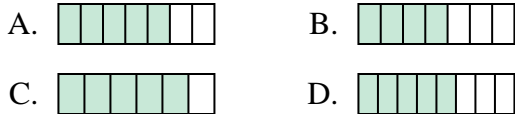
9. _____

10. _____

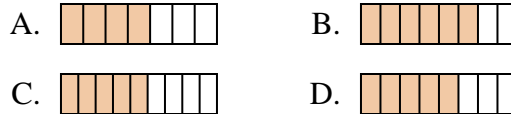


Determina quale lettera risponde correttamente ad ogni domanda

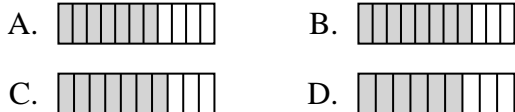
1) Quale delle seguenti figure rappresenta $\frac{5}{7}$?



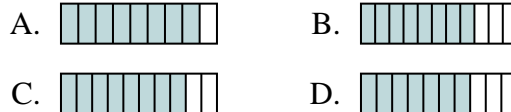
2) Quale delle seguenti figure rappresenta $\frac{5}{8}$?



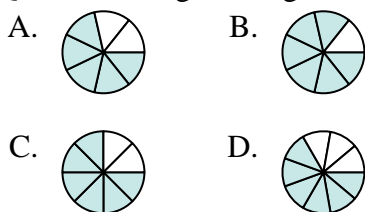
3) Quale delle seguenti figure rappresenta $\frac{7}{10}$?



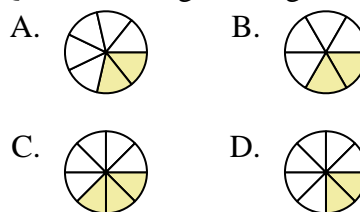
4) Quale delle seguenti figure rappresenta $\frac{8}{10}$?



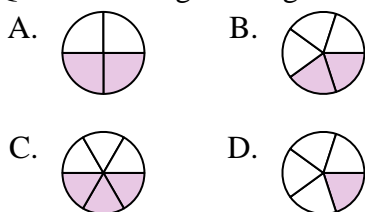
5) Quale delle seguenti figure rappresenta $\frac{6}{8}$?



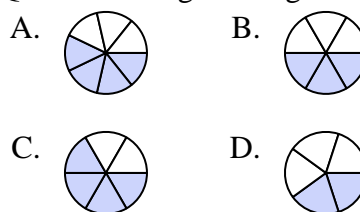
6) Quale delle seguenti figure rappresenta $\frac{2}{7}$?



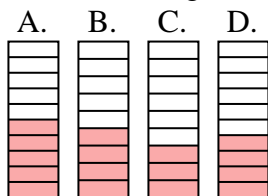
7) Quale delle seguenti figure rappresenta $\frac{2}{5}$?



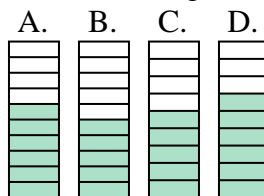
8) Quale delle seguenti figure rappresenta $\frac{3}{6}$?



9) Quale delle seguenti figure rappresenta $\frac{4}{10}$?



10) Quale delle seguenti figure rappresenta $\frac{6}{10}$?





Risposte

1. **A**
2. **D**
3. **C**
4. **C**
5. **C**
6. **A**
7. **B**
8. **B**
9. **D**
10. **A**

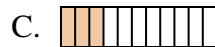


Determina quale lettera risponde correttamente ad ogni domanda

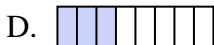
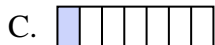
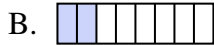
1) Quale delle seguenti figure rappresenta $\frac{2}{7}$?



2) Quale delle seguenti figure rappresenta $\frac{2}{10}$?



3) Quale delle seguenti figure rappresenta $\frac{2}{8}$?



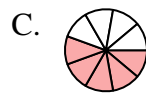
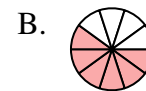
4) Quale delle seguenti figure rappresenta $\frac{6}{10}$?



5) Quale delle seguenti figure rappresenta $\frac{8}{10}$?



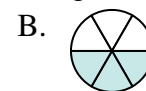
6) Quale delle seguenti figure rappresenta $\frac{5}{10}$?





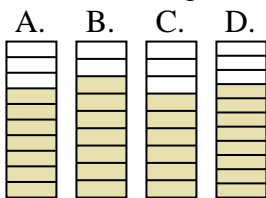
7) Quale delle seguenti figure rappresenta $\frac{2}{6}$?






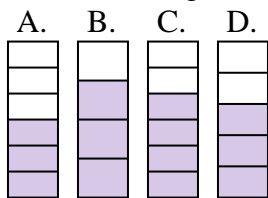
8) Quale delle seguenti figure rappresenta $\frac{3}{6}$?



9) Quale delle seguenti figure rappresenta $\frac{7}{10}$?



10) Quale delle seguenti figure rappresenta $\frac{3}{5}$?



Risposte

1. _____

2. _____

3. _____

4. _____

5. _____

6. _____

7. _____

8. _____


9. _____

10. _____

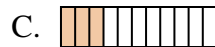


Determina quale lettera risponde correttamente ad ogni domanda

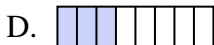
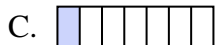
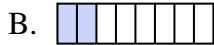
1) Quale delle seguenti figure rappresenta $\frac{2}{7}$?




2) Quale delle seguenti figure rappresenta $\frac{2}{10}$?



3) Quale delle seguenti figure rappresenta $\frac{2}{8}$?



4) Quale delle seguenti figure rappresenta $\frac{6}{10}$?



5) Quale delle seguenti figure rappresenta $\frac{8}{10}$?



6) Quale delle seguenti figure rappresenta $\frac{5}{10}$?





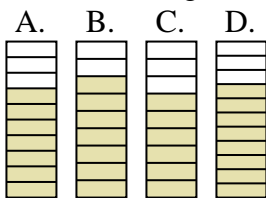
7) Quale delle seguenti figure rappresenta $\frac{2}{6}$?






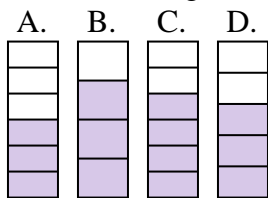
8) Quale delle seguenti figure rappresenta $\frac{3}{6}$?



9) Quale delle seguenti figure rappresenta $\frac{7}{10}$?



10) Quale delle seguenti figure rappresenta $\frac{3}{5}$?



Risposte

1. **B**

2. **B**

3. **B**

4. **C**

5. **C**

6. **A**

7. **B**

8. **B**

9. **A**

10. **D**