



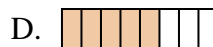
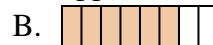
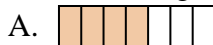


Determina quale lettera risponde correttamente ad ogni domanda

1) Quale delle seguenti figure rappresenta $\frac{5}{7}$?



2) Quale delle seguenti figure rappresenta $\frac{5}{8}$?



3) Quale delle seguenti figure rappresenta $\frac{7}{10}$?



4) Quale delle seguenti figure rappresenta $\frac{8}{10}$?



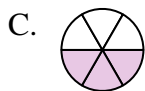
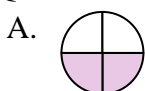
5) Quale delle seguenti figure rappresenta $\frac{6}{8}$?



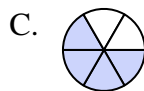
6) Quale delle seguenti figure rappresenta $\frac{2}{7}$?



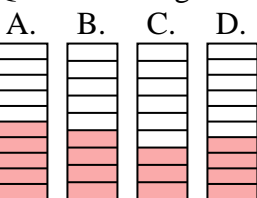
7) Quale delle seguenti figure rappresenta $\frac{2}{5}$?



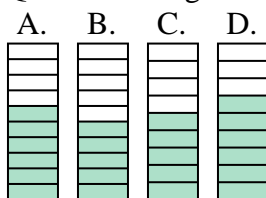
8) Quale delle seguenti figure rappresenta $\frac{3}{6}$?



9) Quale delle seguenti figure rappresenta $\frac{4}{10}$?



10) Quale delle seguenti figure rappresenta $\frac{6}{10}$?



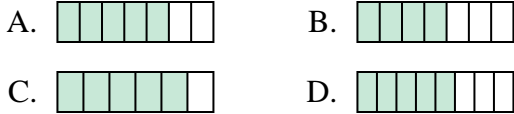
Risposte

1. _____
2. _____
3. _____
4. _____
5. _____
6. _____
7. _____
8. _____
9. _____
10. _____

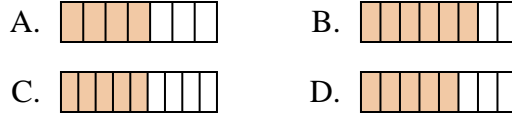


Determina quale lettera risponde correttamente ad ogni domanda

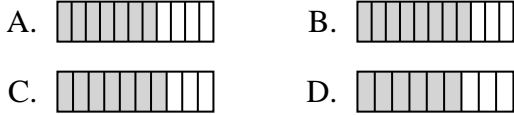
1) Quale delle seguenti figure rappresenta $\frac{5}{7}$?



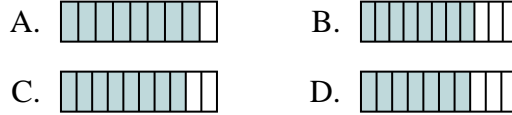
2) Quale delle seguenti figure rappresenta $\frac{5}{8}$?



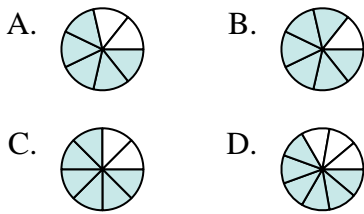
3) Quale delle seguenti figure rappresenta $\frac{7}{10}$?



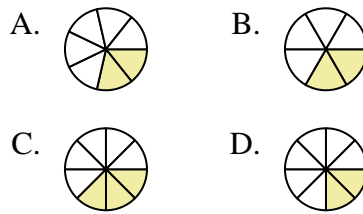
4) Quale delle seguenti figure rappresenta $\frac{8}{10}$?



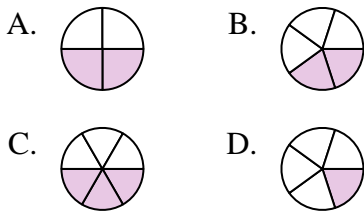
5) Quale delle seguenti figure rappresenta $\frac{6}{8}$?



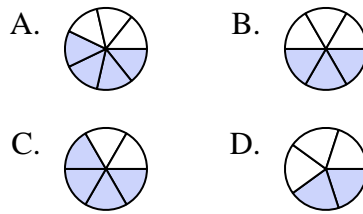
6) Quale delle seguenti figure rappresenta $\frac{2}{7}$?



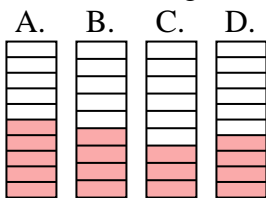
7) Quale delle seguenti figure rappresenta $\frac{2}{5}$?



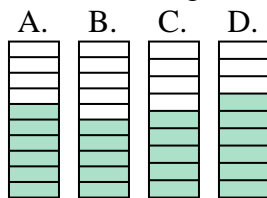
8) Quale delle seguenti figure rappresenta $\frac{3}{6}$?



9) Quale delle seguenti figure rappresenta $\frac{4}{10}$?



10) Quale delle seguenti figure rappresenta $\frac{6}{10}$?



Risposte

1. **A**
2. **D**
3. **C**
4. **C**
5. **C**
6. **A**
7. **B**
8. **B**
9. **D**
10. **A**