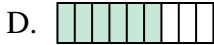
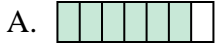


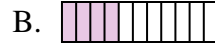


Determina quale lettera risponde correttamente ad ogni domanda

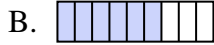
1) Quale delle seguenti figure rappresenta $\frac{6}{8}$?



2) Quale delle seguenti figure rappresenta $\frac{3}{10}$?



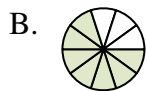
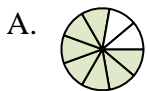
3) Quale delle seguenti figure rappresenta $\frac{5}{8}$?



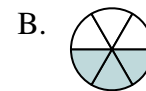
4) Quale delle seguenti figure rappresenta $\frac{4}{6}$?



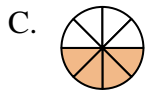
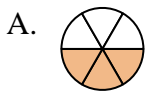
5) Quale delle seguenti figure rappresenta $\frac{8}{10}$?



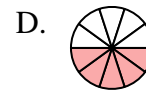
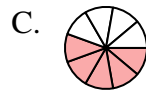
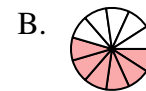
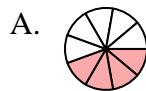
6) Quale delle seguenti figure rappresenta $\frac{3}{6}$?



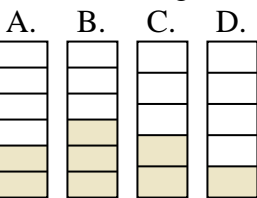
7) Quale delle seguenti figure rappresenta $\frac{3}{7}$?






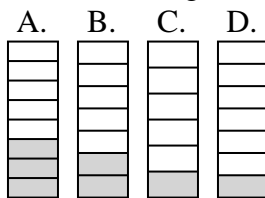
8) Quale delle seguenti figure rappresenta $\frac{5}{10}$?



9) Quale delle seguenti figure rappresenta $\frac{2}{5}$?



10) Quale delle seguenti figure rappresenta $\frac{2}{7}$?



Risposte

1. _____

2. _____

3. _____

4. _____

5. _____

6. _____

7. _____

8. _____

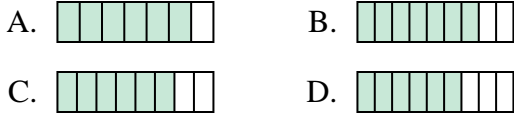
9. _____

10. _____

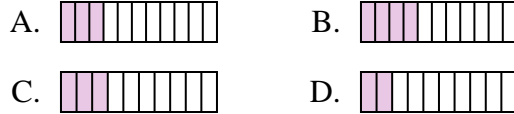


Determina quale lettera risponde correttamente ad ogni domanda

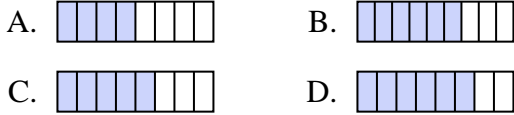
1) Quale delle seguenti figure rappresenta $\frac{6}{8}$?



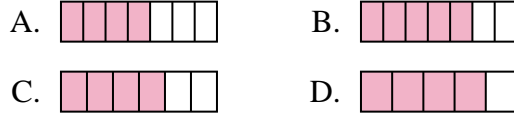
2) Quale delle seguenti figure rappresenta $\frac{3}{10}$?



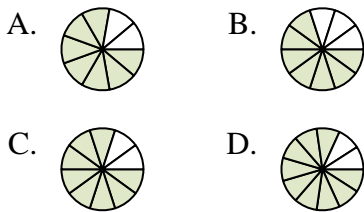
3) Quale delle seguenti figure rappresenta $\frac{5}{8}$?



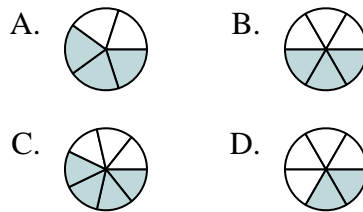
4) Quale delle seguenti figure rappresenta $\frac{4}{6}$?



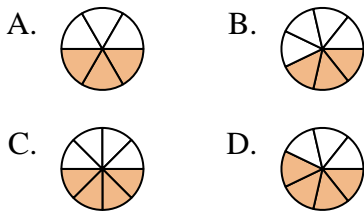
5) Quale delle seguenti figure rappresenta $\frac{8}{10}$?



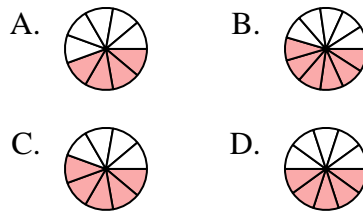
6) Quale delle seguenti figure rappresenta $\frac{3}{6}$?



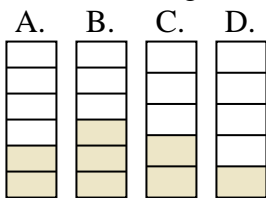
7) Quale delle seguenti figure rappresenta $\frac{3}{7}$?



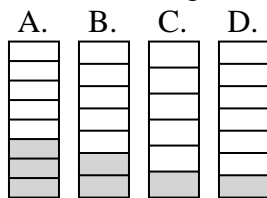
8) Quale delle seguenti figure rappresenta $\frac{5}{10}$?



9) Quale delle seguenti figure rappresenta $\frac{2}{5}$?



10) Quale delle seguenti figure rappresenta $\frac{2}{7}$?



Risposte

1. **C**
2. **C**
3. **C**
4. **C**
5. **C**
6. **B**
7. **B**
8. **D**
9. **C**
10. **B**