


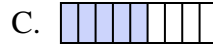


Determina quale lettera risponde correttamente ad ogni domanda

1) Quale delle seguenti figure rappresenta $\frac{3}{6}$?



2) Quale delle seguenti figure rappresenta $\frac{5}{8}$?



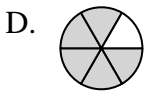
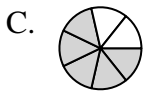
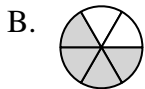
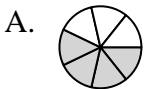
3) Quale delle seguenti figure rappresenta $\frac{3}{8}$?



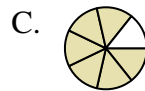
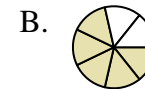
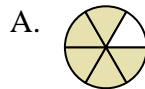
4) Quale delle seguenti figure rappresenta $\frac{8}{10}$?



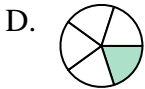
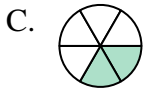
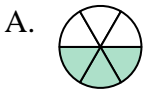
5) Quale delle seguenti figure rappresenta $\frac{4}{6}$?



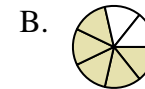
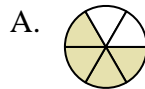
6) Quale delle seguenti figure rappresenta $\frac{5}{7}$?



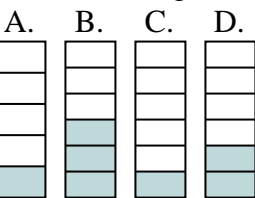
7) Quale delle seguenti figure rappresenta $\frac{2}{5}$?




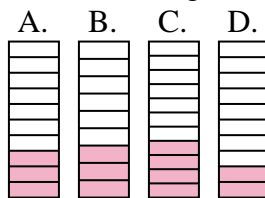
8) Quale delle seguenti figure rappresenta $\frac{4}{7}$?



9) Quale delle seguenti figure rappresenta $\frac{2}{6}$?



10) Quale delle seguenti figure rappresenta $\frac{3}{10}$?



Risposte

1. _____
2. _____
3. _____
4. _____
5. _____
6. _____
7. _____
8. _____
9. _____
10. _____

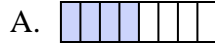


Determina quale lettera risponde correttamente ad ogni domanda



1) Quale delle seguenti figure rappresenta $\frac{3}{6}$?



2) Quale delle seguenti figure rappresenta $\frac{5}{8}$?



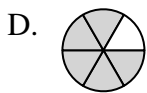
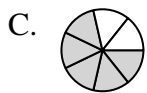
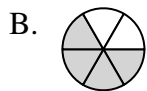
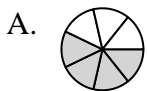
3) Quale delle seguenti figure rappresenta $\frac{3}{8}$?



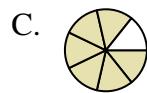
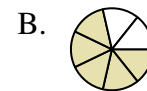
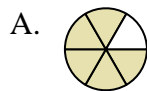
4) Quale delle seguenti figure rappresenta $\frac{8}{10}$?



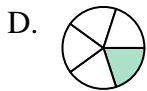
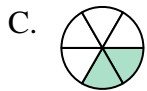
5) Quale delle seguenti figure rappresenta $\frac{4}{6}$?



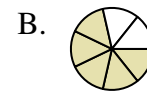
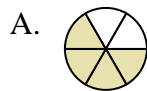
6) Quale delle seguenti figure rappresenta $\frac{5}{7}$?



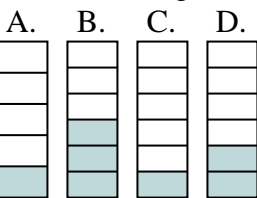
7) Quale delle seguenti figure rappresenta $\frac{2}{5}$?



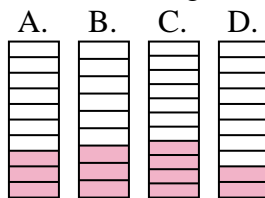
8) Quale delle seguenti figure rappresenta $\frac{4}{7}$?



9) Quale delle seguenti figure rappresenta $\frac{2}{6}$?



10) Quale delle seguenti figure rappresenta $\frac{3}{10}$?



Risposte

1. **D**

2. **B**

3. **B**

4. **D**

5. **B**

6. **B**

7. **B**

8. **C**

9. **D**

10. **A**