



Determina quale lettera risponde correttamente ad ogni domanda


1) Quale delle seguenti figure rappresenta $7/10$?




2) Quale delle seguenti figure rappresenta $3/6$?



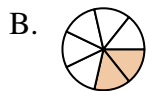
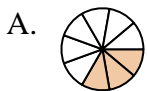
3) Quale delle seguenti figure rappresenta $8/10$?



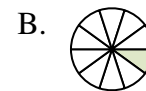
4) Quale delle seguenti figure rappresenta $2/8$?



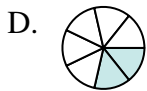
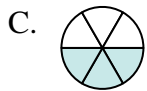
5) Quale delle seguenti figure rappresenta $3/8$?



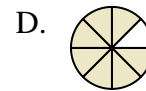
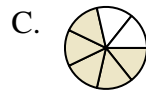
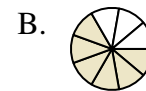
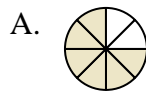
6) Quale delle seguenti figure rappresenta $2/10$?



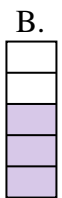
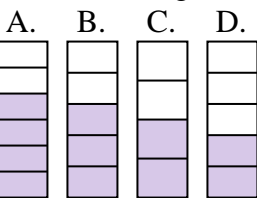
7) Quale delle seguenti figure rappresenta $3/7$?






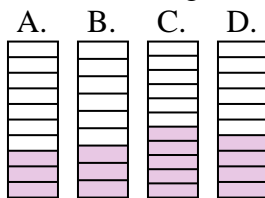
8) Quale delle seguenti figure rappresenta $6/8$?



9) Quale delle seguenti figure rappresenta $3/5$?



10) Quale delle seguenti figure rappresenta $4/10$?



Risposte

1. _____

2. _____

3. _____

4. _____

5. _____

6. _____

7. _____

8. _____

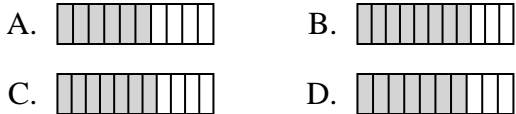
9. _____

10. _____

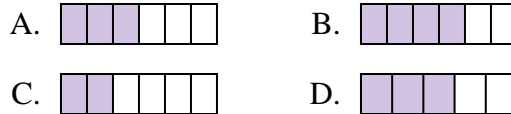


Determina quale lettera risponde correttamente ad ogni domanda

1) Quale delle seguenti figure rappresenta $\frac{7}{10}$?



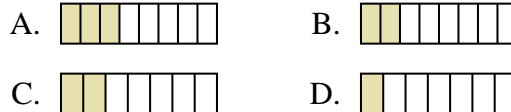
2) Quale delle seguenti figure rappresenta $\frac{3}{6}$?



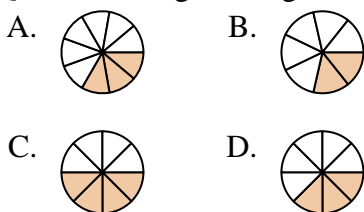
3) Quale delle seguenti figure rappresenta $\frac{8}{10}$?



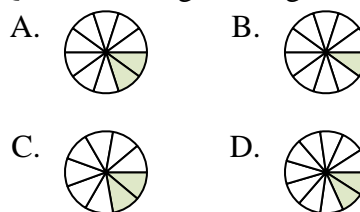
4) Quale delle seguenti figure rappresenta $\frac{2}{8}$?



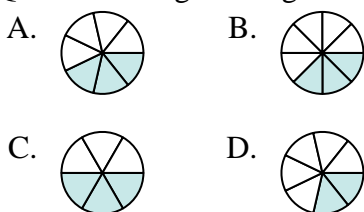
5) Quale delle seguenti figure rappresenta $\frac{3}{8}$?



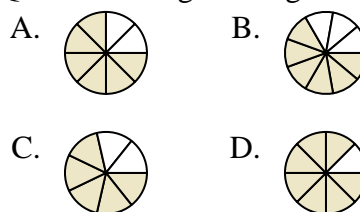
6) Quale delle seguenti figure rappresenta $\frac{2}{10}$?



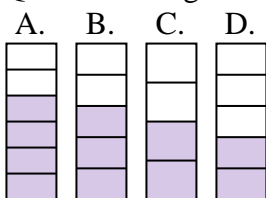
7) Quale delle seguenti figure rappresenta $\frac{3}{7}$?



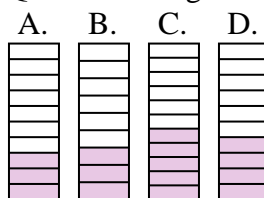
8) Quale delle seguenti figure rappresenta $\frac{6}{8}$?



9) Quale delle seguenti figure rappresenta $\frac{3}{5}$?



10) Quale delle seguenti figure rappresenta $\frac{4}{10}$?



Risposte

1. **D**
2. **A**
3. **B**
4. **B**
5. **D**
6. **A**
7. **A**
8. **A**
9. **B**
10. **D**