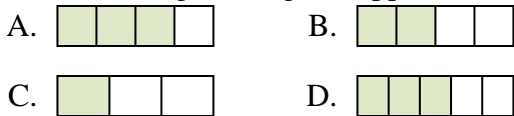


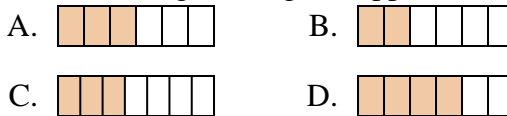


**Determina quale lettera risponde correttamente ad ogni domanda**

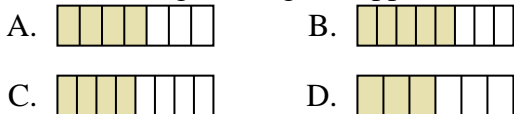
1) Quale delle seguenti figure rappresenta  $\frac{2}{4}$ ?



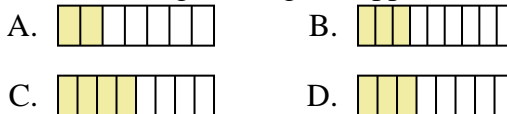
2) Quale delle seguenti figure rappresenta  $\frac{3}{6}$ ?



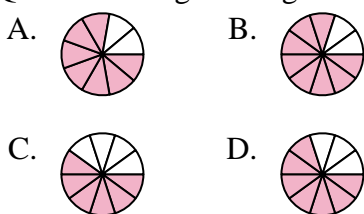
3) Quale delle seguenti figure rappresenta  $\frac{4}{7}$ ?



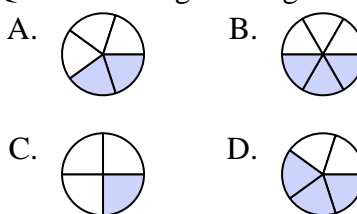
4) Quale delle seguenti figure rappresenta  $\frac{3}{8}$ ?



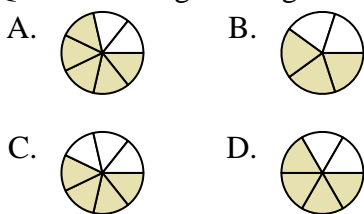
5) Quale delle seguenti figure rappresenta  $\frac{7}{10}$ ?



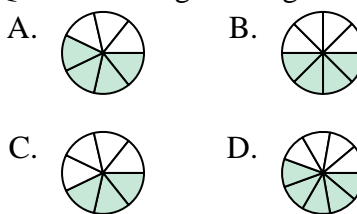
6) Quale delle seguenti figure rappresenta  $\frac{2}{5}$ ?



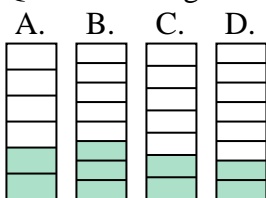
7) Quale delle seguenti figure rappresenta  $\frac{4}{6}$ ?



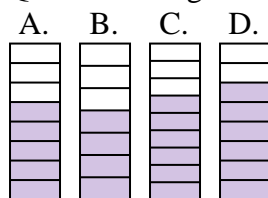
8) Quale delle seguenti figure rappresenta  $\frac{4}{8}$ ?



9) Quale delle seguenti figure rappresenta  $\frac{2}{7}$ ?



10) Quale delle seguenti figure rappresenta  $\frac{5}{8}$ ?



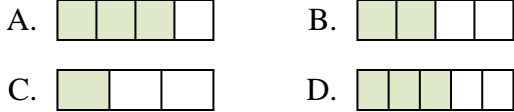
**Risposte**

1. \_\_\_\_\_
2. \_\_\_\_\_
3. \_\_\_\_\_
4. \_\_\_\_\_
5. \_\_\_\_\_
6. \_\_\_\_\_
7. \_\_\_\_\_
8. \_\_\_\_\_
9. \_\_\_\_\_
10. \_\_\_\_\_

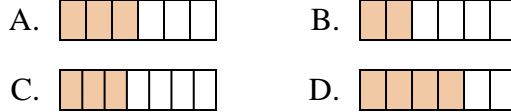


**Determina quale lettera risponde correttamente ad ogni domanda**

1) Quale delle seguenti figure rappresenta  $\frac{2}{4}$ ?



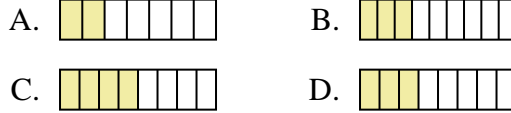
2) Quale delle seguenti figure rappresenta  $\frac{3}{6}$ ?



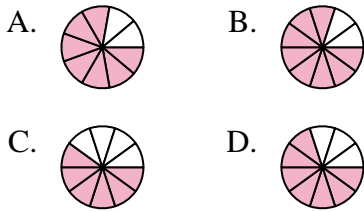
3) Quale delle seguenti figure rappresenta  $\frac{4}{7}$ ?



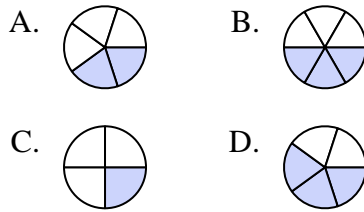
4) Quale delle seguenti figure rappresenta  $\frac{3}{8}$ ?



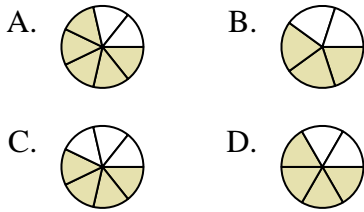
5) Quale delle seguenti figure rappresenta  $\frac{7}{10}$ ?



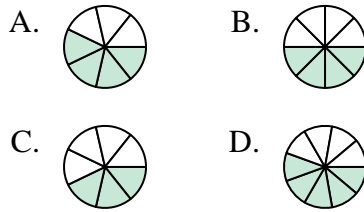
6) Quale delle seguenti figure rappresenta  $\frac{2}{5}$ ?



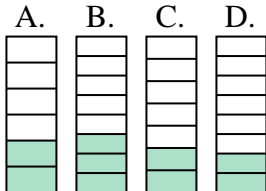
7) Quale delle seguenti figure rappresenta  $\frac{4}{6}$ ?



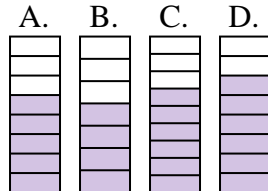
8) Quale delle seguenti figure rappresenta  $\frac{4}{8}$ ?



9) Quale delle seguenti figure rappresenta  $\frac{2}{7}$ ?



10) Quale delle seguenti figure rappresenta  $\frac{5}{8}$ ?



**Risposte**

1.     **B**
2.     **A**
3.     **A**
4.     **D**
5.     **D**
6.     **A**
7.     **D**
8.     **B**
9.     **C**
10.     **A**