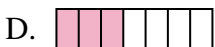
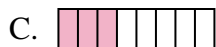





Determina quale lettera risponde correttamente ad ogni domanda

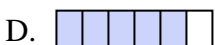
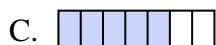

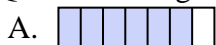
1) Quale delle seguenti figure rappresenta $\frac{3}{8}$?





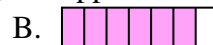

2) Quale delle seguenti figure rappresenta $\frac{4}{10}$?



3) Quale delle seguenti figure rappresenta $\frac{5}{7}$?



4) Quale delle seguenti figure rappresenta $\frac{6}{8}$?



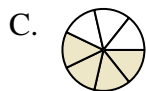
5) Quale delle seguenti figure rappresenta $\frac{8}{10}$?



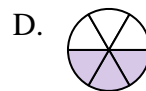
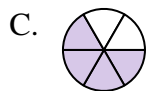
6) Quale delle seguenti figure rappresenta $\frac{2}{7}$?




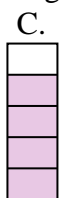
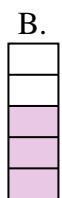
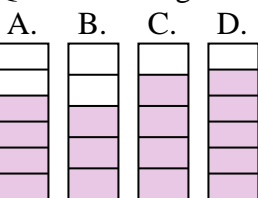
7) Quale delle seguenti figure rappresenta $\frac{3}{6}$?






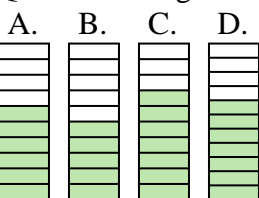
8) Quale delle seguenti figure rappresenta $\frac{4}{7}$?



9) Quale delle seguenti figure rappresenta $\frac{4}{6}$?



10) Quale delle seguenti figure rappresenta $\frac{6}{10}$?



Risposte

1. _____

2. _____

3. _____

4. _____

5. _____

6. _____

7. _____

8. _____

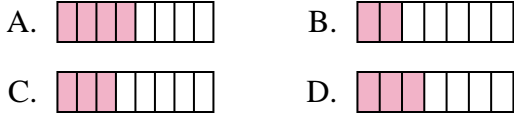
9. _____

10. _____

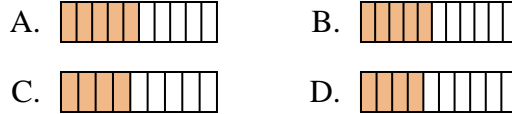


Determina quale lettera risponde correttamente ad ogni domanda

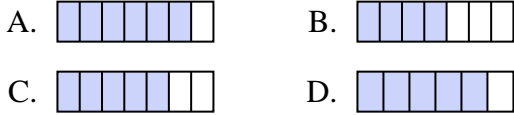
1) Quale delle seguenti figure rappresenta $\frac{3}{8}$?



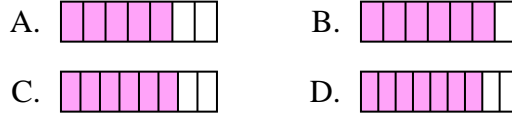
2) Quale delle seguenti figure rappresenta $\frac{4}{10}$?



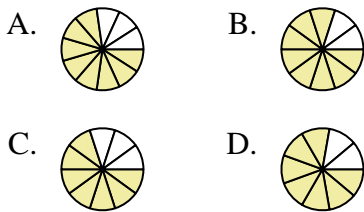
3) Quale delle seguenti figure rappresenta $\frac{5}{7}$?



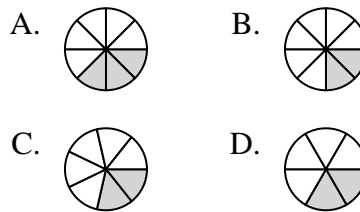
4) Quale delle seguenti figure rappresenta $\frac{6}{8}$?



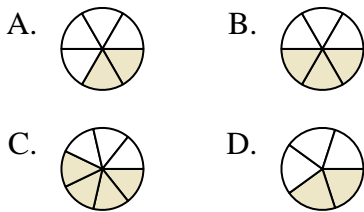
5) Quale delle seguenti figure rappresenta $\frac{8}{10}$?



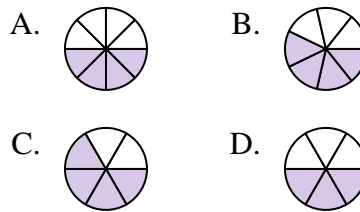
6) Quale delle seguenti figure rappresenta $\frac{2}{7}$?



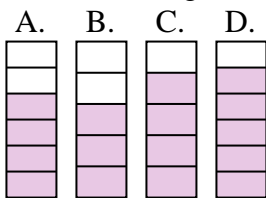
7) Quale delle seguenti figure rappresenta $\frac{3}{6}$?



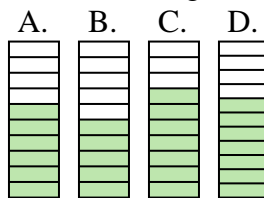
8) Quale delle seguenti figure rappresenta $\frac{4}{7}$?



9) Quale delle seguenti figure rappresenta $\frac{4}{6}$?



10) Quale delle seguenti figure rappresenta $\frac{6}{10}$?



Risposte

1. **C**
2. **D**
3. **C**
4. **C**
5. **B**
6. **C**
7. **B**
8. **B**
9. **A**
10. **A**