


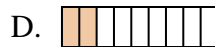
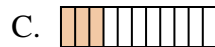


Determina quale lettera risponde correttamente ad ogni domanda

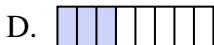
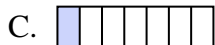
1) Quale delle seguenti figure rappresenta $\frac{2}{7}$?




2) Quale delle seguenti figure rappresenta $\frac{2}{10}$?



3) Quale delle seguenti figure rappresenta $\frac{2}{8}$?



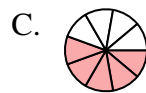
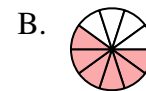
4) Quale delle seguenti figure rappresenta $\frac{6}{10}$?



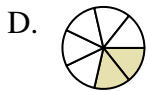
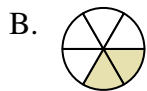
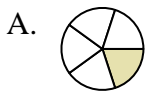
5) Quale delle seguenti figure rappresenta $\frac{8}{10}$?



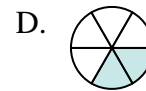
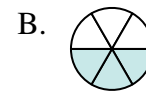
6) Quale delle seguenti figure rappresenta $\frac{5}{10}$?





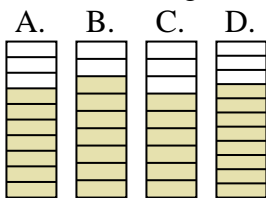
7) Quale delle seguenti figure rappresenta $\frac{2}{6}$?





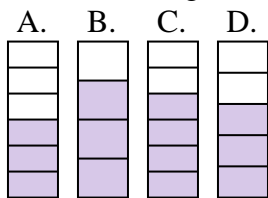
8) Quale delle seguenti figure rappresenta $\frac{3}{6}$?



9) Quale delle seguenti figure rappresenta $\frac{7}{10}$?



10) Quale delle seguenti figure rappresenta $\frac{3}{5}$?



Risposte

1. _____

2. _____

3. _____

4. _____

5. _____

6. _____

7. _____

8. _____

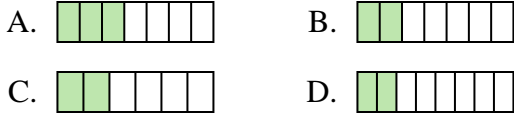
9. _____

10. _____

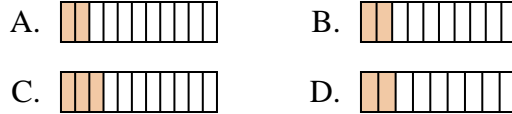


Determina quale lettera risponde correttamente ad ogni domanda

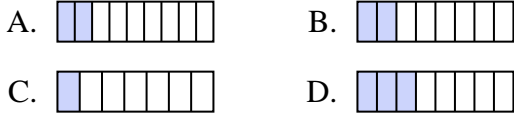
1) Quale delle seguenti figure rappresenta $\frac{2}{7}$?



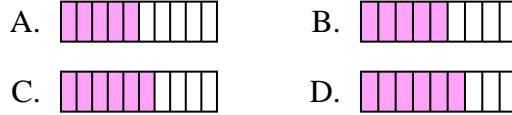
2) Quale delle seguenti figure rappresenta $\frac{2}{10}$?



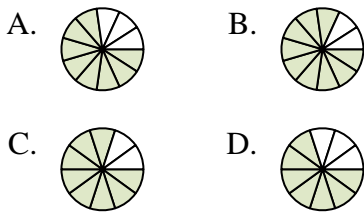
3) Quale delle seguenti figure rappresenta $\frac{2}{8}$?



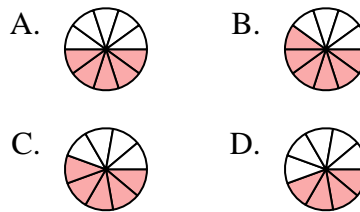
4) Quale delle seguenti figure rappresenta $\frac{6}{10}$?



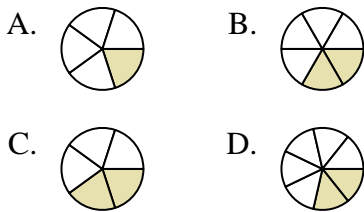
5) Quale delle seguenti figure rappresenta $\frac{8}{10}$?



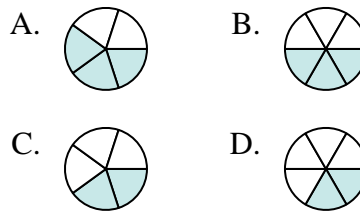
6) Quale delle seguenti figure rappresenta $\frac{5}{10}$?



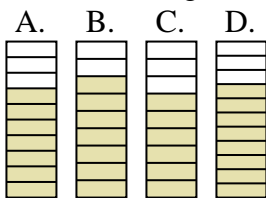
7) Quale delle seguenti figure rappresenta $\frac{2}{6}$?



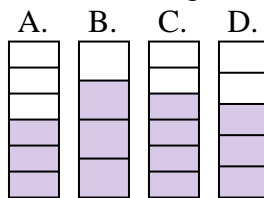
8) Quale delle seguenti figure rappresenta $\frac{3}{6}$?



9) Quale delle seguenti figure rappresenta $\frac{7}{10}$?



10) Quale delle seguenti figure rappresenta $\frac{3}{5}$?



Risposte

1. **B**
2. **B**
3. **B**
4. **C**
5. **C**
6. **A**
7. **B**
8. **B**
9. **A**
10. **D**