



Determina quale lettera risponde correttamente ad ogni domanda

1) Quale delle seguenti figure rappresenta $\frac{6}{10}$?



2) Quale delle seguenti figure rappresenta $\frac{5}{10}$?



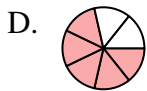
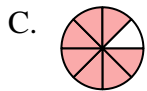
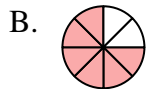
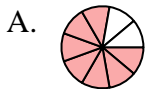
3) Quale delle seguenti figure rappresenta $\frac{5}{7}$?



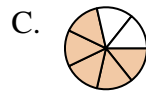
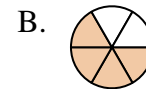
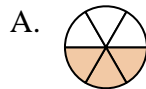
4) Quale delle seguenti figure rappresenta $\frac{2}{7}$?



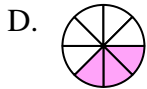
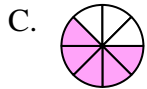
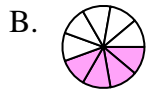
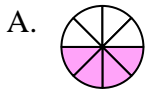
5) Quale delle seguenti figure rappresenta $\frac{6}{8}$?



6) Quale delle seguenti figure rappresenta $\frac{4}{6}$?



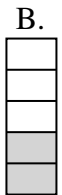
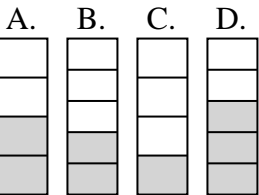
7) Quale delle seguenti figure rappresenta $\frac{4}{8}$?



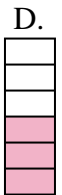
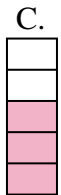
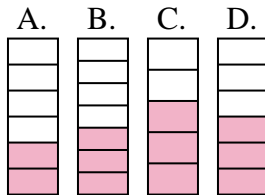
8) Quale delle seguenti figure rappresenta $\frac{4}{10}$?



9) Quale delle seguenti figure rappresenta $\frac{2}{5}$?



10) Quale delle seguenti figure rappresenta $\frac{3}{6}$?



Risposte

1. _____
2. _____
3. _____
4. _____
5. _____
6. _____
7. _____
8. _____
9. _____
10. _____



Determina quale lettera risponde correttamente ad ogni domanda

1) Quale delle seguenti figure rappresenta $\frac{6}{10}$?





2) Quale delle seguenti figure rappresenta $\frac{5}{10}$?



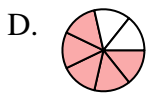
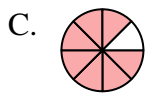
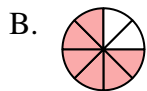
3) Quale delle seguenti figure rappresenta $\frac{5}{7}$?



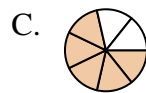
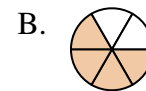
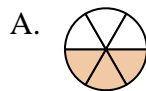
4) Quale delle seguenti figure rappresenta $\frac{2}{7}$?



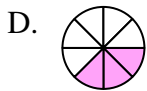
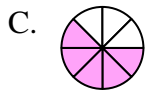
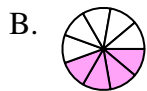
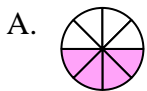
5) Quale delle seguenti figure rappresenta $\frac{6}{8}$?



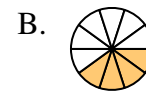
6) Quale delle seguenti figure rappresenta $\frac{4}{6}$?



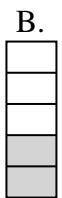
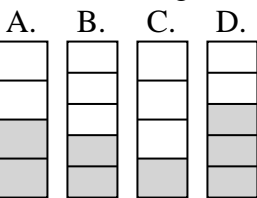
7) Quale delle seguenti figure rappresenta $\frac{4}{8}$?




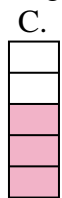
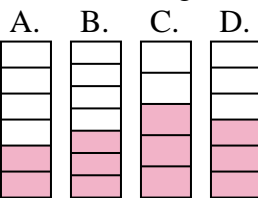
8) Quale delle seguenti figure rappresenta $\frac{4}{10}$?



9) Quale delle seguenti figure rappresenta $\frac{2}{5}$?



10) Quale delle seguenti figure rappresenta $\frac{3}{6}$?



Risposte

1. **D**

2. **A**

3. **A**

4. **A**

5. **B**

6. **B**

7. **A**

8. **B**

9. **B**

10. **D**