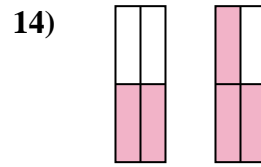
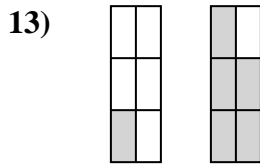
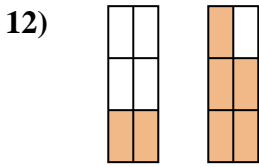
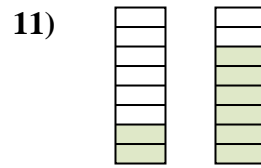
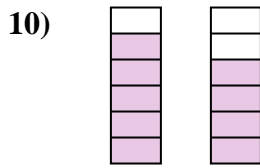
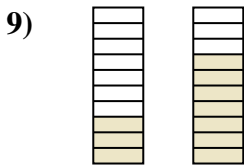
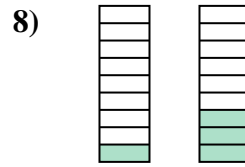
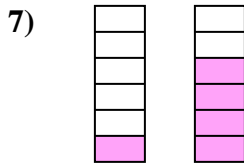
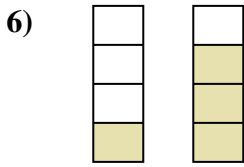
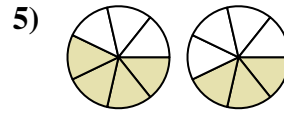
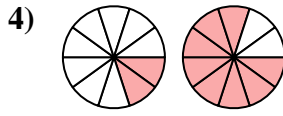
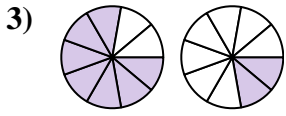
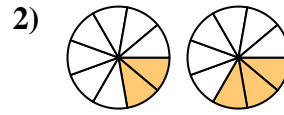
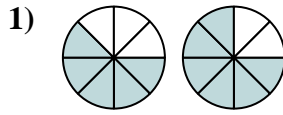
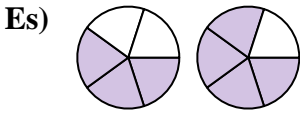




Confronta le dimensioni delle frazioni usando ">", "<" o "=".



Risposte

Es. $\frac{3}{5} < \frac{4}{5}$

1. _____

2. _____

3. _____

4. _____

5. _____

6. _____

7. _____

8. _____

9. _____

10. _____

11. _____

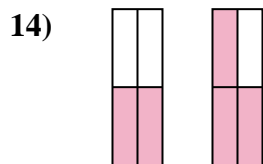
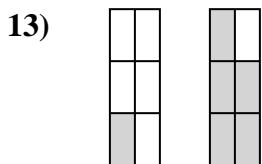
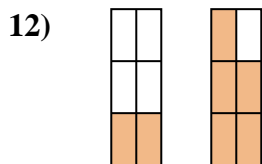
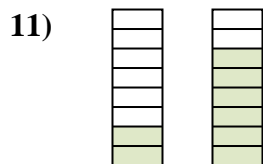
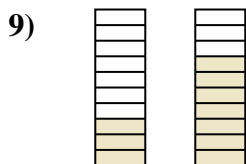
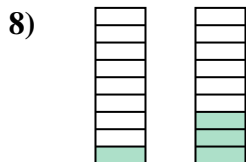
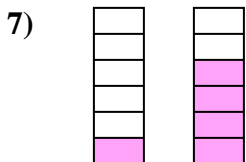
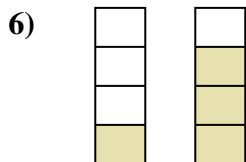
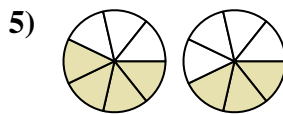
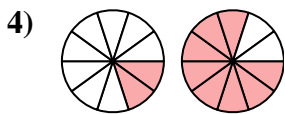
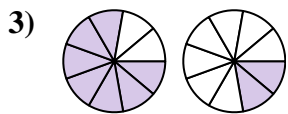
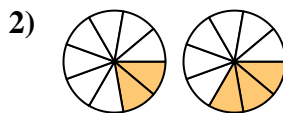
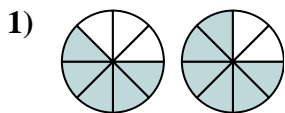
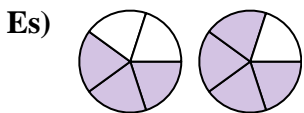
12. _____

13. _____

14. _____



Confronta le dimensioni delle frazioni usando ">", "<" o "=".



Risposte

Es. $\frac{3}{5} < \frac{4}{5}$

1. $\frac{5}{8} < \frac{6}{8}$

2. $\frac{2}{9} < \frac{3}{9}$

3. $\frac{7}{9} > \frac{2}{9}$

4. $\frac{2}{10} < \frac{8}{10}$

5. $\frac{4}{7} > \frac{3}{7}$

6. $\frac{1}{4} < \frac{3}{4}$

7. $\frac{1}{6} < \frac{4}{6}$

8. $\frac{1}{9} < \frac{3}{9}$

9. $\frac{3}{10} < \frac{7}{10}$

10. $\frac{5}{6} > \frac{4}{6}$

11. $\frac{2}{8} < \frac{6}{8}$

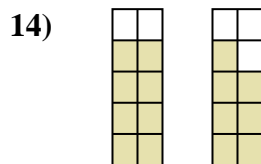
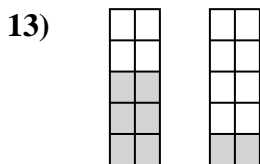
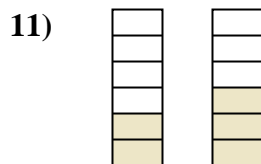
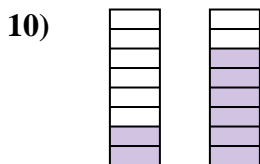
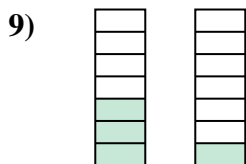
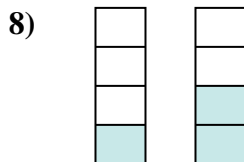
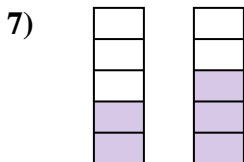
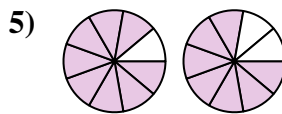
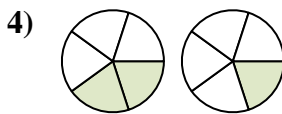
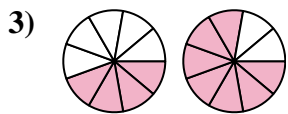
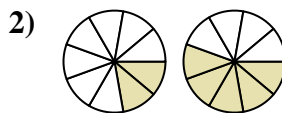
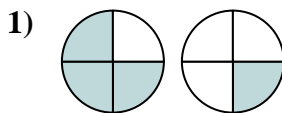
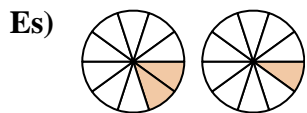
12. $\frac{2}{6} < \frac{5}{6}$

13. $\frac{1}{6} < \frac{5}{6}$

14. $\frac{2}{4} < \frac{3}{4}$



Confronta le dimensioni delle frazioni usando ">", "<" o "=".



Risposte

Es. $\frac{2}{10} > \frac{1}{10}$

1. _____

2. _____

3. _____

4. _____

5. _____

6. _____

7. _____

8. _____

9. _____

10. _____

11. _____

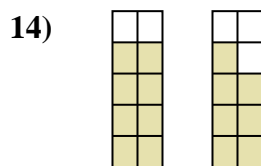
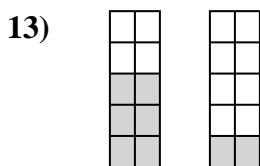
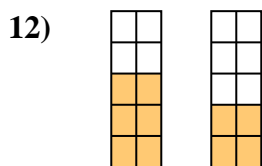
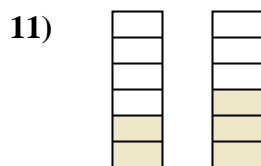
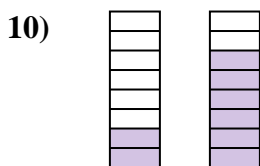
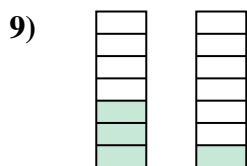
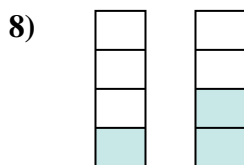
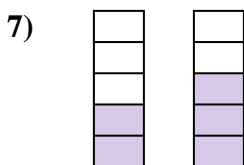
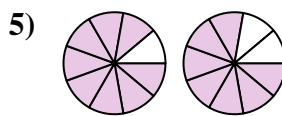
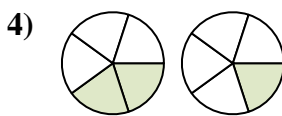
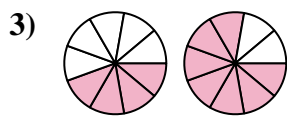
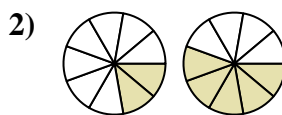
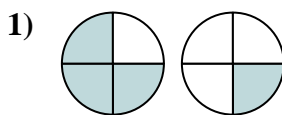
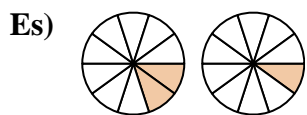
12. _____

13. _____

14. _____



Confronta le dimensioni delle frazioni usando ">", "<" o "=".



Risposte

Es. $\frac{2}{10} > \frac{1}{10}$

1. $\frac{3}{4} > \frac{1}{4}$

2. $\frac{2}{9} < \frac{5}{9}$

3. $\frac{4}{9} < \frac{7}{9}$

4. $\frac{2}{5} > \frac{1}{5}$

5. $\frac{8}{9} > \frac{7}{9}$

6. $\frac{5}{6} > \frac{4}{6}$

7. $\frac{2}{5} < \frac{3}{5}$

8. $\frac{1}{4} < \frac{2}{4}$

9. $\frac{3}{7} > \frac{1}{7}$

10. $\frac{2}{8} < \frac{6}{8}$

11. $\frac{2}{6} < \frac{3}{6}$

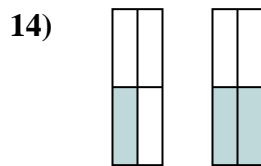
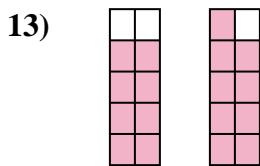
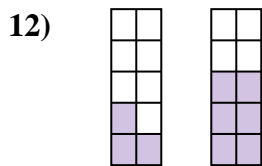
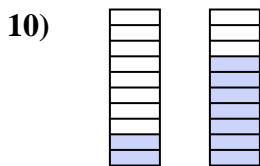
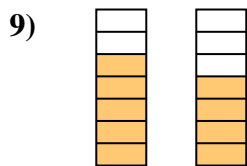
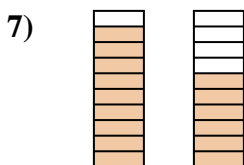
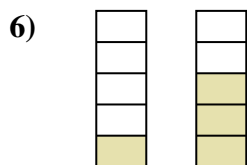
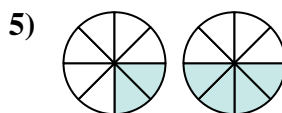
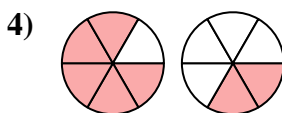
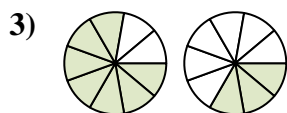
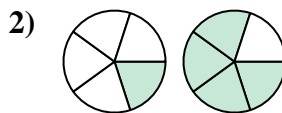
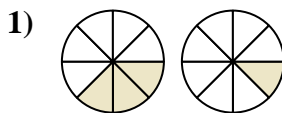
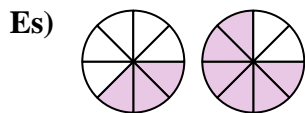
12. $\frac{6}{10} > \frac{4}{10}$

13. $\frac{6}{10} > \frac{2}{10}$

14. $\frac{8}{10} > \frac{7}{10}$



Confronta le dimensioni delle frazioni usando ">", "<" o "=".



Risposte

Es. $\frac{3}{8}$ < $\frac{6}{8}$

1. _____

2. _____

3. _____

4. _____

5. _____

6. _____

7. _____

8. _____

9. _____

10. _____

11. _____

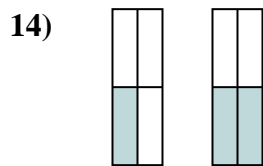
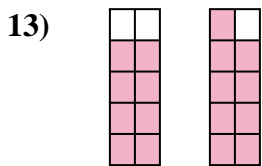
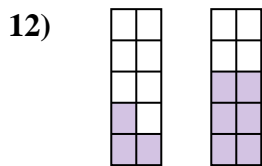
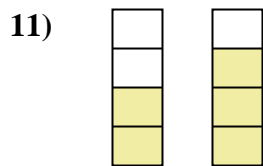
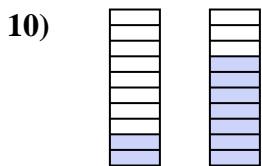
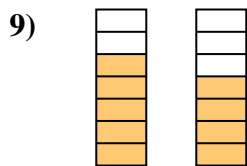
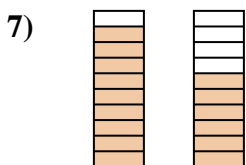
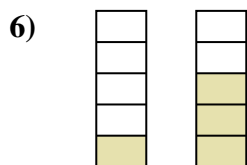
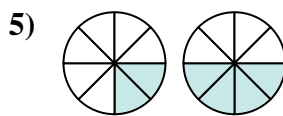
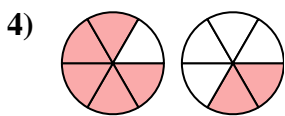
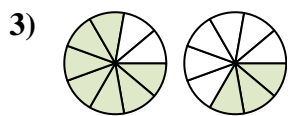
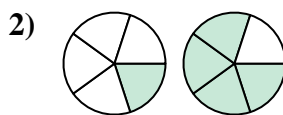
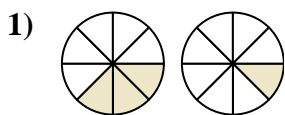
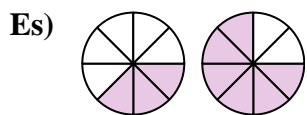
12. _____

13. _____

14. _____



Confronta le dimensioni delle frazioni usando ">", "<" o "=".



Risposte

Es. $\frac{3}{8} < \frac{6}{8}$

1. $\frac{3}{8} > \frac{1}{8}$

2. $\frac{1}{5} < \frac{4}{5}$

3. $\frac{7}{9} > \frac{3}{9}$

4. $\frac{5}{6} > \frac{2}{6}$

5. $\frac{2}{8} < \frac{4}{8}$

6. $\frac{1}{5} < \frac{3}{5}$

7. $\frac{9}{10} > \frac{6}{10}$

8. $\frac{5}{7} > \frac{1}{7}$

9. $\frac{5}{7} > \frac{4}{7}$

10. $\frac{2}{10} < \frac{7}{10}$

11. $\frac{2}{4} < \frac{3}{4}$

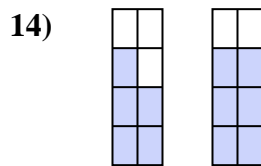
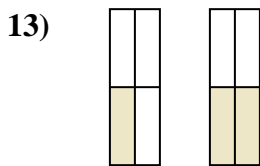
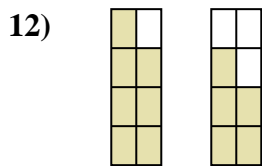
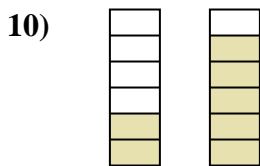
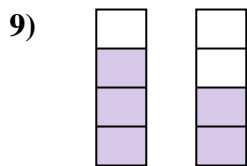
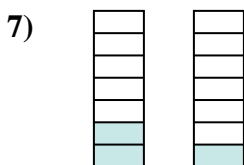
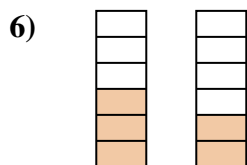
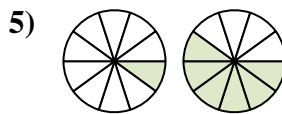
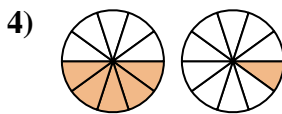
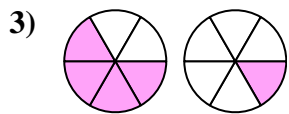
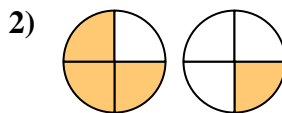
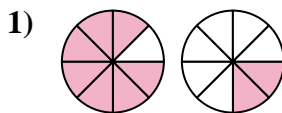
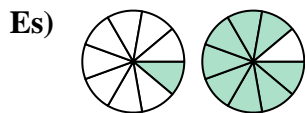
12. $\frac{3}{10} < \frac{6}{10}$

13. $\frac{8}{10} < \frac{9}{10}$

14. $\frac{1}{4} < \frac{2}{4}$



Confronta le dimensioni delle frazioni usando ">", "<" o "=".



Risposte

Es. $\frac{1}{9} < \frac{8}{9}$

1. _____

2. _____

3. _____

4. _____

5. _____

6. _____

7. _____

8. _____

9. _____

10. _____

11. _____

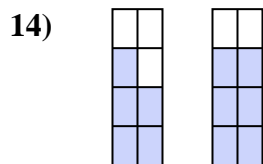
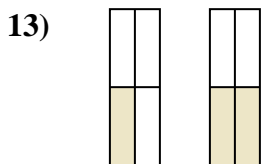
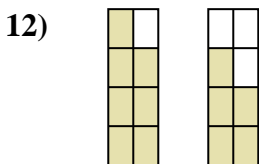
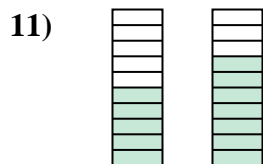
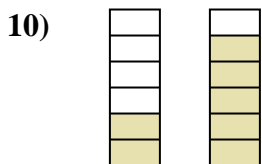
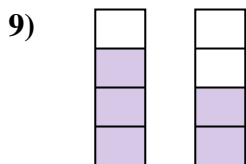
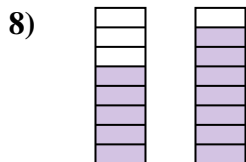
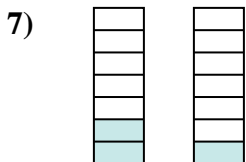
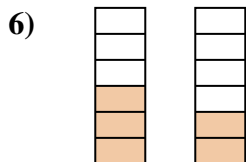
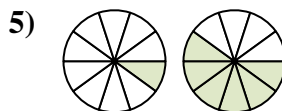
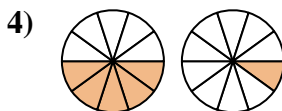
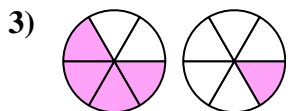
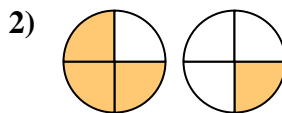
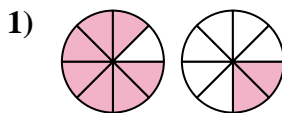
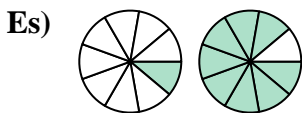
12. _____

13. _____

14. _____



Confronta le dimensioni delle frazioni usando ">", "<" o "=".



Risposte

Es. $\frac{1}{9} < \frac{8}{9}$

1. $\frac{7}{8} > \frac{2}{8}$

2. $\frac{3}{4} > \frac{1}{4}$

3. $\frac{4}{6} > \frac{1}{6}$

4. $\frac{5}{10} > \frac{1}{10}$

5. $\frac{1}{10} < \frac{6}{10}$

6. $\frac{3}{6} > \frac{2}{6}$

7. $\frac{2}{7} > \frac{1}{7}$

8. $\frac{5}{8} < \frac{7}{8}$

9. $\frac{3}{4} > \frac{2}{4}$

10. $\frac{2}{6} < \frac{5}{6}$

11. $\frac{5}{10} < \frac{7}{10}$

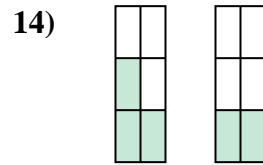
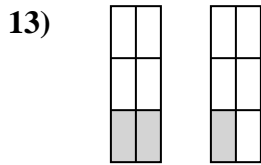
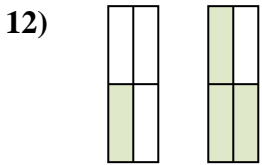
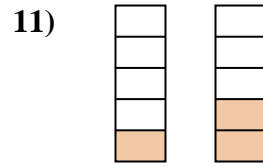
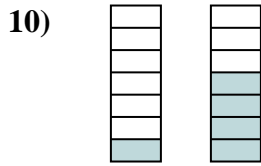
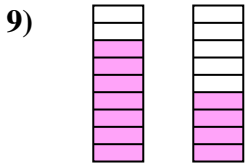
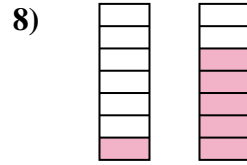
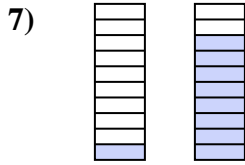
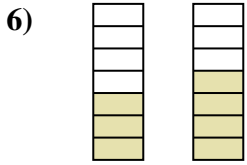
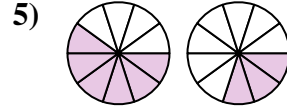
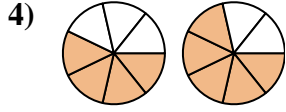
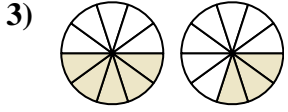
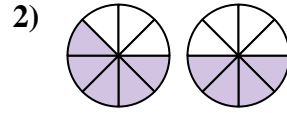
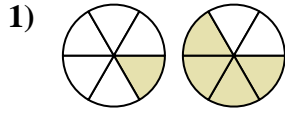
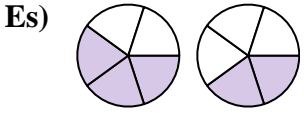
12. $\frac{7}{8} > \frac{5}{8}$

13. $\frac{1}{4} < \frac{2}{4}$

14. $\frac{5}{8} < \frac{6}{8}$



Confronta le dimensioni delle frazioni usando ">", "<" o "=".



Risposte

Es. $\frac{3}{5} > \frac{2}{5}$

1. _____

2. _____

3. _____

4. _____

5. _____

6. _____

7. _____

8. _____

9. _____

10. _____

11. _____

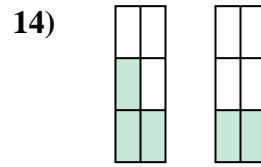
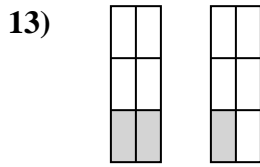
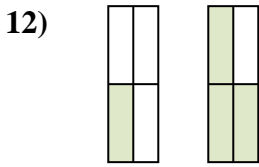
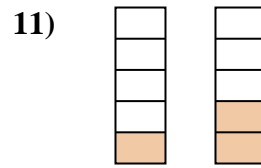
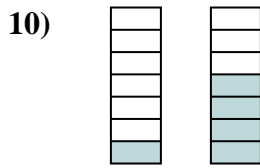
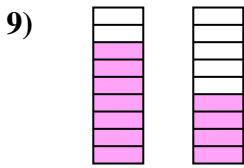
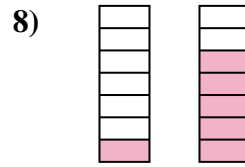
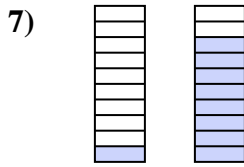
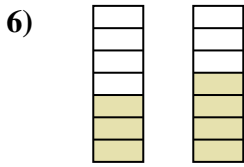
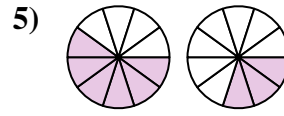
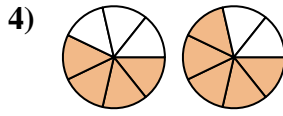
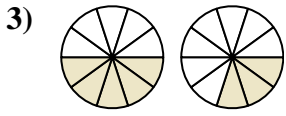
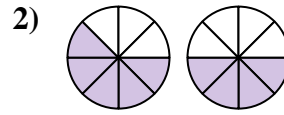
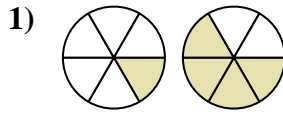
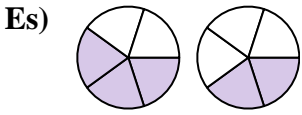
12. _____

13. _____

14. _____



Confronta le dimensioni delle frazioni usando ">", "<" o "=".



Risposte

Es. $\frac{3}{5} > \frac{2}{5}$

1. $\frac{1}{6} < \frac{4}{6}$

2. $\frac{5}{8} > \frac{4}{8}$

3. $\frac{5}{10} > \frac{3}{10}$

4. $\frac{4}{7} < \frac{5}{7}$

5. $\frac{6}{10} > \frac{3}{10}$

6. $\frac{3}{7} < \frac{4}{7}$

7. $\frac{1}{10} < \frac{8}{10}$

8. $\frac{1}{7} < \frac{5}{7}$

9. $\frac{7}{9} > \frac{4}{9}$

10. $\frac{1}{7} < \frac{4}{7}$

11. $\frac{1}{5} < \frac{2}{5}$

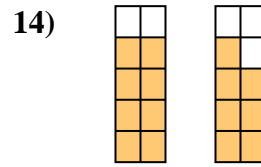
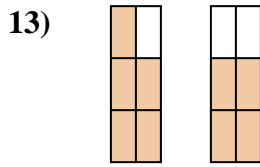
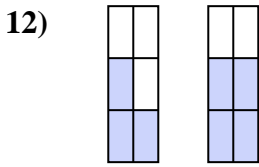
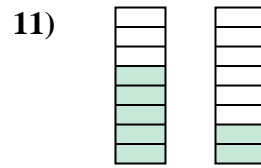
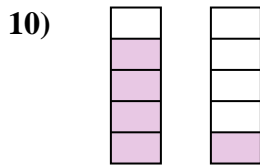
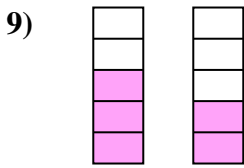
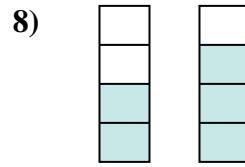
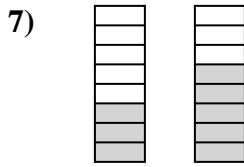
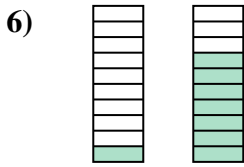
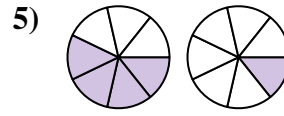
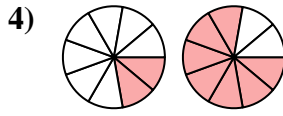
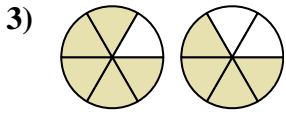
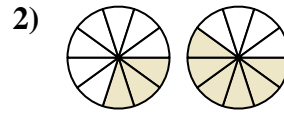
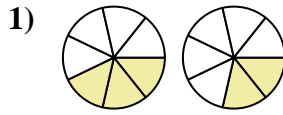
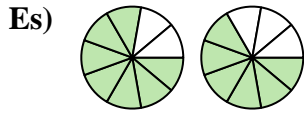
12. $\frac{1}{4} < \frac{3}{4}$

13. $\frac{2}{6} > \frac{1}{6}$

14. $\frac{3}{6} > \frac{2}{6}$



Confronta le dimensioni delle frazioni usando ">", "<" o "=".



Risposte

Es. $\frac{7}{9} > \frac{6}{9}$

1. _____

2. _____

3. _____

4. _____

5. _____

6. _____

7. _____

8. _____

9. _____

10. _____

11. _____

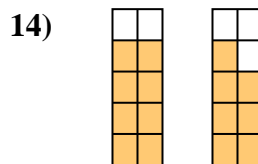
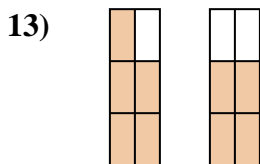
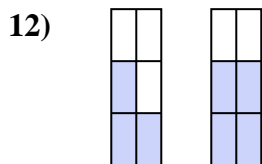
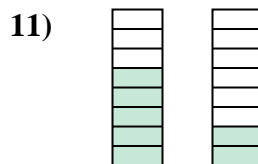
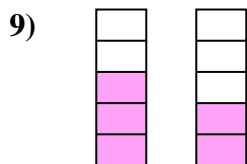
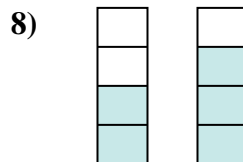
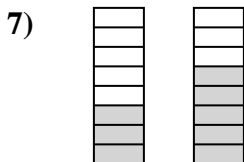
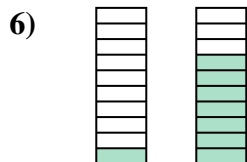
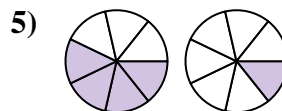
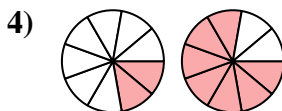
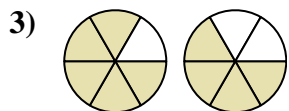
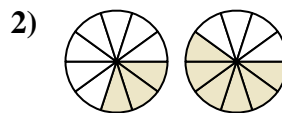
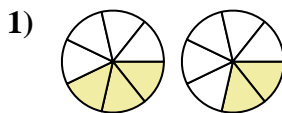
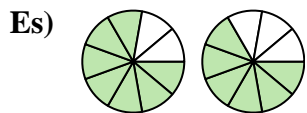
12. _____

13. _____

14. _____



Confronta le dimensioni delle frazioni usando ">", "<" o "=".



Risposte

Es. $\frac{7}{9} > \frac{6}{9}$

1. $\frac{3}{7} > \frac{2}{7}$

2. $\frac{3}{10} < \frac{6}{10}$

3. $\frac{5}{6} > \frac{4}{6}$

4. $\frac{2}{9} < \frac{7}{9}$

5. $\frac{4}{7} > \frac{1}{7}$

6. $\frac{1}{10} < \frac{7}{10}$

7. $\frac{3}{8} < \frac{5}{8}$

8. $\frac{2}{4} < \frac{3}{4}$

9. $\frac{3}{5} > \frac{2}{5}$

10. $\frac{4}{5} > \frac{1}{5}$

11. $\frac{5}{8} > \frac{2}{8}$

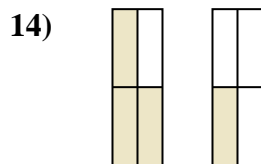
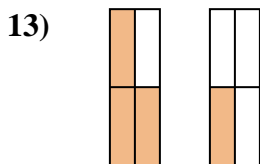
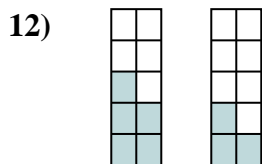
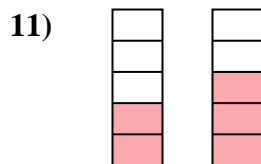
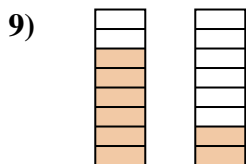
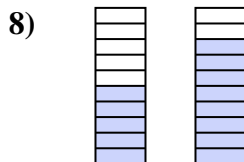
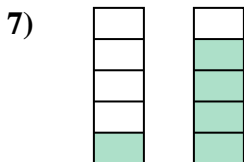
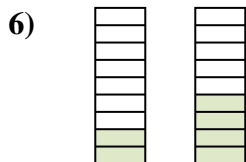
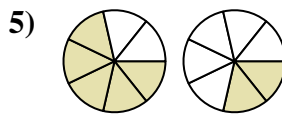
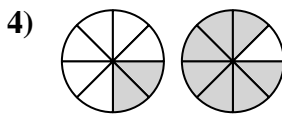
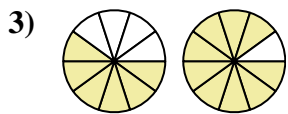
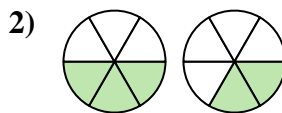
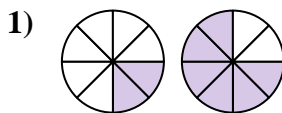
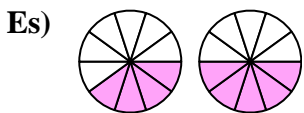
12. $\frac{3}{6} < \frac{4}{6}$

13. $\frac{5}{6} > \frac{4}{6}$

14. $\frac{8}{10} > \frac{7}{10}$



Confronta le dimensioni delle frazioni usando ">", "<" o "=".



Risposte

Es. $\frac{4}{10} < \frac{5}{10}$

1. _____

2. _____

3. _____

4. _____

5. _____

6. _____

7. _____

8. _____

9. _____

10. _____

11. _____

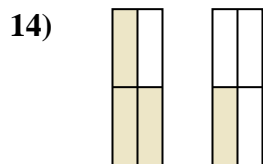
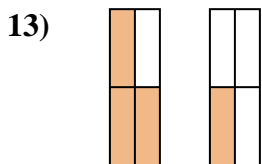
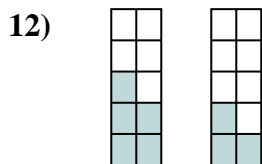
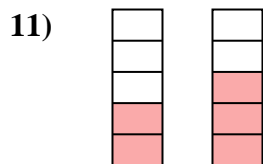
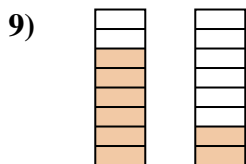
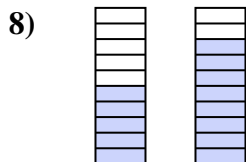
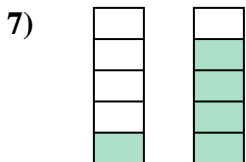
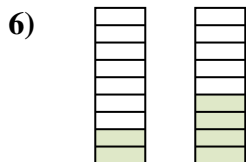
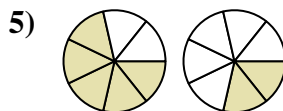
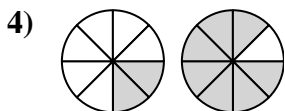
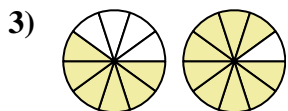
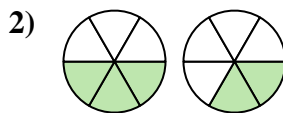
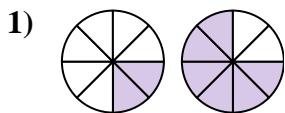
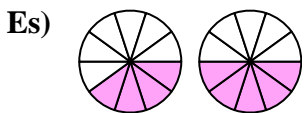
12. _____

13. _____

14. _____



Confronta le dimensioni delle frazioni usando ">", "<" o "=".



Risposte

Es. $\frac{4}{10} < \frac{5}{10}$

1. $\frac{2}{8} < \frac{6}{8}$

2. $\frac{3}{6} > \frac{2}{6}$

3. $\frac{6}{10} < \frac{9}{10}$

4. $\frac{2}{8} < \frac{7}{8}$

5. $\frac{5}{7} > \frac{2}{7}$

6. $\frac{2}{9} < \frac{4}{9}$

7. $\frac{1}{5} < \frac{4}{5}$

8. $\frac{5}{10} < \frac{8}{10}$

9. $\frac{6}{8} > \frac{2}{8}$

10. $\frac{5}{6} > \frac{4}{6}$

11. $\frac{2}{5} < \frac{3}{5}$

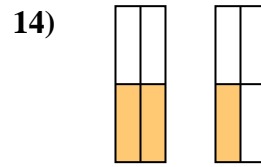
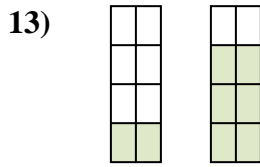
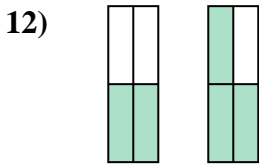
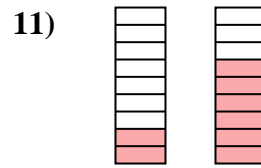
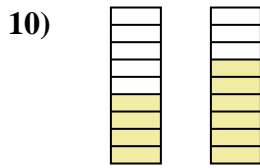
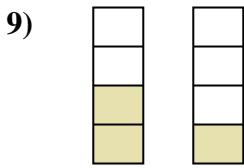
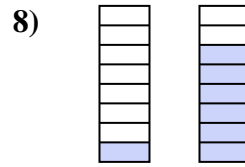
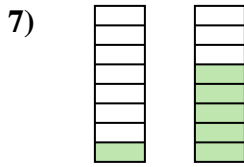
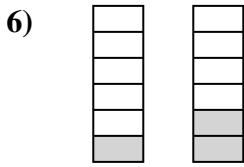
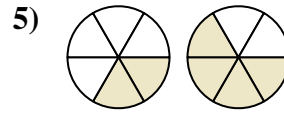
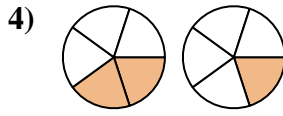
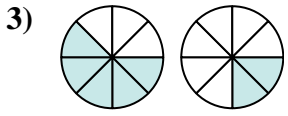
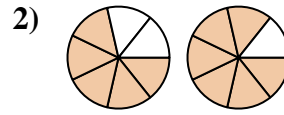
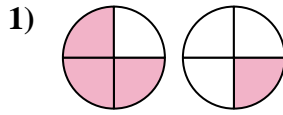
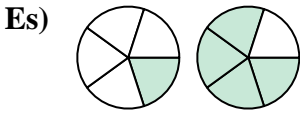
12. $\frac{5}{10} > \frac{3}{10}$

13. $\frac{3}{4} > \frac{1}{4}$

14. $\frac{3}{4} > \frac{1}{4}$



Confronta le dimensioni delle frazioni usando ">", "<" o "=".



Risposte

Es. $\frac{1}{5} < \frac{4}{5}$

1. _____

2. _____

3. _____

4. _____

5. _____

6. _____

7. _____

8. _____

9. _____

10. _____

11. _____

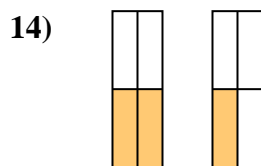
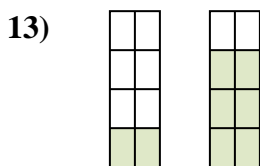
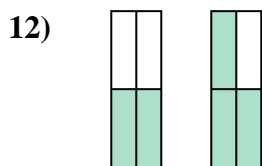
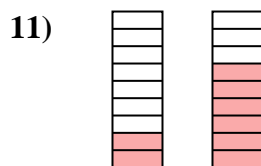
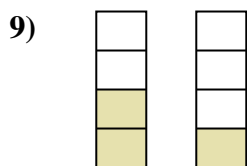
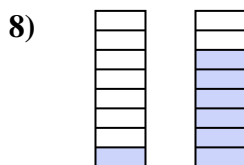
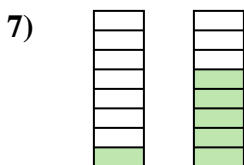
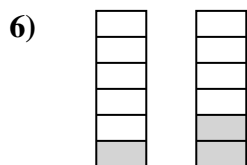
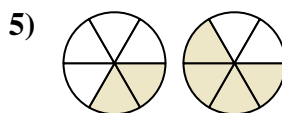
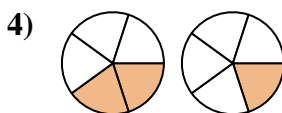
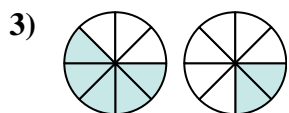
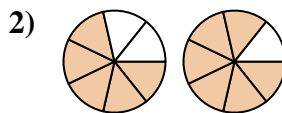
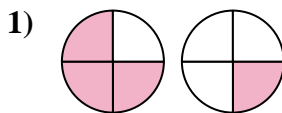
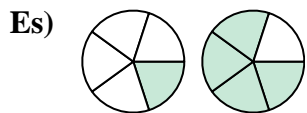
12. _____

13. _____

14. _____



Confronta le dimensioni delle frazioni usando ">", "<" o "=".



Risposte

Es. $\frac{1}{5} < \frac{4}{5}$

1. $\frac{3}{4} > \frac{1}{4}$

2. $\frac{5}{7} < \frac{6}{7}$

3. $\frac{5}{8} > \frac{2}{8}$

4. $\frac{2}{5} > \frac{1}{5}$

5. $\frac{2}{6} < \frac{4}{6}$

6. $\frac{1}{6} < \frac{2}{6}$

7. $\frac{1}{8} < \frac{5}{8}$

8. $\frac{1}{8} < \frac{6}{8}$

9. $\frac{2}{4} > \frac{1}{4}$

10. $\frac{4}{9} < \frac{6}{9}$

11. $\frac{2}{9} < \frac{6}{9}$

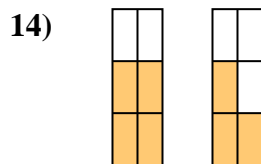
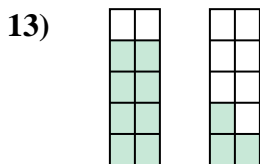
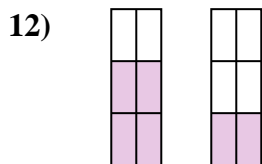
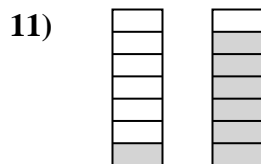
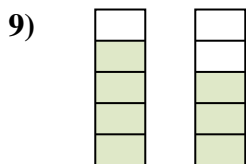
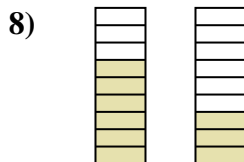
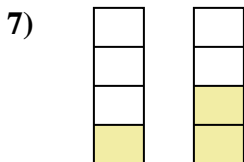
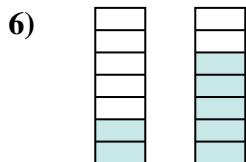
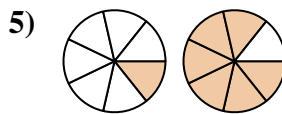
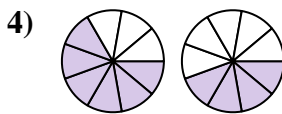
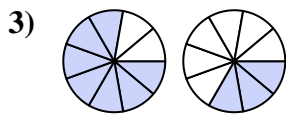
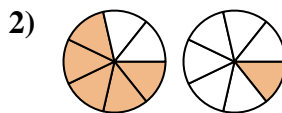
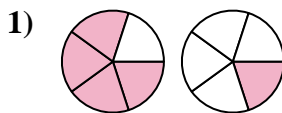
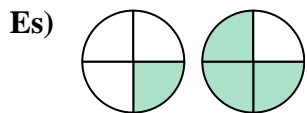
12. $\frac{2}{4} < \frac{3}{4}$

13. $\frac{2}{8} < \frac{6}{8}$

14. $\frac{2}{4} > \frac{1}{4}$



Confronta le dimensioni delle frazioni usando ">", "<" o "=".



Risposte

Es. $\frac{1}{4} < \frac{3}{4}$

1. _____

2. _____

3. _____

4. _____

5. _____

6. _____

7. _____

8. _____

9. _____

10. _____

11. _____

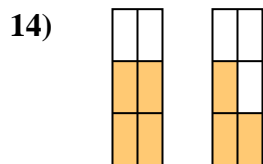
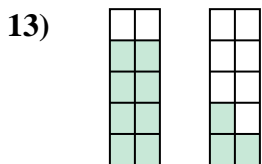
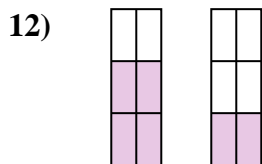
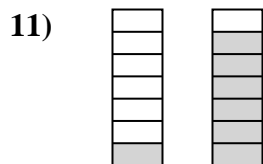
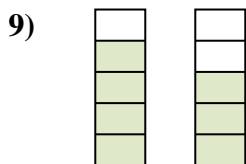
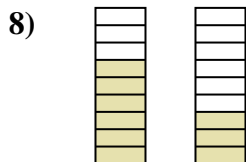
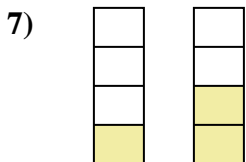
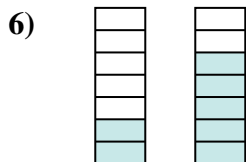
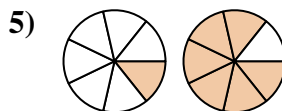
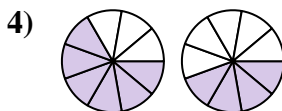
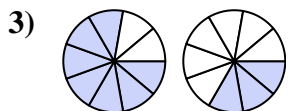
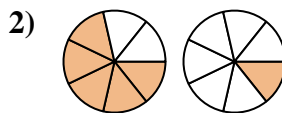
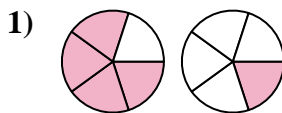
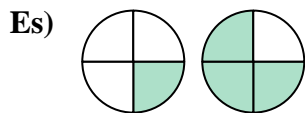
12. _____

13. _____

14. _____



Confronta le dimensioni delle frazioni usando ">", "<" o "=".



Risposte

Es. $\frac{1}{4} < \frac{3}{4}$

1. $\frac{4}{5} > \frac{1}{5}$

2. $\frac{5}{7} > \frac{1}{7}$

3. $\frac{7}{9} > \frac{3}{9}$

4. $\frac{6}{9} > \frac{4}{9}$

5. $\frac{1}{7} < \frac{6}{7}$

6. $\frac{2}{7} < \frac{5}{7}$

7. $\frac{1}{4} < \frac{2}{4}$

8. $\frac{6}{9} > \frac{3}{9}$

9. $\frac{4}{5} > \frac{3}{5}$

10. $\frac{8}{9} > \frac{2}{9}$

11. $\frac{1}{7} < \frac{6}{7}$

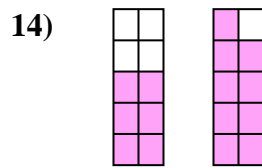
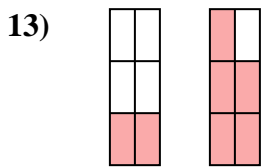
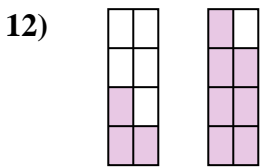
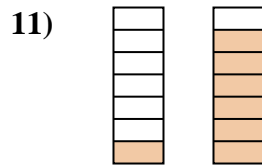
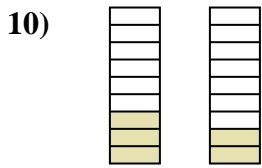
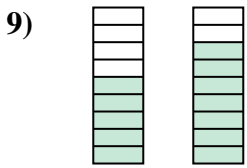
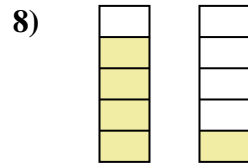
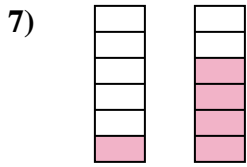
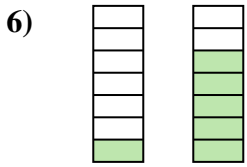
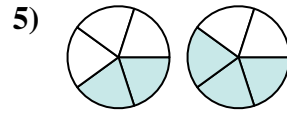
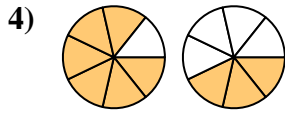
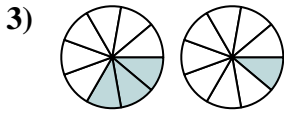
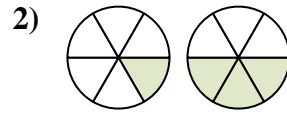
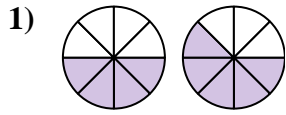
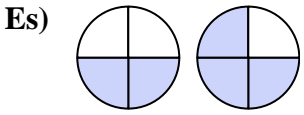
12. $\frac{4}{6} > \frac{2}{6}$

13. $\frac{8}{10} > \frac{3}{10}$

14. $\frac{4}{6} > \frac{3}{6}$



Confronta le dimensioni delle frazioni usando ">", "<" o "=".



Risposte

Es. $\frac{2}{4} < \frac{3}{4}$

1. _____

2. _____

3. _____

4. _____

5. _____

6. _____

7. _____

8. _____

9. _____

10. _____

11. _____

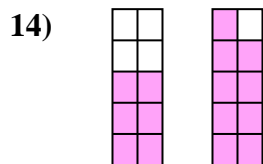
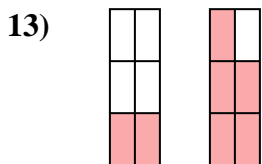
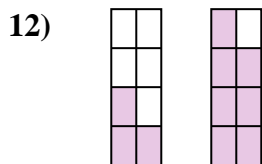
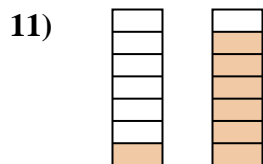
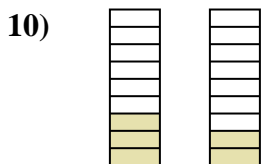
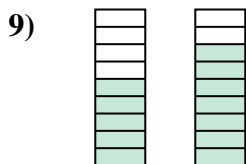
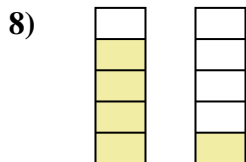
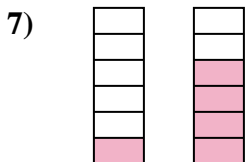
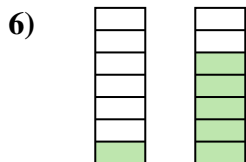
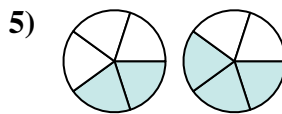
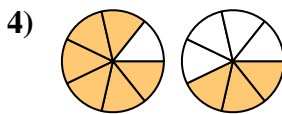
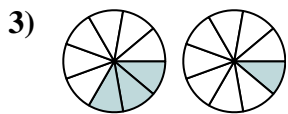
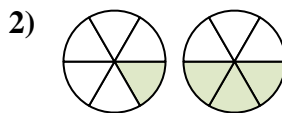
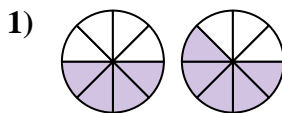
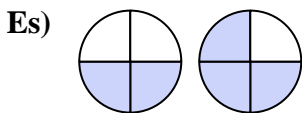
12. _____

13. _____

14. _____



Confronta le dimensioni delle frazioni usando ">", "<" o "=".



Risposte

Es. $\frac{2}{4} < \frac{3}{4}$

1. $\frac{4}{8} < \frac{5}{8}$

2. $\frac{1}{6} < \frac{3}{6}$

3. $\frac{3}{9} > \frac{1}{9}$

4. $\frac{6}{7} > \frac{3}{7}$

5. $\frac{2}{5} < \frac{3}{5}$

6. $\frac{1}{7} < \frac{5}{7}$

7. $\frac{1}{6} < \frac{4}{6}$

8. $\frac{4}{5} > \frac{1}{5}$

9. $\frac{5}{9} < \frac{7}{9}$

10. $\frac{3}{9} > \frac{2}{9}$

11. $\frac{1}{7} < \frac{6}{7}$

12. $\frac{3}{8} < \frac{7}{8}$

13. $\frac{2}{6} < \frac{5}{6}$

14. $\frac{6}{10} < \frac{9}{10}$