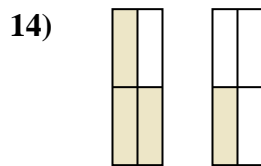
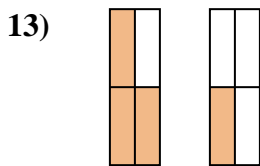
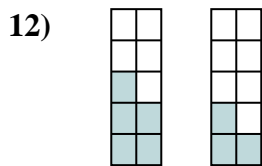
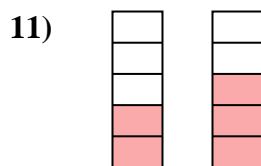
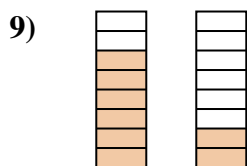
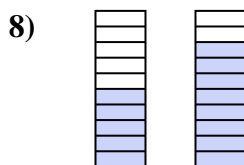
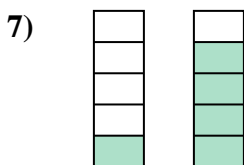
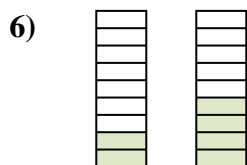
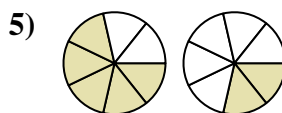
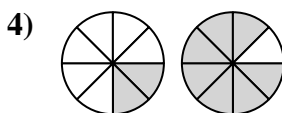
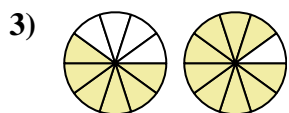
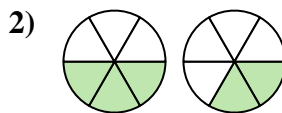
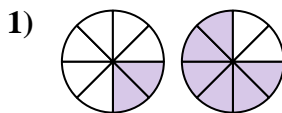
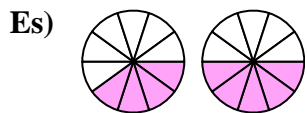




Confronta le dimensioni delle frazioni usando ">", "<" o "=".



Risposte

Es. $\frac{4}{10} < \frac{5}{10}$

1. _____

2. _____

3. _____

4. _____

5. _____

6. _____

7. _____

8. _____

9. _____

10. _____

11. _____

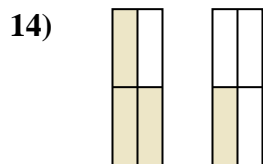
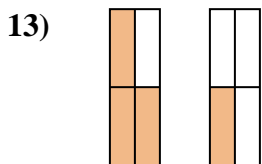
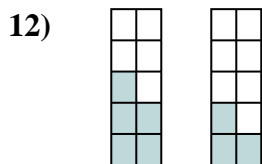
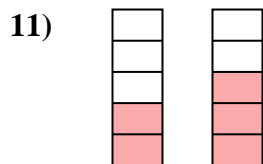
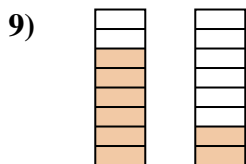
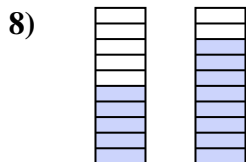
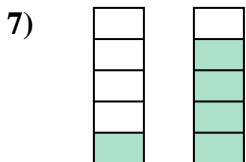
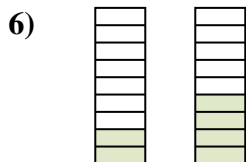
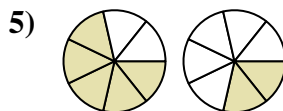
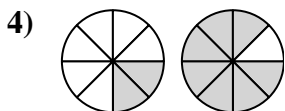
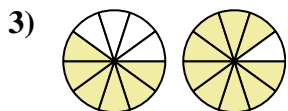
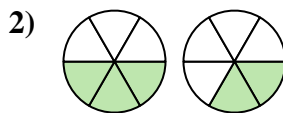
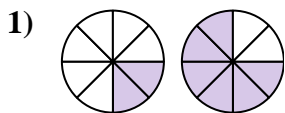
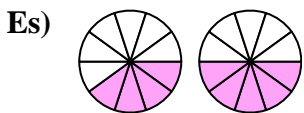
12. _____

13. _____

14. _____



Confronta le dimensioni delle frazioni usando ">", "<" o "=".



Risposte

Es. $\frac{4}{10} < \frac{5}{10}$

1. $\frac{2}{8} < \frac{6}{8}$

2. $\frac{3}{6} > \frac{2}{6}$

3. $\frac{6}{10} < \frac{9}{10}$

4. $\frac{2}{8} < \frac{7}{8}$

5. $\frac{5}{7} > \frac{2}{7}$

6. $\frac{2}{9} < \frac{4}{9}$

7. $\frac{1}{5} < \frac{4}{5}$

8. $\frac{5}{10} < \frac{8}{10}$

9. $\frac{6}{8} > \frac{2}{8}$

10. $\frac{5}{6} > \frac{4}{6}$

11. $\frac{2}{5} < \frac{3}{5}$

12. $\frac{5}{10} > \frac{3}{10}$

13. $\frac{3}{4} > \frac{1}{4}$

14. $\frac{3}{4} > \frac{1}{4}$