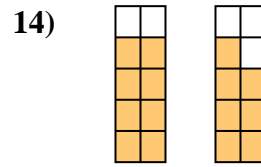
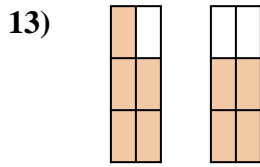
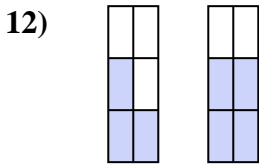
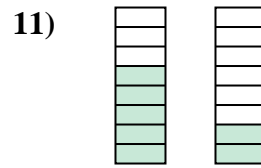
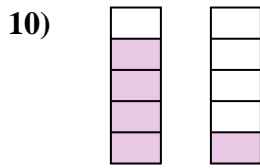
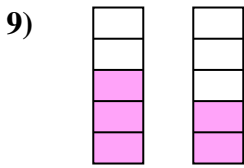
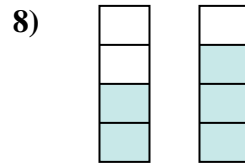
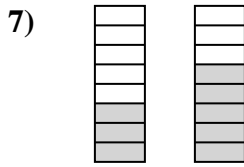
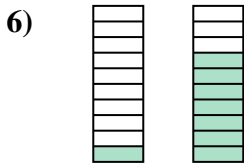
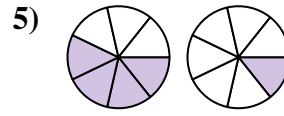
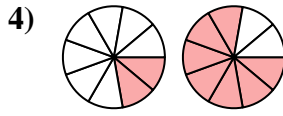
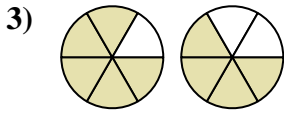
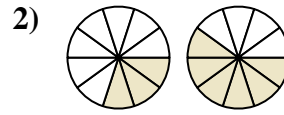
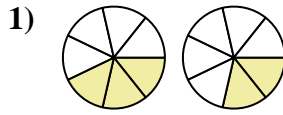
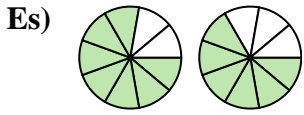




Confronta le dimensioni delle frazioni usando ">", "<" o "=".



Risposte

Es. $\frac{7}{9} > \frac{6}{9}$

1. _____

2. _____

3. _____

4. _____

5. _____

6. _____

7. _____

8. _____

9. _____

10. _____

11. _____

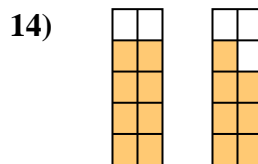
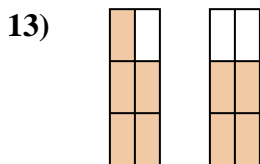
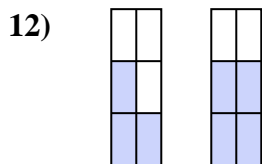
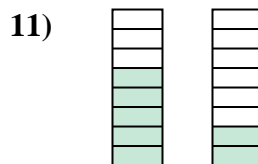
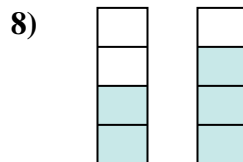
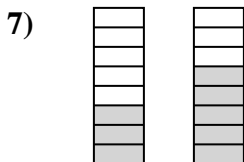
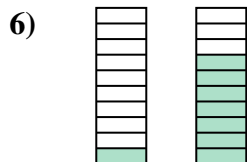
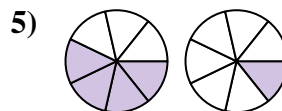
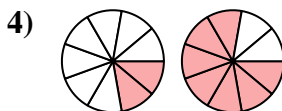
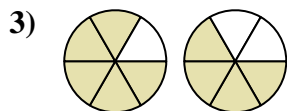
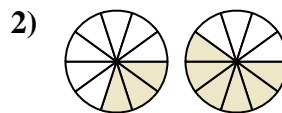
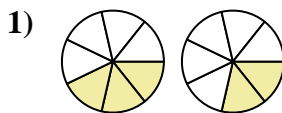
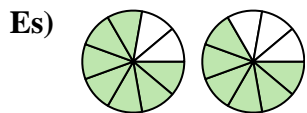
12. _____

13. _____

14. _____



Confronta le dimensioni delle frazioni usando ">", "<" o "=".



Risposte

Es. $\frac{7}{9} > \frac{6}{9}$

1. $\frac{3}{7} > \frac{2}{7}$

2. $\frac{3}{10} < \frac{6}{10}$

3. $\frac{5}{6} > \frac{4}{6}$

4. $\frac{2}{9} < \frac{7}{9}$

5. $\frac{4}{7} > \frac{1}{7}$

6. $\frac{1}{10} < \frac{7}{10}$

7. $\frac{3}{8} < \frac{5}{8}$

8. $\frac{2}{4} < \frac{3}{4}$

9. $\frac{3}{5} > \frac{2}{5}$

10. $\frac{4}{5} > \frac{1}{5}$

11. $\frac{5}{8} > \frac{2}{8}$

12. $\frac{3}{6} < \frac{4}{6}$

13. $\frac{5}{6} > \frac{4}{6}$

14. $\frac{8}{10} > \frac{7}{10}$