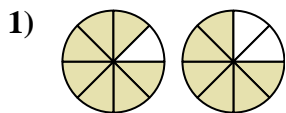
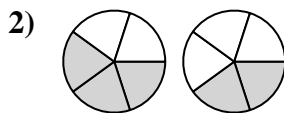




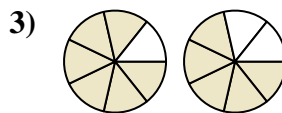
Determina quale lettera esprime correttamente la relazione tra i grafici.



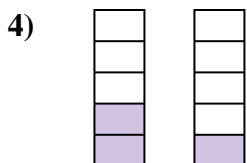
- A. $\frac{7}{1} > \frac{6}{2}$
- B. $\frac{7}{8} > \frac{6}{8}$
- C. $\frac{7}{1} < \frac{6}{2}$
- D. $\frac{1}{7} < \frac{2}{6}$



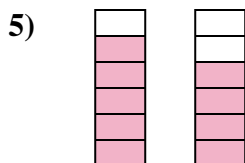
- A. $\frac{5}{3} > \frac{5}{2}$
- B. $\frac{3}{2} < \frac{2}{3}$
- C. $\frac{3}{5} > \frac{2}{5}$
- D. $\frac{3}{2} > \frac{2}{3}$



- A. $\frac{7}{6} > \frac{7}{5}$
- B. $\frac{6}{7} < \frac{5}{7}$
- C. $\frac{6}{7} > \frac{5}{7}$
- D. $\frac{1}{6} > \frac{2}{5}$



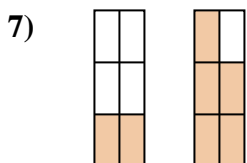
- A. $\frac{2}{5} > \frac{1}{5}$
- B. $\frac{3}{2} < \frac{4}{1}$
- C. $\frac{2}{3} > \frac{1}{4}$
- D. $\frac{2}{3} < \frac{1}{4}$



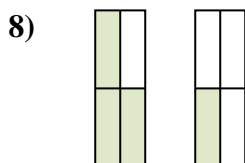
- A. $\frac{5}{6} > \frac{4}{6}$
- B. $\frac{5}{1} < \frac{4}{2}$
- C. $\frac{1}{5} < \frac{2}{4}$
- D. $\frac{1}{5} > \frac{2}{4}$



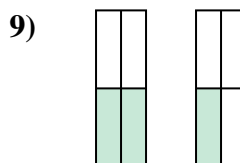
- A. $\frac{2}{3} < \frac{1}{4}$
- B. $\frac{3}{5} > \frac{4}{5}$
- C. $\frac{3}{2} > \frac{4}{1}$
- D. $\frac{3}{5} < \frac{4}{5}$



- A. $\frac{4}{2} < \frac{1}{5}$
- B. $\frac{2}{6} < \frac{5}{6}$
- C. $\frac{4}{2} > \frac{1}{5}$
- D. $\frac{2}{4} > \frac{5}{1}$



- A. $\frac{1}{3} < \frac{3}{1}$
- B. $\frac{3}{4} > \frac{1}{4}$
- C. $\frac{3}{4} < \frac{1}{4}$
- D. $\frac{3}{1} > \frac{1}{3}$



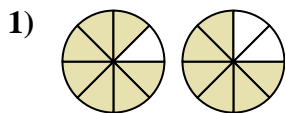
- A. $\frac{2}{4} > \frac{1}{4}$
- B. $\frac{2}{4} < \frac{1}{4}$
- C. $\frac{2}{2} < \frac{1}{3}$
- D. $\frac{4}{2} > \frac{4}{1}$

Risposte

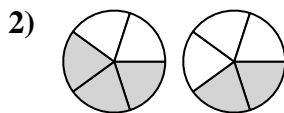
- 1. _____
- 2. _____
- 3. _____
- 4. _____
- 5. _____
- 6. _____
- 7. _____
- 8. _____
- 9. _____



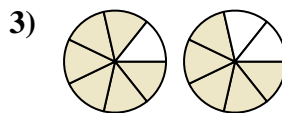
Determina quale lettera esprime correttamente la relazione tra i grafici.



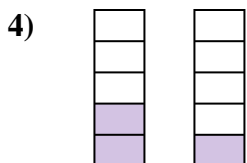
- A. $\frac{7}{1} > \frac{6}{2}$
 B. $\frac{7}{8} > \frac{6}{8}$
 C. $\frac{7}{1} < \frac{6}{2}$
 D. $\frac{1}{7} < \frac{2}{6}$



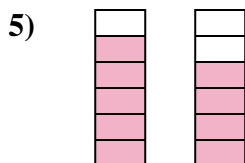
- A. $\frac{5}{3} > \frac{5}{2}$
 B. $\frac{3}{2} < \frac{2}{3}$
 C. $\frac{3}{5} > \frac{2}{5}$
 D. $\frac{3}{2} > \frac{2}{3}$



- A. $\frac{7}{6} > \frac{7}{5}$
 B. $\frac{6}{7} < \frac{5}{7}$
 C. $\frac{6}{7} > \frac{5}{7}$
 D. $\frac{1}{6} > \frac{2}{5}$



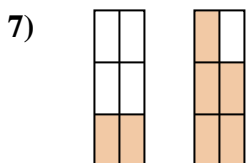
- A. $\frac{2}{5} > \frac{1}{5}$
 B. $\frac{3}{2} < \frac{4}{1}$
 C. $\frac{2}{3} > \frac{1}{4}$
 D. $\frac{2}{3} < \frac{1}{4}$



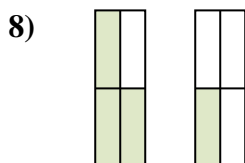
- A. $\frac{5}{6} > \frac{4}{6}$
 B. $\frac{5}{1} < \frac{4}{2}$
 C. $\frac{1}{5} < \frac{2}{4}$
 D. $\frac{1}{5} > \frac{2}{4}$



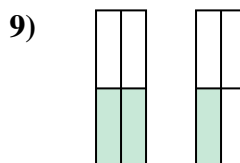
- A. $\frac{2}{3} < \frac{1}{4}$
 B. $\frac{3}{5} > \frac{4}{5}$
 C. $\frac{3}{2} > \frac{4}{1}$
 D. $\frac{3}{5} < \frac{4}{5}$



- A. $\frac{4}{2} < \frac{1}{5}$
 B. $\frac{2}{6} < \frac{5}{6}$
 C. $\frac{4}{2} > \frac{1}{5}$
 D. $\frac{2}{4} > \frac{5}{1}$



- A. $\frac{1}{3} < \frac{3}{1}$
 B. $\frac{3}{4} > \frac{1}{4}$
 C. $\frac{3}{4} < \frac{1}{4}$
 D. $\frac{3}{1} > \frac{1}{3}$



- A. $\frac{2}{4} > \frac{1}{4}$
 B. $\frac{2}{4} < \frac{1}{4}$
 C. $\frac{2}{2} < \frac{1}{3}$
 D. $\frac{4}{2} > \frac{4}{1}$

Risposte

1. **B**
 2. **C**
 3. **C**
 4. **A**
 5. **A**
 6. **D**
 7. **B**
 8. **B**
 9. **A**