

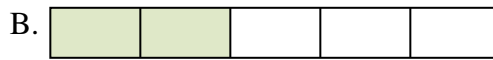


Collega ogni equazione alla sua risposta corretta e scrivi la risposta.

Es)  $\frac{1}{12} + \frac{1}{12}$



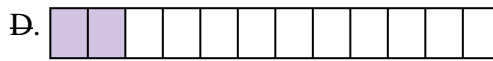
1)  $\frac{1}{4} + \frac{1}{4} + \frac{1}{4}$




2)  $\frac{1}{5} + \frac{1}{5}$



3)  $\frac{1}{3} + \frac{1}{3}$




4)  $\frac{1}{12} + \frac{1}{12} + \frac{1}{12} + \frac{1}{12} + \frac{1}{12} + \frac{1}{12} + \frac{1}{12}$




5)  $\frac{1}{5} + \frac{1}{5} + \frac{1}{5} + \frac{1}{5}$




6)  $\frac{1}{12} + \frac{1}{12} + \frac{1}{12} + \frac{1}{12}$




7)  $\frac{1}{6} + \frac{1}{6} + \frac{1}{6} + \frac{1}{6}$




8)  $\frac{1}{8} + \frac{1}{8}$




9)  $\frac{1}{12} + \frac{1}{12} + \frac{1}{12} + \frac{1}{12} + \frac{1}{12}$



10)  $\frac{1}{5} + \frac{1}{5} + \frac{1}{5}$




11)  $\frac{1}{10} + \frac{1}{10} + \frac{1}{10} + \frac{1}{10} + \frac{1}{10} + \frac{1}{10} + \frac{1}{10}$



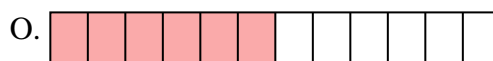
12)  $\frac{1}{8} + \frac{1}{8} + \frac{1}{8} + \frac{1}{8} + \frac{1}{8} + \frac{1}{8} + \frac{1}{8}$



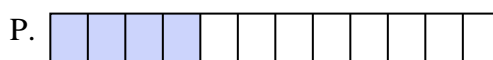
13)  $\frac{1}{4} + \frac{1}{4}$



14)  $\frac{1}{8} + \frac{1}{8} + \frac{1}{8} + \frac{1}{8} + \frac{1}{8} + \frac{1}{8}$



15)  $\frac{1}{12} + \frac{1}{12} + \frac{1}{12} + \frac{1}{12} + \frac{1}{12} + \frac{1}{12}$

**Risposte**Es. **D**  $\frac{2}{12}$ 

1. \_\_\_\_\_

2. \_\_\_\_\_

3. \_\_\_\_\_

4. \_\_\_\_\_

5. \_\_\_\_\_

6. \_\_\_\_\_

7. \_\_\_\_\_

8. \_\_\_\_\_

9. \_\_\_\_\_

10. \_\_\_\_\_

11. \_\_\_\_\_

12. \_\_\_\_\_

13. \_\_\_\_\_

14. \_\_\_\_\_

15. \_\_\_\_\_

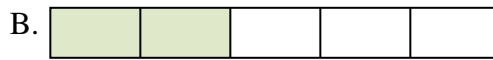


Collega ogni equazione alla sua risposta corretta e scrivi la risposta.

Es)  $\frac{1}{12} + \frac{1}{12}$



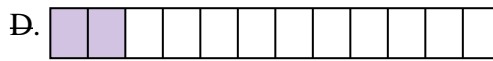
1)  $\frac{1}{4} + \frac{1}{4} + \frac{1}{4}$




2)  $\frac{1}{5} + \frac{1}{5}$



3)  $\frac{1}{3} + \frac{1}{3}$




4)  $\frac{1}{12} + \frac{1}{12} + \frac{1}{12} + \frac{1}{12} + \frac{1}{12} + \frac{1}{12} + \frac{1}{12}$




5)  $\frac{1}{5} + \frac{1}{5} + \frac{1}{5} + \frac{1}{5}$




6)  $\frac{1}{12} + \frac{1}{12} + \frac{1}{12} + \frac{1}{12}$




7)  $\frac{1}{6} + \frac{1}{6} + \frac{1}{6} + \frac{1}{6}$




8)  $\frac{1}{8} + \frac{1}{8}$




9)  $\frac{1}{12} + \frac{1}{12} + \frac{1}{12} + \frac{1}{12} + \frac{1}{12}$



10)  $\frac{1}{5} + \frac{1}{5} + \frac{1}{5}$




11)  $\frac{1}{10} + \frac{1}{10} + \frac{1}{10} + \frac{1}{10} + \frac{1}{10} + \frac{1}{10} + \frac{1}{10}$



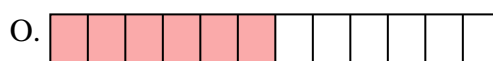
12)  $\frac{1}{8} + \frac{1}{8} + \frac{1}{8} + \frac{1}{8} + \frac{1}{8} + \frac{1}{8} + \frac{1}{8}$



13)  $\frac{1}{4} + \frac{1}{4}$



14)  $\frac{1}{8} + \frac{1}{8} + \frac{1}{8} + \frac{1}{8} + \frac{1}{8} + \frac{1}{8}$



15)  $\frac{1}{12} + \frac{1}{12} + \frac{1}{12} + \frac{1}{12} + \frac{1}{12} + \frac{1}{12}$

**Risposte**

Es. **D**  $\frac{2}{12}$

1. **H**  $\frac{3}{4}$

2. **B**  $\frac{2}{5}$

3. **F**  $\frac{2}{3}$

4. **L**  $\frac{7}{12}$

5. **N**  $\frac{4}{5}$

6. **P**  $\frac{4}{12}$

7. **C**  $\frac{4}{6}$

8. **M**  $\frac{2}{8}$

9. **J**  $\frac{5}{12}$

10. **G**  $\frac{3}{5}$

11. **E**  $\frac{7}{10}$

12. **K**  $\frac{7}{8}$

13. **A**  $\frac{2}{4}$

14. **I**  $\frac{6}{8}$

15. **O**  $\frac{6}{12}$



Collega ogni equazione alla sua risposta corretta e scrivi la risposta.

Es)  $\frac{1}{6} + \frac{1}{6} + \frac{1}{6} + \frac{1}{6}$



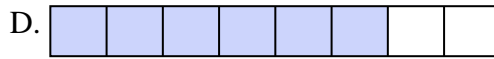
1)  $\frac{1}{8} + \frac{1}{8} + \frac{1}{8} + \frac{1}{8} + \frac{1}{8} + \frac{1}{8}$



2)  $\frac{1}{5} + \frac{1}{5} + \frac{1}{5}$




3)  $\frac{1}{8} + \frac{1}{8} + \frac{1}{8} + \frac{1}{8}$



4)  $\frac{1}{3} + \frac{1}{3}$



5)  $\frac{1}{12} + \frac{1}{12} + \frac{1}{12} + \frac{1}{12} + \frac{1}{12} + \frac{1}{12}$



6)  $\frac{1}{4} + \frac{1}{4}$




7)  $\frac{1}{4} + \frac{1}{4} + \frac{1}{4}$



8)  $\frac{1}{12} + \frac{1}{12}$



9)  $\frac{1}{12} + \frac{1}{12} + \frac{1}{12} + \frac{1}{12}$



10)  $\frac{1}{5} + \frac{1}{5}$




11)  $\frac{1}{6} + \frac{1}{6} + \frac{1}{6}$




12)  $\frac{1}{10} + \frac{1}{10} + \frac{1}{10} + \frac{1}{10}$




13)  $\frac{1}{6} + \frac{1}{6}$



14)  $\frac{1}{5} + \frac{1}{5} + \frac{1}{5} + \frac{1}{5}$



15)  $\frac{1}{12} + \frac{1}{12} + \frac{1}{12}$

**Risposte**Es. P  $\frac{4}{6}$ 

1. \_\_\_\_\_

2. \_\_\_\_\_

3. \_\_\_\_\_

4. \_\_\_\_\_

5. \_\_\_\_\_

6. \_\_\_\_\_

7. \_\_\_\_\_

8. \_\_\_\_\_

9. \_\_\_\_\_

10. \_\_\_\_\_

11. \_\_\_\_\_

12. \_\_\_\_\_

13. \_\_\_\_\_

14. \_\_\_\_\_

15. \_\_\_\_\_



Collega ogni equazione alla sua risposta corretta e scrivi la risposta.

Es)  $\frac{1}{6} + \frac{1}{6} + \frac{1}{6} + \frac{1}{6}$



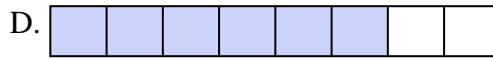
1)  $\frac{1}{8} + \frac{1}{8} + \frac{1}{8} + \frac{1}{8} + \frac{1}{8} + \frac{1}{8}$



2)  $\frac{1}{5} + \frac{1}{5} + \frac{1}{5}$




3)  $\frac{1}{8} + \frac{1}{8} + \frac{1}{8} + \frac{1}{8}$



4)  $\frac{1}{3} + \frac{1}{3}$



5)  $\frac{1}{12} + \frac{1}{12} + \frac{1}{12} + \frac{1}{12} + \frac{1}{12} + \frac{1}{12}$



6)  $\frac{1}{4} + \frac{1}{4}$



7)  $\frac{1}{4} + \frac{1}{4} + \frac{1}{4}$



8)  $\frac{1}{12} + \frac{1}{12}$



9)  $\frac{1}{12} + \frac{1}{12} + \frac{1}{12} + \frac{1}{12}$



10)  $\frac{1}{5} + \frac{1}{5}$




11)  $\frac{1}{6} + \frac{1}{6} + \frac{1}{6}$




12)  $\frac{1}{10} + \frac{1}{10} + \frac{1}{10} + \frac{1}{10}$



13)  $\frac{1}{6} + \frac{1}{6}$



14)  $\frac{1}{5} + \frac{1}{5} + \frac{1}{5} + \frac{1}{5}$



15)  $\frac{1}{12} + \frac{1}{12} + \frac{1}{12}$

**Risposte**

Es. **P**  $\frac{4}{6}$

1. **D**  $\frac{6}{8}$

2. **J**  $\frac{3}{5}$

3. **F**  $\frac{4}{8}$

4. **C**  $\frac{2}{3}$

5. **O**  $\frac{6}{12}$

6. **I**  $\frac{2}{4}$

7. **B**  $\frac{3}{4}$

8. **M**  $\frac{2}{12}$

9. **A**  $\frac{4}{12}$

10. **N**  $\frac{2}{5}$

11. **K**  $\frac{3}{6}$

12. **G**  $\frac{4}{10}$

13. **L**  $\frac{2}{6}$

14. **E**  $\frac{4}{5}$

15. **H**  $\frac{3}{12}$




Collega ogni equazione alla sua risposta corretta e scrivi la risposta.

Es)  $\frac{1}{5} + \frac{1}{5} + \frac{1}{5}$



1)  $\frac{1}{12} + \frac{1}{12} + \frac{1}{12} + \frac{1}{12} + \frac{1}{12} + \frac{1}{12} + \frac{1}{12}$




2)  $\frac{1}{10} + \frac{1}{10} + \frac{1}{10} + \frac{1}{10} + \frac{1}{10} + \frac{1}{10}$



3)  $\frac{1}{3} + \frac{1}{3}$



4)  $\frac{1}{6} + \frac{1}{6} + \frac{1}{6} + \frac{1}{6}$




5)  $\frac{1}{10} + \frac{1}{10}$




6)  $\frac{1}{8} + \frac{1}{8} + \frac{1}{8}$




7)  $\frac{1}{10} + \frac{1}{10} + \frac{1}{10} + \frac{1}{10} + \frac{1}{10} + \frac{1}{10} + \frac{1}{10}$



8)  $\frac{1}{4} + \frac{1}{4} + \frac{1}{4}$




9)  $\frac{1}{4} + \frac{1}{4}$



10)  $\frac{1}{6} + \frac{1}{6}$



11)  $\frac{1}{6} + \frac{1}{6} + \frac{1}{6} + \frac{1}{6} + \frac{1}{6}$



12)  $\frac{1}{6} + \frac{1}{6} + \frac{1}{6}$




13)  $\frac{1}{8} + \frac{1}{8}$



14)  $\frac{1}{8} + \frac{1}{8} + \frac{1}{8} + \frac{1}{8} + \frac{1}{8}$



15)  $\frac{1}{10} + \frac{1}{10} + \frac{1}{10}$

**Risposte**Es. J  $\frac{3}{5}$ 

1. \_\_\_\_\_

2. \_\_\_\_\_

3. \_\_\_\_\_

4. \_\_\_\_\_

5. \_\_\_\_\_

6. \_\_\_\_\_

7. \_\_\_\_\_

8. \_\_\_\_\_

9. \_\_\_\_\_

10. \_\_\_\_\_

11. \_\_\_\_\_

12. \_\_\_\_\_

13. \_\_\_\_\_


14. \_\_\_\_\_

15. \_\_\_\_\_



Collega ogni equazione alla sua risposta corretta e scrivi la risposta.


Es)  $\frac{1}{5} + \frac{1}{5} + \frac{1}{5}$



1)  $\frac{1}{12} + \frac{1}{12} + \frac{1}{12} + \frac{1}{12} + \frac{1}{12} + \frac{1}{12} + \frac{1}{12}$




2)  $\frac{1}{10} + \frac{1}{10} + \frac{1}{10} + \frac{1}{10} + \frac{1}{10} + \frac{1}{10}$




3)  $\frac{1}{3} + \frac{1}{3}$




4)  $\frac{1}{6} + \frac{1}{6} + \frac{1}{6} + \frac{1}{6}$



5)  $\frac{1}{10} + \frac{1}{10}$



6)  $\frac{1}{8} + \frac{1}{8} + \frac{1}{8}$




7)  $\frac{1}{10} + \frac{1}{10} + \frac{1}{10} + \frac{1}{10} + \frac{1}{10} + \frac{1}{10} + \frac{1}{10}$



8)  $\frac{1}{4} + \frac{1}{4} + \frac{1}{4}$




9)  $\frac{1}{4} + \frac{1}{4}$



10)  $\frac{1}{6} + \frac{1}{6}$



11)  $\frac{1}{6} + \frac{1}{6} + \frac{1}{6} + \frac{1}{6} + \frac{1}{6}$



12)  $\frac{1}{6} + \frac{1}{6} + \frac{1}{6}$



13)  $\frac{1}{8} + \frac{1}{8}$



14)  $\frac{1}{8} + \frac{1}{8} + \frac{1}{8} + \frac{1}{8} + \frac{1}{8}$



15)  $\frac{1}{10} + \frac{1}{10} + \frac{1}{10}$

**Risposte**

Es. **J**  $\frac{3}{5}$

1. **E**  $\frac{7}{12}$

2. **G**  $\frac{6}{10}$

3. **P**  $\frac{2}{3}$

4. **H**  $\frac{4}{6}$

5. **L**  $\frac{2}{10}$

6. **D**  $\frac{3}{8}$

7. **F**  $\frac{7}{10}$

8. **N**  $\frac{3}{4}$

9. **K**  $\frac{2}{4}$

10. **A**  $\frac{2}{6}$

11. **M**  $\frac{5}{6}$

12. **C**  $\frac{3}{6}$

13. **I**  $\frac{2}{8}$

14. **B**  $\frac{5}{8}$

15. **O**  $\frac{3}{10}$



Collega ogni equazione alla sua risposta corretta e scrivi la risposta.

Es)  $\frac{1}{6} + \frac{1}{6} + \frac{1}{6}$



1)  $\frac{1}{12} + \frac{1}{12}$



2)  $\frac{1}{8} + \frac{1}{8} + \frac{1}{8} + \frac{1}{8} + \frac{1}{8}$



3)  $\frac{1}{10} + \frac{1}{10} + \frac{1}{10}$



4)  $\frac{1}{4} + \frac{1}{4}$




5)  $\frac{1}{5} + \frac{1}{5}$



6)  $\frac{1}{8} + \frac{1}{8} + \frac{1}{8} + \frac{1}{8}$



7)  $\frac{1}{12} + \frac{1}{12} + \frac{1}{12} + \frac{1}{12} + \frac{1}{12} + \frac{1}{12} + \frac{1}{12}$




8)  $\frac{1}{5} + \frac{1}{5} + \frac{1}{5}$




9)  $\frac{1}{10} + \frac{1}{10}$



10)  $\frac{1}{12} + \frac{1}{12} + \frac{1}{12} + \frac{1}{12} + \frac{1}{12}$




11)  $\frac{1}{3} + \frac{1}{3}$



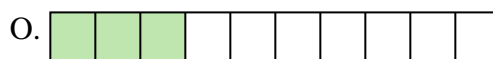
12)  $\frac{1}{10} + \frac{1}{10} + \frac{1}{10} + \frac{1}{10} + \frac{1}{10} + \frac{1}{10} + \frac{1}{10}$



13)  $\frac{1}{5} + \frac{1}{5} + \frac{1}{5} + \frac{1}{5}$



14)  $\frac{1}{6} + \frac{1}{6} + \frac{1}{6} + \frac{1}{6}$



15)  $\frac{1}{4} + \frac{1}{4} + \frac{1}{4}$

**Risposte**Es.     K     $\frac{3}{6}$ 

1. \_\_\_\_\_

2. \_\_\_\_\_

3. \_\_\_\_\_

4. \_\_\_\_\_

5. \_\_\_\_\_

6. \_\_\_\_\_

7. \_\_\_\_\_

8. \_\_\_\_\_

9. \_\_\_\_\_

10. \_\_\_\_\_

11. \_\_\_\_\_

12. \_\_\_\_\_

13. \_\_\_\_\_

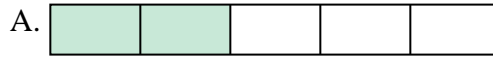
14. \_\_\_\_\_

15. \_\_\_\_\_



Collega ogni equazione alla sua risposta corretta e scrivi la risposta.

Es)  $\frac{1}{6} + \frac{1}{6} + \frac{1}{6}$



1)  $\frac{1}{12} + \frac{1}{12}$



2)  $\frac{1}{8} + \frac{1}{8} + \frac{1}{8} + \frac{1}{8} + \frac{1}{8}$



3)  $\frac{1}{10} + \frac{1}{10} + \frac{1}{10}$



4)  $\frac{1}{4} + \frac{1}{4}$




5)  $\frac{1}{5} + \frac{1}{5}$



6)  $\frac{1}{8} + \frac{1}{8} + \frac{1}{8} + \frac{1}{8}$




7)  $\frac{1}{12} + \frac{1}{12} + \frac{1}{12} + \frac{1}{12} + \frac{1}{12} + \frac{1}{12} + \frac{1}{12}$




8)  $\frac{1}{5} + \frac{1}{5} + \frac{1}{5}$




9)  $\frac{1}{10} + \frac{1}{10}$



10)  $\frac{1}{12} + \frac{1}{12} + \frac{1}{12} + \frac{1}{12} + \frac{1}{12}$




11)  $\frac{1}{3} + \frac{1}{3}$



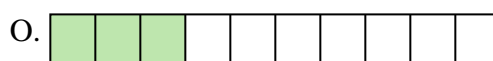
12)  $\frac{1}{10} + \frac{1}{10} + \frac{1}{10} + \frac{1}{10} + \frac{1}{10} + \frac{1}{10} + \frac{1}{10}$



13)  $\frac{1}{5} + \frac{1}{5} + \frac{1}{5} + \frac{1}{5}$



14)  $\frac{1}{6} + \frac{1}{6} + \frac{1}{6} + \frac{1}{6}$



15)  $\frac{1}{4} + \frac{1}{4} + \frac{1}{4}$

**Risposte**

Es. **K**  $\frac{3}{6}$

1. **I**  $\frac{2}{12}$

2. **M**  $\frac{5}{8}$

3. **O**  $\frac{3}{10}$

4. **B**  $\frac{2}{4}$

5. **A**  $\frac{2}{5}$

6. **G**  $\frac{4}{8}$

7. **C**  $\frac{7}{12}$

8. **L**  $\frac{3}{5}$

9. **F**  $\frac{2}{10}$

10. **N**  $\frac{5}{12}$

11. **D**  $\frac{2}{3}$

12. **H**  $\frac{7}{10}$

13. **E**  $\frac{4}{5}$

14. **P**  $\frac{4}{6}$

15. **J**  $\frac{3}{4}$





Collega ogni equazione alla sua risposta corretta e scrivi la risposta.

Es)  $\frac{1}{6} + \frac{1}{6}$



1)  $\frac{1}{8} + \frac{1}{8} + \frac{1}{8}$



2)  $\frac{1}{4} + \frac{1}{4}$




3)  $\frac{1}{3} + \frac{1}{3}$



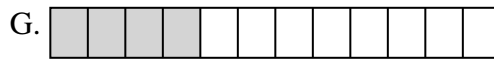
4)  $\frac{1}{4} + \frac{1}{4} + \frac{1}{4}$



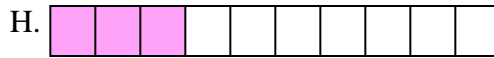
5)  $\frac{1}{5} + \frac{1}{5} + \frac{1}{5}$



6)  $\frac{1}{6} + \frac{1}{6} + \frac{1}{6} + \frac{1}{6} + \frac{1}{6}$



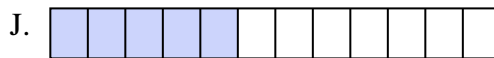
7)  $\frac{1}{10} + \frac{1}{10} + \frac{1}{10} + \frac{1}{10}$



8)  $\frac{1}{12} + \frac{1}{12} + \frac{1}{12} + \frac{1}{12} + \frac{1}{12}$



9)  $\frac{1}{8} + \frac{1}{8} + \frac{1}{8} + \frac{1}{8} + \frac{1}{8} + \frac{1}{8}$




10)  $\frac{1}{12} + \frac{1}{12}$




11)  $\frac{1}{12} + \frac{1}{12} + \frac{1}{12} + \frac{1}{12}$




12)  $\frac{1}{10} + \frac{1}{10} + \frac{1}{10}$




13)  $\frac{1}{5} + \frac{1}{5}$



14)  $\frac{1}{6} + \frac{1}{6} + \frac{1}{6} + \frac{1}{6}$



15)  $\frac{1}{5} + \frac{1}{5} + \frac{1}{5} + \frac{1}{5}$

**Risposte**Es. F  $\frac{2}{6}$ 

1. \_\_\_\_\_

2. \_\_\_\_\_

3. \_\_\_\_\_

4. \_\_\_\_\_

5. \_\_\_\_\_

6. \_\_\_\_\_

7. \_\_\_\_\_

8. \_\_\_\_\_

9. \_\_\_\_\_

10. \_\_\_\_\_

11. \_\_\_\_\_

12. \_\_\_\_\_

13. \_\_\_\_\_

14. \_\_\_\_\_

15. \_\_\_\_\_



Collega ogni equazione alla sua risposta corretta e scrivi la risposta.

Es)  $\frac{1}{6} + \frac{1}{6}$



1)  $\frac{1}{8} + \frac{1}{8} + \frac{1}{8}$



2)  $\frac{1}{4} + \frac{1}{4}$



3)  $\frac{1}{3} + \frac{1}{3}$



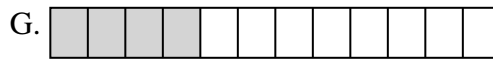
4)  $\frac{1}{4} + \frac{1}{4} + \frac{1}{4}$



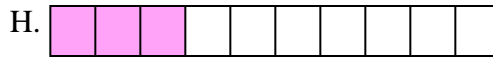
5)  $\frac{1}{5} + \frac{1}{5} + \frac{1}{5}$



6)  $\frac{1}{6} + \frac{1}{6} + \frac{1}{6} + \frac{1}{6} + \frac{1}{6}$



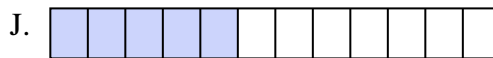
7)  $\frac{1}{10} + \frac{1}{10} + \frac{1}{10} + \frac{1}{10}$



8)  $\frac{1}{12} + \frac{1}{12} + \frac{1}{12} + \frac{1}{12} + \frac{1}{12}$



9)  $\frac{1}{8} + \frac{1}{8} + \frac{1}{8} + \frac{1}{8} + \frac{1}{8} + \frac{1}{8}$




10)  $\frac{1}{12} + \frac{1}{12}$




11)  $\frac{1}{12} + \frac{1}{12} + \frac{1}{12} + \frac{1}{12}$




12)  $\frac{1}{10} + \frac{1}{10} + \frac{1}{10}$



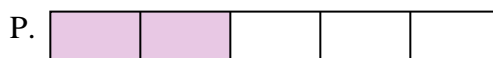
13)  $\frac{1}{5} + \frac{1}{5}$



14)  $\frac{1}{6} + \frac{1}{6} + \frac{1}{6} + \frac{1}{6}$



15)  $\frac{1}{5} + \frac{1}{5} + \frac{1}{5} + \frac{1}{5}$

**Risposte**

Es. **F**  $\frac{2}{6}$

1. **L**  $\frac{3}{8}$

2. **I**  $\frac{2}{4}$

3. **K**  $\frac{2}{3}$

4. **N**  $\frac{3}{4}$

5. **O**  $\frac{3}{5}$

6. **M**  $\frac{5}{6}$

7. **B**  $\frac{4}{10}$

8. **J**  $\frac{5}{12}$

9. **E**  $\frac{6}{8}$

10. **A**  $\frac{2}{12}$

11. **G**  $\frac{4}{12}$

12. **H**  $\frac{3}{10}$

13. **P**  $\frac{2}{5}$

14. **C**  $\frac{4}{6}$

15. **D**  $\frac{4}{5}$



Collega ogni equazione alla sua risposta corretta e scrivi la risposta.

Es)  $\frac{1}{12} + \frac{1}{12} + \frac{1}{12} + \frac{1}{12} + \frac{1}{12}$



1)  $\frac{1}{12} + \frac{1}{12}$



2)  $\frac{1}{4} + \frac{1}{4}$



3)  $\frac{1}{8} + \frac{1}{8} + \frac{1}{8} + \frac{1}{8} + \frac{1}{8}$



4)  $\frac{1}{5} + \frac{1}{5} + \frac{1}{5} + \frac{1}{5}$



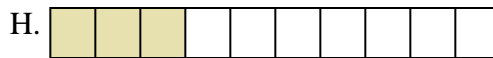
5)  $\frac{1}{5} + \frac{1}{5} + \frac{1}{5}$



6)  $\frac{1}{6} + \frac{1}{6} + \frac{1}{6} + \frac{1}{6} + \frac{1}{6}$



7)  $\frac{1}{12} + \frac{1}{12} + \frac{1}{12} + \frac{1}{12} + \frac{1}{12} + \frac{1}{12}$



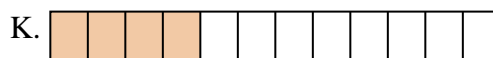
8)  $\frac{1}{4} + \frac{1}{4} + \frac{1}{4}$




9)  $\frac{1}{10} + \frac{1}{10} + \frac{1}{10}$



10)  $\frac{1}{10} + \frac{1}{10} + \frac{1}{10} + \frac{1}{10} + \frac{1}{10} + \frac{1}{10} + \frac{1}{10}$




11)  $\frac{1}{12} + \frac{1}{12} + \frac{1}{12} + \frac{1}{12}$




12)  $\frac{1}{3} + \frac{1}{3}$



13)  $\frac{1}{6} + \frac{1}{6} + \frac{1}{6}$



14)  $\frac{1}{8} + \frac{1}{8}$



15)  $\frac{1}{12} + \frac{1}{12} + \frac{1}{12} + \frac{1}{12} + \frac{1}{12} + \frac{1}{12} + \frac{1}{12}$

**Risposte**Es. **D**  $\frac{5}{12}$ 

1. \_\_\_\_\_

2. \_\_\_\_\_

3. \_\_\_\_\_

4. \_\_\_\_\_

5. \_\_\_\_\_

6. \_\_\_\_\_

7. \_\_\_\_\_

8. \_\_\_\_\_

9. \_\_\_\_\_

10. \_\_\_\_\_

11. \_\_\_\_\_

12. \_\_\_\_\_

13. \_\_\_\_\_

14. \_\_\_\_\_

15. \_\_\_\_\_



Collega ogni equazione alla sua risposta corretta e scrivi la risposta.

Es)  $\frac{1}{12} + \frac{1}{12} + \frac{1}{12} + \frac{1}{12} + \frac{1}{12}$



1)  $\frac{1}{12} + \frac{1}{12}$



2)  $\frac{1}{4} + \frac{1}{4}$



3)  $\frac{1}{8} + \frac{1}{8} + \frac{1}{8} + \frac{1}{8} + \frac{1}{8}$



4)  $\frac{1}{5} + \frac{1}{5} + \frac{1}{5} + \frac{1}{5}$



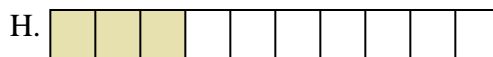
5)  $\frac{1}{5} + \frac{1}{5} + \frac{1}{5}$



6)  $\frac{1}{6} + \frac{1}{6} + \frac{1}{6} + \frac{1}{6} + \frac{1}{6}$



7)  $\frac{1}{12} + \frac{1}{12} + \frac{1}{12} + \frac{1}{12} + \frac{1}{12} + \frac{1}{12}$



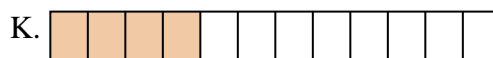
8)  $\frac{1}{4} + \frac{1}{4} + \frac{1}{4}$




9)  $\frac{1}{10} + \frac{1}{10} + \frac{1}{10}$



10)  $\frac{1}{10} + \frac{1}{10} + \frac{1}{10} + \frac{1}{10} + \frac{1}{10} + \frac{1}{10} + \frac{1}{10}$




11)  $\frac{1}{12} + \frac{1}{12} + \frac{1}{12} + \frac{1}{12}$




12)  $\frac{1}{3} + \frac{1}{3}$



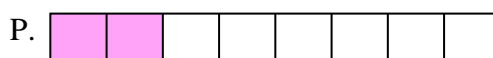
13)  $\frac{1}{6} + \frac{1}{6} + \frac{1}{6}$



14)  $\frac{1}{8} + \frac{1}{8}$



15)  $\frac{1}{12} + \frac{1}{12} + \frac{1}{12} + \frac{1}{12} + \frac{1}{12} + \frac{1}{12} + \frac{1}{12}$

**Risposte**Es. **D**  $\frac{5}{12}$ 1. **M**  $\frac{2}{12}$ 2. **B**  $\frac{2}{4}$ 3. **E**  $\frac{5}{8}$ 4. **O**  $\frac{4}{5}$ 5. **N**  $\frac{3}{5}$ 6. **F**  $\frac{5}{6}$ 7. **A**  $\frac{6}{12}$ 8. **I**  $\frac{3}{4}$ 9. **H**  $\frac{3}{10}$ 10. **L**  $\frac{7}{10}$ 11. **K**  $\frac{4}{12}$ 12. **G**  $\frac{2}{3}$ 13. **J**  $\frac{3}{6}$ 14. **P**  $\frac{2}{8}$ 15. **C**  $\frac{7}{12}$



Collega ogni equazione alla sua risposta corretta e scrivi la risposta.

Es)  $\frac{1}{8} + \frac{1}{8} + \frac{1}{8}$



1)  $\frac{1}{12} + \frac{1}{12} + \frac{1}{12} + \frac{1}{12} + \frac{1}{12} + \frac{1}{12}$




2)  $\frac{1}{5} + \frac{1}{5} + \frac{1}{5}$




3)  $\frac{1}{8} + \frac{1}{8}$



4)  $\frac{1}{6} + \frac{1}{6} + \frac{1}{6}$




5)  $\frac{1}{3} + \frac{1}{3}$




6)  $\frac{1}{4} + \frac{1}{4}$




7)  $\frac{1}{8} + \frac{1}{8} + \frac{1}{8} + \frac{1}{8} + \frac{1}{8} + \frac{1}{8}$



8)  $\frac{1}{4} + \frac{1}{4} + \frac{1}{4}$



9)  $\frac{1}{12} + \frac{1}{12} + \frac{1}{12} + \frac{1}{12}$



10)  $\frac{1}{10} + \frac{1}{10} + \frac{1}{10} + \frac{1}{10} + \frac{1}{10} + \frac{1}{10} + \frac{1}{10}$



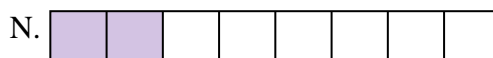
11)  $\frac{1}{8} + \frac{1}{8} + \frac{1}{8} + \frac{1}{8} + \frac{1}{8}$



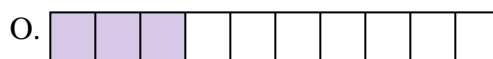
12)  $\frac{1}{5} + \frac{1}{5} + \frac{1}{5} + \frac{1}{5}$



13)  $\frac{1}{6} + \frac{1}{6} + \frac{1}{6} + \frac{1}{6} + \frac{1}{6}$



14)  $\frac{1}{10} + \frac{1}{10} + \frac{1}{10} + \frac{1}{10} + \frac{1}{10} + \frac{1}{10}$



15)  $\frac{1}{10} + \frac{1}{10} + \frac{1}{10}$

RisposteEs. K  $\frac{3}{8}$ 

1. \_\_\_\_\_

2. \_\_\_\_\_

3. \_\_\_\_\_

4. \_\_\_\_\_

5. \_\_\_\_\_

6. \_\_\_\_\_

7. \_\_\_\_\_

8. \_\_\_\_\_

9. \_\_\_\_\_

10. \_\_\_\_\_

11. \_\_\_\_\_

12. \_\_\_\_\_

13. \_\_\_\_\_

14. \_\_\_\_\_

15. \_\_\_\_\_



Collega ogni equazione alla sua risposta corretta e scrivi la risposta.

Es)  $\frac{1}{8} + \frac{1}{8} + \frac{1}{8}$



1)  $\frac{1}{12} + \frac{1}{12} + \frac{1}{12} + \frac{1}{12} + \frac{1}{12} + \frac{1}{12}$




2)  $\frac{1}{5} + \frac{1}{5} + \frac{1}{5}$




3)  $\frac{1}{8} + \frac{1}{8}$



4)  $\frac{1}{6} + \frac{1}{6} + \frac{1}{6}$




5)  $\frac{1}{3} + \frac{1}{3}$




6)  $\frac{1}{4} + \frac{1}{4}$




7)  $\frac{1}{8} + \frac{1}{8} + \frac{1}{8} + \frac{1}{8} + \frac{1}{8} + \frac{1}{8}$



8)  $\frac{1}{4} + \frac{1}{4} + \frac{1}{4}$



9)  $\frac{1}{12} + \frac{1}{12} + \frac{1}{12} + \frac{1}{12}$



10)  $\frac{1}{10} + \frac{1}{10} + \frac{1}{10} + \frac{1}{10} + \frac{1}{10} + \frac{1}{10} + \frac{1}{10}$



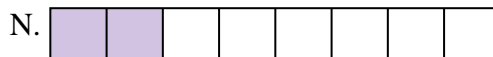
11)  $\frac{1}{8} + \frac{1}{8} + \frac{1}{8} + \frac{1}{8} + \frac{1}{8}$



12)  $\frac{1}{5} + \frac{1}{5} + \frac{1}{5} + \frac{1}{5}$



13)  $\frac{1}{6} + \frac{1}{6} + \frac{1}{6} + \frac{1}{6} + \frac{1}{6}$



14)  $\frac{1}{10} + \frac{1}{10} + \frac{1}{10} + \frac{1}{10} + \frac{1}{10} + \frac{1}{10}$



15)  $\frac{1}{10} + \frac{1}{10} + \frac{1}{10}$

**Risposte**

Es. **K**  $\frac{3}{8}$

1. **G**  $\frac{6}{12}$

2. **J**  $\frac{3}{5}$

3. **N**  $\frac{2}{8}$

4. **B**  $\frac{3}{6}$

5. **H**  $\frac{2}{3}$

6. **L**  $\frac{2}{4}$

7. **F**  $\frac{6}{8}$

8. **P**  $\frac{3}{4}$

9. **C**  $\frac{4}{12}$

10. **E**  $\frac{7}{10}$

11. **A**  $\frac{5}{8}$

12. **I**  $\frac{4}{5}$

13. **M**  $\frac{5}{6}$


14. **D**  $\frac{6}{10}$

15. **O**  $\frac{3}{10}$



Collega ogni equazione alla sua risposta corretta e scrivi la risposta.

Es)  $\frac{1}{5} + \frac{1}{5} + \frac{1}{5} + \frac{1}{5}$



1)  $\frac{1}{3} + \frac{1}{3}$




2)  $\frac{1}{10} + \frac{1}{10} + \frac{1}{10}$



3)  $\frac{1}{6} + \frac{1}{6} + \frac{1}{6} + \frac{1}{6} + \frac{1}{6}$




4)  $\frac{1}{10} + \frac{1}{10} + \frac{1}{10} + \frac{1}{10} + \frac{1}{10} + \frac{1}{10}$




5)  $\frac{1}{8} + \frac{1}{8} + \frac{1}{8} + \frac{1}{8}$



6)  $\frac{1}{6} + \frac{1}{6}$



7)  $\frac{1}{4} + \frac{1}{4} + \frac{1}{4}$



8)  $\frac{1}{4} + \frac{1}{4}$




9)  $\frac{1}{12} + \frac{1}{12} + \frac{1}{12}$



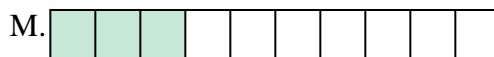
10)  $\frac{1}{8} + \frac{1}{8} + \frac{1}{8} + \frac{1}{8} + \frac{1}{8}$



11)  $\frac{1}{5} + \frac{1}{5} + \frac{1}{5}$



12)  $\frac{1}{12} + \frac{1}{12} + \frac{1}{12} + \frac{1}{12} + \frac{1}{12} + \frac{1}{12} + \frac{1}{12}$



13)  $\frac{1}{8} + \frac{1}{8} + \frac{1}{8}$



14)  $\frac{1}{8} + \frac{1}{8} + \frac{1}{8} + \frac{1}{8} + \frac{1}{8} + \frac{1}{8} + \frac{1}{8}$



15)  $\frac{1}{10} + \frac{1}{10} + \frac{1}{10} + \frac{1}{10}$

**Risposte**Es.     G     $\frac{4}{5}$ 

1. \_\_\_\_\_

2. \_\_\_\_\_

3. \_\_\_\_\_

4. \_\_\_\_\_

5. \_\_\_\_\_

6. \_\_\_\_\_

7. \_\_\_\_\_

8. \_\_\_\_\_

9. \_\_\_\_\_

10. \_\_\_\_\_

11. \_\_\_\_\_

12. \_\_\_\_\_

13. \_\_\_\_\_

14. \_\_\_\_\_

15. \_\_\_\_\_



Collega ogni equazione alla sua risposta corretta e scrivi la risposta.

Es)  $\frac{1}{5} + \frac{1}{5} + \frac{1}{5} + \frac{1}{5}$



1)  $\frac{1}{3} + \frac{1}{3}$




2)  $\frac{1}{10} + \frac{1}{10} + \frac{1}{10}$



3)  $\frac{1}{6} + \frac{1}{6} + \frac{1}{6} + \frac{1}{6} + \frac{1}{6}$




4)  $\frac{1}{10} + \frac{1}{10} + \frac{1}{10} + \frac{1}{10} + \frac{1}{10} + \frac{1}{10}$




5)  $\frac{1}{8} + \frac{1}{8} + \frac{1}{8} + \frac{1}{8}$



6)  $\frac{1}{6} + \frac{1}{6}$



7)  $\frac{1}{4} + \frac{1}{4} + \frac{1}{4}$



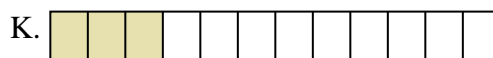
8)  $\frac{1}{4} + \frac{1}{4}$




9)  $\frac{1}{12} + \frac{1}{12} + \frac{1}{12}$



10)  $\frac{1}{8} + \frac{1}{8} + \frac{1}{8} + \frac{1}{8} + \frac{1}{8}$



11)  $\frac{1}{5} + \frac{1}{5} + \frac{1}{5}$



12)  $\frac{1}{12} + \frac{1}{12} + \frac{1}{12} + \frac{1}{12} + \frac{1}{12} + \frac{1}{12} + \frac{1}{12}$




13)  $\frac{1}{8} + \frac{1}{8} + \frac{1}{8}$



14)  $\frac{1}{8} + \frac{1}{8} + \frac{1}{8} + \frac{1}{8} + \frac{1}{8} + \frac{1}{8} + \frac{1}{8}$



15)  $\frac{1}{10} + \frac{1}{10} + \frac{1}{10} + \frac{1}{10}$

**Risposte**

Es. **G**  $\frac{4}{5}$

1. **I**  $\frac{2}{3}$

2. **M**  $\frac{3}{10}$

3. **B**  $\frac{5}{6}$

4. **L**  $\frac{6}{10}$

5. **P**  $\frac{4}{8}$

6. **A**  $\frac{2}{6}$

7. **J**  $\frac{3}{4}$

8. **E**  $\frac{2}{4}$

9. **K**  $\frac{3}{12}$

10. **O**  $\frac{5}{8}$

11. **H**  $\frac{3}{5}$

12. **N**  $\frac{7}{12}$

13. **D**  $\frac{3}{8}$

14. **F**  $\frac{7}{8}$

15. **C**  $\frac{4}{10}$





Collega ogni equazione alla sua risposta corretta e scrivi la risposta.

Es)  $\frac{1}{6} + \frac{1}{6} + \frac{1}{6} + \frac{1}{6}$




1)  $\frac{1}{10} + \frac{1}{10} + \frac{1}{10}$




2)  $\frac{1}{5} + \frac{1}{5} + \frac{1}{5}$



3)  $\frac{1}{8} + \frac{1}{8} + \frac{1}{8} + \frac{1}{8} + \frac{1}{8} + \frac{1}{8}$




4)  $\frac{1}{3} + \frac{1}{3}$



5)  $\frac{1}{10} + \frac{1}{10} + \frac{1}{10} + \frac{1}{10} + \frac{1}{10}$



6)  $\frac{1}{10} + \frac{1}{10} + \frac{1}{10} + \frac{1}{10} + \frac{1}{10} + \frac{1}{10} + \frac{1}{10}$




7)  $\frac{1}{8} + \frac{1}{8} + \frac{1}{8} + \frac{1}{8} + \frac{1}{8} + \frac{1}{8} + \frac{1}{8}$



8)  $\frac{1}{8} + \frac{1}{8} + \frac{1}{8} + \frac{1}{8} + \frac{1}{8}$



9)  $\frac{1}{10} + \frac{1}{10} + \frac{1}{10} + \frac{1}{10} + \frac{1}{10} + \frac{1}{10}$




10)  $\frac{1}{8} + \frac{1}{8}$



11)  $\frac{1}{6} + \frac{1}{6} + \frac{1}{6} + \frac{1}{6} + \frac{1}{6}$



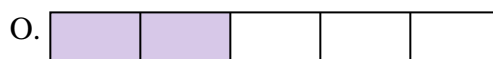
12)  $\frac{1}{5} + \frac{1}{5}$



13)  $\frac{1}{4} + \frac{1}{4} + \frac{1}{4}$



14)  $\frac{1}{12} + \frac{1}{12} + \frac{1}{12} + \frac{1}{12} + \frac{1}{12} + \frac{1}{12}$



15)  $\frac{1}{8} + \frac{1}{8} + \frac{1}{8} + \frac{1}{8}$

**Risposte**Es. **P**  $\frac{4}{6}$ 

1. \_\_\_\_\_

2. \_\_\_\_\_

3. \_\_\_\_\_

4. \_\_\_\_\_

5. \_\_\_\_\_

6. \_\_\_\_\_

7. \_\_\_\_\_

8. \_\_\_\_\_

9. \_\_\_\_\_

10. \_\_\_\_\_

11. \_\_\_\_\_

12. \_\_\_\_\_

13. \_\_\_\_\_


14. \_\_\_\_\_

15. \_\_\_\_\_



Collega ogni equazione alla sua risposta corretta e scrivi la risposta.


Es)  $\frac{1}{6} + \frac{1}{6} + \frac{1}{6} + \frac{1}{6}$




1)  $\frac{1}{10} + \frac{1}{10} + \frac{1}{10}$




2)  $\frac{1}{5} + \frac{1}{5} + \frac{1}{5}$



3)  $\frac{1}{8} + \frac{1}{8} + \frac{1}{8} + \frac{1}{8} + \frac{1}{8} + \frac{1}{8}$



4)  $\frac{1}{3} + \frac{1}{3}$



5)  $\frac{1}{10} + \frac{1}{10} + \frac{1}{10} + \frac{1}{10} + \frac{1}{10}$




6)  $\frac{1}{10} + \frac{1}{10} + \frac{1}{10} + \frac{1}{10} + \frac{1}{10} + \frac{1}{10} + \frac{1}{10}$




7)  $\frac{1}{8} + \frac{1}{8} + \frac{1}{8} + \frac{1}{8} + \frac{1}{8} + \frac{1}{8} + \frac{1}{8}$




8)  $\frac{1}{8} + \frac{1}{8} + \frac{1}{8} + \frac{1}{8} + \frac{1}{8}$



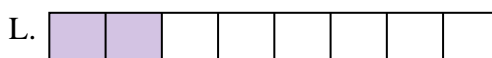
9)  $\frac{1}{10} + \frac{1}{10} + \frac{1}{10} + \frac{1}{10} + \frac{1}{10} + \frac{1}{10}$




10)  $\frac{1}{8} + \frac{1}{8}$



11)  $\frac{1}{6} + \frac{1}{6} + \frac{1}{6} + \frac{1}{6} + \frac{1}{6}$




12)  $\frac{1}{5} + \frac{1}{5}$




13)  $\frac{1}{4} + \frac{1}{4} + \frac{1}{4}$



14)  $\frac{1}{12} + \frac{1}{12} + \frac{1}{12} + \frac{1}{12} + \frac{1}{12} + \frac{1}{12}$



15)  $\frac{1}{8} + \frac{1}{8} + \frac{1}{8} + \frac{1}{8}$

**Risposte**

Es. **P**  $\frac{4}{6}$

1. **A**  $\frac{3}{10}$

2. **E**  $\frac{3}{5}$

3. **K**  $\frac{6}{8}$

4. **D**  $\frac{2}{3}$

5. **C**  $\frac{5}{10}$

6. **I**  $\frac{7}{10}$

7. **M**  $\frac{7}{8}$

8. **B**  $\frac{5}{8}$

9. **J**  $\frac{6}{10}$

10. **L**  $\frac{2}{8}$

11. **H**  $\frac{5}{6}$

12. **O**  $\frac{2}{5}$

13. **F**  $\frac{3}{4}$

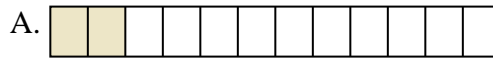
14. **G**  $\frac{6}{12}$

15. **N**  $\frac{4}{8}$



Collega ogni equazione alla sua risposta corretta e scrivi la risposta.

Es)  $\frac{1}{6} + \frac{1}{6}$



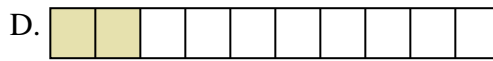
1)  $\frac{1}{3} + \frac{1}{3}$



2)  $\frac{1}{12} + \frac{1}{12} + \frac{1}{12} + \frac{1}{12} + \frac{1}{12}$



3)  $\frac{1}{5} + \frac{1}{5}$



4)  $\frac{1}{8} + \frac{1}{8} + \frac{1}{8} + \frac{1}{8} + \frac{1}{8} + \frac{1}{8}$



5)  $\frac{1}{6} + \frac{1}{6} + \frac{1}{6} + \frac{1}{6} + \frac{1}{6}$




6)  $\frac{1}{12} + \frac{1}{12} + \frac{1}{12} + \frac{1}{12} + \frac{1}{12} + \frac{1}{12} + \frac{1}{12}$



7)  $\frac{1}{5} + \frac{1}{5} + \frac{1}{5}$




8)  $\frac{1}{8} + \frac{1}{8} + \frac{1}{8}$



9)  $\frac{1}{5} + \frac{1}{5} + \frac{1}{5} + \frac{1}{5}$



10)  $\frac{1}{8} + \frac{1}{8} + \frac{1}{8} + \frac{1}{8}$




11)  $\frac{1}{4} + \frac{1}{4}$



12)  $\frac{1}{10} + \frac{1}{10}$



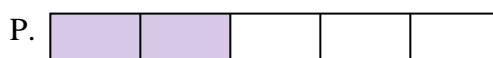
13)  $\frac{1}{4} + \frac{1}{4} + \frac{1}{4}$



14)  $\frac{1}{10} + \frac{1}{10} + \frac{1}{10} + \frac{1}{10}$



15)  $\frac{1}{12} + \frac{1}{12}$

**Risposte**Es. C  $\frac{2}{6}$ 

1. \_\_\_\_\_

2. \_\_\_\_\_

3. \_\_\_\_\_

4. \_\_\_\_\_

5. \_\_\_\_\_

6. \_\_\_\_\_

7. \_\_\_\_\_

8. \_\_\_\_\_

9. \_\_\_\_\_

10. \_\_\_\_\_

11. \_\_\_\_\_

12. \_\_\_\_\_

13. \_\_\_\_\_

14. \_\_\_\_\_

15. \_\_\_\_\_



Collega ogni equazione alla sua risposta corretta e scrivi la risposta.


Es)  $\frac{1}{6} + \frac{1}{6}$




1)  $\frac{1}{3} + \frac{1}{3}$



2)  $\frac{1}{12} + \frac{1}{12} + \frac{1}{12} + \frac{1}{12} + \frac{1}{12}$



3)  $\frac{1}{5} + \frac{1}{5}$



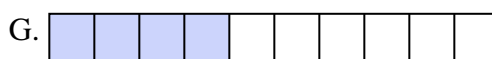
4)  $\frac{1}{8} + \frac{1}{8} + \frac{1}{8} + \frac{1}{8} + \frac{1}{8} + \frac{1}{8}$




5)  $\frac{1}{6} + \frac{1}{6} + \frac{1}{6} + \frac{1}{6} + \frac{1}{6}$




6)  $\frac{1}{12} + \frac{1}{12} + \frac{1}{12} + \frac{1}{12} + \frac{1}{12} + \frac{1}{12} + \frac{1}{12}$



7)  $\frac{1}{5} + \frac{1}{5} + \frac{1}{5}$




8)  $\frac{1}{8} + \frac{1}{8} + \frac{1}{8}$



9)  $\frac{1}{5} + \frac{1}{5} + \frac{1}{5} + \frac{1}{5}$



10)  $\frac{1}{8} + \frac{1}{8} + \frac{1}{8} + \frac{1}{8}$




11)  $\frac{1}{4} + \frac{1}{4}$



12)  $\frac{1}{10} + \frac{1}{10}$




13)  $\frac{1}{4} + \frac{1}{4} + \frac{1}{4}$



14)  $\frac{1}{10} + \frac{1}{10} + \frac{1}{10} + \frac{1}{10}$



15)  $\frac{1}{12} + \frac{1}{12}$

**Risposte**

Es. **C**  $\frac{2}{6}$

1. **O**  $\frac{2}{3}$

2. **F**  $\frac{5}{12}$

3. **P**  $\frac{2}{5}$

4. **M**  $\frac{6}{8}$

5. **E**  $\frac{5}{6}$

6. **I**  $\frac{7}{12}$

7. **N**  $\frac{3}{5}$

8. **H**  $\frac{3}{8}$

9. **K**  $\frac{4}{5}$

10. **J**  $\frac{4}{8}$

11. **L**  $\frac{2}{4}$

12. **D**  $\frac{2}{10}$

13. **B**  $\frac{3}{4}$

14. **G**  $\frac{4}{10}$

15. **A**  $\frac{2}{12}$